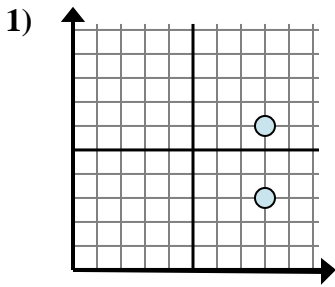


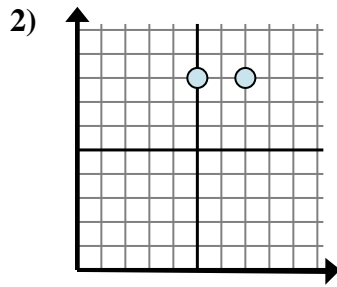


Determina quale espressione mostra meglio la distanza tra i due punti.

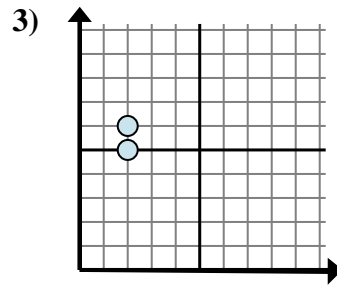
Risposte



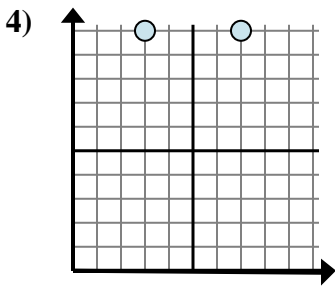
- A. $6 - 3$
- B. $6 - 8$
- C. $8 - 8$
- D. $3 - 8$



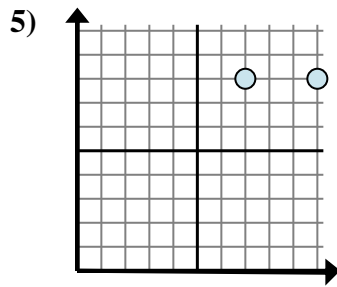
- A. $8 - 7$
- B. $7 - 5$
- C. $8 - 7$
- D. $8 - 8$



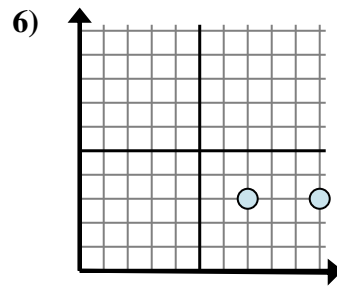
- A. $6 - 5$
- B. $2 - 5$
- C. $5 - 2$
- D. $6 - 2$



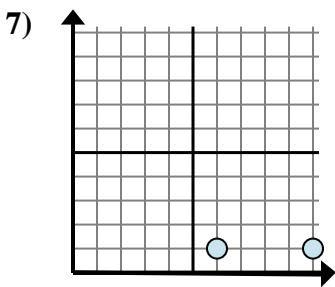
- A. $7 - 3$
- B. $10 - 3$
- C. $10 - 3$
- D. $10 - 10$



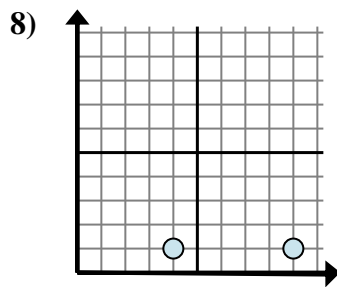
- A. $8 - 8$
- B. $10 - 8$
- C. $7 - 8$
- D. $10 - 7$



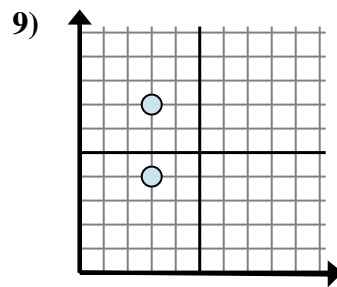
- A. $10 - 7$
- B. $7 - 3$
- C. $3 - 10$
- D. $3 - 10$



- A. $10 - 6$
- B. $6 - 1$
- C. $6 - 10$
- D. $1 - 1$



- A. $4 - 9$
- B. $9 - 4$
- C. $1 - 9$
- D. $4 - 1$



- A. $3 - 3$
- B. $4 - 3$
- C. $3 - 3$
- D. $7 - 4$

1. _____

2. _____

3. _____

4. _____

5. _____

6. _____

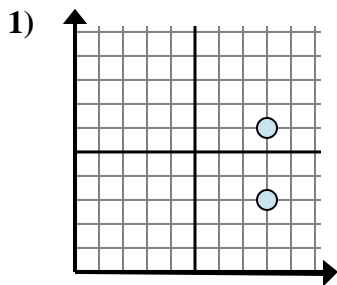
7. _____

8. _____

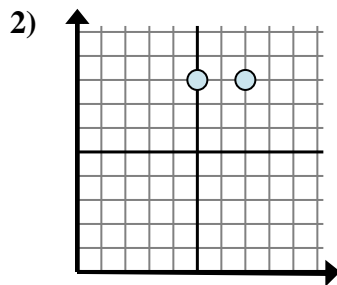
9. _____



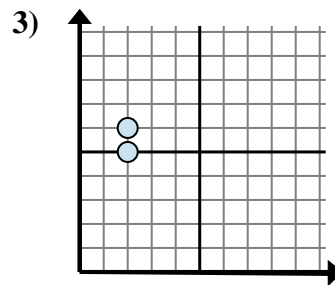
Determina quale espressione mostra meglio la distanza tra i due punti.



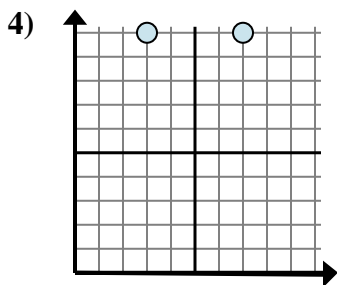
- A. $6 - 3$
 B. $6 - 8$
 C. $8 - 8$
 D. $3 - 8$



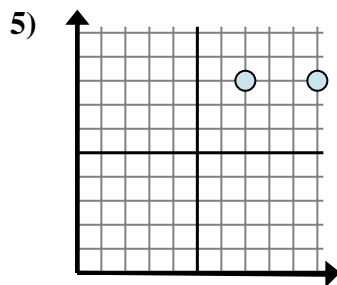
- A. $8 - 7$
 B. $7 - 5$
 C. $8 - 7$
 D. $8 - 8$



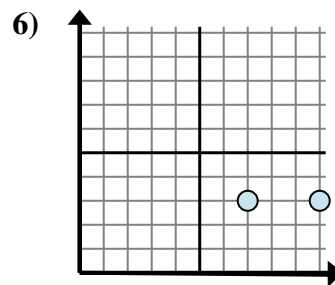
- A. $6 - 5$
 B. $2 - 5$
 C. $5 - 2$
 D. $6 - 2$



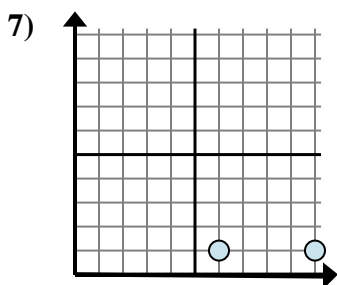
- A. $7 - 3$
 B. $10 - 3$
 C. $10 - 3$
 D. $10 - 10$



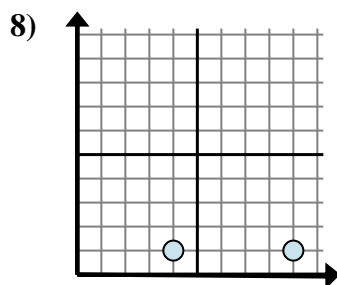
- A. $8 - 8$
 B. $10 - 8$
 C. $7 - 8$
 D. $10 - 7$



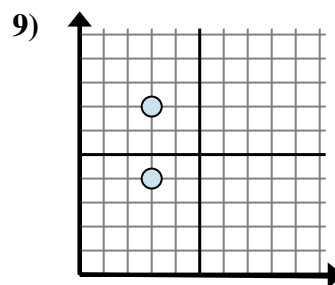
- A. $10 - 7$
 B. $7 - 3$
 C. $3 - 10$
 D. $3 - 10$



- A. $10 - 6$
 B. $6 - 1$
 C. $6 - 10$
 D. $1 - 1$



- A. $4 - 9$
 B. $9 - 4$
 C. $1 - 9$
 D. $4 - 1$



- A. $3 - 3$
 B. $4 - 3$
 C. $3 - 3$
 D. $7 - 4$

Risposte1. **A**2. **B**3. **A**4. **A**5. **D**6. **A**7. **A**8. **B**9. **D**