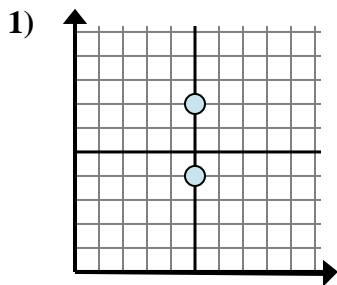
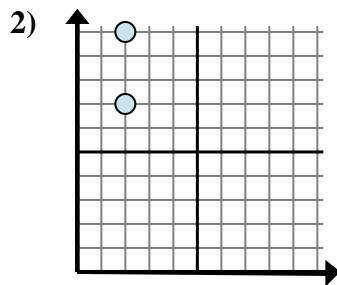




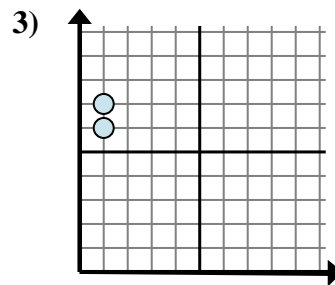
Determina quale espressione mostra meglio la distanza tra i due punti.

Risposte

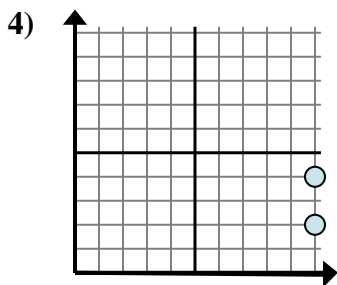
- A. $5 - 5$
 B. $7 - 4$
 C. $7 - 5$
 D. $5 - 4$



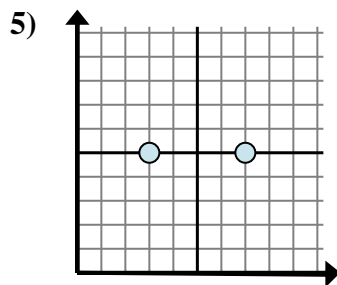
- A. $10 - 2$
 B. $2 - 10$
 C. $2 - 2$
 D. $10 - 7$



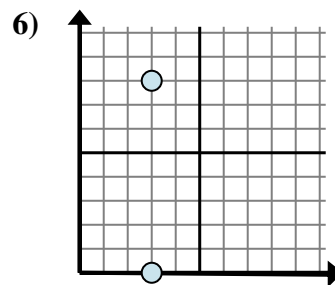
- A. $7 - 6$
 B. $1 - 6$
 C. $6 - 1$
 D. $1 - 1$



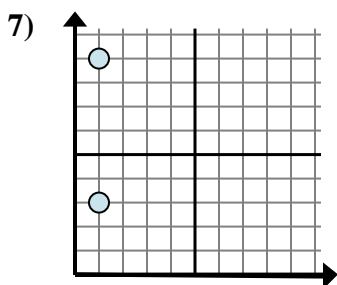
- A. $10 - 4$
 B. $10 - 4$
 C. $2 - 10$
 D. $4 - 2$



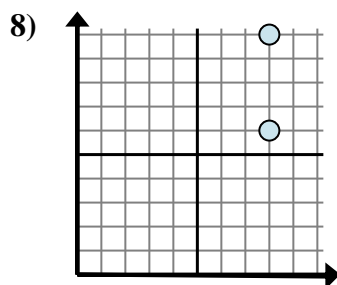
- A. $7 - 5$
 B. $7 - 3$
 C. $5 - 7$
 D. $3 - 7$



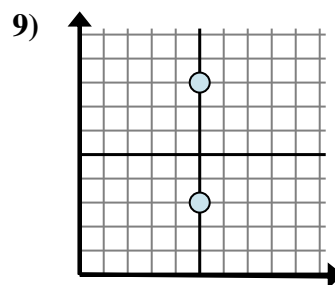
- A. $3 - 3$
 B. $8 - 0$
 C. $3 - 0$
 D. $0 - 8$



- A. $9 - 1$
 B. $9 - 3$
 C. $1 - 1$
 D. $1 - 1$



- A. $8 - 6$
 B. $8 - 6$
 C. $10 - 8$
 D. $10 - 6$

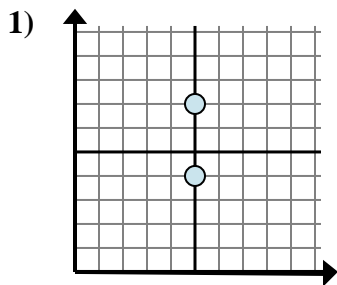


- A. $8 - 3$
 B. $5 - 5$
 C. $8 - 5$
 D. $5 - 8$

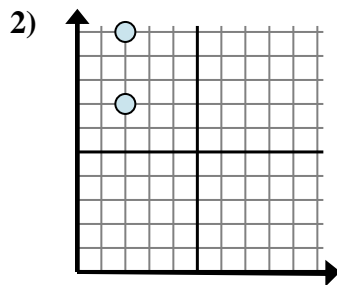
1. _____
 2. _____
 3. _____
 4. _____
 5. _____
 6. _____
 7. _____
 8. _____
 9. _____



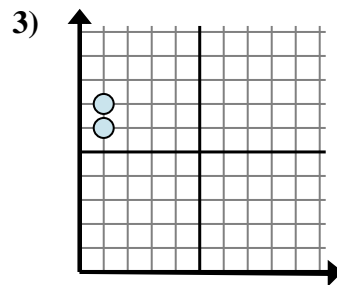
Determina quale espressione mostra meglio la distanza tra i due punti.



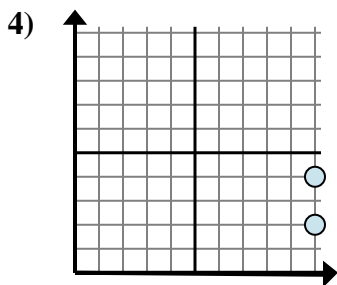
- A. $5 - 5$
 B. $7 - 4$
 C. $7 - 5$
 D. $5 - 4$



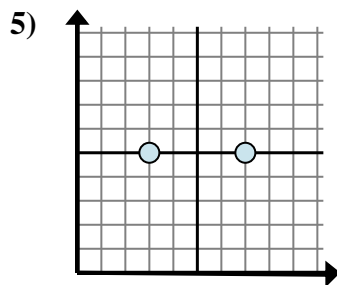
- A. $10 - 2$
 B. $2 - 10$
 C. $2 - 2$
 D. $10 - 7$



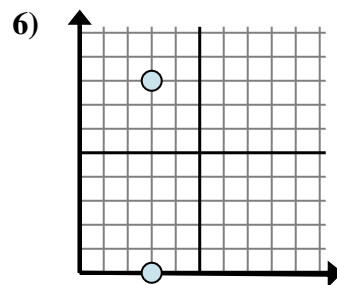
- A. $7 - 6$
 B. $1 - 6$
 C. $6 - 1$
 D. $1 - 1$



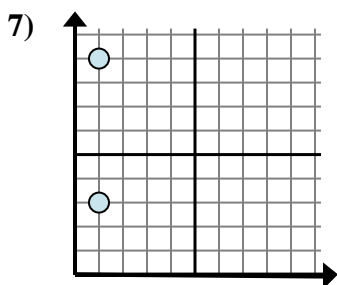
- A. $10 - 4$
 B. $10 - 4$
 C. $2 - 10$
 D. $4 - 2$



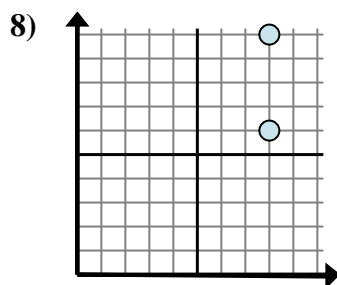
- A. $7 - 5$
 B. $7 - 3$
 C. $5 - 7$
 D. $3 - 7$



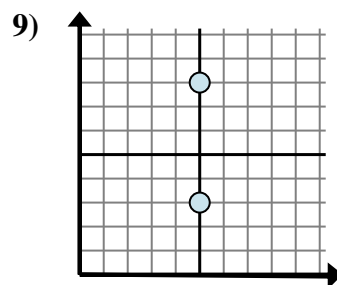
- A. $3 - 3$
 B. $8 - 0$
 C. $3 - 0$
 D. $0 - 8$



- A. $9 - 1$
 B. $9 - 3$
 C. $1 - 1$
 D. $1 - 1$



- A. $8 - 6$
 B. $8 - 6$
 C. $10 - 8$
 D. $10 - 6$



- A. $8 - 3$
 B. $5 - 5$
 C. $8 - 5$
 D. $5 - 8$

Risposte1. **B**2. **D**3. **A**4. **D**5. **B**6. **B**7. **B**8. **D**9. **A**