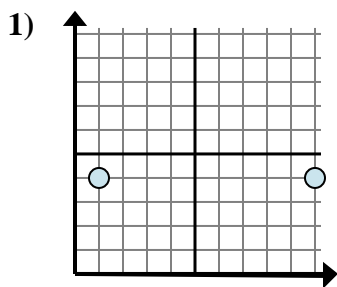


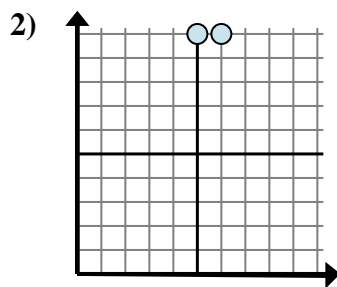


Determina quale espressione mostra meglio la distanza tra i due punti.

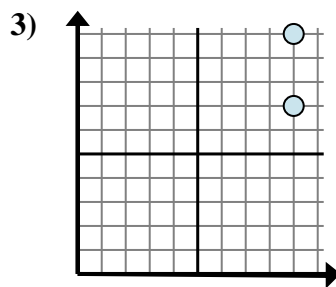
Risposte



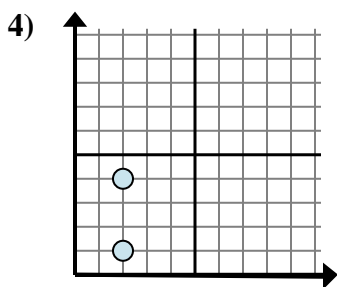
- A. $4 - 4$
- B. $4 - 4$
- C. $4 - 10$
- D. $10 - 1$



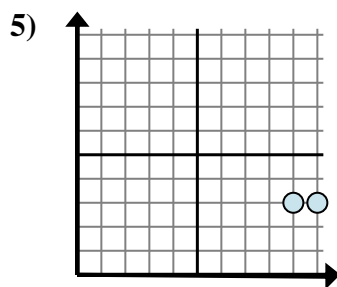
- A. $6 - 10$
- B. $5 - 10$
- C. $6 - 5$
- D. $10 - 5$



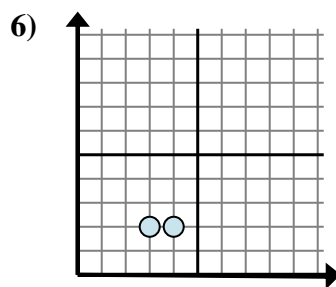
- A. $10 - 7$
- B. $9 - 9$
- C. $7 - 10$
- D. $9 - 7$



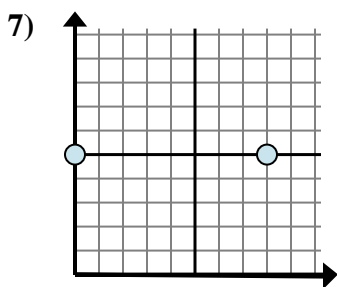
- A. $2 - 4$
- B. $4 - 1$
- C. $1 - 4$
- D. $2 - 2$



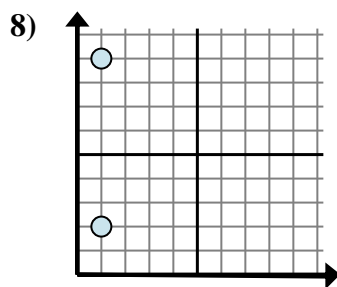
- A. $9 - 10$
- B. $10 - 3$
- C. $3 - 9$
- D. $10 - 9$



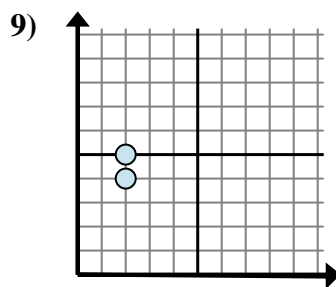
- A. $3 - 2$
- B. $2 - 4$
- C. $2 - 4$
- D. $4 - 3$



- A. $5 - 8$
- B. $5 - 5$
- C. $8 - 0$
- D. $8 - 5$



- A. $1 - 1$
- B. $1 - 2$
- C. $9 - 2$
- D. $2 - 9$



- A. $5 - 2$
- B. $5 - 4$
- C. $2 - 2$
- D. $2 - 2$

1. _____

2. _____

3. _____

4. _____

5. _____

6. _____

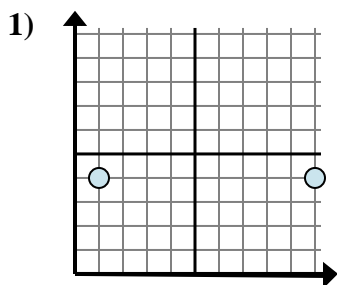
7. _____

8. _____

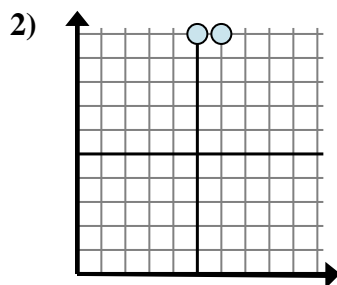
9. _____



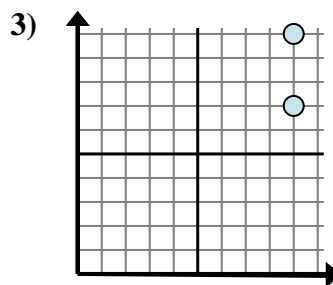
Determina quale espressione mostra meglio la distanza tra i due punti.



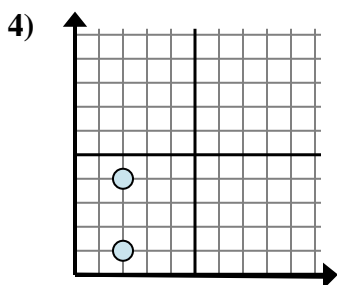
- A. $4 - 4$
 B. $4 - 4$
 C. $4 - 10$
 D. $10 - 1$



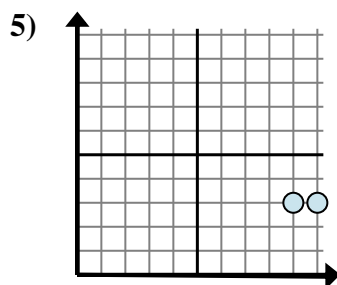
- A. $6 - 10$
 B. $5 - 10$
 C. $6 - 5$
 D. $10 - 5$



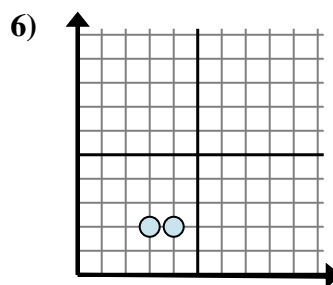
- A. $10 - 7$
 B. $9 - 9$
 C. $7 - 10$
 D. $9 - 7$



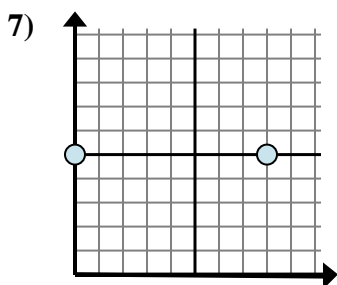
- A. $2 - 4$
 B. $4 - 1$
 C. $1 - 4$
 D. $2 - 2$



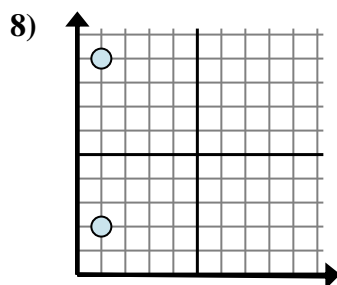
- A. $9 - 10$
 B. $10 - 3$
 C. $3 - 9$
 D. $10 - 9$



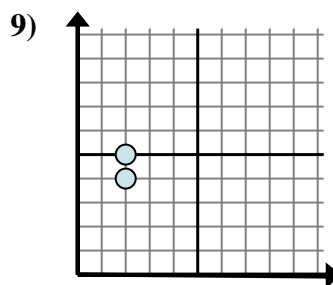
- A. $3 - 2$
 B. $2 - 4$
 C. $2 - 4$
 D. $4 - 3$



- A. $5 - 8$
 B. $5 - 5$
 C. $8 - 0$
 D. $8 - 5$



- A. $1 - 1$
 B. $1 - 2$
 C. $9 - 2$
 D. $2 - 9$



- A. $5 - 2$
 B. $5 - 4$
 C. $2 - 2$
 D. $2 - 2$

Risposte1. **D**2. **C**3. **A**4. **B**5. **D**6. **D**7. **C**8. **C**9. **B**