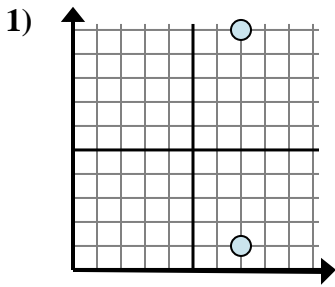


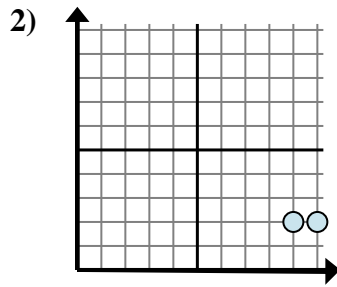


Determina quale espressione mostra meglio la distanza tra i due punti.

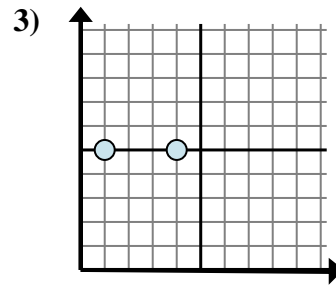
Risposte



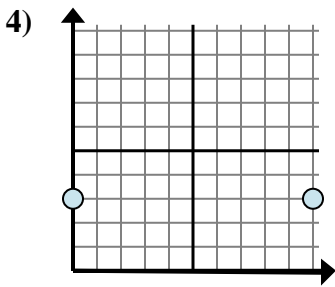
- A. $7 - 1$
- B. $10 - 7$
- C. $7 - 1$
- D. $10 - 1$



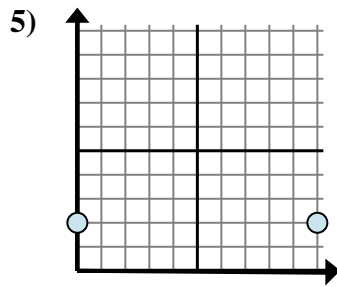
- A. $10 - 9$
- B. $2 - 2$
- C. $2 - 2$
- D. $9 - 2$



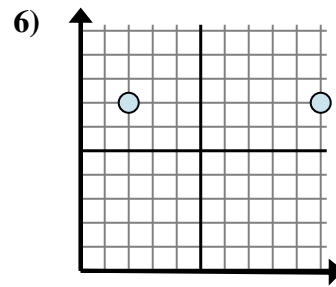
- A. $4 - 1$
- B. $1 - 5$
- C. $5 - 1$
- D. $4 - 5$



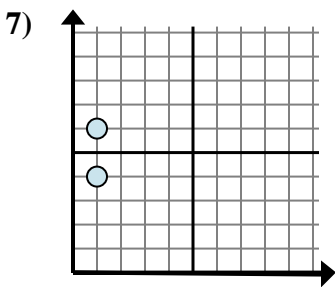
- A. $10 - 3$
- B. $10 - 0$
- C. $3 - 0$
- D. $3 - 3$



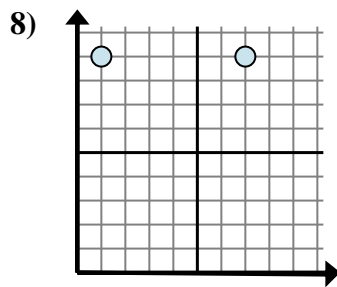
- A. $2 - 2$
- B. $10 - 2$
- C. $2 - 0$
- D. $10 - 0$



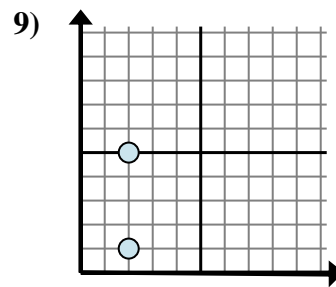
- A. $10 - 2$
- B. $7 - 2$
- C. $2 - 10$
- D. $10 - 7$



- A. $1 - 4$
- B. $6 - 1$
- C. $1 - 4$
- D. $6 - 4$



- A. $1 - 9$
- B. $7 - 1$
- C. $1 - 7$
- D. $7 - 9$



- A. $5 - 1$
- B. $2 - 2$
- C. $5 - 2$
- D. $2 - 1$

1. _____

2. _____

3. _____

4. _____

5. _____

6. _____

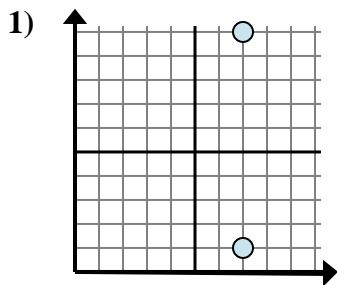
7. _____

8. _____

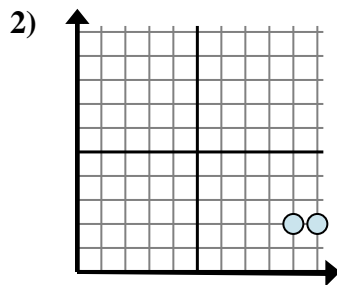
9. _____



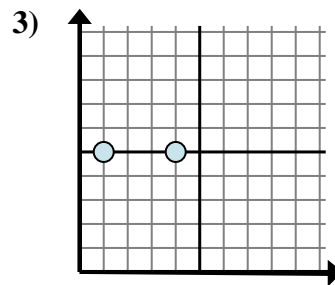
Determina quale espressione mostra meglio la distanza tra i due punti.



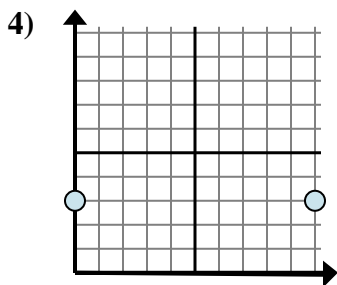
- A. $7 - 1$
 B. $10 - 7$
 C. $7 - 1$
 D. $10 - 1$



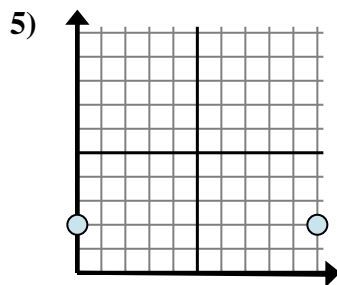
- A. $10 - 9$
 B. $2 - 2$
 C. $2 - 2$
 D. $9 - 2$



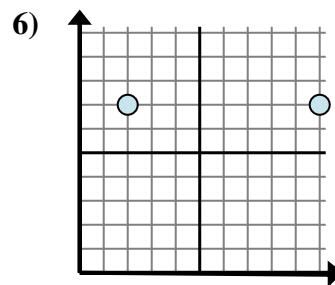
- A. $4 - 1$
 B. $1 - 5$
 C. $5 - 1$
 D. $4 - 5$



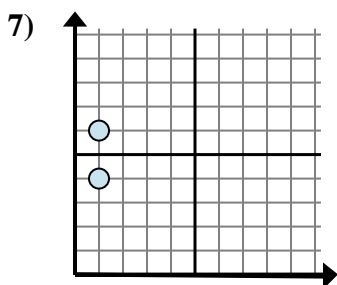
- A. $10 - 3$
 B. $10 - 0$
 C. $3 - 0$
 D. $3 - 3$



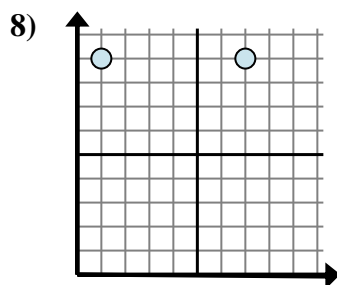
- A. $2 - 2$
 B. $10 - 2$
 C. $2 - 0$
 D. $10 - 0$



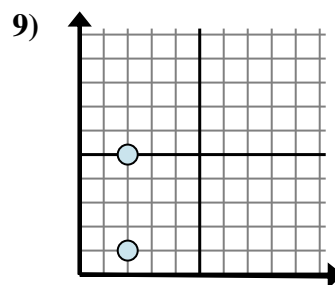
- A. $10 - 2$
 B. $7 - 2$
 C. $2 - 10$
 D. $10 - 7$



- A. $1 - 4$
 B. $6 - 1$
 C. $1 - 4$
 D. $6 - 4$



- A. $1 - 9$
 B. $7 - 1$
 C. $1 - 7$
 D. $7 - 9$



- A. $5 - 1$
 B. $2 - 2$
 C. $5 - 2$
 D. $2 - 1$

Risposte1. **D**2. **A**3. **A**4. **B**5. **D**6. **A**7. **D**8. **B**9. **A**