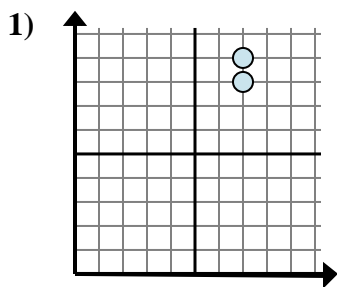


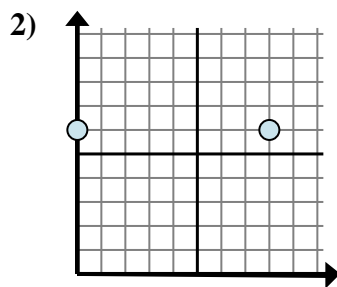


Determina quale espressione mostra meglio la distanza tra i due punti.

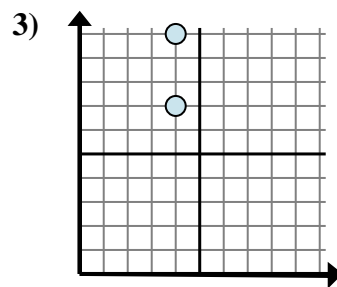
Risposte



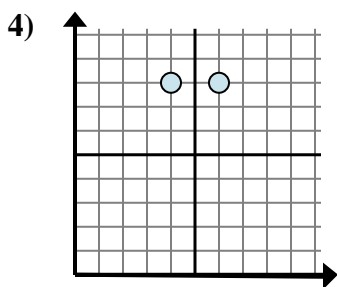
- A. $7 - 9$
- B. $8 - 9$
- C. $9 - 8$
- D. $7 - 7$



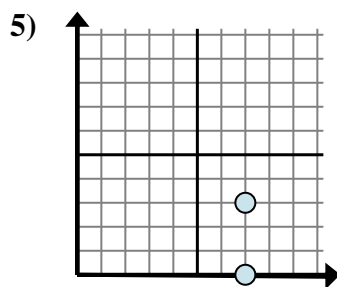
- A. $8 - 6$
- B. $8 - 0$
- C. $0 - 8$
- D. $6 - 6$



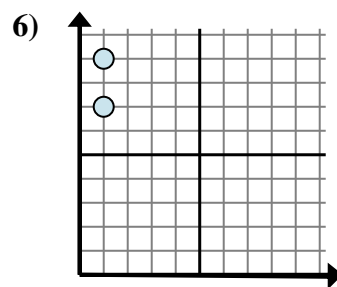
- A. $7 - 10$
- B. $4 - 7$
- C. $10 - 7$
- D. $4 - 4$



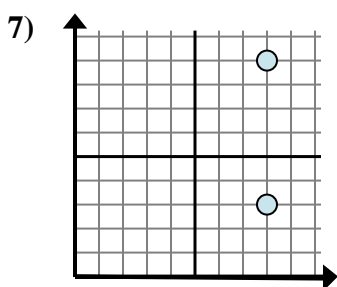
- A. $8 - 8$
- B. $4 - 8$
- C. $6 - 4$
- D. $6 - 8$



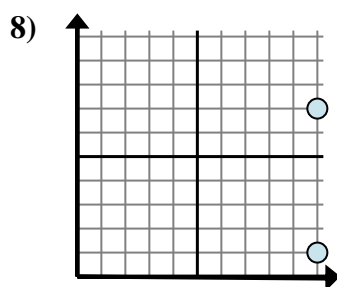
- A. $7 - 3$
- B. $3 - 0$
- C. $0 - 3$
- D. $3 - 7$



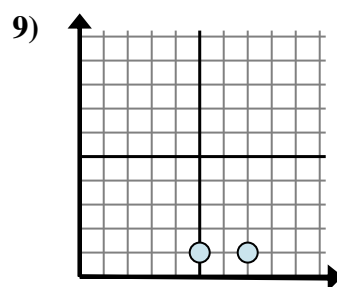
- A. $9 - 7$
- B. $7 - 9$
- C. $1 - 1$
- D. $1 - 1$



- A. $8 - 8$
- B. $3 - 9$
- C. $9 - 3$
- D. $9 - 8$



- A. $1 - 7$
- B. $7 - 10$
- C. $7 - 1$
- D. $1 - 10$



- A. $7 - 1$
- B. $1 - 1$
- C. $1 - 7$
- D. $7 - 5$

1. _____

2. _____

3. _____

4. _____

5. _____

6. _____

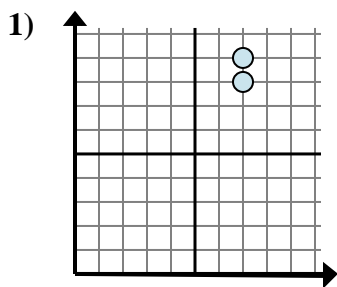
7. _____

8. _____

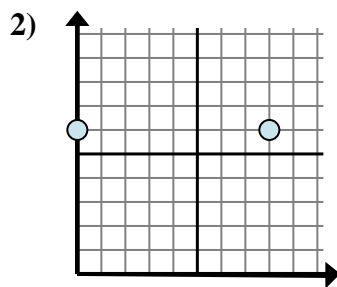
9. _____



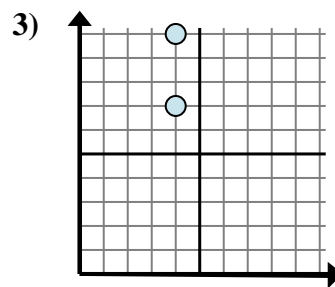
Determina quale espressione mostra meglio la distanza tra i due punti.



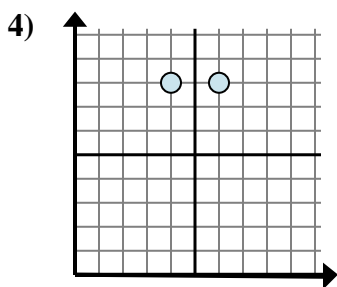
- A. $7 - 9$
 B. $8 - 9$
 C. $9 - 8$
 D. $7 - 7$



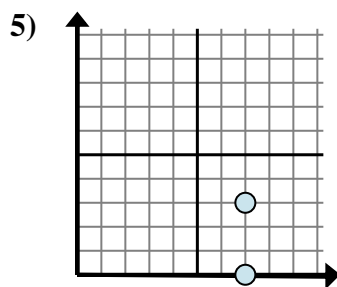
- A. $8 - 6$
 B. $8 - 0$
 C. $0 - 8$
 D. $6 - 6$



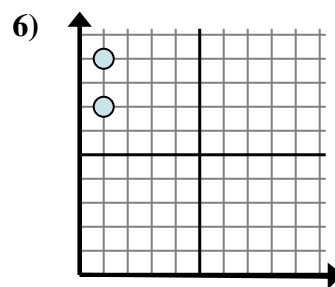
- A. $7 - 10$
 B. $4 - 7$
 C. $10 - 7$
 D. $4 - 4$



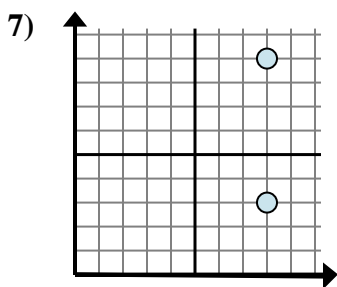
- A. $8 - 8$
 B. $4 - 8$
 C. $6 - 4$
 D. $6 - 8$



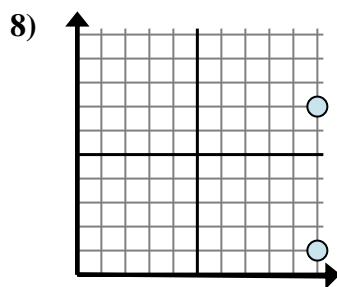
- A. $7 - 3$
 B. $3 - 0$
 C. $0 - 3$
 D. $3 - 7$



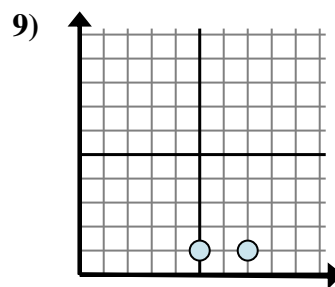
- A. $9 - 7$
 B. $7 - 9$
 C. $1 - 1$
 D. $1 - 1$



- A. $8 - 8$
 B. $3 - 9$
 C. $9 - 3$
 D. $9 - 8$



- A. $1 - 7$
 B. $7 - 10$
 C. $7 - 1$
 D. $1 - 10$



- A. $7 - 1$
 B. $1 - 1$
 C. $1 - 7$
 D. $7 - 5$

Risposte1. **C**2. **B**3. **C**4. **C**5. **B**6. **A**7. **C**8. **C**9. **D**