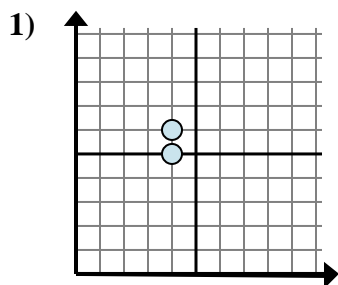
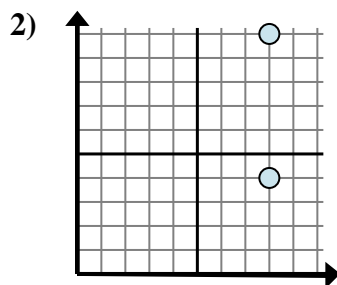




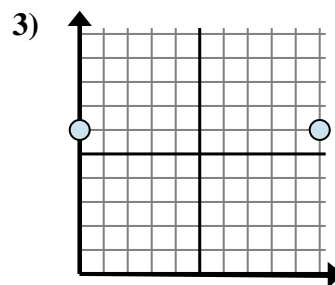
Determina quale espressione mostra meglio la distanza tra i due punti.

Risposte

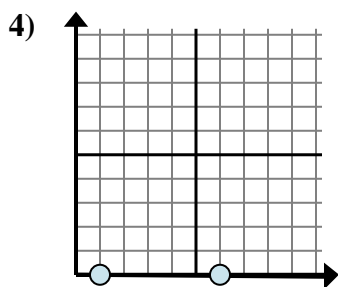
- A. $6 - 5$
B. $4 - 4$
C. $5 - 6$
D. $6 - 4$



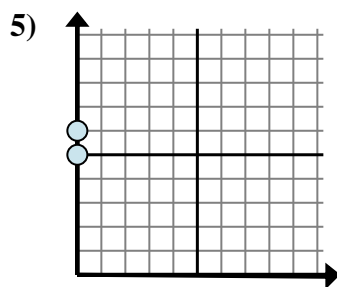
- A. $4 - 10$
B. $8 - 8$
C. $8 - 10$
D. $10 - 4$



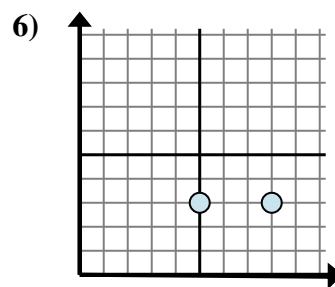
- A. $10 - 0$
B. $0 - 10$
C. $6 - 0$
D. $6 - 0$



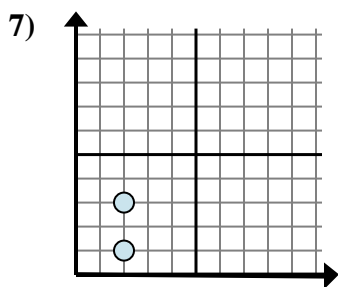
- A. $0 - 0$
B. $0 - 0$
C. $0 - 1$
D. $6 - 1$



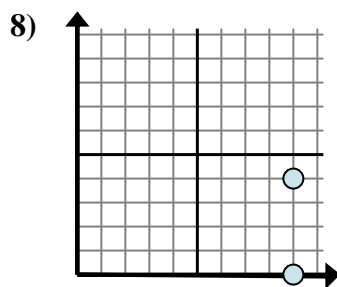
- A. $0 - 6$
B. $0 - 0$
C. $6 - 5$
D. $6 - 0$



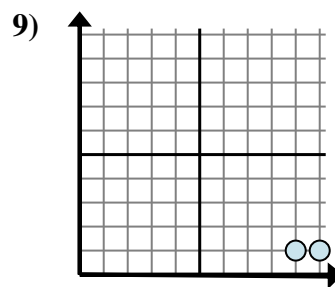
- A. $3 - 8$
B. $8 - 3$
C. $3 - 3$
D. $8 - 5$



- A. $2 - 2$
B. $3 - 2$
C. $3 - 1$
D. $2 - 3$



- A. $0 - 4$
B. $9 - 4$
C. $4 - 0$
D. $9 - 9$

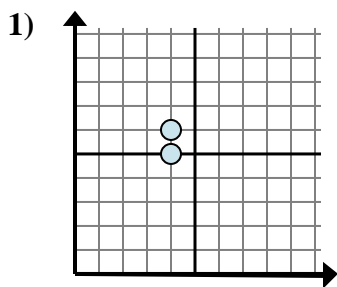


- A. $1 - 9$
B. $10 - 9$
C. $1 - 9$
D. $9 - 1$

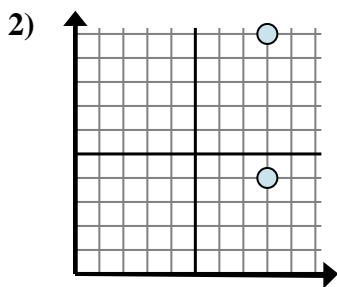
1. _____
2. _____
3. _____
4. _____
5. _____
6. _____
7. _____
8. _____
9. _____



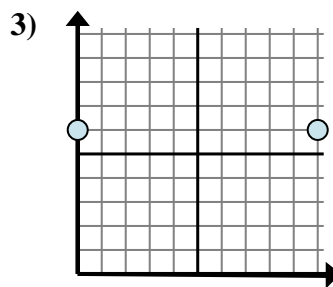
Determina quale espressione mostra meglio la distanza tra i due punti.



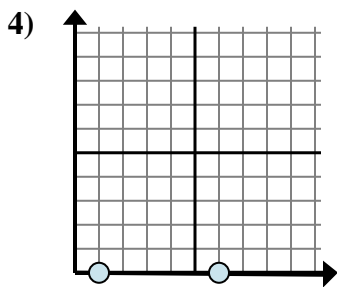
- A. $6 - 5$
B. $4 - 4$
C. $5 - 6$
D. $6 - 4$



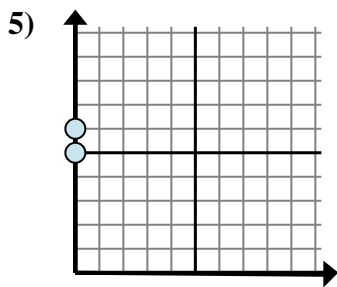
- A. $4 - 10$
B. $8 - 8$
C. $8 - 10$
D. $10 - 4$



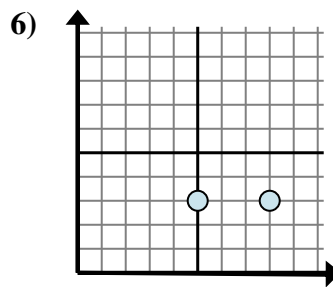
- A. $10 - 0$
B. $0 - 10$
C. $6 - 0$
D. $6 - 0$



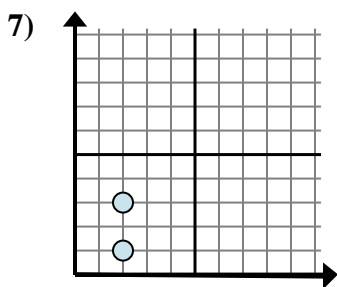
- A. $0 - 0$
B. $0 - 0$
C. $0 - 1$
D. $6 - 1$



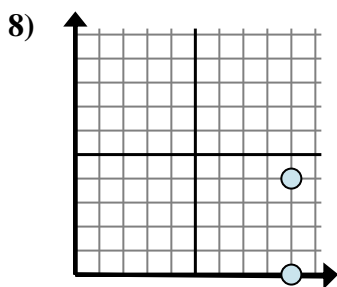
- A. $0 - 6$
B. $0 - 0$
C. $6 - 5$
D. $6 - 0$



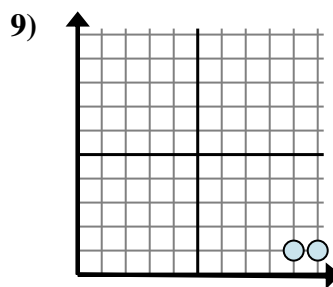
- A. $3 - 8$
B. $8 - 3$
C. $3 - 3$
D. $8 - 5$



- A. $2 - 2$
B. $3 - 2$
C. $3 - 1$
D. $2 - 3$



- A. $0 - 4$
B. $9 - 4$
C. $4 - 0$
D. $9 - 9$



- A. $1 - 9$
B. $10 - 9$
C. $1 - 9$
D. $9 - 1$

Risposte

1. **A**
2. **D**
3. **A**
4. **D**
5. **C**
6. **D**
7. **C**
8. **C**
9. **B**