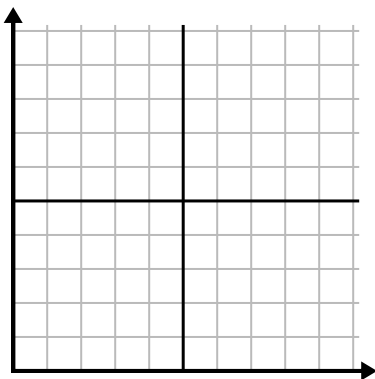




Completa la griglia utilizzando il grafico.

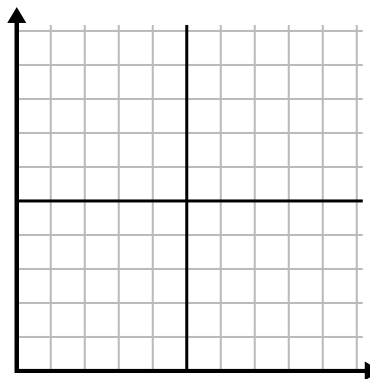
1)

Ora	1	2	3	4	5	6	7
Importo venduto	10	6	5	4	1	8	9



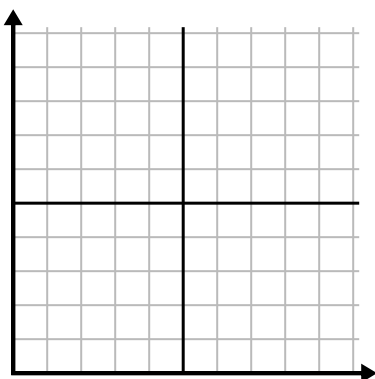
2)

Settimana	1	2	3	4	5	6	7
Acqua utilizzata (galloni)	30	50	40	100	80	10	20



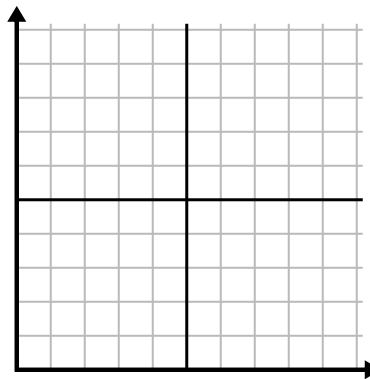
3)

Anno	1	2	3	4	5	6	7
Cartucce di inchiostro usate	8	18	6	20	16	10	14



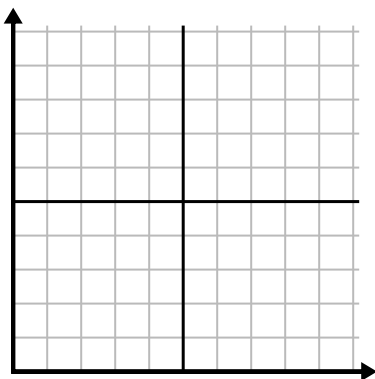
4)

Giorno	1	2	3	4	5	6	7
Pasti venduti	900	400	700	500	1.000	600	100



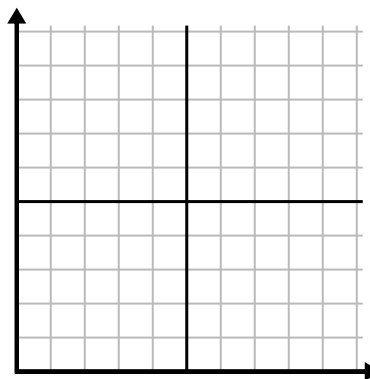
5)

Giorno	1	2	3	4	5	6
Testi inviati	40	35	30	50	10	20



6)

Mese	1	2	3	4	5	6
Prezzo bolletta elettrica	25	150	175	250	200	50

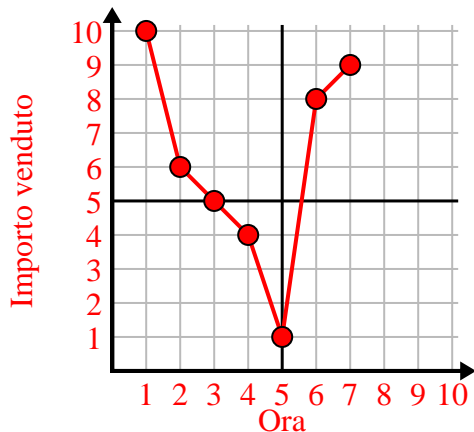




Completa la griglia utilizzando il grafico.

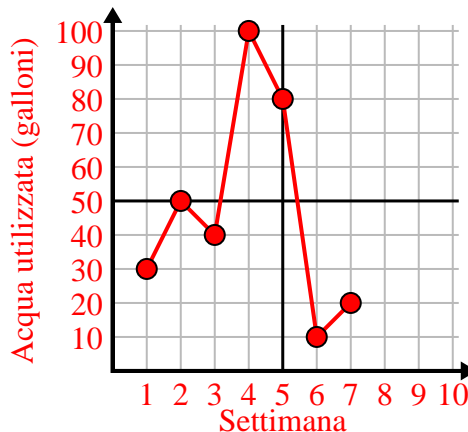
1)

Ora	1	2	3	4	5	6	7
Importo venduto	10	6	5	4	1	8	9



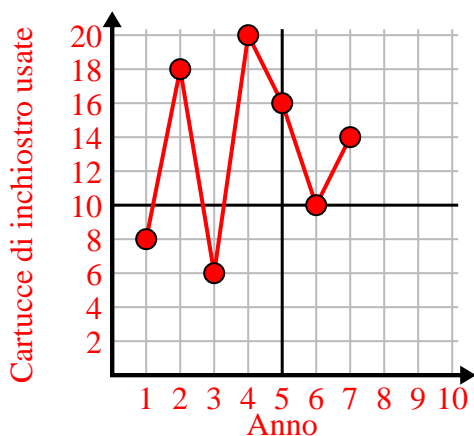
2)

Settimana	1	2	3	4	5	6	7
Acqua utilizzata (galloni)	30	50	40	100	80	10	20



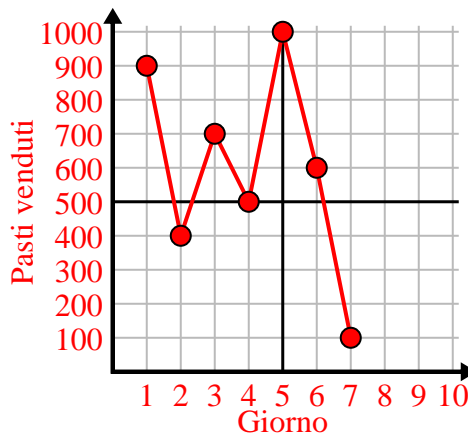
3)

Anno	1	2	3	4	5	6	7
Cartucce di inchiostro usate	8	18	6	20	16	10	14



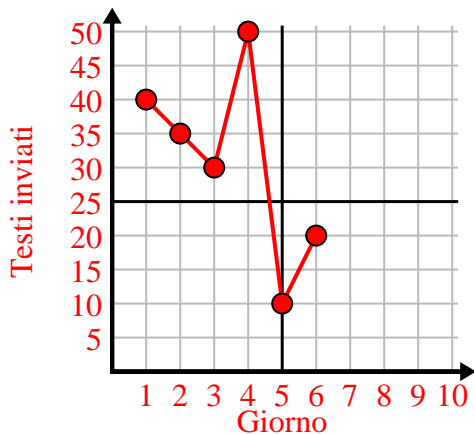
4)

Giorno	1	2	3	4	5	6	7
Pasti venduti	900	400	700	500	1.000	600	100



5)

Giorno	1	2	3	4	5	6
Testi inviati	40	35	30	50	10	20



6)

Mese	1	2	3	4	5	6
Prezzo bolletta elettrica	25	150	175	250	200	50

