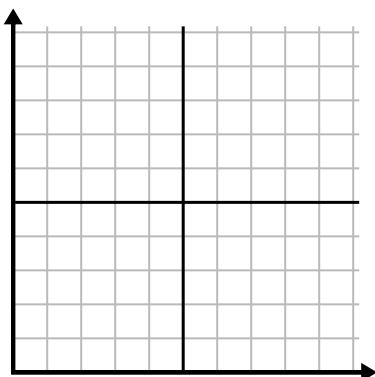




Completa la griglia utilizzando il grafico.

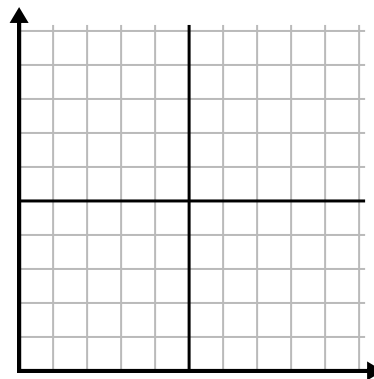
1)

Mese	1	2	3	4	5	6
Prezzo bolletta elettrica	175	50	250	200	100	150



2)

Giorno	1	2	3	4	5
Pasti venduti	900	300	600	1.000	400



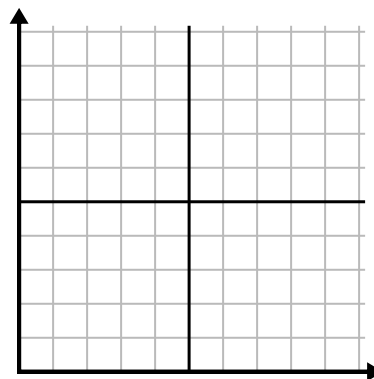
3)

Settimana	1	2	3	4	5	6	7
Ore di TV guardate	15	30	50	35	10	25	45



4)

Ora	1	2	3	4	5
Importo venduto	2	3	8	1	4



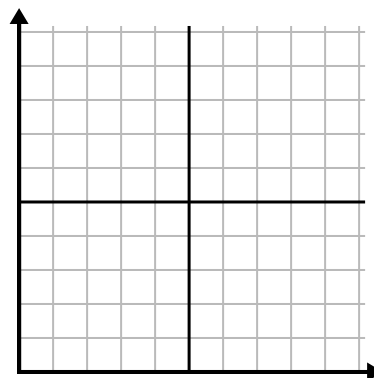
5)

Giorno	1	2	3	4	5
Calorie bruciate	200	180	40	80	120



6)

Anno	1	2	3	4	5	6
Cartucce di inchiostro usate	18	20	14	16	12	8

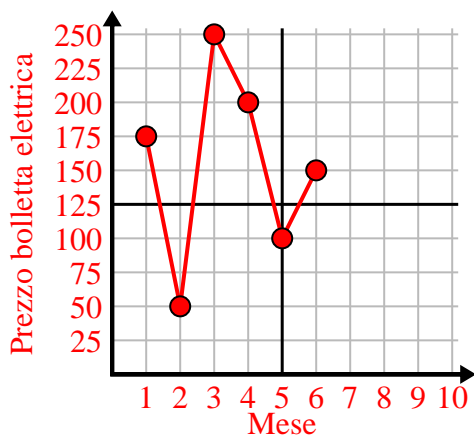




Completa la griglia utilizzando il grafico.

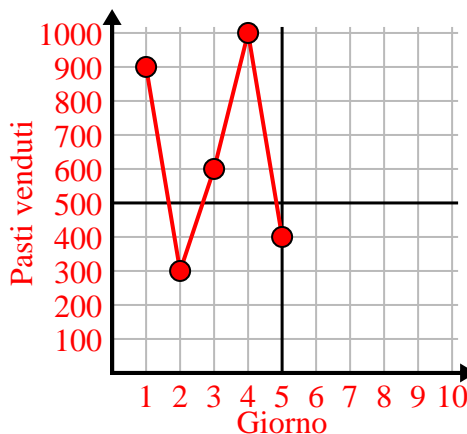
1)

Mese	1	2	3	4	5	6
Prezzo bolletta elettrica	175	50	250	200	100	150



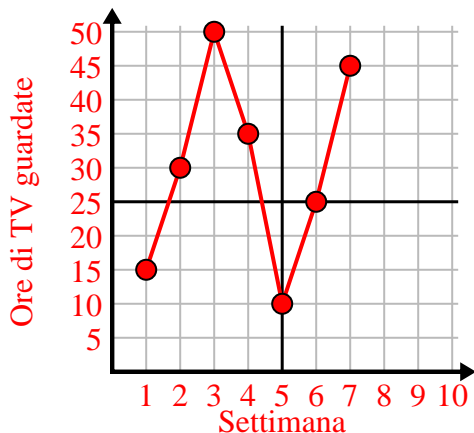
2)

Giorno	1	2	3	4	5
Pasti venduti	900	300	600	1.000	400



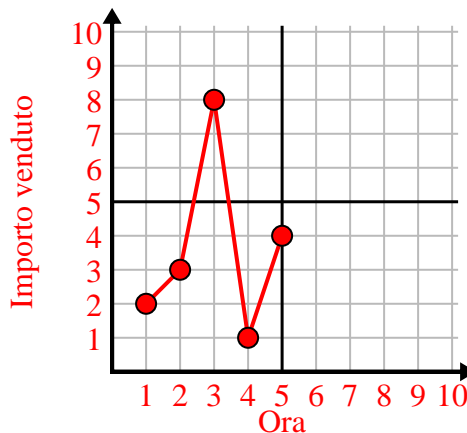
3)

Settimana	1	2	3	4	5	6	7
Ore di TV guardate	15	30	50	35	10	25	45



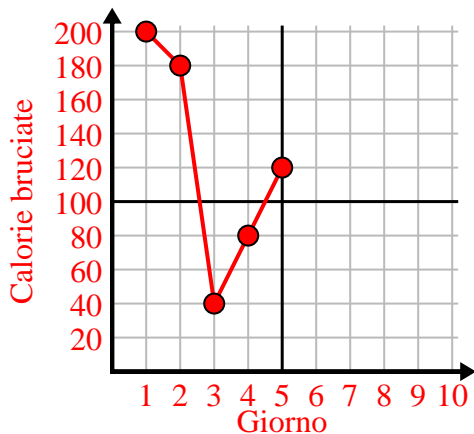
4)

Ora	1	2	3	4	5
Importo venduto	2	3	8	1	4



5)

Giorno	1	2	3	4	5
Calorie bruciate	200	180	40	80	120



6)

Anno	1	2	3	4	5	6
Cartucce di inchiostro usate	18	20	14	16	12	8

