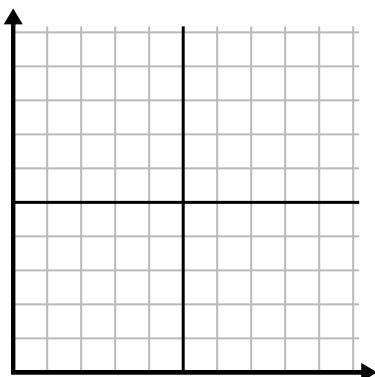




Completa la griglia utilizzando il grafico.

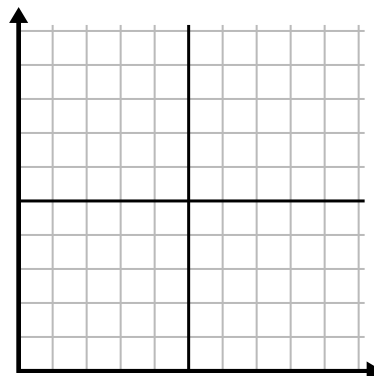
1)

Giorno	1	2	3	4	5	6	7
Video di Youtube guardati	30	180	270	150	60	90	240



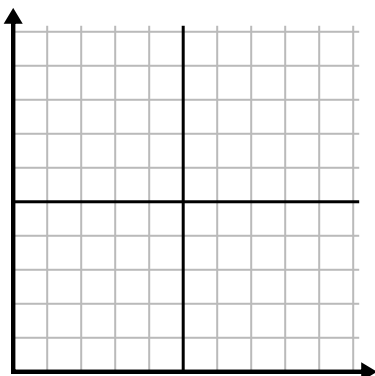
2)

Mese	1	2	3	4	5
Prezzo bolletta elettrica	225	150	75	125	50



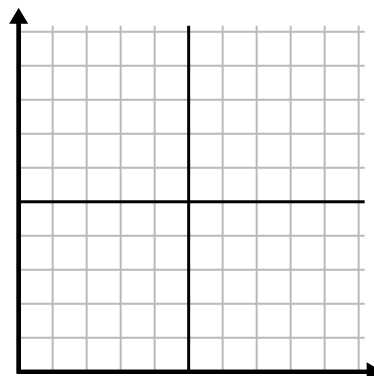
3)

Anno	1	2	3	4	5
Cartucce di inchiostro usate	16	2	10	12	8



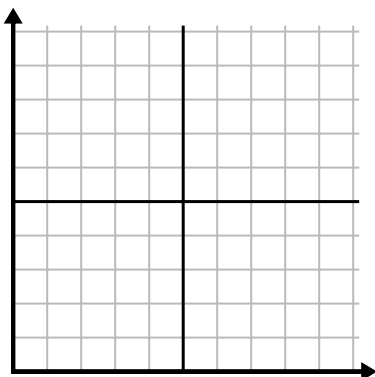
4)

Giorno	1	2	3	4	5	6
Soldi spesi	2	7	9	8	5	1



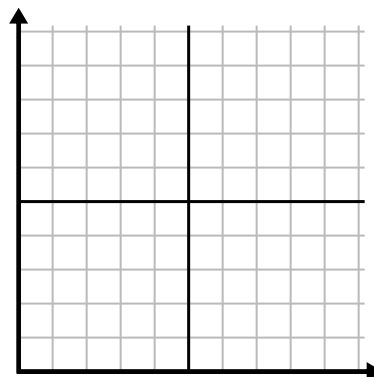
5)

Ora	1	2	3	4	5	6	7
Importo venduto	5	4	2	9	7	6	8



6)

Giorno	1	2	3	4	5	6
Pasti venduti	600	900	700	500	100	400

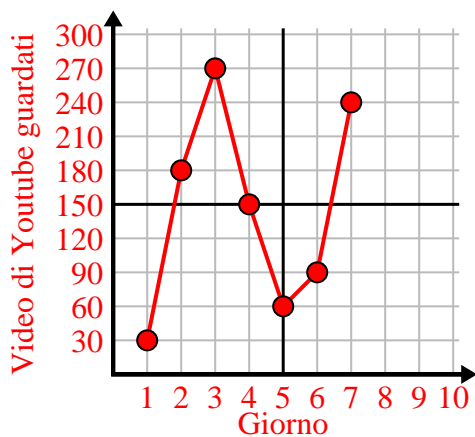




Completa la griglia utilizzando il grafico.

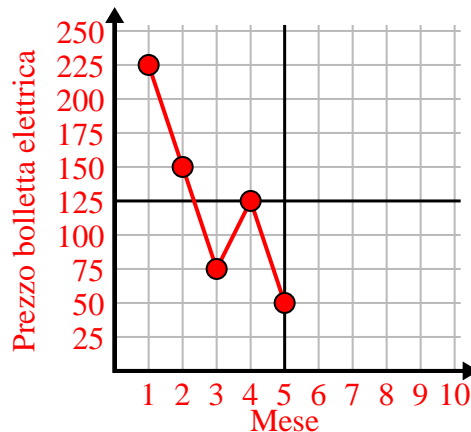
1)

Giorno	1	2	3	4	5	6	7
Video di Youtube guardati	30	180	270	150	60	90	240



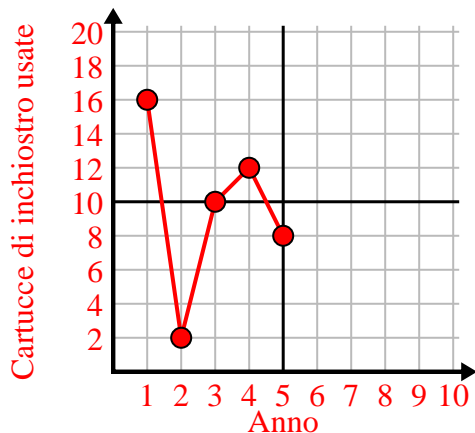
2)

Mese	1	2	3	4	5
Prezzo bolletta elettrica	225	150	75	125	50



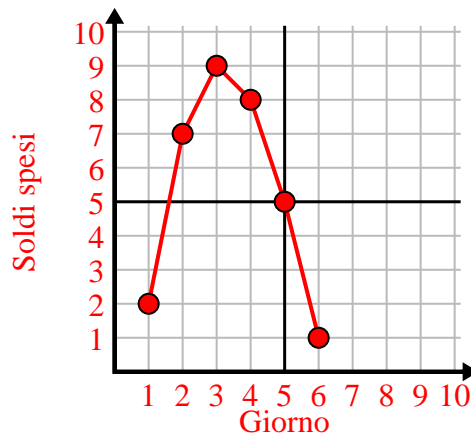
3)

Anno	1	2	3	4	5
Cartucce di inchiostro usate	16	2	10	12	8



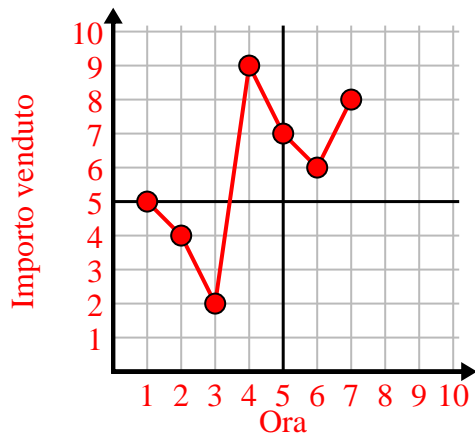
4)

Giorno	1	2	3	4	5	6
Soldi spesi	2	7	9	8	5	1



5)

Ora	1	2	3	4	5	6	7
Importo venduto	5	4	2	9	7	6	8



6)

Giorno	1	2	3	4	5	6
Pasti venduti	600	900	700	500	100	400

