
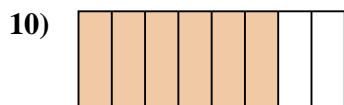
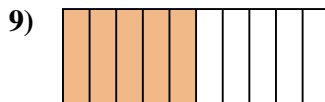
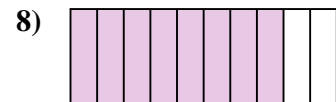
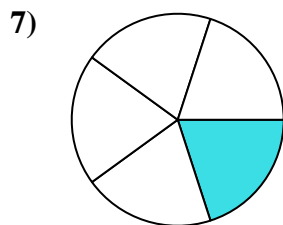
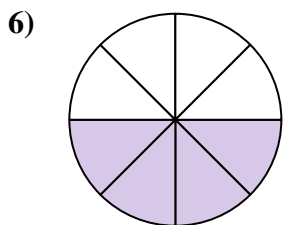
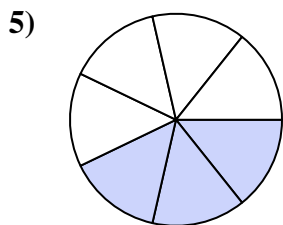

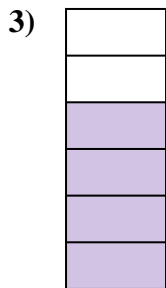





Determina se la parte colorata è 'più', 'meno' o 'uguale' alla metà.


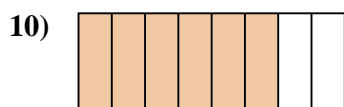
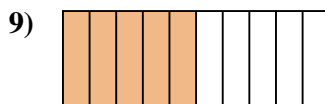
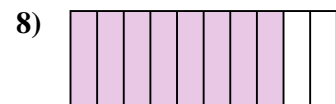
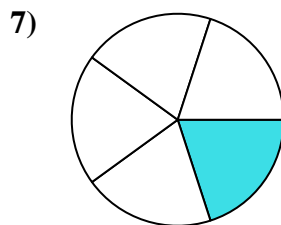
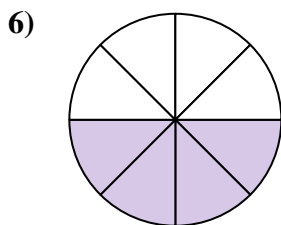
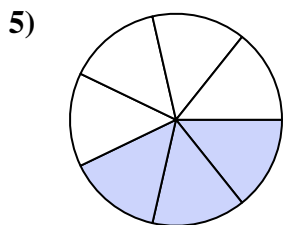

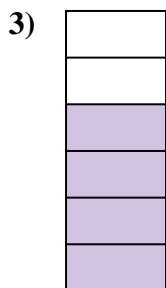



**Risposte**

1. \_\_\_\_\_
2. \_\_\_\_\_
3. \_\_\_\_\_
4. \_\_\_\_\_
5. \_\_\_\_\_
6. \_\_\_\_\_
7. \_\_\_\_\_
8. \_\_\_\_\_
9. \_\_\_\_\_
10. \_\_\_\_\_
11. \_\_\_\_\_
12. \_\_\_\_\_
13. \_\_\_\_\_
14. \_\_\_\_\_
15. \_\_\_\_\_
16. \_\_\_\_\_
17. \_\_\_\_\_
18. \_\_\_\_\_
19. \_\_\_\_\_
20. \_\_\_\_\_



Determina se la parte colorata è 'più', 'meno' o 'uguale' alla metà.



**Risposte**

1. maggiore

2. minore

3. maggiore

4. minore

5. minore

6. uguale

7. minore

8. maggiore

9. uguale

10. maggiore

11. maggiore

12. minore

13. maggiore

14. maggiore

15. minore

16. maggiore

17. minore

18. minore

19. minore

20. maggiore