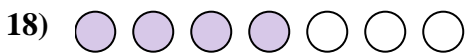

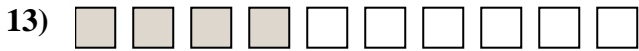
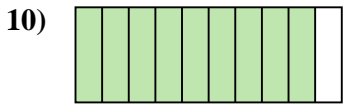
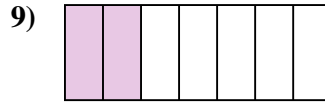
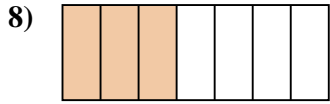
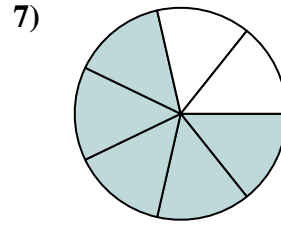
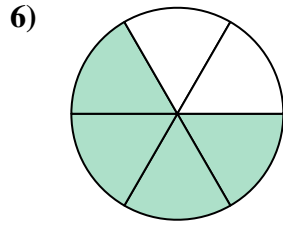
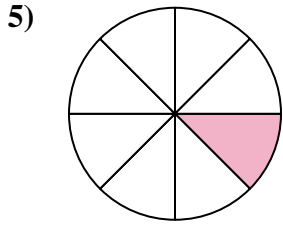
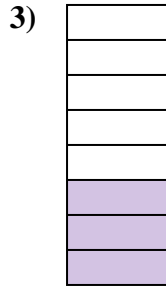






Determina se la parte colorata è 'più', 'meno' o 'uguale' alla metà.




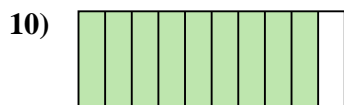
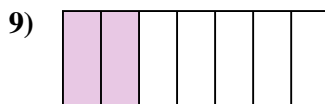
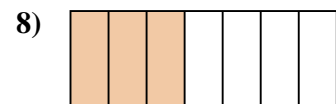
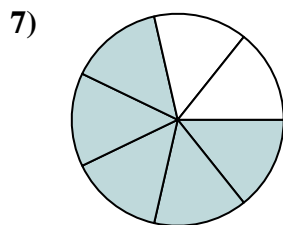
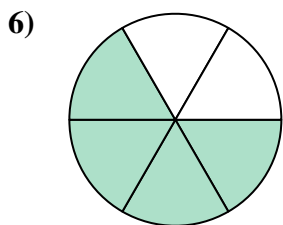
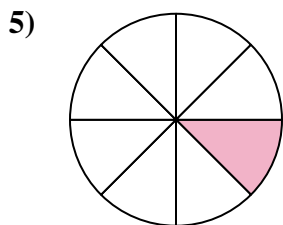
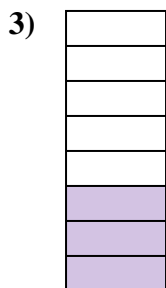




**Risposte**

1. \_\_\_\_\_
2. \_\_\_\_\_
3. \_\_\_\_\_
4. \_\_\_\_\_
5. \_\_\_\_\_
6. \_\_\_\_\_
7. \_\_\_\_\_
8. \_\_\_\_\_
9. \_\_\_\_\_
10. \_\_\_\_\_
11. \_\_\_\_\_
12. \_\_\_\_\_
13. \_\_\_\_\_
14. \_\_\_\_\_
15. \_\_\_\_\_
16. \_\_\_\_\_
17. \_\_\_\_\_
18. \_\_\_\_\_
19. \_\_\_\_\_
20. \_\_\_\_\_



Determina se la parte colorata è 'più', 'meno' o 'uguale' alla metà.



**Risposte**

1. maggiore

2. uguale

3. minore

4. minore

5. minore

6. maggiore

7. maggiore

8. minore

9. minore

10. maggiore

11. uguale

12. maggiore

13. minore

14. minore

15. minore

16. maggiore

17. minore

18. maggiore

19. maggiore

20. uguale