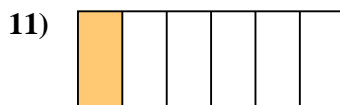
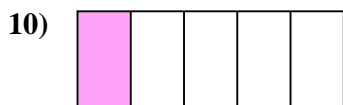
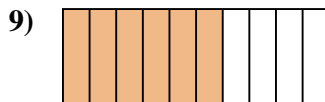
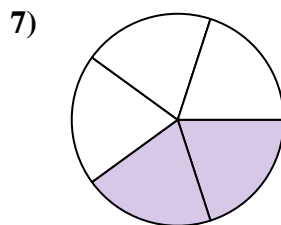
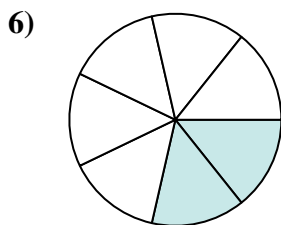
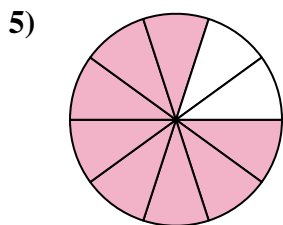


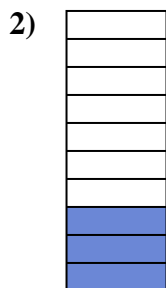





Determina se la parte colorata è 'più', 'meno' o 'uguale' alla metà.

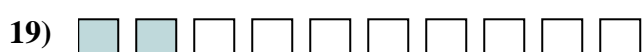
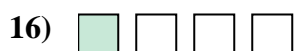
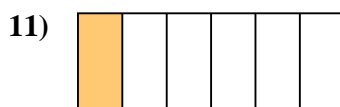

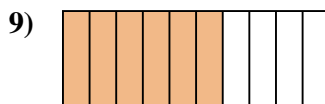
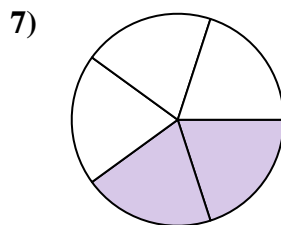
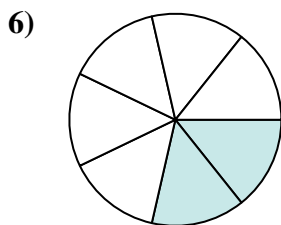
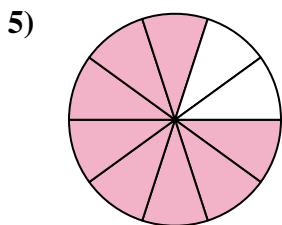


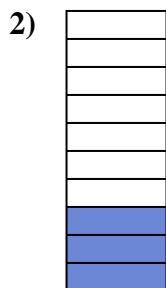



**Risposte**

1. \_\_\_\_\_
2. \_\_\_\_\_
3. \_\_\_\_\_
4. \_\_\_\_\_
5. \_\_\_\_\_
6. \_\_\_\_\_
7. \_\_\_\_\_
8. \_\_\_\_\_
9. \_\_\_\_\_
10. \_\_\_\_\_
11. \_\_\_\_\_
12. \_\_\_\_\_
13. \_\_\_\_\_
14. \_\_\_\_\_
15. \_\_\_\_\_
16. \_\_\_\_\_
17. \_\_\_\_\_
18. \_\_\_\_\_
19. \_\_\_\_\_
20. \_\_\_\_\_



Determina se la parte colorata è 'più', 'meno' o 'uguale' alla metà.



**Risposte**

1. maggiore

2. minore

3. minore

4. maggiore

5. maggiore

6. minore

7. minore

8. minore

9. maggiore

10. minore

11. minore

12. maggiore

13. uguale

14. maggiore

15. minore

16. minore

17. uguale

18. minore

19. minore

20. uguale