


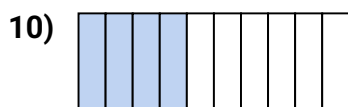
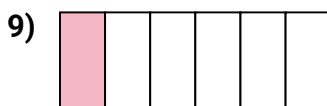
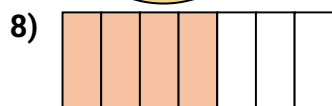
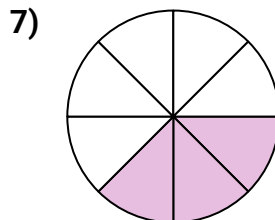
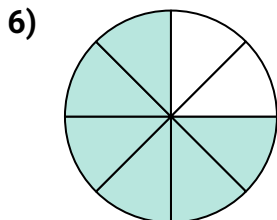
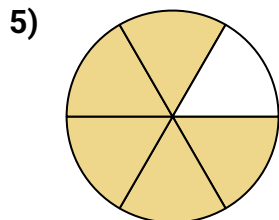
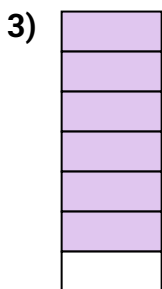




Determina le frazioni relative alla metà

Nome: _____

Determina se la parte colorata è 'più', 'meno' o 'uguale' alla metà.

Risposte



1. _____

2. _____

3. _____

4. _____

5. _____

6. _____

7. _____

8. _____

9. _____

10. _____

11. _____

12. _____

13. _____

14. _____

15. _____

16. _____

17. _____

18. _____

19. _____

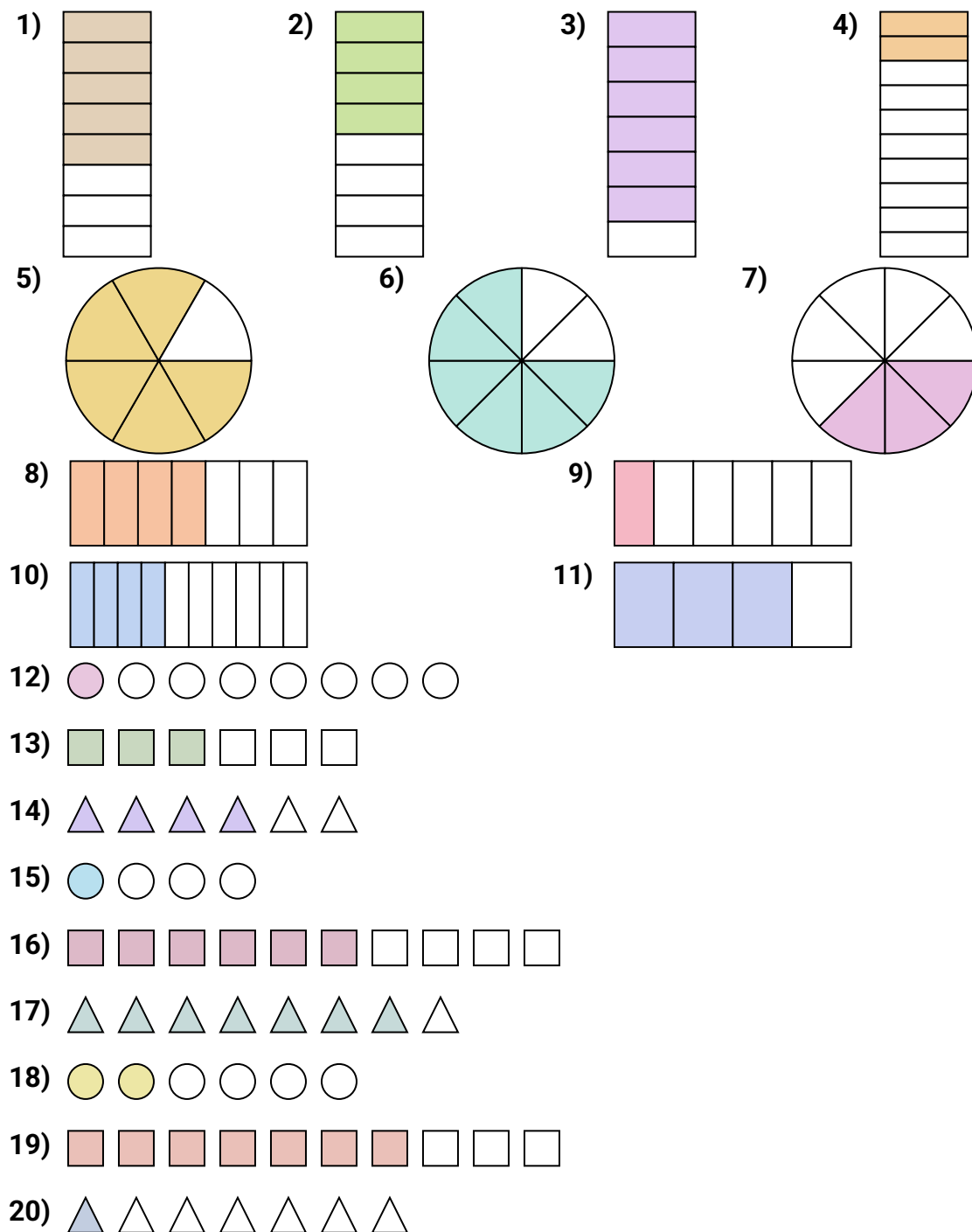
20. _____



Determina le frazioni relative alla metà

Nome: **Soluzioni**

Determina se la parte colorata è 'più', 'meno' o 'uguale' alla metà.



Risposte

1. **maggiore**
2. **uguale**
3. **maggiore**
4. **minore**
5. **maggiore**
6. **maggiore**
7. **minore**
8. **maggiore**
9. **minore**
10. **minore**
11. **maggiore**
12. **minore**
13. **uguale**
14. **maggiore**
15. **minore**
16. **maggiore**
17. **maggiore**
18. **minore**
19. **maggiore**
20. **minore**