













Determina quale frazione va inserita nel mezzo in modo da rendere vero il confronto.



Risposte



1) $\frac{1}{3}$  <  < $\frac{6}{8}$ 




$\frac{7}{8}$  $\frac{1}{2}$ 



$\frac{5}{6}$  $\frac{1}{6}$ 



2) $\frac{2}{8}$  <  < $\frac{4}{6}$ 




$\frac{7}{8}$  $\frac{3}{6}$ 



$\frac{3}{4}$  $\frac{1}{6}$ 



3) $\frac{2}{8}$  <  < $\frac{5}{8}$ 

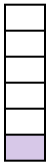
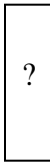

$\frac{1}{8}$  $\frac{2}{3}$ 





$\frac{1}{6}$  $\frac{3}{8}$ 


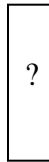

4) $\frac{1}{8}$  <  < $\frac{2}{8}$ 





$\frac{1}{3}$  $\frac{1}{6}$ 




$\frac{2}{4}$  $\frac{4}{6}$ 



5) $\frac{1}{6}$  <  < $\frac{2}{3}$ 



$\frac{1}{8}$  $\frac{4}{8}$  $\frac{7}{8}$  $\frac{6}{8}$ 




6) $\frac{1}{8}$  <  < $\frac{1}{4}$ 



$\frac{4}{6}$  $\frac{1}{3}$  $\frac{1}{6}$  $\frac{2}{4}$ 



7) $\frac{1}{4}$  <  < $\frac{3}{8}$ 

$\frac{4}{8}$  $\frac{3}{4}$ 

$\frac{1}{3}$  $\frac{5}{8}$ 

8) $\frac{1}{4}$  <  < $\frac{1}{2}$ 

$\frac{1}{3}$  $\frac{6}{8}$ 

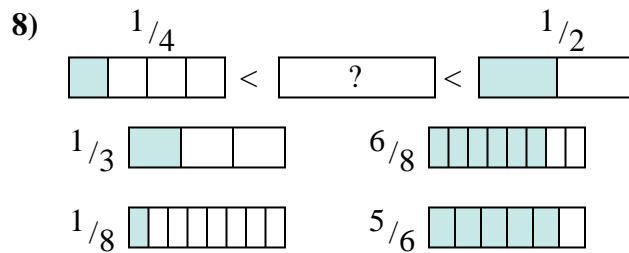
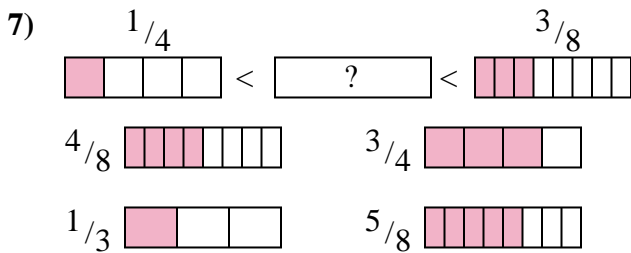
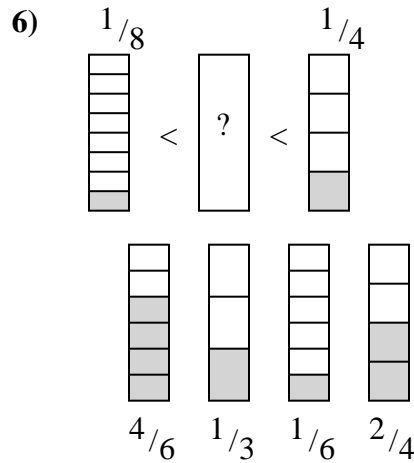
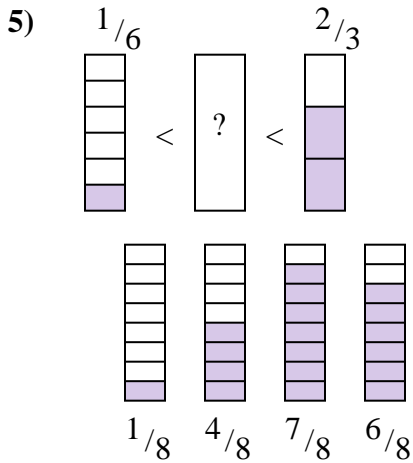
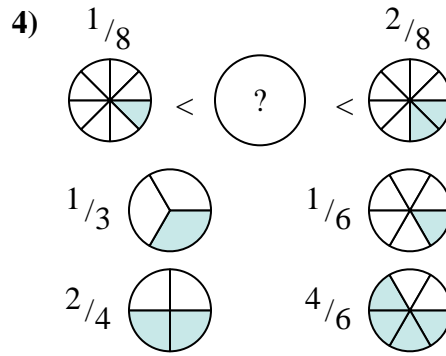
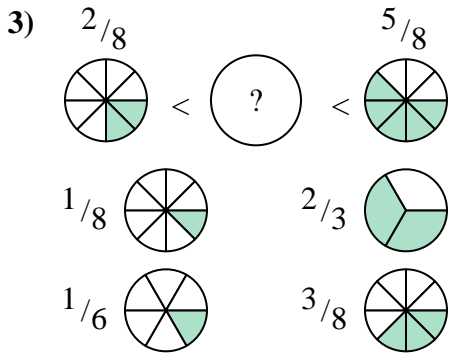
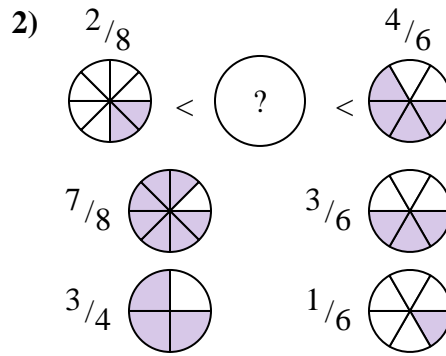
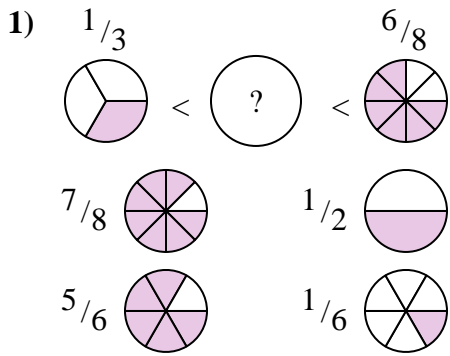
$\frac{1}{8}$  $\frac{5}{6}$ 

1. _____
2. _____
3. _____
4. _____
5. _____
6. _____
7. _____
8. _____



Determina quale frazione va inserita nel mezzo in modo da rendere vero il confronto.

Risposte



1. $\frac{1}{2}$
2. $\frac{3}{6}$
3. $\frac{3}{8}$
4. $\frac{1}{6}$
5. $\frac{4}{8}$
6. $\frac{1}{6}$
7. $\frac{1}{3}$
8. $\frac{1}{3}$