



Usa la linea numerata per risolvere ogni problema. Il primo è un esempio.

Risposte

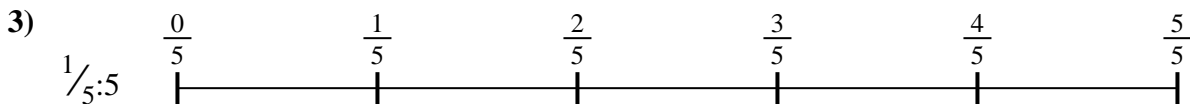
1. _____

2. _____



3. _____

4. _____



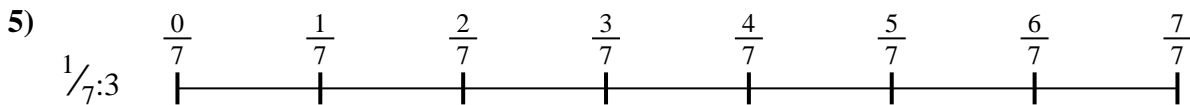
5. _____

6. _____



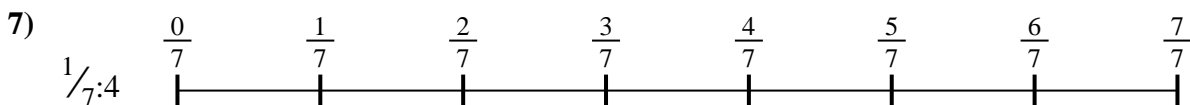
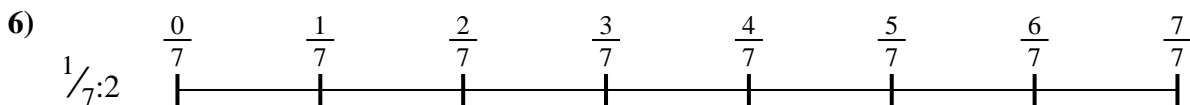


7. _____

8. _____

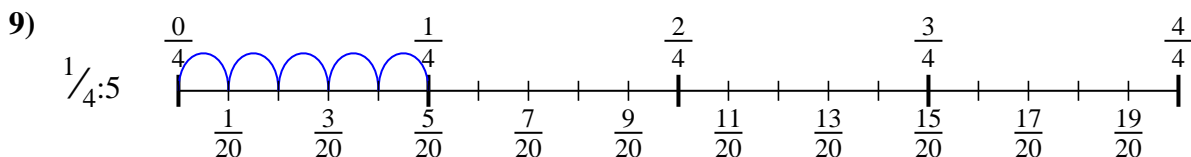
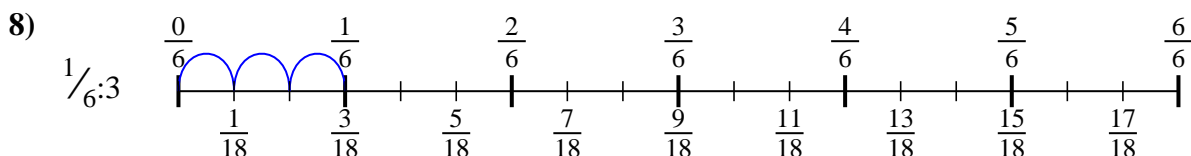
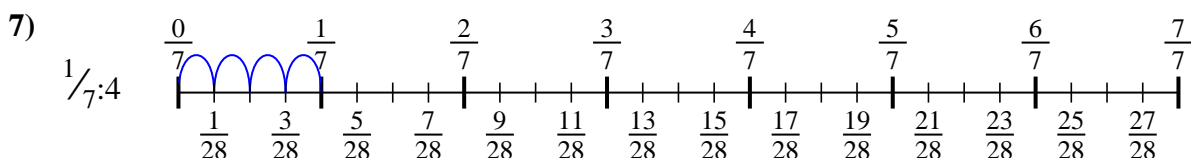
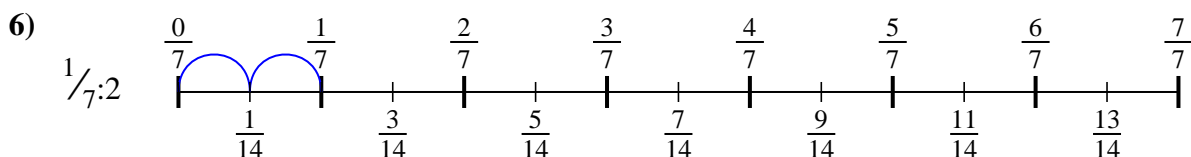
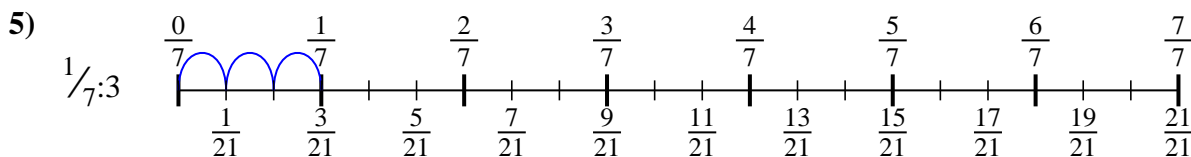
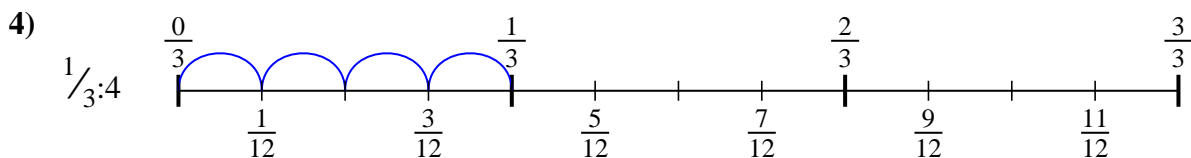
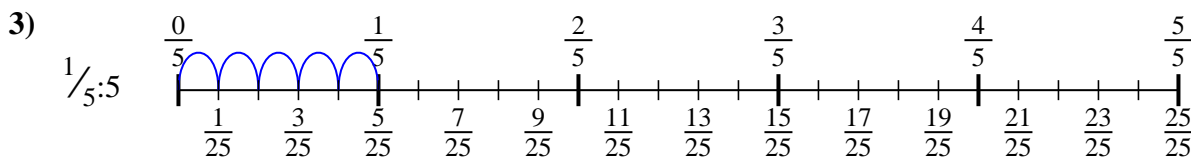
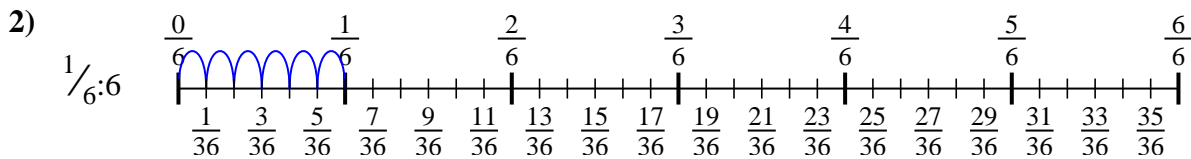
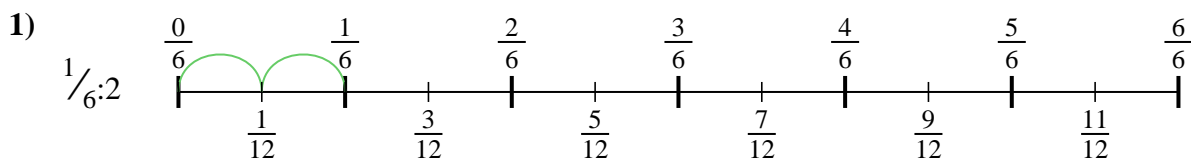


9. _____





Usa la linea numerata per risolvere ogni problema. Il primo è un esempio.

Risposte

1. $\frac{1}{12}$

2. $\frac{1}{36}$

3. $\frac{1}{25}$

4. $\frac{1}{12}$

5. $\frac{1}{21}$

6. $\frac{1}{14}$

7. $\frac{1}{28}$

8. $\frac{1}{18}$

9. $\frac{1}{20}$



Usa la linea numerata per risolvere ogni problema. Il primo è un esempio.

Risposte

$\frac{1}{20}$

$\frac{1}{12}$

$\frac{1}{21}$

$\frac{1}{14}$

$\frac{1}{18}$

$\frac{1}{12}$

$\frac{1}{36}$

$\frac{1}{25}$

$\frac{1}{28}$

1. _____

2. _____

3. _____

4. _____

5. _____

6. _____

7. _____

8. _____

9. _____

