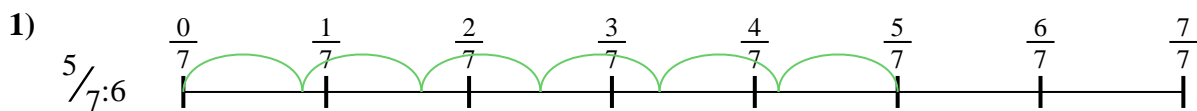





Usa la linea numerata per risolvere ogni problema. Il primo è un esempio.

**Risposte**

1. \_\_\_\_\_

2. \_\_\_\_\_



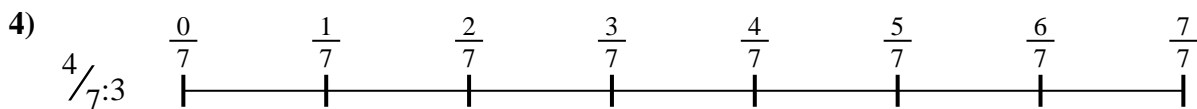
3. \_\_\_\_\_

4. \_\_\_\_\_



5. \_\_\_\_\_

6. \_\_\_\_\_

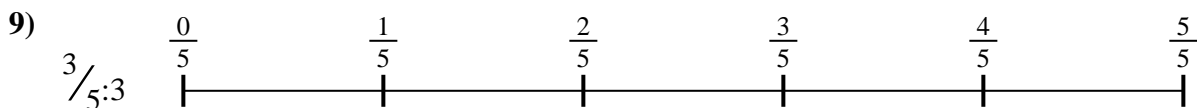


7. \_\_\_\_\_

8. \_\_\_\_\_

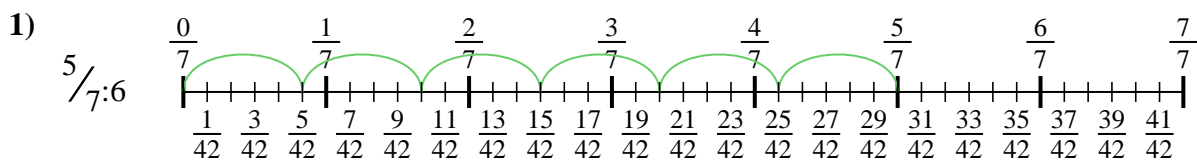


9. \_\_\_\_\_

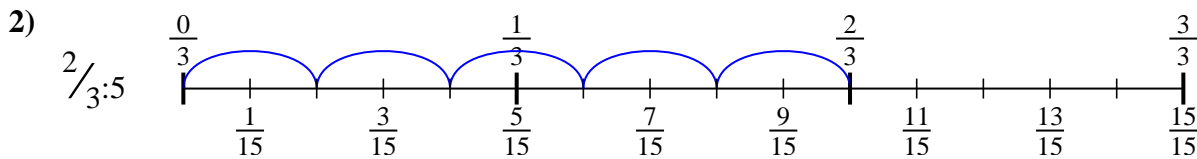




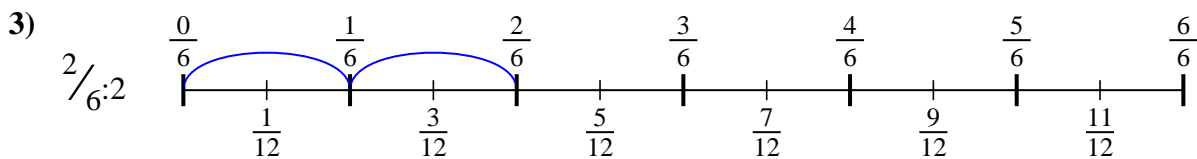
Usa la linea numerata per risolvere ogni problema. Il primo è un esempio.

**Risposte**

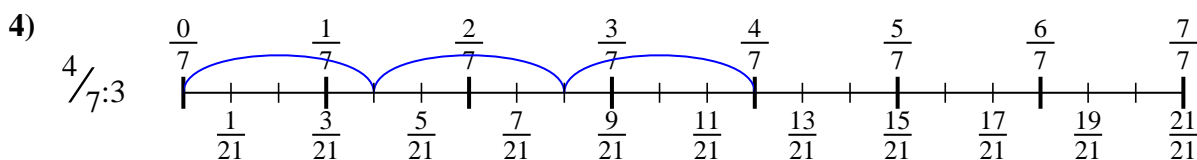
1.  $\frac{5}{42}$



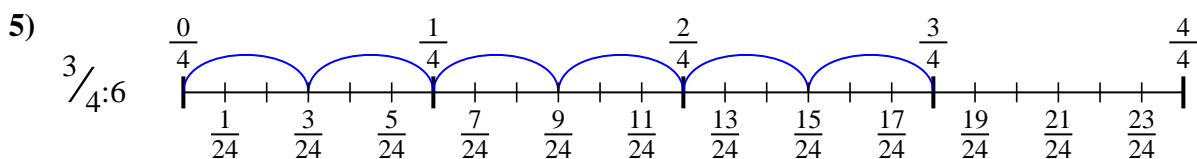
2.  $\frac{2}{15}$



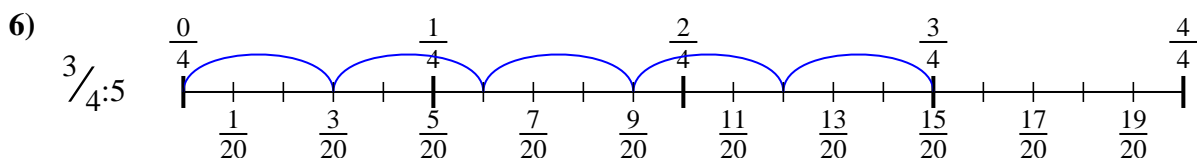
3.  $\frac{2}{12}$



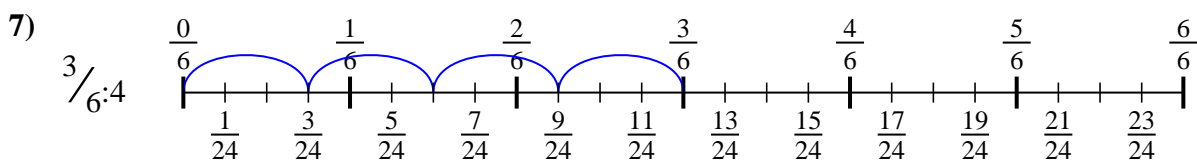
4.  $\frac{4}{21}$



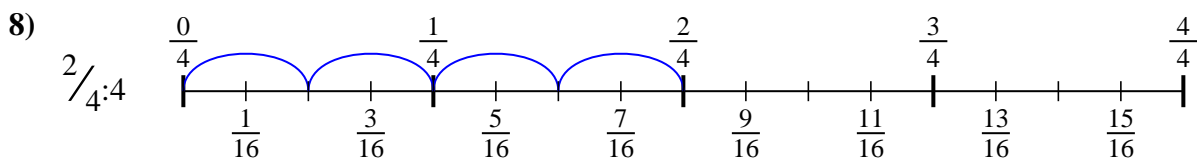
5.  $\frac{3}{24}$



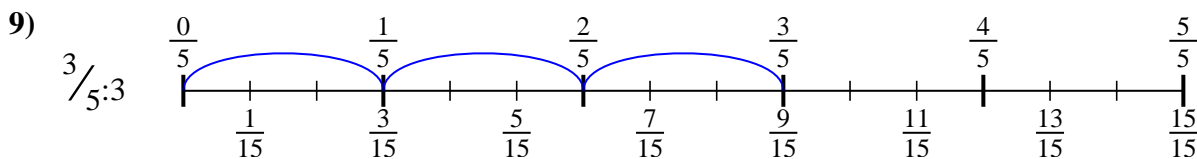
6.  $\frac{3}{20}$



7.  $\frac{3}{24}$



8.  $\frac{2}{16}$



9.  $\frac{3}{15}$



Usa la linea numerata per risolvere ogni problema. Il primo è un esempio.

**Risposte**

$\frac{3}{20}$

$\frac{2}{12}$

$\frac{3}{24}$

$\frac{4}{21}$

$\frac{2}{16}$

$\frac{3}{15}$

$\frac{5}{42}$

$\frac{3}{24}$

$\frac{2}{15}$

1. \_\_\_\_\_

2. \_\_\_\_\_

3. \_\_\_\_\_

4. \_\_\_\_\_

5. \_\_\_\_\_

6. \_\_\_\_\_

7. \_\_\_\_\_

8. \_\_\_\_\_

9. \_\_\_\_\_

