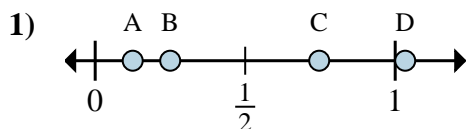


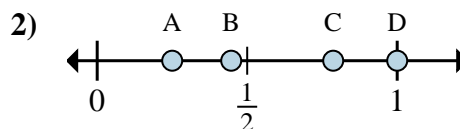


Determina quale lettera rappresenta correttamente la posizione della frazione sulla linea numerata.

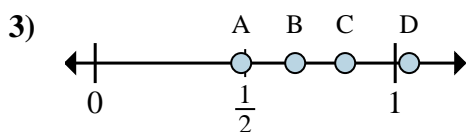
Risposte



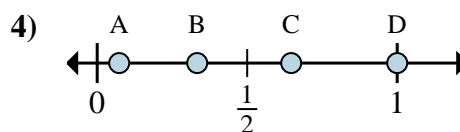
- a. Quale lettera rappresenta meglio $\frac{1}{8}$?
- b. Quale lettera rappresenta meglio $\frac{2}{8}$?



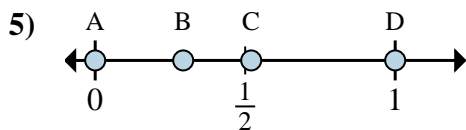
- a. Quale lettera rappresenta meglio $\frac{4}{4}$?
- b. Quale lettera rappresenta meglio $\frac{1}{4}$?



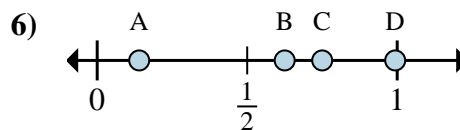
- a. Quale lettera rappresenta meglio $\frac{5}{6}$?
- b. Quale lettera rappresenta meglio $\frac{4}{6}$?



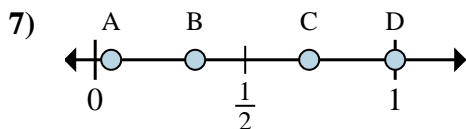
- a. Quale lettera rappresenta meglio $\frac{3}{3}$?
- b. Quale lettera rappresenta meglio $\frac{1}{3}$?



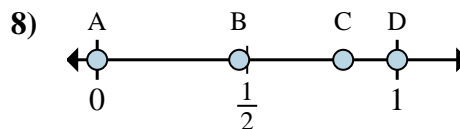
- a. Quale lettera rappresenta meglio $\frac{0}{2}$?
- b. Quale lettera rappresenta meglio $\frac{2}{2}$?



- a. Quale lettera rappresenta meglio $\frac{6}{8}$?
- b. Quale lettera rappresenta meglio $\frac{5}{8}$?



- a. Quale lettera rappresenta meglio $\frac{1}{3}$?
- b. Quale lettera rappresenta meglio $\frac{3}{3}$?



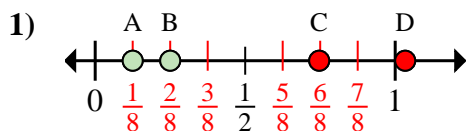
- a. Quale lettera rappresenta meglio $\frac{0}{2}$?
- b. Quale lettera rappresenta meglio $\frac{2}{2}$?

- 1. _____
- 2. _____
- 3. _____
- 4. _____
- 5. _____
- 6. _____
- 7. _____
- 8. _____

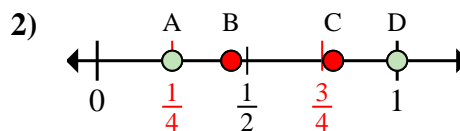


Determina quale lettera rappresenta correttamente la posizione della frazione sulla linea numerata.

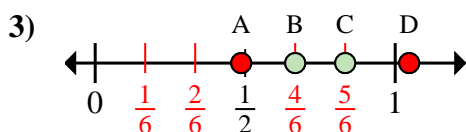
Risposte



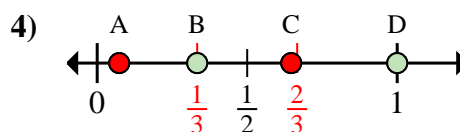
- a. Quale lettera rappresenta meglio $\frac{1}{8}$?
 b. Quale lettera rappresenta meglio $\frac{2}{8}$?



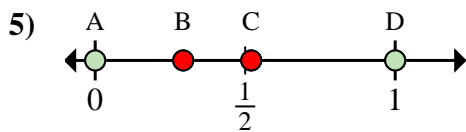
- a. Quale lettera rappresenta meglio $\frac{4}{4}$?
 b. Quale lettera rappresenta meglio $\frac{1}{4}$?



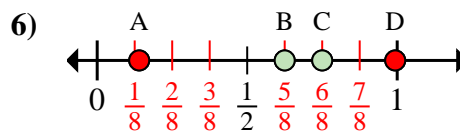
- a. Quale lettera rappresenta meglio $\frac{5}{6}$?
 b. Quale lettera rappresenta meglio $\frac{4}{6}$?



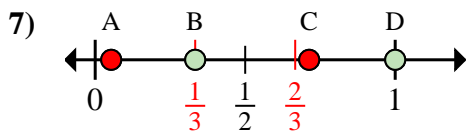
- a. Quale lettera rappresenta meglio $\frac{3}{3}$?
 b. Quale lettera rappresenta meglio $\frac{1}{3}$?



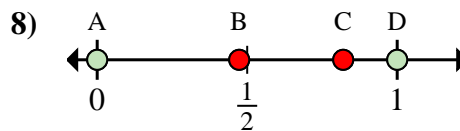
- a. Quale lettera rappresenta meglio $\frac{0}{2}$?
 b. Quale lettera rappresenta meglio $\frac{2}{2}$?



- a. Quale lettera rappresenta meglio $\frac{6}{8}$?
 b. Quale lettera rappresenta meglio $\frac{5}{8}$?



- a. Quale lettera rappresenta meglio $\frac{1}{3}$?
 b. Quale lettera rappresenta meglio $\frac{3}{3}$?



- a. Quale lettera rappresenta meglio $\frac{0}{2}$?
 b. Quale lettera rappresenta meglio $\frac{2}{2}$?

1. A B
 2. D A
 3. C B
 4. D B
 5. A D
 6. C B
 7. B D
 8. A D