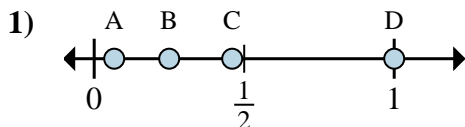


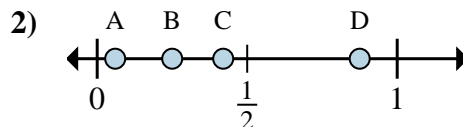


Determina quale lettera rappresenta correttamente la posizione della frazione sulla linea numerata.

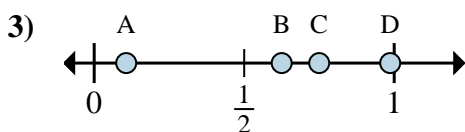
Risposte



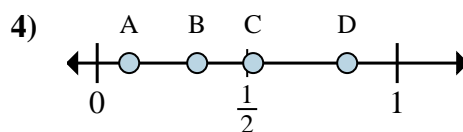
- a. Quale lettera rappresenta meglio $\frac{4}{4}$?
- b. Quale lettera rappresenta meglio $\frac{1}{4}$?



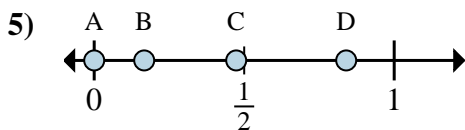
- a. Quale lettera rappresenta meglio $\frac{7}{8}$?
- b. Quale lettera rappresenta meglio $\frac{2}{8}$?



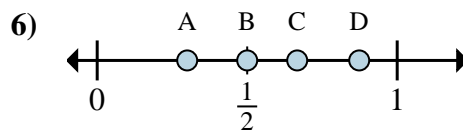
- a. Quale lettera rappresenta meglio $\frac{5}{8}$?
- b. Quale lettera rappresenta meglio $\frac{6}{8}$?



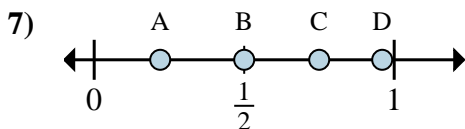
- a. Quale lettera rappresenta meglio $\frac{5}{6}$?
- b. Quale lettera rappresenta meglio $\frac{2}{6}$?



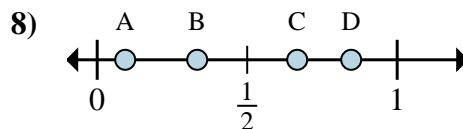
- a. Quale lettera rappresenta meglio $\frac{0}{6}$?
- b. Quale lettera rappresenta meglio $\frac{1}{6}$?



- a. Quale lettera rappresenta meglio $\frac{3}{6}$?
- b. Quale lettera rappresenta meglio $\frac{4}{6}$?



- a. Quale lettera rappresenta meglio $\frac{3}{4}$?
- b. Quale lettera rappresenta meglio $\frac{2}{4}$?



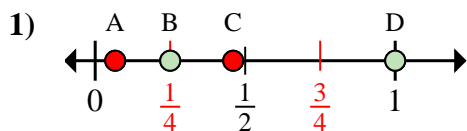
- a. Quale lettera rappresenta meglio $\frac{2}{3}$?
- b. Quale lettera rappresenta meglio $\frac{1}{3}$?

- 1. _____
- 2. _____
- 3. _____
- 4. _____
- 5. _____
- 6. _____
- 7. _____
- 8. _____

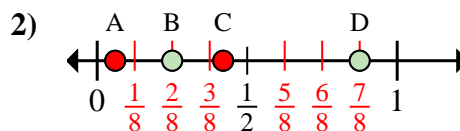


Determina quale lettera rappresenta correttamente la posizione della frazione sulla linea numerata.

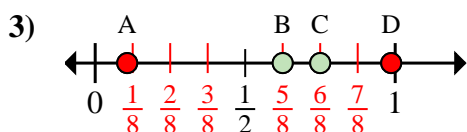
Risposte



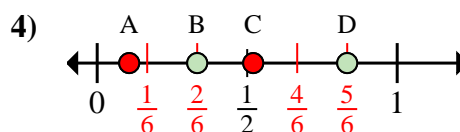
- Quale lettera rappresenta meglio $\frac{4}{4}$?
- Quale lettera rappresenta meglio $\frac{1}{4}$?



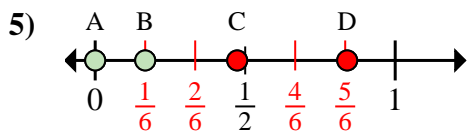
- Quale lettera rappresenta meglio $\frac{7}{8}$?
- Quale lettera rappresenta meglio $\frac{2}{8}$?



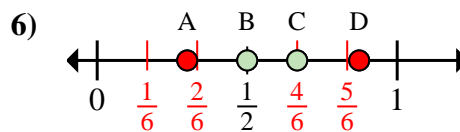
- Quale lettera rappresenta meglio $\frac{5}{8}$?
- Quale lettera rappresenta meglio $\frac{6}{8}$?



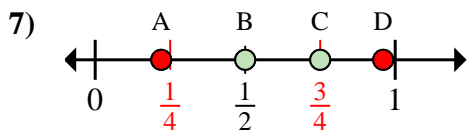
- Quale lettera rappresenta meglio $\frac{5}{6}$?
- Quale lettera rappresenta meglio $\frac{2}{6}$?



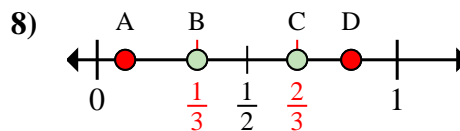
- Quale lettera rappresenta meglio $\frac{0}{6}$?
- Quale lettera rappresenta meglio $\frac{1}{6}$?



- Quale lettera rappresenta meglio $\frac{3}{6}$?
- Quale lettera rappresenta meglio $\frac{4}{6}$?



- Quale lettera rappresenta meglio $\frac{3}{4}$?
- Quale lettera rappresenta meglio $\frac{2}{4}$?



- Quale lettera rappresenta meglio $\frac{2}{3}$?
- Quale lettera rappresenta meglio $\frac{1}{3}$?

- D B
- D B
- B C
- D B
- A B
- B C
- C B
- C B