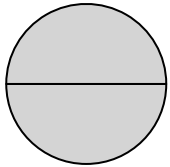


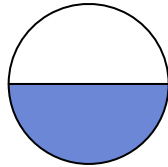
**Determina quale lettera descrive la parte colorata.****Risposte**

1)



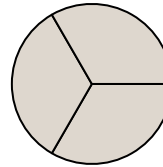
- A. two-halves
B. one-fourth
C. three-fourths

2)




- A. two-halves
B. one-half
C. two-fourths

3)



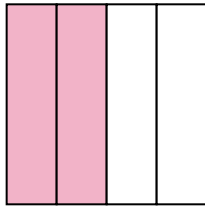
- A. two-fourths
B. three-thirds
C. one-half

4)



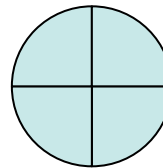
- A. three-thirds
B. four-quarters
C. one-half

5)



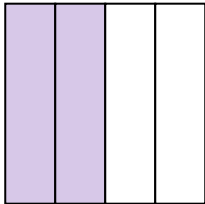
- A. two-fourths
B. one-quarter
C. four-quarters

6)



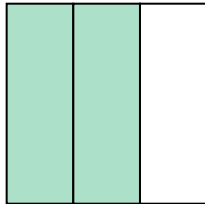
- A. one-fourth
B. two-halves
C. four-quarters

7)



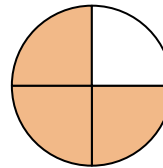
- A. three-fourths
B. two-halves
C. two-quarters

8)



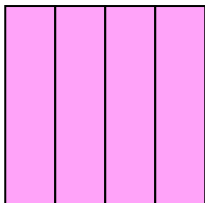
- A. three-quarters
B. two-fourths
C. two-thirds

9)




- A. three-fourths
B. two-halves
C. one-quarter

10)



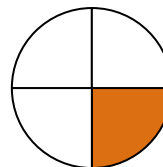
- A. three-fourths
B. two-fourths
C. one-fourth

11)



- A. two-halves
B. one-half
C. three-fourths

12)

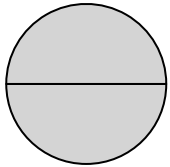


- A. two-halves
B. one-half
C. one-fourth

1. _____
2. _____
3. _____
4. _____
5. _____
6. _____
7. _____
8. _____
9. _____
10. _____
11. _____
12. _____

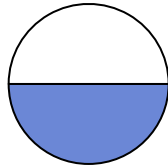
**Determina quale lettera descrive la parte colorata.****Risposte**

1)



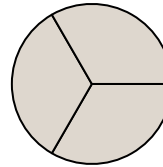
- A. two-halves
B. one-fourth
C. three-fourths

2)




- A. two-halves
B. one-half
C. two-fourths

3)



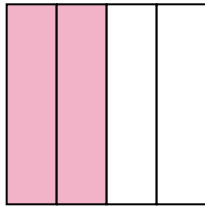
- A. two-fourths
B. three-thirds
C. one-half

4)



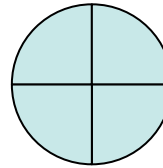
- A. three-thirds
B. four-quarters
C. one-half

5)



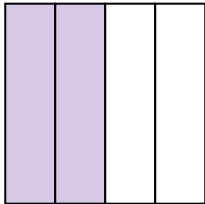
- A. two-fourths
B. one-quarter
C. four-quarters

6)



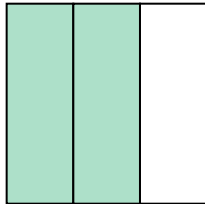
- A. one-fourth
B. two-halves
C. four-quarters

7)



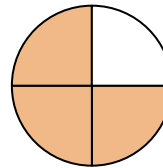
- A. three-fourths
B. two-halves
C. two-quarters

8)



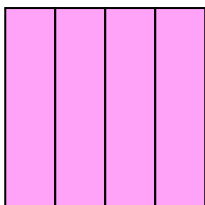
- A. three-quarters
B. two-fourths
C. two-thirds

9)




- A. three-fourths
B. two-halves
C. one-quarter

10)



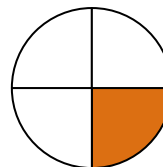
- A. three-fourths
B. two-fourths
C. one-fourth

11)



- A. two-halves
B. one-half
C. three-fourths

12)



- A. two-halves
B. one-half
C. one-fourth

1. **A**
2. **B**
3. **B**
4. **A**
5. **A**
6. **C**
7. **C**
8. **C**
9. **A**
10. **A**
11. **B**
12. **C**