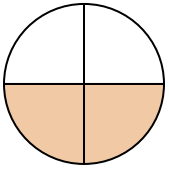




Determina quale lettera descrive la parte colorata.


**Risposte**

1)



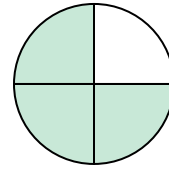
- A. two-fourths
- B. two-halves
- C. one-quarter

2)



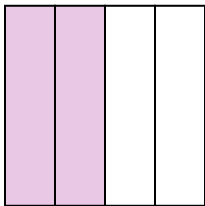
- A. two-halves
- B. one-half
- C. four-quarters

3)



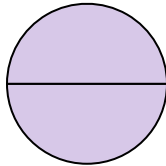
- A. two-fourths
- B. three-fourths
- C. one-half

4)




- A. one-fourth
- B. two-halves
- C. two-fourths

5)



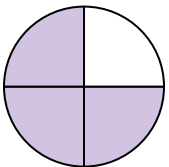
- A. two-fourths
- B. two-halves
- C. four-quarters

6)



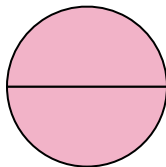
- A. three-fourths
- B. one-half
- C. two-quarters

7)




- A. one-half
- B. two-halves
- C. three-quarters

8)



- A. two-halves
- B. three-quarters
- C. one-fourth

9)

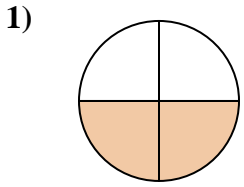


- A. two-fourths
- B. one-fourth
- C. three-quarters

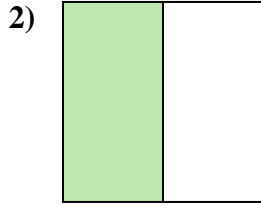
- 1. \_\_\_\_\_
- 2. \_\_\_\_\_
- 3. \_\_\_\_\_
- 4. \_\_\_\_\_
- 5. \_\_\_\_\_
- 6. \_\_\_\_\_
- 7. \_\_\_\_\_
- 8. \_\_\_\_\_
- 9. \_\_\_\_\_



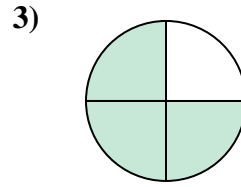
Determina quale lettera descrive la parte colorata.



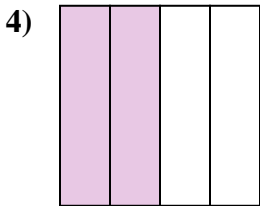
- A. two-fourths
- B. two-halves
- C. one-quarter



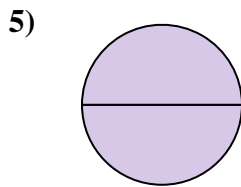
- A. two-halves
- B. one-half
- C. four-quarters



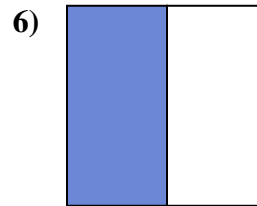
- A. two-fourths
- B. three-fourths
- C. one-half



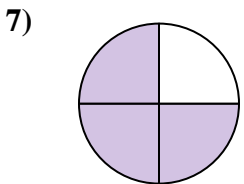
- A. one-fourth
- B. two-halves
- C. two-fourths



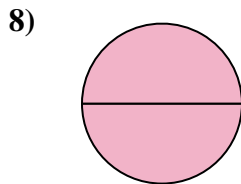
- A. two-fourths
- B. two-halves
- C. four-quarters



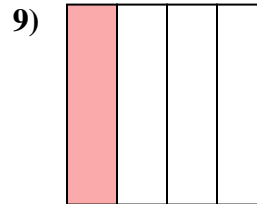
- A. three-fourths
- B. one-half
- C. two-quarters



- A. one-half
- B. two-halves
- C. three-quarters



- A. two-halves
- B. three-quarters
- C. one-fourth



- A. two-fourths
- B. one-fourth
- C. three-quarters

**Risposte**

- 1.   **A**
- 2.   **B**
- 3.   **B**
- 4.   **C**
- 5.   **B**
- 6.   **B**
- 7.   **C**
- 8.   **A**
- 9.   **B**