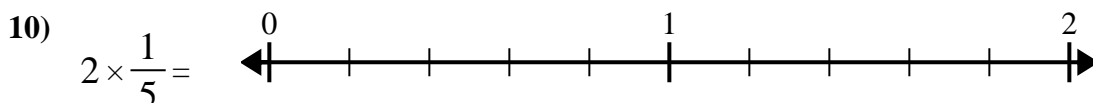
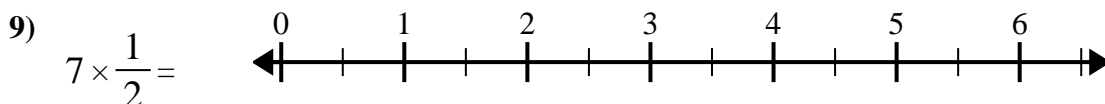
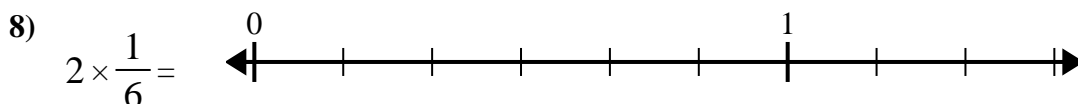
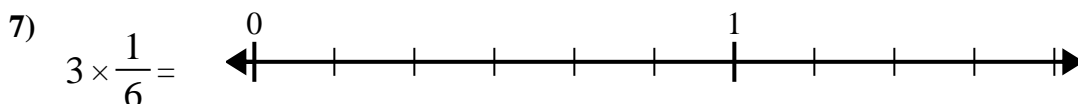
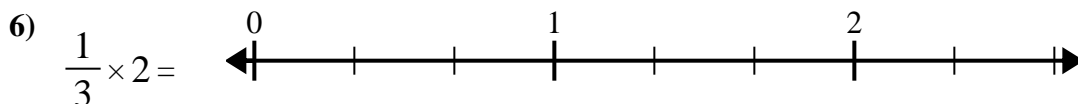
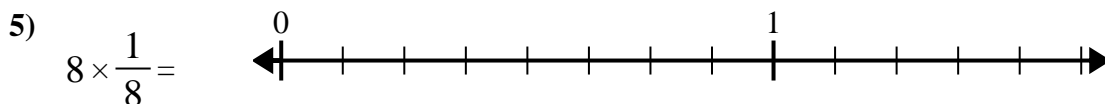
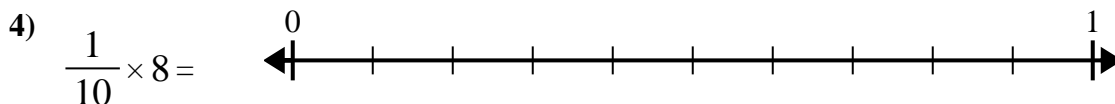
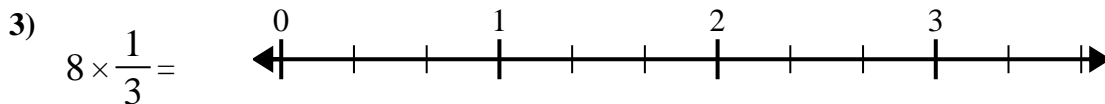
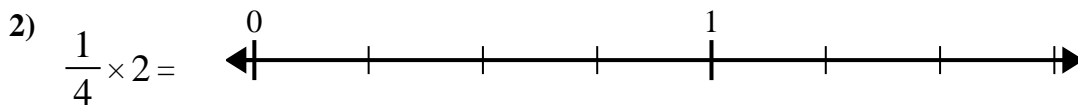
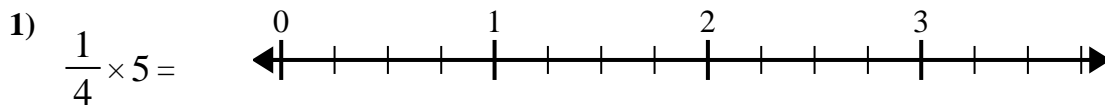




Usa la linea dei numeri per risolvere.



Risposte

1. _____

2. _____

3. _____

4. _____

5. _____

6. _____

7. _____

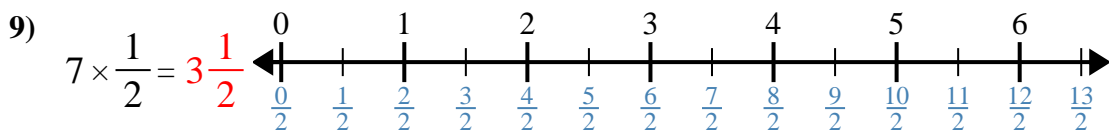
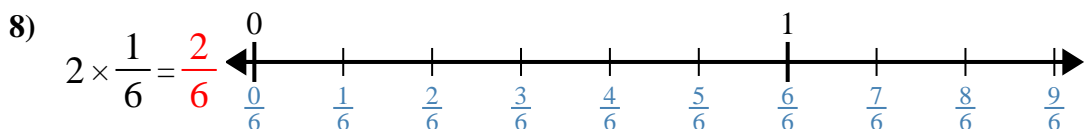
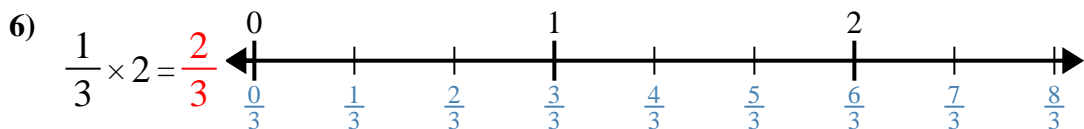
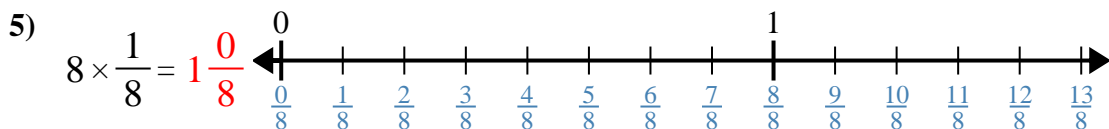
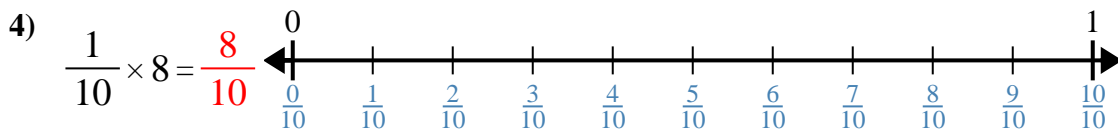
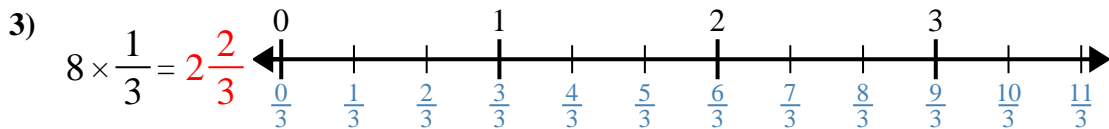
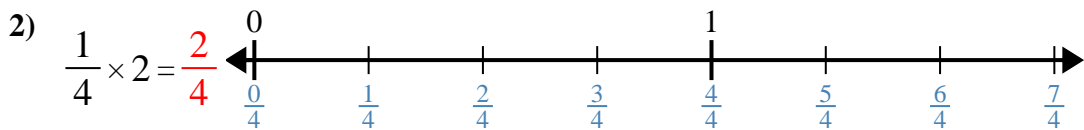
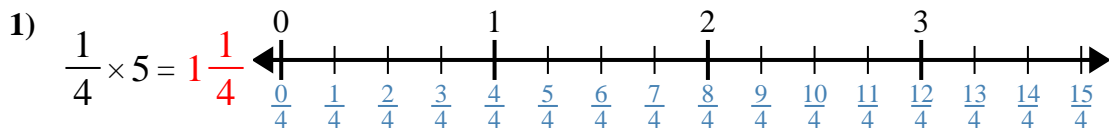
8. _____

9. _____

10. _____



Usa la linea dei numeri per risolvere.



Risposte

1. $1\frac{1}{4}$

2. $\frac{2}{4}$

3. $2\frac{2}{3}$

4. $\frac{8}{10}$

5. $1\frac{0}{8}$

6. $\frac{2}{3}$

7. $\frac{3}{6}$

8. $\frac{2}{6}$

9. $3\frac{1}{2}$

10. $\frac{2}{5}$



Usa la linea dei numeri per risolvere.

$\frac{2}{3}$

$2\frac{2}{3}$

$3\frac{1}{2}$

$\frac{2}{6}$

$\frac{2}{4}$

$\frac{2}{5}$

$\frac{8}{10}$

$1\frac{0}{8}$

$\frac{3}{6}$

$1\frac{1}{4}$

Risposte

1. _____

2. _____

3. _____

4. _____

5. _____

6. _____

7. _____

8. _____

9. _____

10. _____

