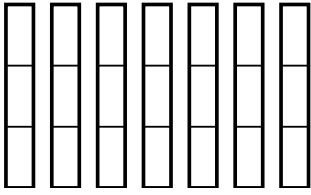


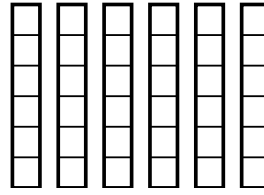


Usa i modelli visivi per risolvere.

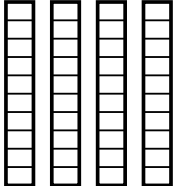
1) $\frac{1}{3} \times 7 =$



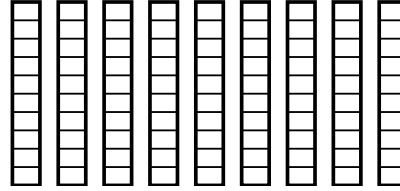
2) $\frac{5}{6} \times 6 =$



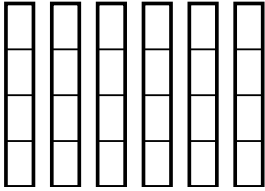
3) $\frac{9}{10} \times 4 =$



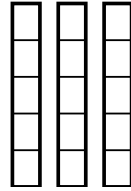
4) $\frac{7}{10} \times 9 =$



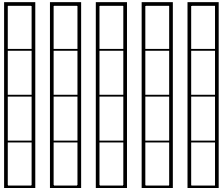
5) $\frac{2}{4} \times 6 =$



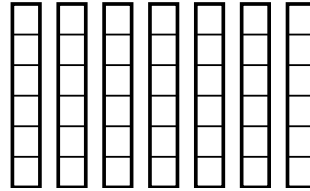
6) $\frac{3}{5} \times 3 =$



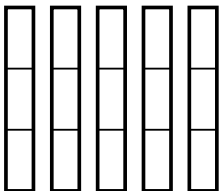
7) $\frac{2}{4} \times 5 =$



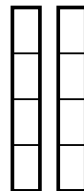
8) $\frac{3}{6} \times 7 =$



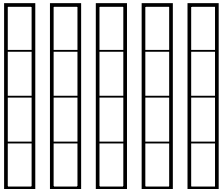
9) $\frac{1}{3} \times 5 =$



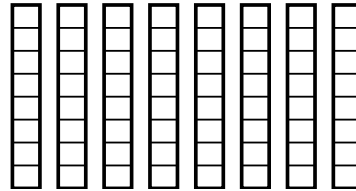
10) $\frac{1}{4} \times 2 =$



11) $\frac{3}{4} \times 5 =$



12) $\frac{1}{8} \times 8 =$



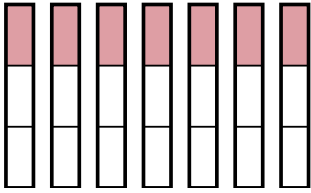
Risposte

1. _____
2. _____
3. _____
4. _____
5. _____
6. _____
7. _____
8. _____
9. _____
10. _____
11. _____
12. _____

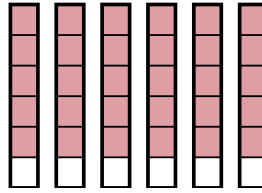


Usa i modelli visivi per risolvere.

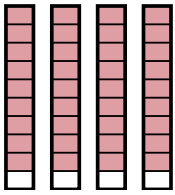
1) $\frac{1}{3} \times 7 =$



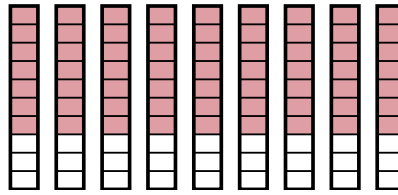
2) $\frac{5}{6} \times 6 =$



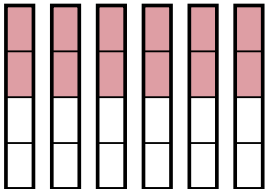
3) $\frac{9}{10} \times 4 =$



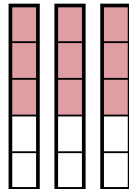
4) $\frac{7}{10} \times 9 =$



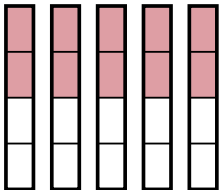
5) $\frac{2}{4} \times 6 =$



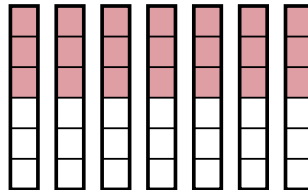
6) $\frac{3}{5} \times 3 =$



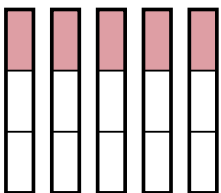
7) $\frac{2}{4} \times 5 =$



8) $\frac{3}{6} \times 7 =$



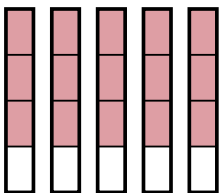
9) $\frac{1}{3} \times 5 =$



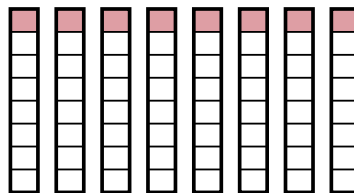
10) $\frac{1}{4} \times 2 =$



11) $\frac{3}{4} \times 5 =$



12) $\frac{1}{8} \times 8 =$



Risposte

1. $\frac{7}{3}$

2. $\frac{30}{6}$

3. $\frac{36}{10}$

4. $\frac{63}{10}$

5. $\frac{12}{4}$

6. $\frac{9}{5}$

7. $\frac{10}{4}$

8. $\frac{21}{6}$

9. $\frac{5}{3}$

10. $\frac{2}{4}$

11. $\frac{15}{4}$

12. $\frac{8}{8}$