







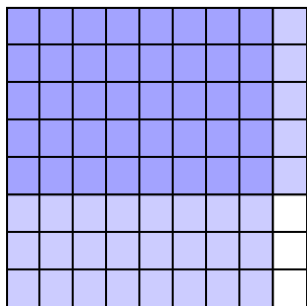




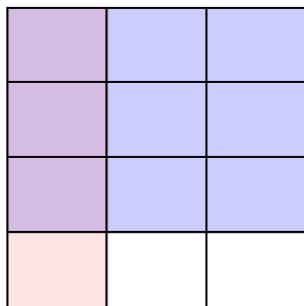


Usa i quadrati per rappresentare la moltiplicazione indicata.

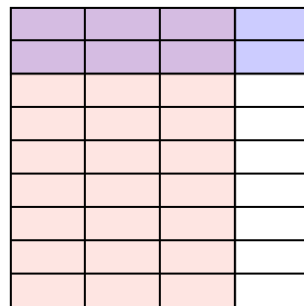
Es)  $\frac{8}{9} \times \frac{5}{8} =$




1)  $\frac{1}{3} \times \frac{3}{4} =$



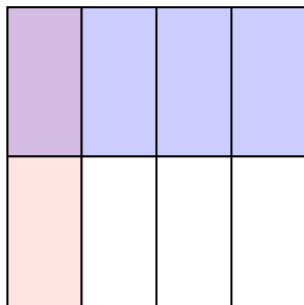
2)  $\frac{3}{4} \times \frac{2}{9} =$



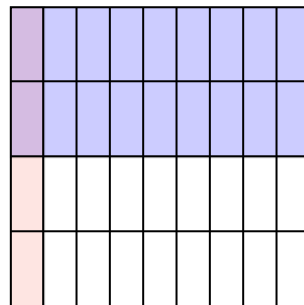
3)  $\frac{1}{2} \times \frac{1}{2} =$



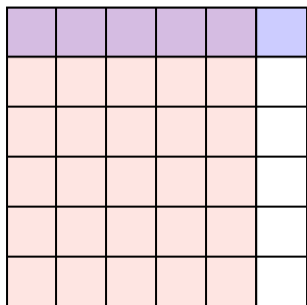
4)  $\frac{1}{4} \times \frac{1}{2} =$



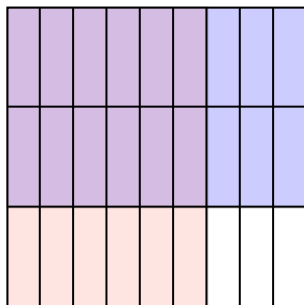
5)  $\frac{1}{9} \times \frac{2}{4} =$




6)  $\frac{5}{6} \times \frac{1}{6} =$



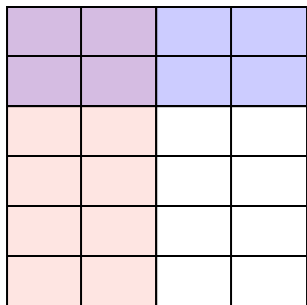
7)  $\frac{6}{9} \times \frac{2}{3} =$



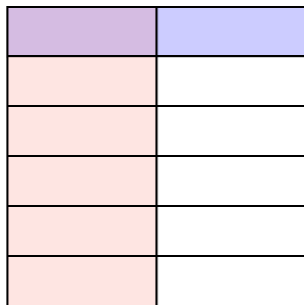
8)  $\frac{5}{6} \times \frac{7}{9} =$



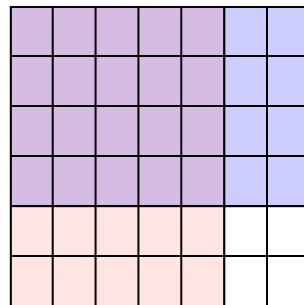
9)  $\frac{2}{4} \times \frac{2}{6} =$



10)  $\frac{1}{2} \times \frac{1}{6} =$



11)  $\frac{5}{7} \times \frac{4}{6} =$



**Risposte**

Es.  $\frac{40}{72}$

1.  $\frac{3}{12}$

2.  $\frac{6}{36}$

3.  $\frac{1}{4}$

4.  $\frac{1}{8}$

5.  $\frac{2}{36}$

6.  $\frac{5}{36}$

7.  $\frac{12}{27}$

8.  $\frac{35}{54}$

9.  $\frac{4}{24}$

10.  $\frac{1}{12}$

11.  $\frac{20}{42}$














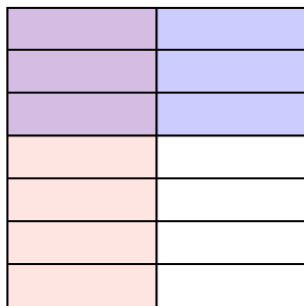


Usa i quadrati per rappresentare la moltiplicazione indicata.

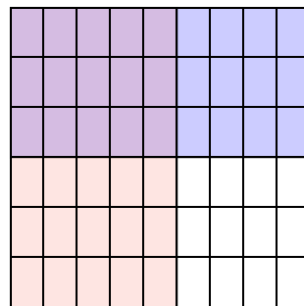
Es)  $\frac{2}{4} \times \frac{1}{3} =$



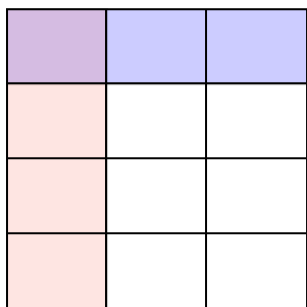
1)  $\frac{1}{2} \times \frac{3}{7} =$



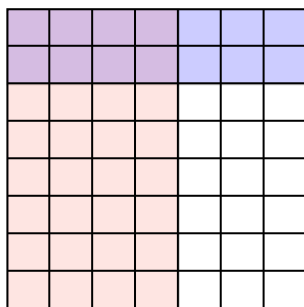
2)  $\frac{5}{9} \times \frac{3}{6} =$



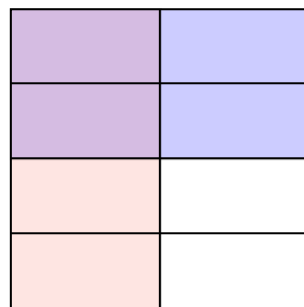
3)  $\frac{1}{3} \times \frac{1}{4} =$



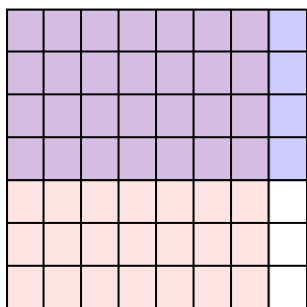
4)  $\frac{4}{7} \times \frac{2}{8} =$



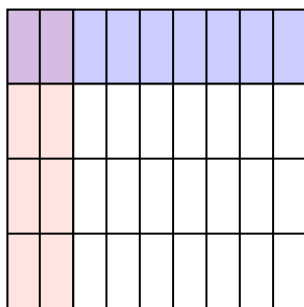
5)  $\frac{1}{2} \times \frac{2}{4} =$



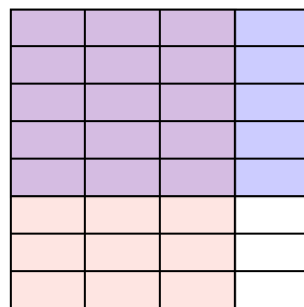
6)  $\frac{7}{8} \times \frac{4}{7} =$



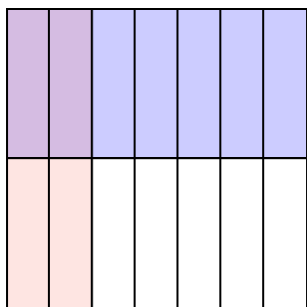
7)  $\frac{2}{9} \times \frac{1}{4} =$



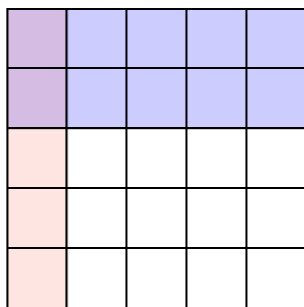
8)  $\frac{3}{4} \times \frac{5}{8} =$



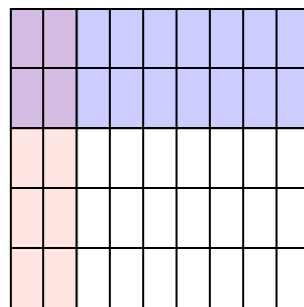
9)  $\frac{2}{7} \times \frac{1}{2} =$



10)  $\frac{1}{5} \times \frac{2}{5} =$



11)  $\frac{2}{9} \times \frac{2}{5} =$



**Risposte**

Es.  $\frac{2}{12}$

1.  $\frac{3}{14}$

2.  $\frac{15}{54}$

3.  $\frac{1}{12}$

4.  $\frac{8}{56}$

5.  $\frac{2}{8}$

6.  $\frac{28}{56}$

7.  $\frac{2}{36}$

8.  $\frac{15}{32}$

9.  $\frac{2}{14}$

10.  $\frac{2}{25}$

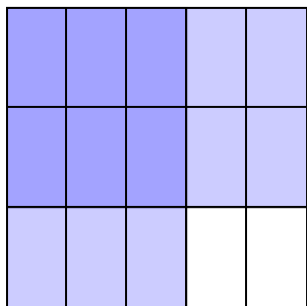
11.  $\frac{4}{45}$



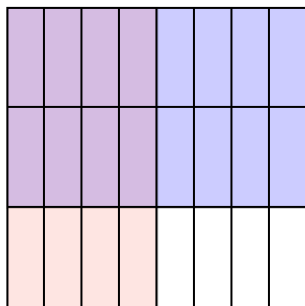


Usa i quadrati per rappresentare la moltiplicazione indicata.

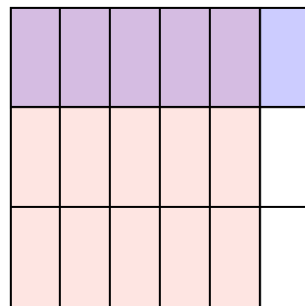
Es)  $\frac{3}{5} \times \frac{2}{3} =$



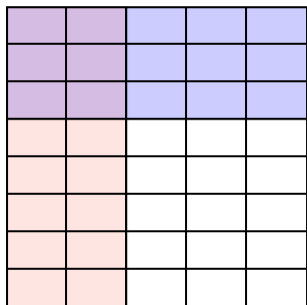
1)  $\frac{4}{8} \times \frac{2}{3} =$



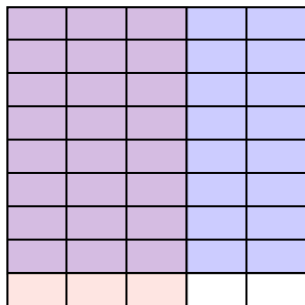
2)  $\frac{5}{6} \times \frac{1}{3} =$




3)  $\frac{2}{5} \times \frac{3}{8} =$



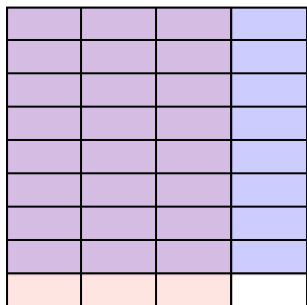
4)  $\frac{3}{5} \times \frac{8}{9} =$



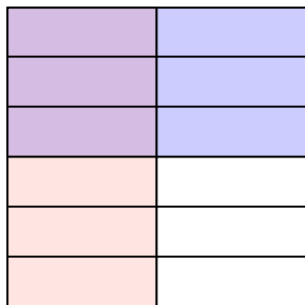
5)  $\frac{1}{3} \times \frac{1}{2} =$



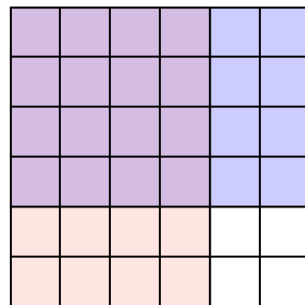
6)  $\frac{3}{4} \times \frac{8}{9} =$



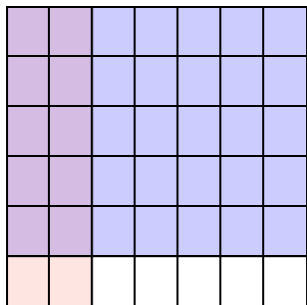
7)  $\frac{1}{2} \times \frac{3}{6} =$




8)  $\frac{4}{6} \times \frac{4}{6} =$



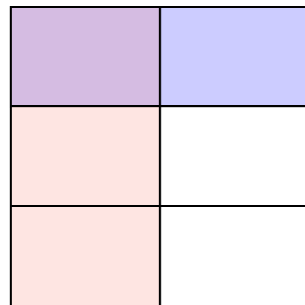
9)  $\frac{2}{7} \times \frac{5}{6} =$



10)  $\frac{4}{8} \times \frac{5}{8} =$



11)  $\frac{1}{2} \times \frac{1}{3} =$



**Risposte**

Es.  $\frac{6}{15}$

1.  $\frac{8}{24}$

2.  $\frac{5}{18}$

3.  $\frac{6}{40}$

4.  $\frac{24}{45}$

5.  $\frac{1}{6}$

6.  $\frac{24}{36}$

7.  $\frac{3}{12}$

8.  $\frac{16}{36}$

9.  $\frac{10}{42}$

10.  $\frac{20}{64}$

11.  $\frac{1}{6}$





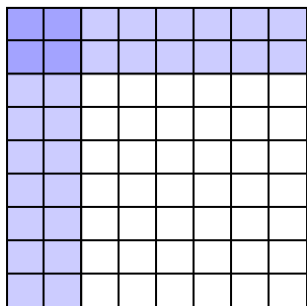




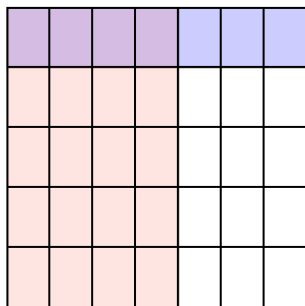


Usa i quadrati per rappresentare la moltiplicazione indicata.

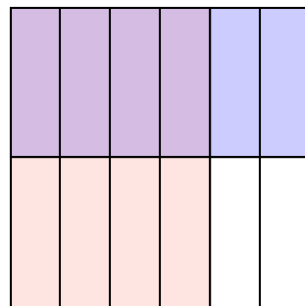
Es)  $\frac{2}{8} \times \frac{2}{9} =$



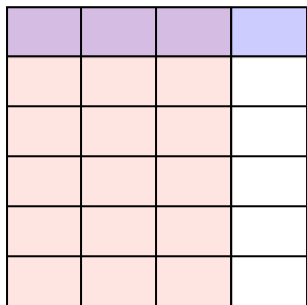
1)  $\frac{4}{7} \times \frac{1}{5} =$



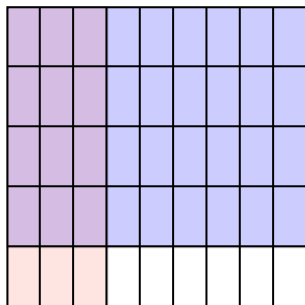
2)  $\frac{4}{6} \times \frac{1}{2} =$



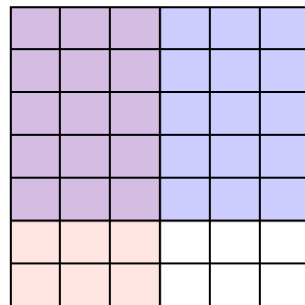
3)  $\frac{3}{4} \times \frac{1}{6} =$



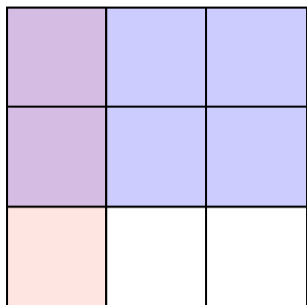
4)  $\frac{3}{9} \times \frac{4}{5} =$



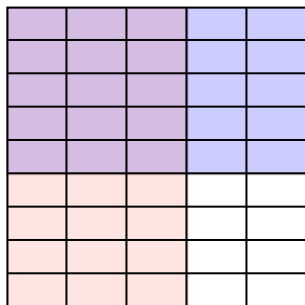
5)  $\frac{3}{6} \times \frac{5}{7} =$




6)  $\frac{1}{3} \times \frac{2}{3} =$



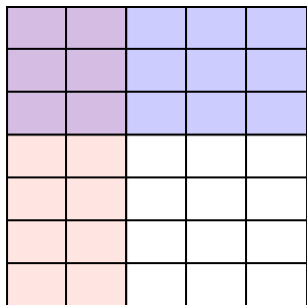
7)  $\frac{3}{5} \times \frac{5}{9} =$




8)  $\frac{3}{7} \times \frac{7}{8} =$



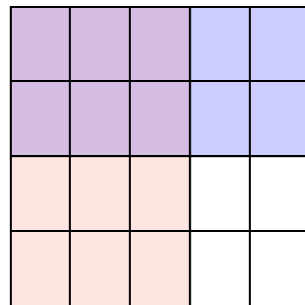
9)  $\frac{2}{5} \times \frac{3}{7} =$



10)  $\frac{1}{2} \times \frac{6}{8} =$



11)  $\frac{3}{5} \times \frac{2}{4} =$



**Risposte**

Es.  $\frac{4}{72}$

1.  $\frac{4}{35}$

2.  $\frac{4}{12}$

3.  $\frac{3}{24}$

4.  $\frac{12}{45}$

5.  $\frac{15}{42}$

6.  $\frac{2}{9}$

7.  $\frac{15}{45}$

8.  $\frac{21}{56}$

9.  $\frac{6}{35}$


10.  $\frac{6}{16}$

11.  $\frac{6}{20}$




Usa i quadrati per rappresentare la moltiplicazione indicata.


Es)  $\frac{1}{3} \times \frac{2}{4} =$




1)  $\frac{1}{6} \times \frac{3}{6} =$




2)  $\frac{4}{7} \times \frac{4}{5} =$



3)  $\frac{1}{4} \times \frac{1}{3} =$




4)  $\frac{2}{8} \times \frac{5}{8} =$




5)  $\frac{3}{4} \times \frac{7}{9} =$




6)  $\frac{5}{6} \times \frac{1}{2} =$




7)  $\frac{4}{5} \times \frac{3}{7} =$




8)  $\frac{8}{9} \times \frac{1}{2} =$




9)  $\frac{7}{8} \times \frac{4}{8} =$



10)  $\frac{2}{6} \times \frac{4}{7} =$



11)  $\frac{1}{2} \times \frac{1}{2} =$

**Risposte**Es.  $\frac{2}{12}$ 

1. \_\_\_\_\_

2. \_\_\_\_\_

3. \_\_\_\_\_

4. \_\_\_\_\_

5. \_\_\_\_\_

6. \_\_\_\_\_

7. \_\_\_\_\_

8. \_\_\_\_\_

9. \_\_\_\_\_

10. \_\_\_\_\_

11. \_\_\_\_\_

