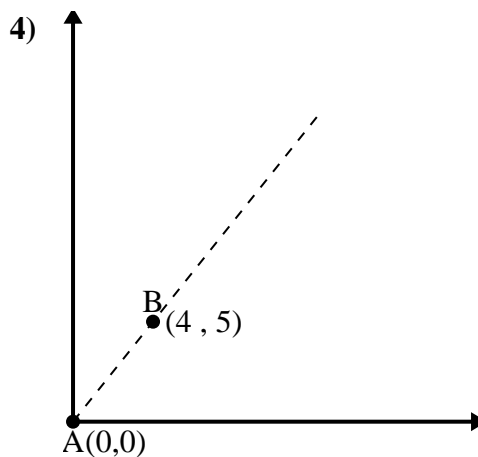
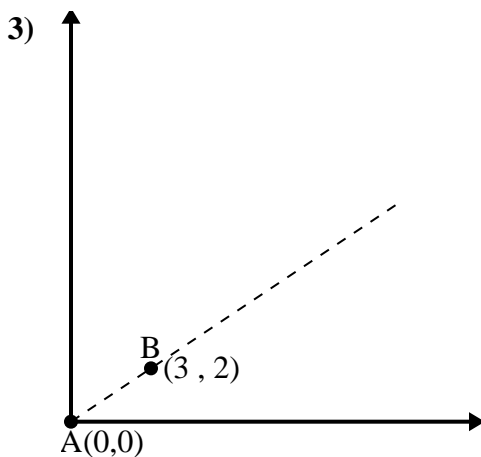
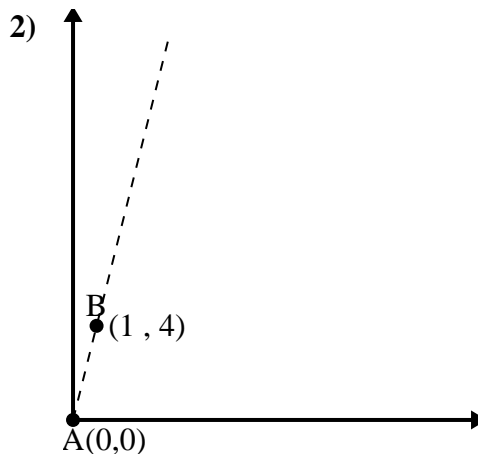
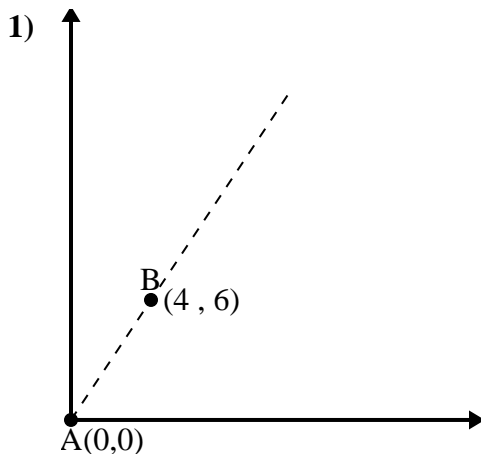




Usa la legge del coseno per trovare l'angolo del punto B rispetto al punto A.

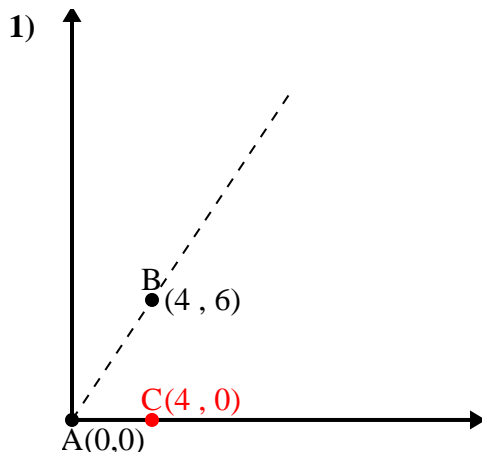
**Risposte**



- 1. \_\_\_\_\_
- 2. \_\_\_\_\_
- 3. \_\_\_\_\_
- 4. \_\_\_\_\_



Usa la legge del coseno per trovare l'angolo del punto B rispetto al punto A.

**Risposte**

$$\overline{AB} \text{ length} = 7.21$$

$$\overline{AC} \text{ length} = 4$$

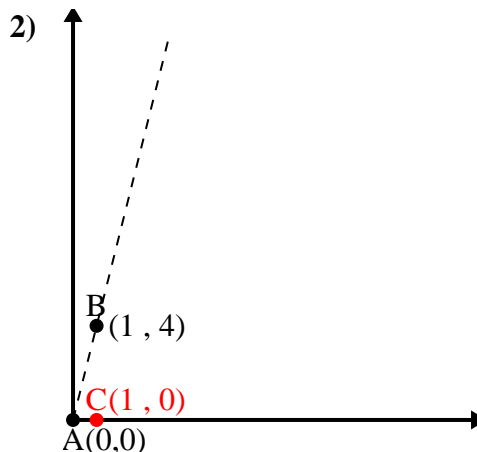
$$\overline{BC} \text{ length} = 6$$

$$(52 + 16 + 36) : (2 \times 7.21 \times 4)$$

$$0.55$$

$$\cos^{-1}(0.55)$$

$$56.31^\circ$$



$$\overline{AB} \text{ length} = 4.12$$

$$\overline{AC} \text{ length} = 1$$

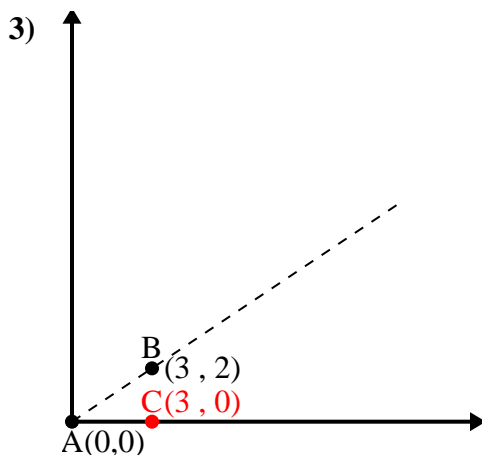
$$\overline{BC} \text{ length} = 4$$

$$(17 + 1 + 16) : (2 \times 4.12 \times 1)$$

$$0.24$$

$$\cos^{-1}(0.24)$$

$$75.96^\circ$$



$$\overline{AB} \text{ length} = 3.61$$

$$\overline{AC} \text{ length} = 3$$

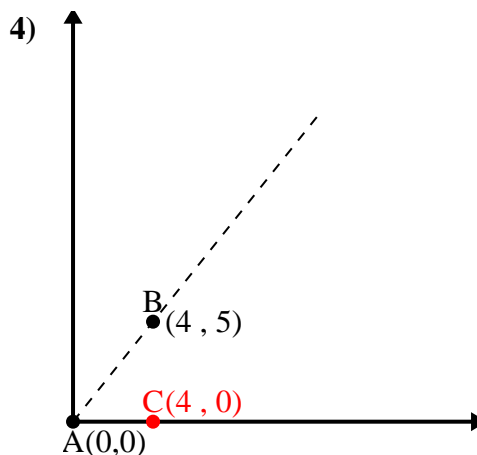
$$\overline{BC} \text{ length} = 2$$

$$(13 + 9 + 4) : (2 \times 3.61 \times 3)$$

$$0.83$$

$$\cos^{-1}(0.83)$$

$$33.69^\circ$$



$$\overline{AB} \text{ length} = 6.4$$

$$\overline{AC} \text{ length} = 4$$

$$\overline{BC} \text{ length} = 5$$

$$(41 + 16 + 25) : (2 \times 6.4 \times 4)$$

$$0.62$$

$$\cos^{-1}(0.62)$$

$$51.34^\circ$$

1. 56,31°

2. 75,96°

3. 33,69°

4. 51,34°