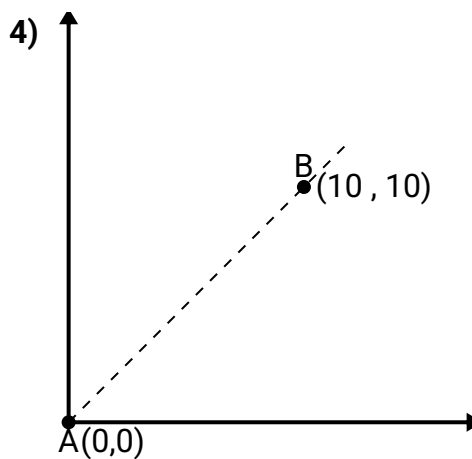
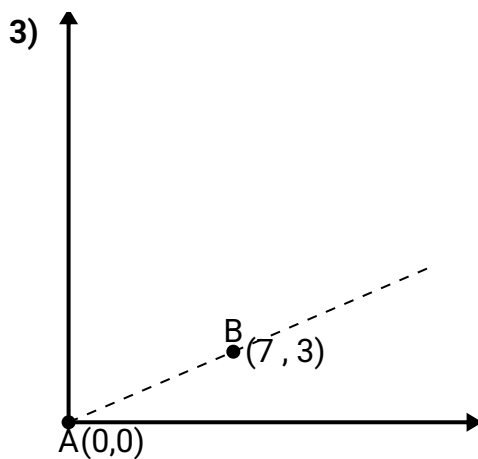
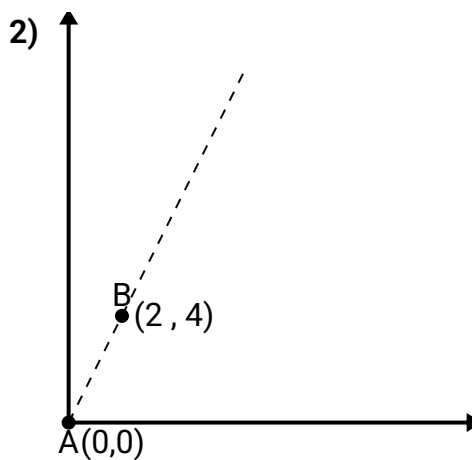
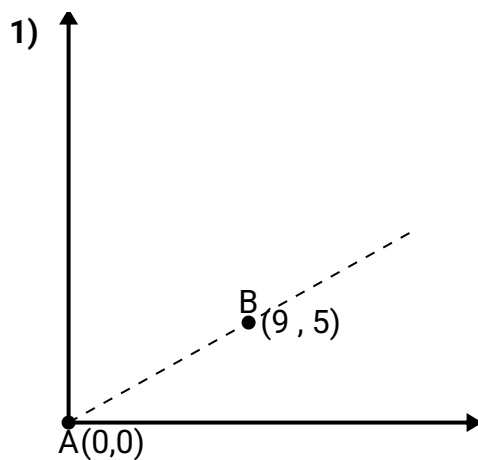




Usa la legge del coseno per trovare l'angolo del punto B rispetto al punto A.

Risposte

1. _____

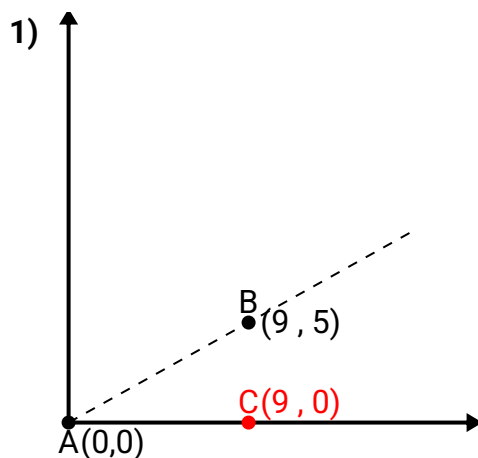
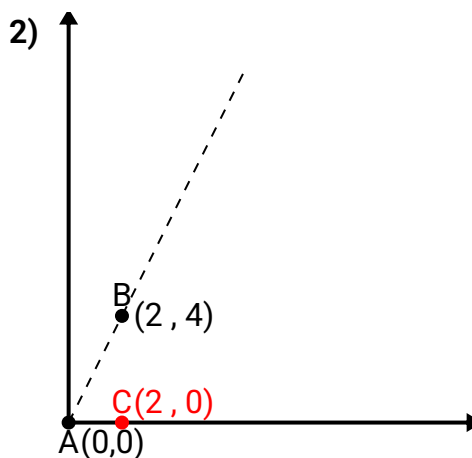
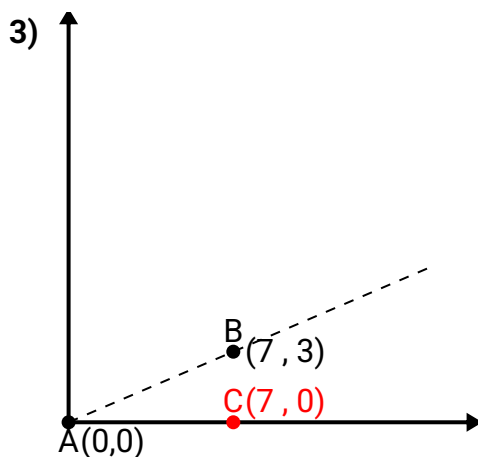
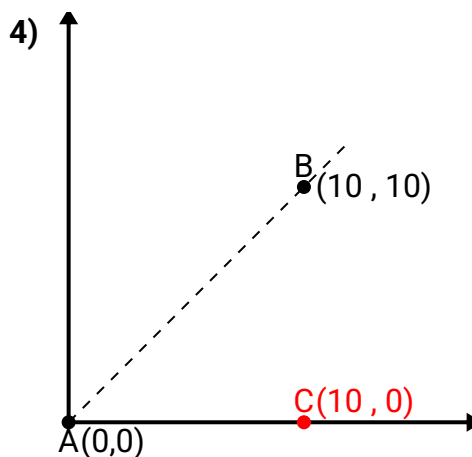
2. _____

3. _____

4. _____



Usa la legge del coseno per trovare l'angolo del punto B rispetto al punto A.

Risposte \overline{AB} length = 10.3 \overline{AC} length = 9 \overline{BC} length = 5 \overline{AB} length = 4.47 \overline{AC} length = 2 \overline{BC} length = 4 \overline{AB} length = 7.62 \overline{AC} length = 7 \overline{BC} length = 3 \overline{AB} length = 14.14 \overline{AC} length = 10 \overline{BC} length = 10

1. **29,05**
2. **63,43**
3. **23,2**
4. **45**