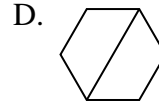
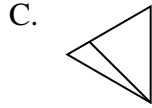
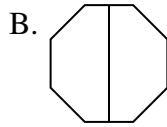
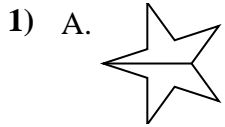




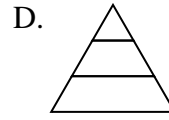
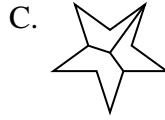
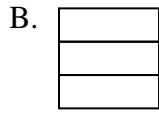
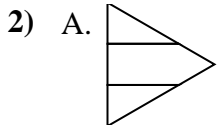
Determina quale scelta (scelte) mostri la forma suddivisa in modo che ogni parte abbia la stessa area. Se nessuna, scrivi 'nessuna'.

Risposte



1. _____

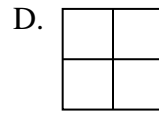
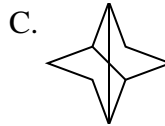
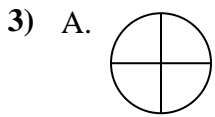
2. _____



3. _____

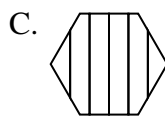
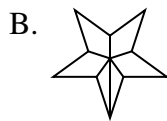
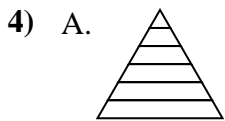
4. _____

5. _____

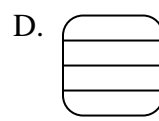
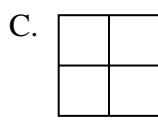
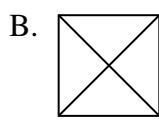
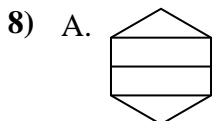
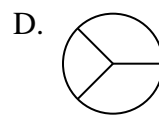
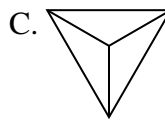
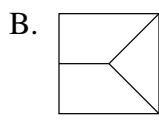
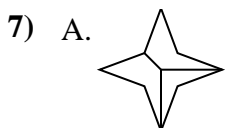
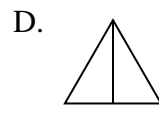
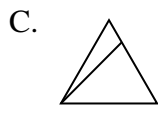
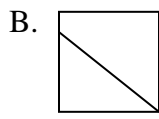
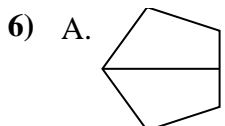
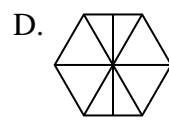
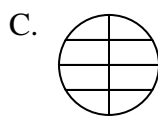
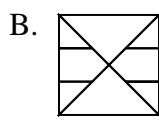
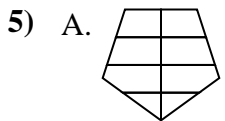


6. _____

7. _____


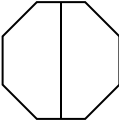
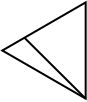
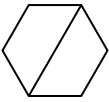


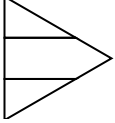

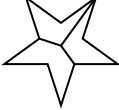
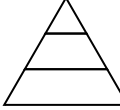
8. _____

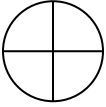


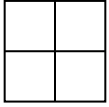


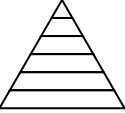
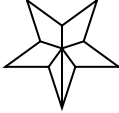
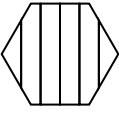
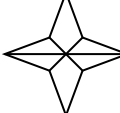


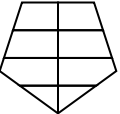
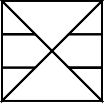
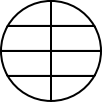
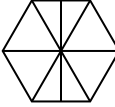
Determina quale scelta (scelte) mostri la forma suddivisa in modo che ogni parte abbia la stessa area. Se nessuna, scrivi 'nessuna'.

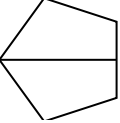
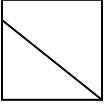
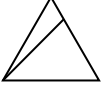
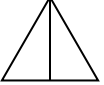
1) A.  B.  C.  D. 


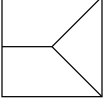
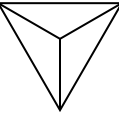
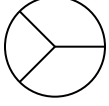
2) A.  B.  C.  D. 

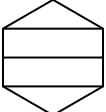

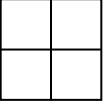
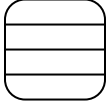
3) A.  B.  C.  D. 

4) A.  B.  C.  D. 

5) A.  B.  C.  D. 

6) A.  B.  C.  D. 

7) A.  B.  C.  D. 

8) A.  B.  C.  D. 

Risposte

1. A,B,D
2. B
3. A,B,D
4. nessuna
5. nessuna
6. A,D
7. C
8. B,C