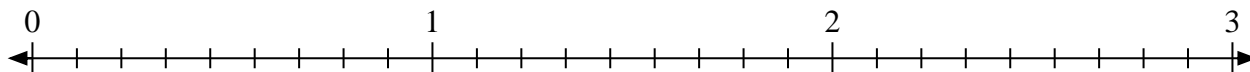
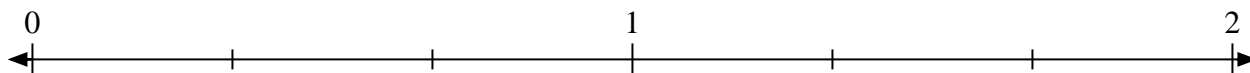


**Risolvi ogni problema.**

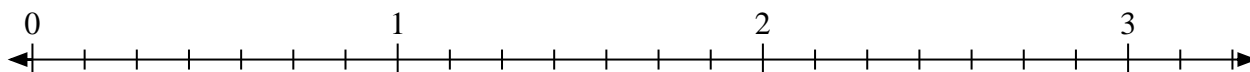
- 1) Indica la posizione di
- $\frac{15}{9}$



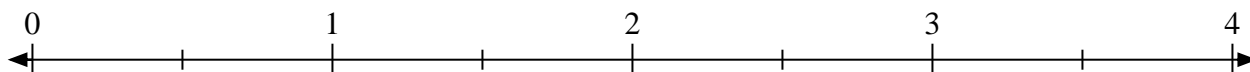
- 2) Indica la posizione di
- $\frac{5}{3}$



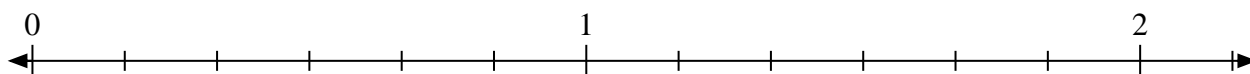
- 3) Indica la posizione di
- $\frac{13}{7}$



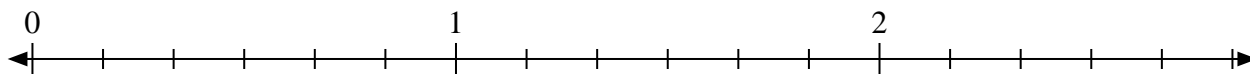
- 4) Indica la posizione di
- $\frac{5}{2}$



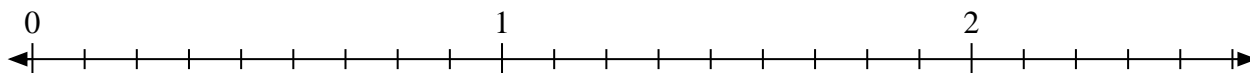
- 5) Indica la posizione di
- $\frac{8}{6}$



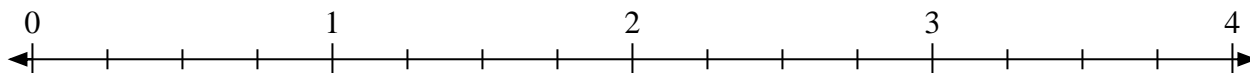
- 6) Indica la posizione di
- $\frac{10}{6}$



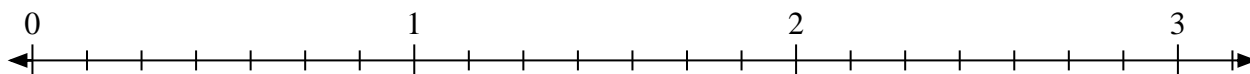
- 7) Indica la posizione di
- $\frac{20}{9}$



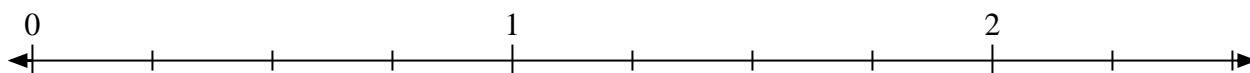
- 8) Indica la posizione di
- $\frac{11}{4}$



- 9) Indica la posizione di
- $\frac{11}{7}$

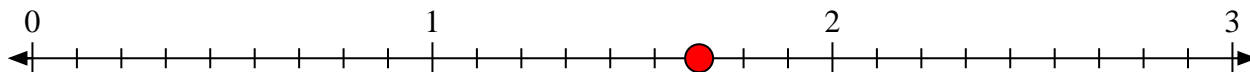


- 10) Indica la posizione di
- $\frac{8}{4}$

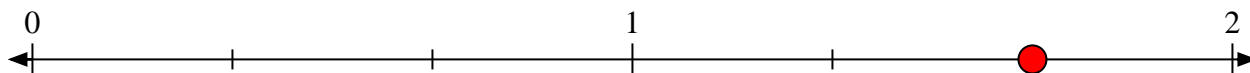


**Risolvi ogni problema.**

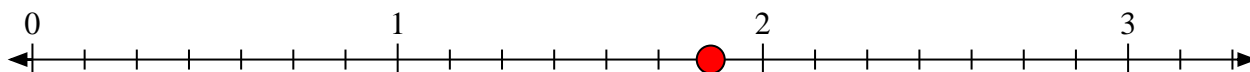
- 1) Indica la posizione di
- $\frac{15}{9}$



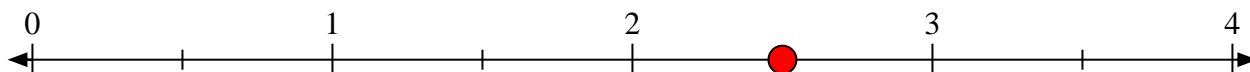
- 2) Indica la posizione di
- $\frac{5}{3}$



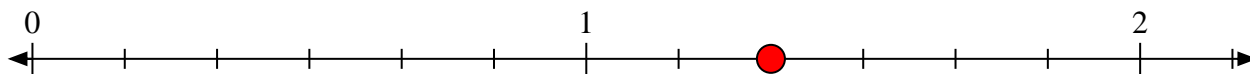
- 3) Indica la posizione di
- $\frac{13}{7}$



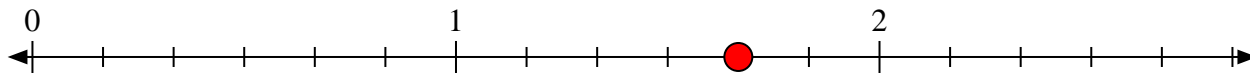
- 4) Indica la posizione di
- $\frac{5}{2}$



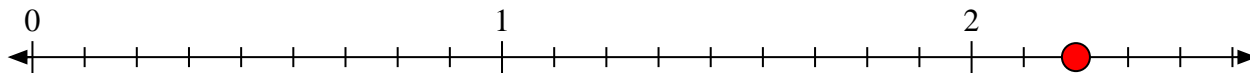
- 5) Indica la posizione di
- $\frac{8}{6}$



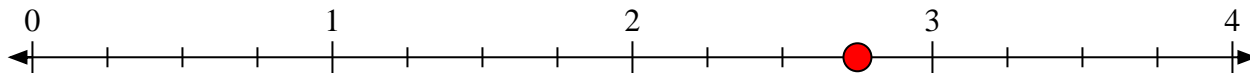
- 6) Indica la posizione di
- $\frac{10}{6}$



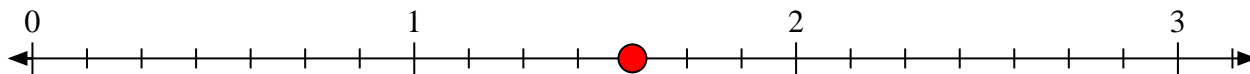
- 7) Indica la posizione di
- $\frac{20}{9}$



- 8) Indica la posizione di
- $\frac{11}{4}$



- 9) Indica la posizione di
- $\frac{11}{7}$



- 10) Indica la posizione di
- $\frac{8}{4}$

