

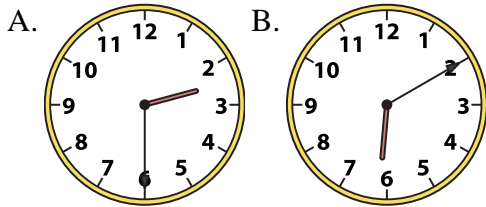


Nome: \_\_\_\_\_

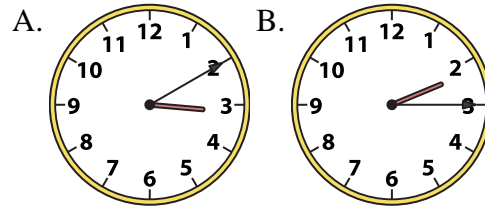
Risolvi ogni problema.

**Risposte**

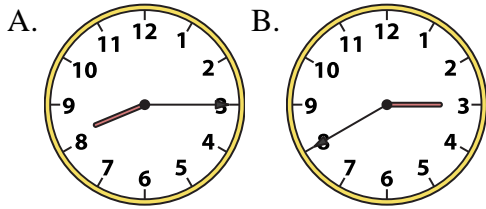
1) 2:30



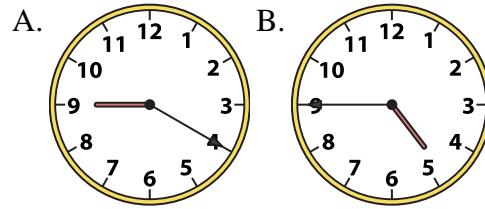
2) 2:15



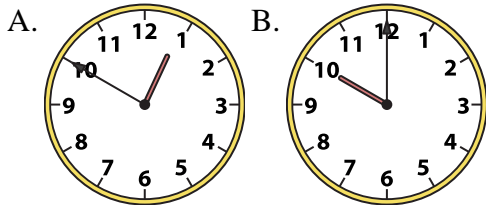
3) 8:15



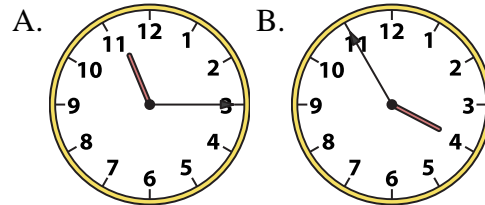
4) 4:45



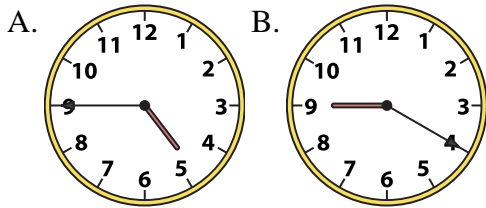
5) 10:00



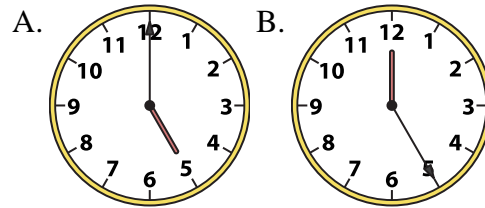
6) 11:15



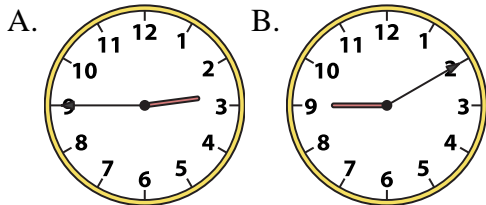
7) 4:45



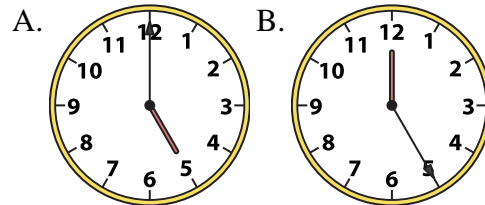
8) 5:00



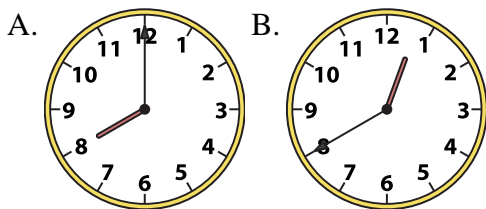
9) 2:45



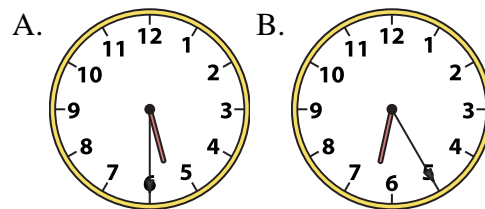
10) 5:00



11) 8:00



12) 5:30



1. \_\_\_\_\_
2. \_\_\_\_\_
3. \_\_\_\_\_
4. \_\_\_\_\_
5. \_\_\_\_\_
6. \_\_\_\_\_
7. \_\_\_\_\_
8. \_\_\_\_\_
9. \_\_\_\_\_
10. \_\_\_\_\_
11. \_\_\_\_\_
12. \_\_\_\_\_




Risolvi ogni problema.


**Risposte**

1) 2:30

A.




B.




2) 2:15

A.




B.


1.     **A**    

3) 8:15

A.



B.




4) 4:45

A.




B.


2.     **B**    

5) 10:00

A.




B.




6) 11:15

A.




B.


3.     **A**    

7) 4:45

A.




B.




8) 5:00

A.



B.

4.     **B**    

9) 2:45

A.




B.




10) 5:00

A.




B.

5.     **B**    

11) 8:00

A.




B.




12) 5:30

A.



B.

6.     **A**    7.     **A**    8.     **A**    9.     **A**    10.     **A**    11.     **A**    12.     **A**