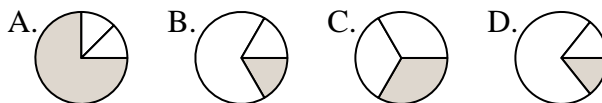




Determina quale lettera rappresenta correttamente la frazione.

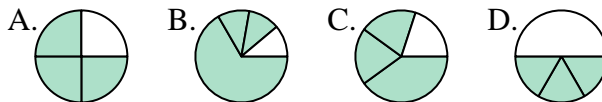
Risposte

1) Quale risposta corrisponde a $\frac{1}{3}$?



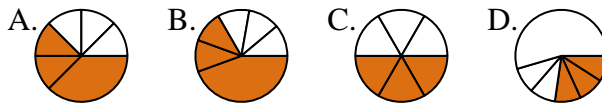
1. _____

2) Quale risposta corrisponde a $\frac{3}{4}$?



2. _____

3) Quale risposta corrisponde a $\frac{3}{6}$?



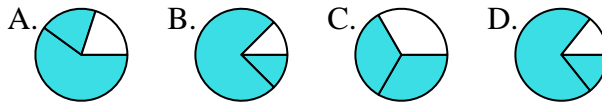
3. _____

4) Quale risposta corrisponde a $\frac{4}{8}$?



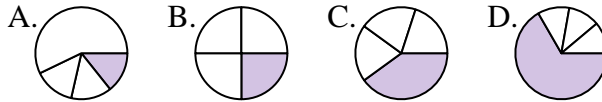
4. _____

5) Quale risposta corrisponde a $\frac{2}{3}$?



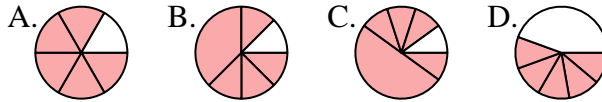
5. _____

6) Quale risposta corrisponde a $\frac{1}{4}$?



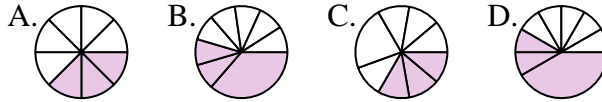
6. _____

7) Quale risposta corrisponde a $\frac{5}{6}$?



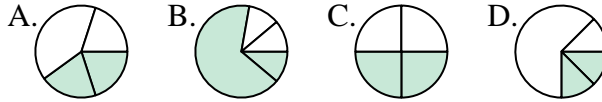
7. _____

8) Quale risposta corrisponde a $\frac{3}{8}$?



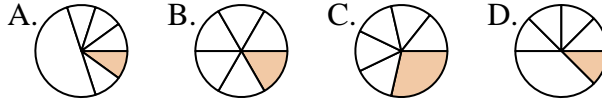
8. _____

9) Quale risposta corrisponde a $\frac{2}{4}$?



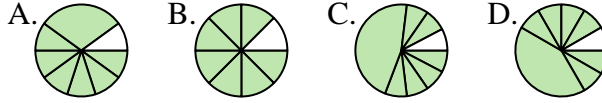
9. _____

10) Quale risposta corrisponde a $\frac{1}{6}$?



10. _____

11) Quale risposta corrisponde a $\frac{7}{8}$?



11. _____

12) Quale risposta corrisponde a $\frac{2}{6}$?


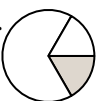
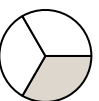



12. _____







Determina quale lettera rappresenta correttamente la frazione.

Risposte

1) Quale risposta corrisponde a $\frac{1}{3}$?
 A.  B.  C.  D. 





1. **C**

2) Quale risposta corrisponde a $\frac{3}{4}$?
 A.  B.  C.  D. 





2. **A**

3) Quale risposta corrisponde a $\frac{3}{6}$?
 A.  B.  C.  D. 





3. **C**

4) Quale risposta corrisponde a $\frac{4}{8}$?
 A.  B.  C.  D. 





4. **A**

5) Quale risposta corrisponde a $\frac{2}{3}$?
 A.  B.  C.  D. 





5. **C**

6) Quale risposta corrisponde a $\frac{1}{4}$?
 A.  B.  C.  D. 





6. **B**

7) Quale risposta corrisponde a $\frac{5}{6}$?
 A.  B.  C.  D. 





7. **A**

8) Quale risposta corrisponde a $\frac{3}{8}$?
 A.  B.  C.  D. 




8. **A**

9) Quale risposta corrisponde a $\frac{2}{4}$?
 A.  B.  C.  D. 





9. **C**

10) Quale risposta corrisponde a $\frac{1}{6}$?
 A.  B.  C.  D. 

10. **B**

11) Quale risposta corrisponde a $\frac{7}{8}$?
 A.  B.  C.  D. 

11. **B**

12) Quale risposta corrisponde a $\frac{2}{6}$?
 A.  B.  C.  D. 

12. **D**