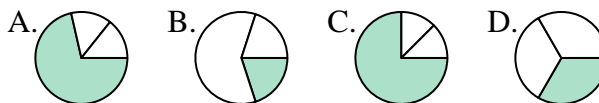




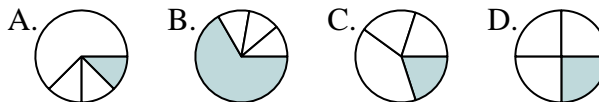
**Determina quale lettera rappresenta correttamente la frazione.**

**Risposte**

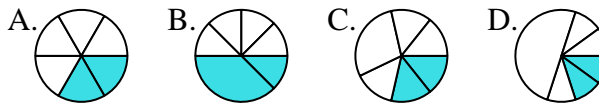
1) Quale risposta corrisponde a  $\frac{1}{3}$ ?



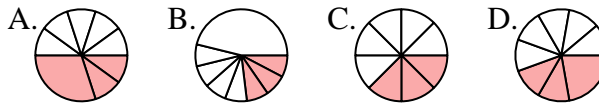
2) Quale risposta corrisponde a  $\frac{1}{4}$ ?



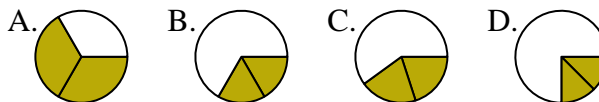
3) Quale risposta corrisponde a  $\frac{2}{6}$ ?



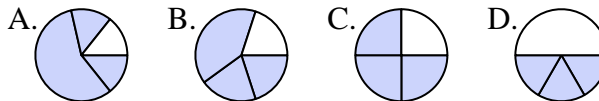
4) Quale risposta corrisponde a  $\frac{3}{8}$ ?



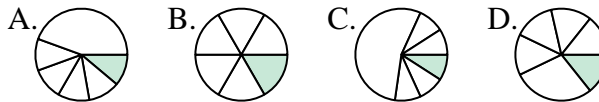
5) Quale risposta corrisponde a  $\frac{2}{3}$ ?



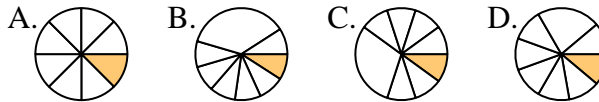
6) Quale risposta corrisponde a  $\frac{3}{4}$ ?



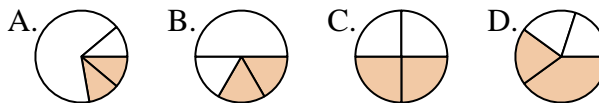
7) Quale risposta corrisponde a  $\frac{1}{6}$ ?



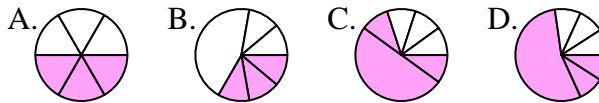
8) Quale risposta corrisponde a  $\frac{1}{8}$ ?



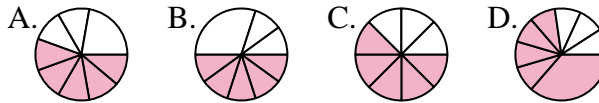
9) Quale risposta corrisponde a  $\frac{2}{4}$ ?



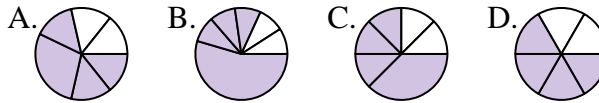
10) Quale risposta corrisponde a  $\frac{3}{6}$ ?



11) Quale risposta corrisponde a  $\frac{5}{8}$ ?



12) Quale risposta corrisponde a  $\frac{4}{6}$ ?



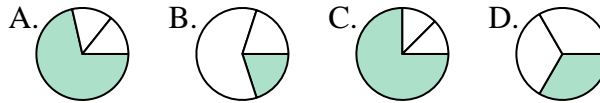
1. \_\_\_\_\_
2. \_\_\_\_\_
3. \_\_\_\_\_
4. \_\_\_\_\_
5. \_\_\_\_\_
6. \_\_\_\_\_
7. \_\_\_\_\_
8. \_\_\_\_\_
9. \_\_\_\_\_
10. \_\_\_\_\_
11. \_\_\_\_\_
12. \_\_\_\_\_



Determina quale lettera rappresenta correttamente la frazione.

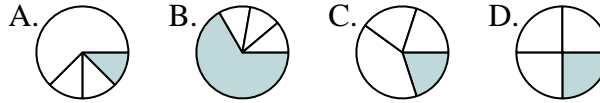
**Risposte**

1) Quale risposta corrisponde a  $\frac{1}{3}$ ?



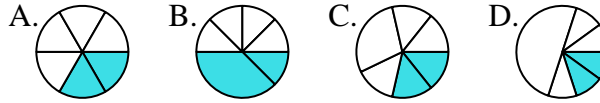
1.     **D**    

2) Quale risposta corrisponde a  $\frac{1}{4}$ ?



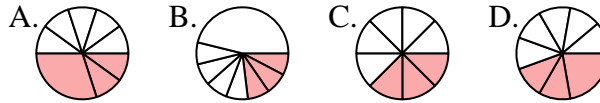
2.     **D**    

3) Quale risposta corrisponde a  $\frac{2}{6}$ ?



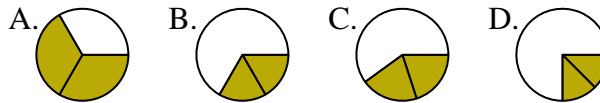
3.     **A**    

4) Quale risposta corrisponde a  $\frac{3}{8}$ ?



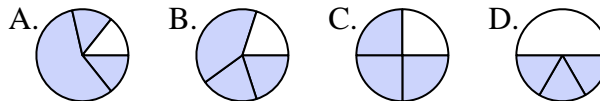
4.     **C**    

5) Quale risposta corrisponde a  $\frac{2}{3}$ ?



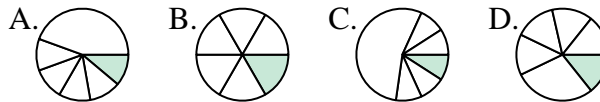
5.     **A**    

6) Quale risposta corrisponde a  $\frac{3}{4}$ ?



6.     **C**    

7) Quale risposta corrisponde a  $\frac{1}{6}$ ?



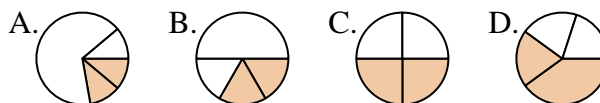
7.     **B**    

8) Quale risposta corrisponde a  $\frac{1}{8}$ ?



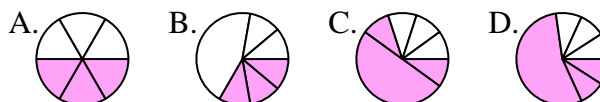
8.     **A**    

9) Quale risposta corrisponde a  $\frac{2}{4}$ ?



9.     **C**    

10) Quale risposta corrisponde a  $\frac{3}{6}$ ?



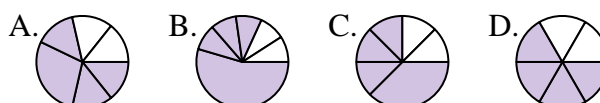
10.     **A**    

11) Quale risposta corrisponde a  $\frac{5}{8}$ ?



11.     **C**    

12) Quale risposta corrisponde a  $\frac{4}{6}$ ?



12.     **D**