
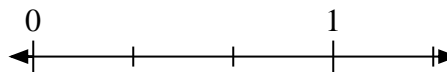


**Risolvi ogni problema.**

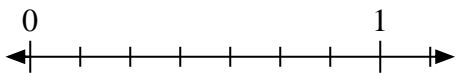
- 1) Scrivi
- $\frac{3}{3}$
- come un numero intero.



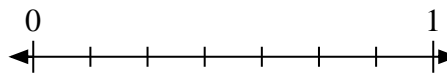
- 2) Scrivi
- $\frac{1}{3}$
- come un numero intero.



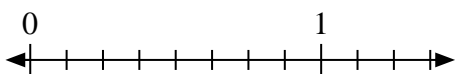
- 3) Scrivi
- $\frac{1}{7}$
- come un numero intero.



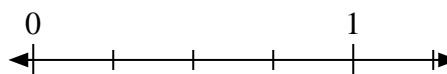
- 4) Scrivi
- $\frac{0}{7}$
- come un numero intero.



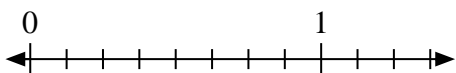
- 5) Scrivi
- $\frac{5}{8}$
- come un numero intero.



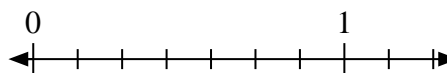
- 6) Scrivi
- $\frac{3}{4}$
- come un numero intero.



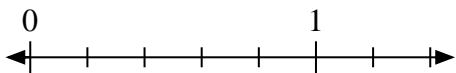
- 7) Scrivi
- $\frac{4}{8}$
- come un numero intero.



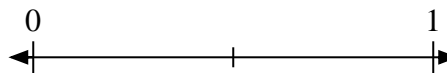
- 8) Scrivi
- $\frac{2}{7}$
- come un numero intero.



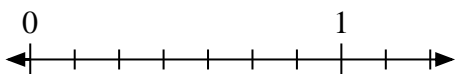
- 9) Scrivi
- $\frac{1}{5}$
- come un numero intero.



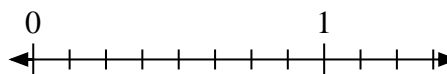
- 10) Scrivi
- $\frac{2}{2}$
- come un numero intero.



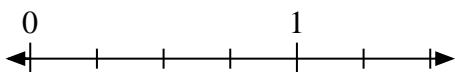
- 11) Scrivi
- $\frac{5}{7}$
- come un numero intero.



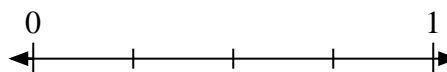
- 12) Scrivi
- $\frac{7}{8}$
- come un numero intero.



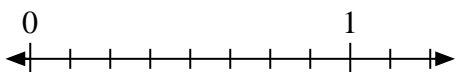
- 13) Scrivi
- $\frac{2}{4}$
- come un numero intero.



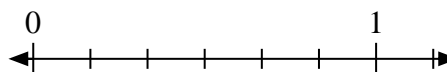
- 14) Scrivi
- $\frac{1}{4}$
- come un numero intero.



- 15) Scrivi
- $\frac{8}{8}$
- come un numero intero.




- 16) Scrivi
- $\frac{2}{6}$
- come un numero intero.



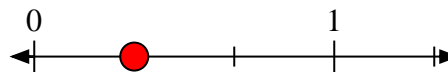


Risolvi ogni problema.

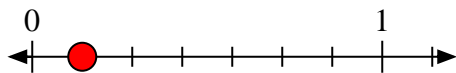
- 1) Scrivi
- $\frac{3}{3}$
- come un numero intero.



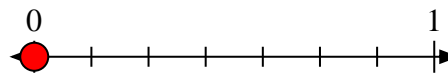
- 2) Scrivi
- $\frac{1}{3}$
- come un numero intero.



- 3) Scrivi
- $\frac{1}{7}$
- come un numero intero.



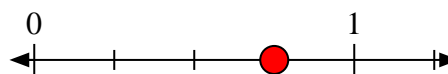
- 4) Scrivi
- $\frac{0}{7}$
- come un numero intero.



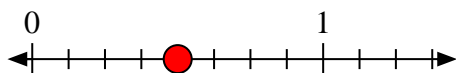
- 5) Scrivi
- $\frac{5}{8}$
- come un numero intero.



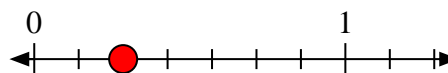
- 6) Scrivi
- $\frac{3}{4}$
- come un numero intero.



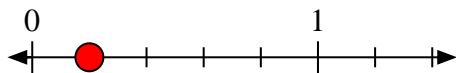
- 7) Scrivi
- $\frac{4}{8}$
- come un numero intero.



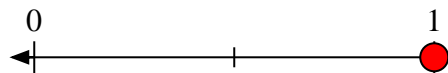
- 8) Scrivi
- $\frac{2}{7}$
- come un numero intero.



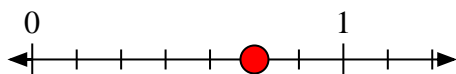
- 9) Scrivi
- $\frac{1}{5}$
- come un numero intero.



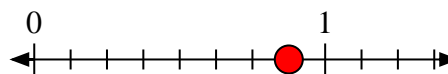
- 10) Scrivi
- $\frac{2}{2}$
- come un numero intero.



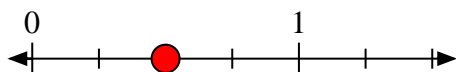
- 11) Scrivi
- $\frac{5}{7}$
- come un numero intero.



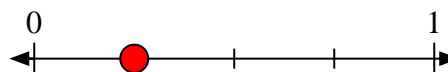
- 12) Scrivi
- $\frac{7}{8}$
- come un numero intero.



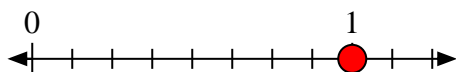
- 13) Scrivi
- $\frac{2}{4}$
- come un numero intero.



- 14) Scrivi
- $\frac{1}{4}$
- come un numero intero.



- 15) Scrivi
- $\frac{8}{8}$
- come un numero intero.



- 16) Scrivi
- $\frac{2}{6}$
- come un numero intero.

