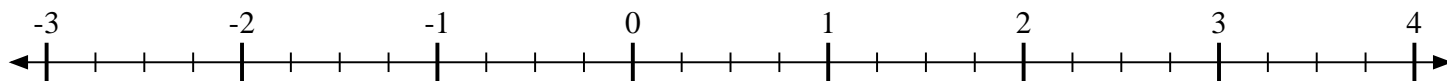
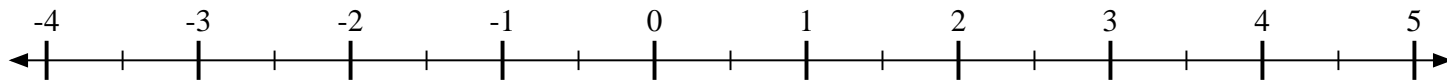


**Scrivi la posizione di ogni frazione.**

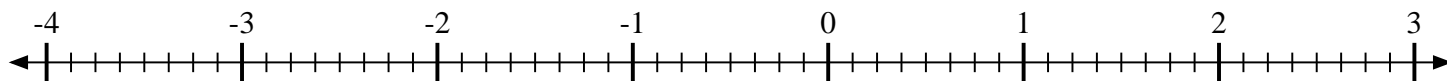
- 1) Indica la posizione di
- $3\frac{1}{4}$



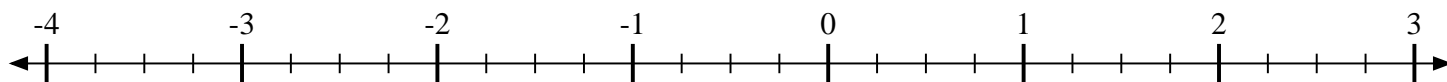
- 2) Indica la posizione di
- $-1\frac{1}{2}$



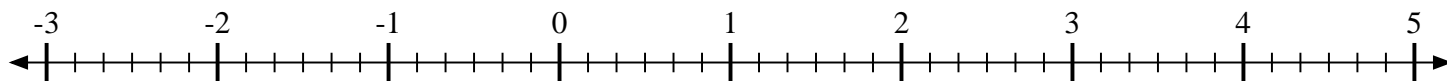
- 3) Indica la posizione di
- $1\frac{1}{8}$



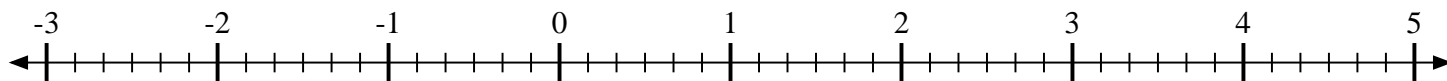
- 4) Indica la posizione di
- $-1\frac{2}{4}$



- 5) Indica la posizione di
- $-2\frac{2}{6}$



- 6) Indica la posizione di
- $-1\frac{3}{6}$



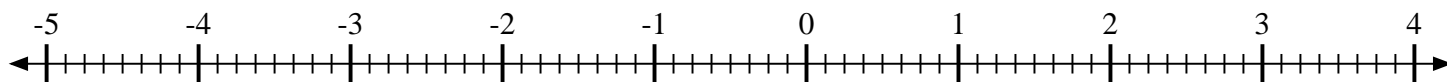
- 7) Indica la posizione di
- $-1\frac{1}{4}$



- 8) Indica la posizione di
- $-4\frac{2}{3}$

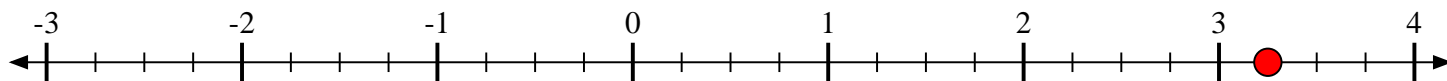
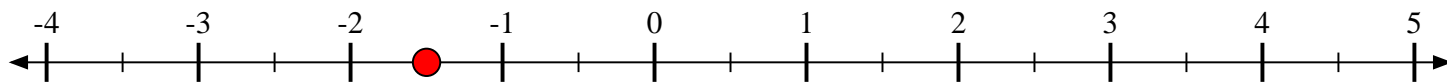
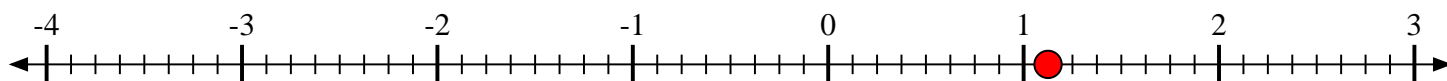
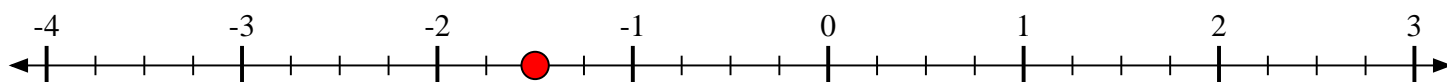
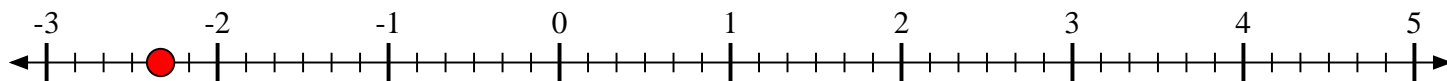
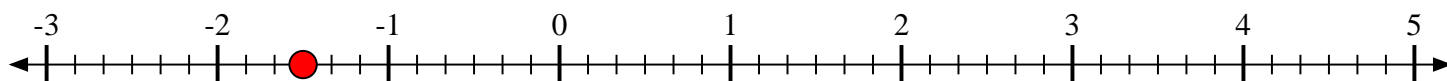
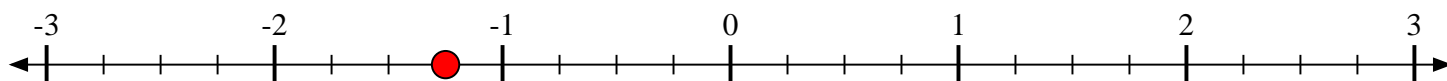
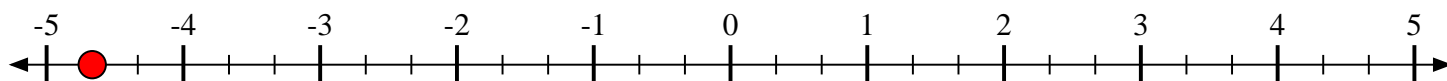


- 9) Indica la posizione di
- $-2\frac{5}{8}$





Scrivi la posizione di ogni frazione.

1) Indica la posizione di  $3\frac{1}{4}$ 2) Indica la posizione di  $-1\frac{1}{2}$ 3) Indica la posizione di  $1\frac{1}{8}$ 4) Indica la posizione di  $-1\frac{2}{4}$ 5) Indica la posizione di  $-2\frac{2}{6}$ 6) Indica la posizione di  $-1\frac{3}{6}$ 7) Indica la posizione di  $-1\frac{1}{4}$ 8) Indica la posizione di  $-4\frac{2}{3}$ 9) Indica la posizione di  $-2\frac{5}{8}$ 