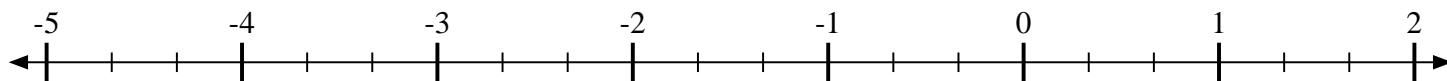
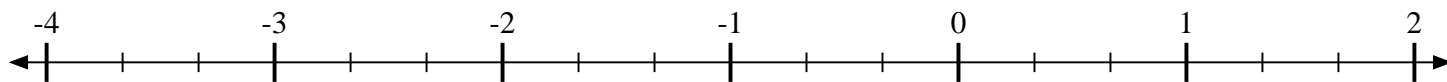
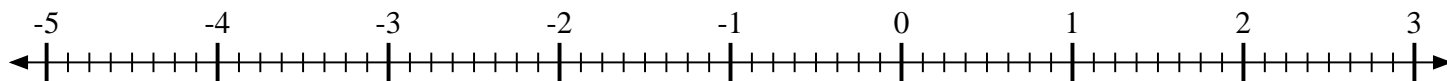
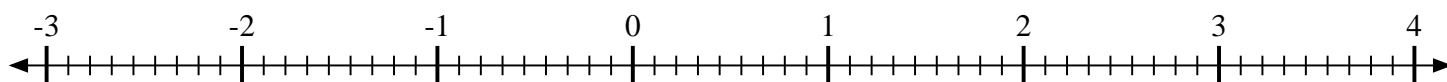
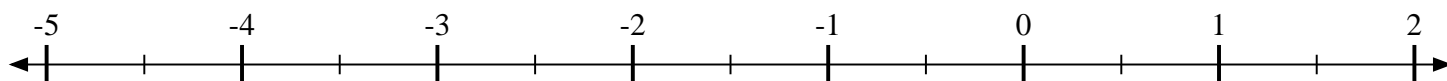
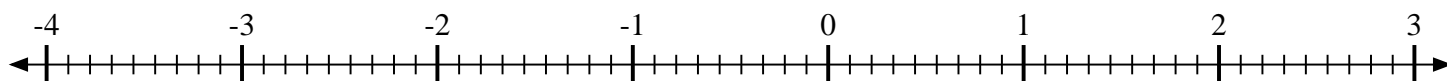
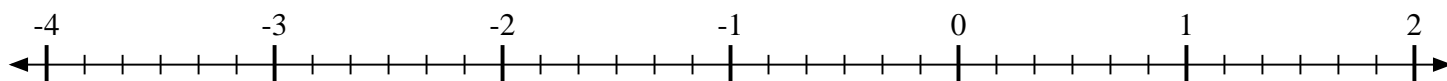
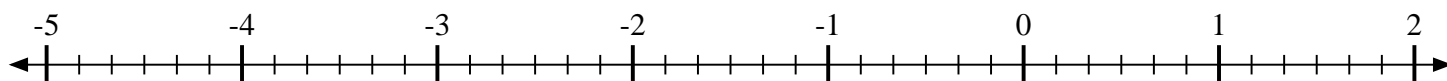
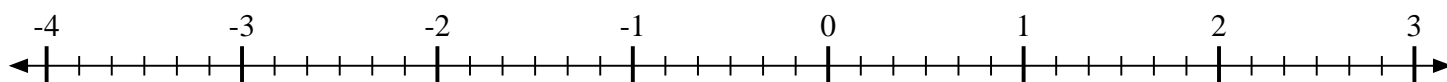
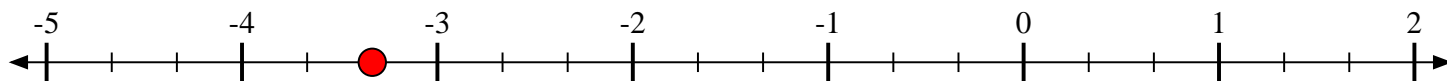


**Scrivi la posizione di ogni frazione.**1) Indica la posizione di $-3\frac{1}{3}$ 2) Indica la posizione di $-2\frac{2}{3}$ 3) Indica la posizione di $-2\frac{6}{8}$ 4) Indica la posizione di $1\frac{1}{9}$ 5) Indica la posizione di $1\frac{1}{2}$ 6) Indica la posizione di $2\frac{5}{9}$ 7) Indica la posizione di $-1\frac{3}{6}$ 8) Indica la posizione di $-1\frac{4}{6}$ 9) Indica la posizione di $-1\frac{2}{6}$ 

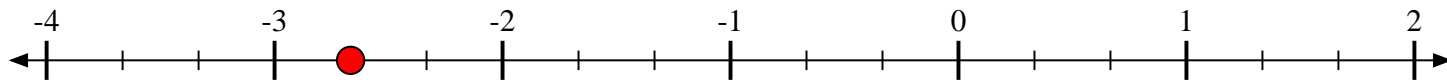


Scrivi la posizione di ogni frazione.

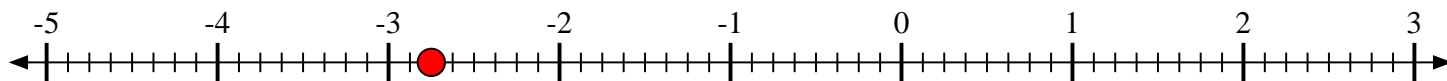
1) Indica la posizione di $-3\frac{1}{3}$



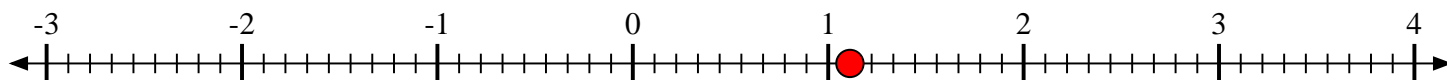
2) Indica la posizione di $-2\frac{2}{3}$



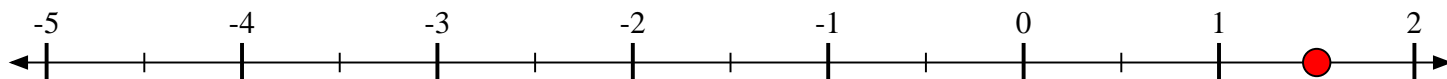
3) Indica la posizione di $-2\frac{6}{8}$



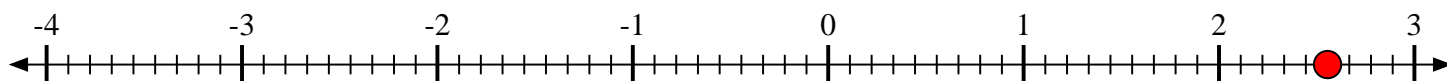
4) Indica la posizione di $1\frac{1}{9}$



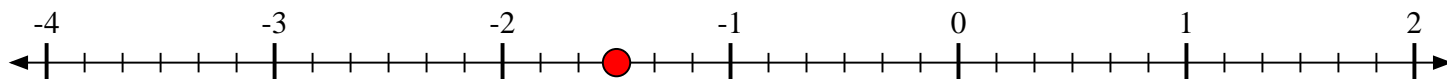
5) Indica la posizione di $1\frac{1}{2}$



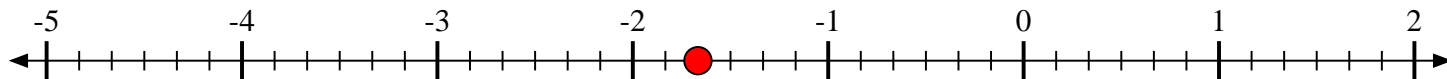
6) Indica la posizione di $2\frac{5}{9}$



7) Indica la posizione di $-1\frac{3}{6}$



8) Indica la posizione di $-1\frac{4}{6}$



9) Indica la posizione di $-1\frac{2}{6}$

