





Scrivi l'importo ombreggiato sotto forma di parole.

Es)



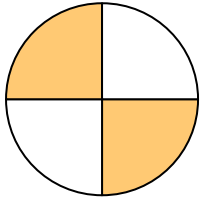
1)



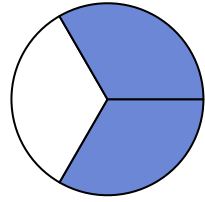
2)



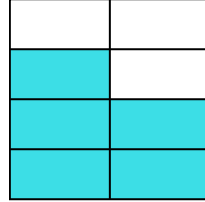
3)



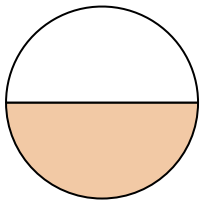
4)



5)



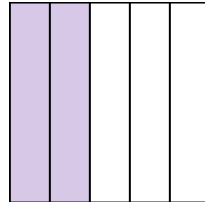
6)




7)



8)



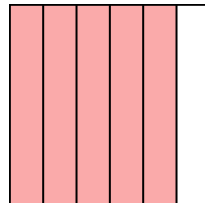
9)




10)



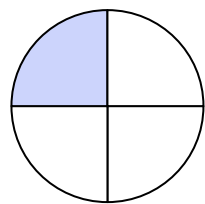
11)



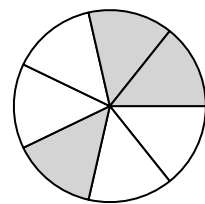
12)



13)



14)



Risposte

Es. metà

1. _____

2. _____

3. _____

4. _____

5. _____

6. _____

7. _____

8. _____

9. _____

10. _____

11. _____

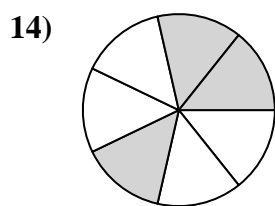
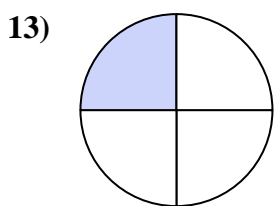
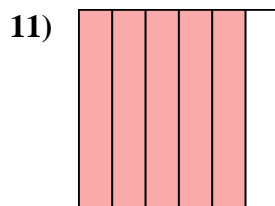

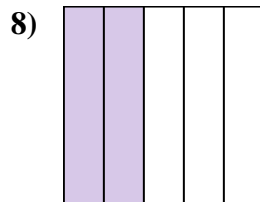
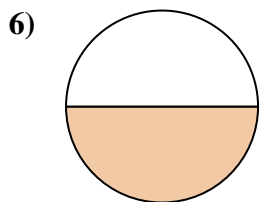
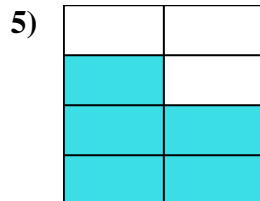
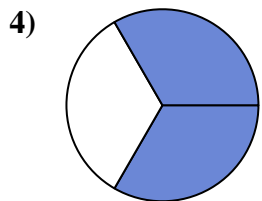
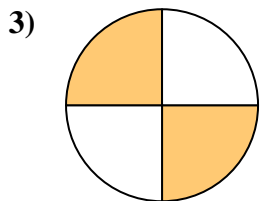
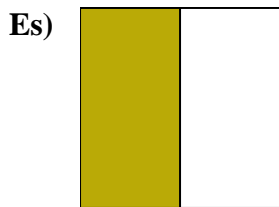
12. _____

13. _____

14. _____



Scrivi l'importo ombreggiato sotto forma di parole.



Risposte

Es. metà

1. due quinti

2. cinque decimi

3. due quarti

4. due terzi

5. cinque settimi

6. metà

7. quattro ottavi

8. due quinti

9. due terzi

10. un nono

11. cinque sestì

12. tre sestì

13. un quarto

14. tre settimi