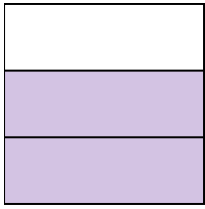





Scrivi l'importo ombreggiato sotto forma di parole.


Es)



1)



2)



Risposte

Es. **due terzi**

1. _____

2. _____

3. _____

4. _____

5. _____

6. _____

7. _____

8. _____

9. _____

10. _____


11. _____

12. _____


13. _____

14. _____

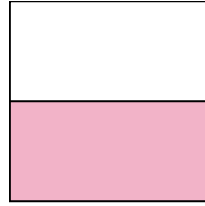
3)



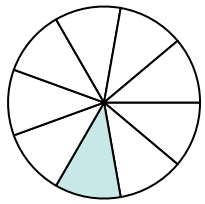
4)



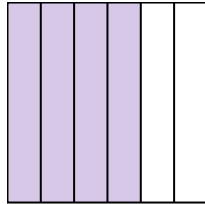
5)




6)



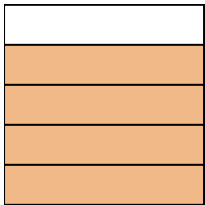
7)



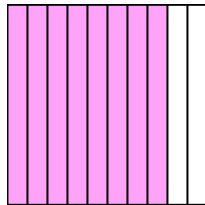
8)



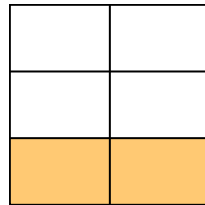
9)



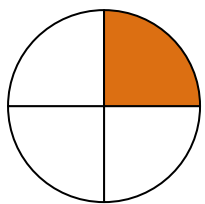
10)



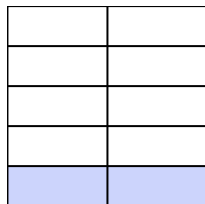
11)



12)



13)



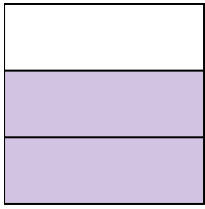
14)






Scrivi l'importo ombreggiato sotto forma di parole.


Es)




1)




2)



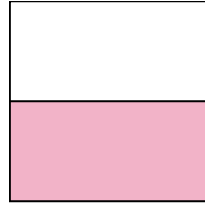
3)



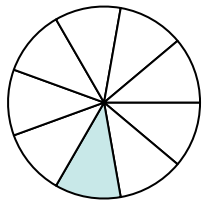
4)



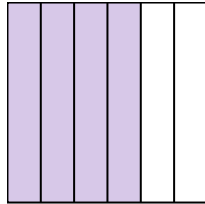
5)




6)



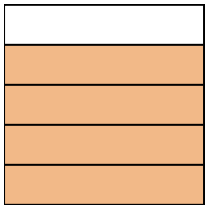
7)



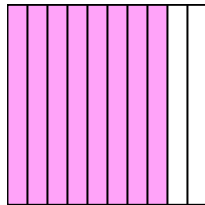
8)



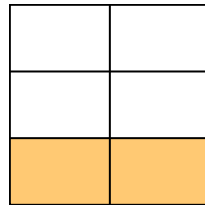
9)



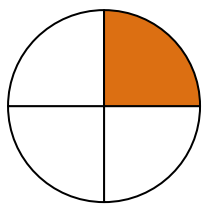
10)



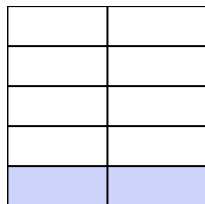
11)



12)



13)



14)



Risposte

Es. due terzi

1. due quarti

2. tre settimi

3. un terzo

4. metà

5. metà

6. un nono

7. quattro sestimi

8. sette ottavi

9. quattro quinti

10. otto decimi

11. due quinti

12. un quarto

13. due noni

14. un sesto