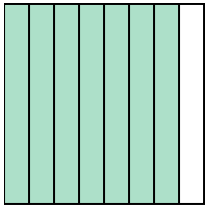


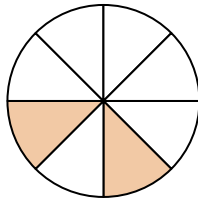


Scrivi l'importo ombreggiato sotto forma di parole.

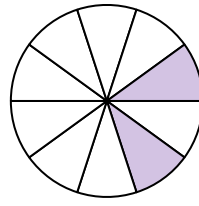
Es)



1)



2)



Risposte

Es. sette ottavi

1. _____

2. _____

3. _____

4. _____

5. _____

6. _____

7. _____

8. _____

9. _____

10. _____

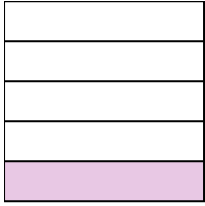
11. _____

12. _____


13. _____

14. _____

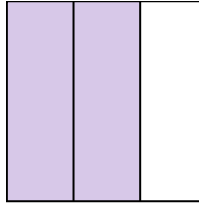
3)



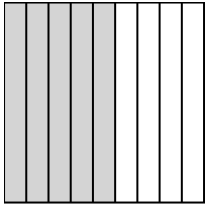
4)



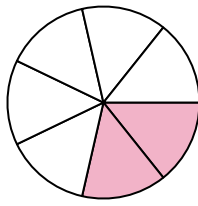
5)




6)




7)



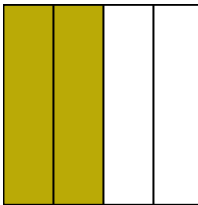
8)




9)




10)




11)



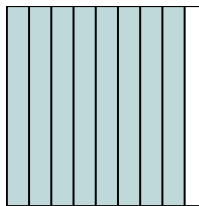
12)



13)

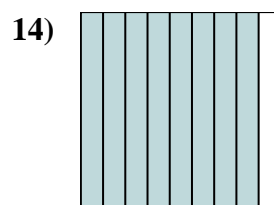
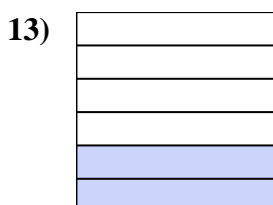

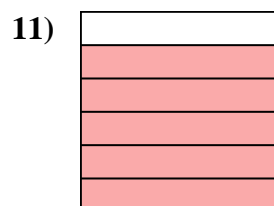
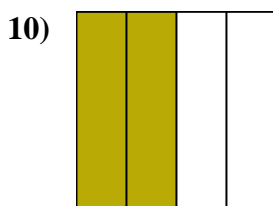
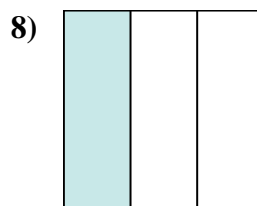
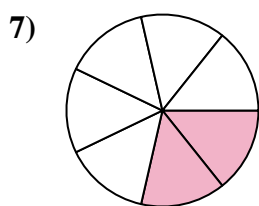
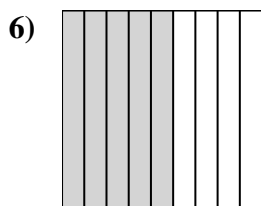
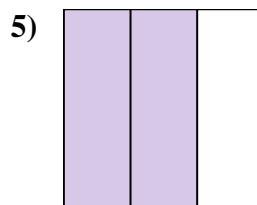
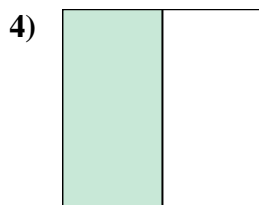
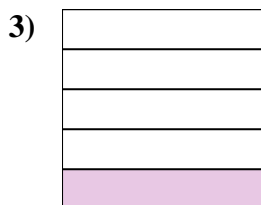
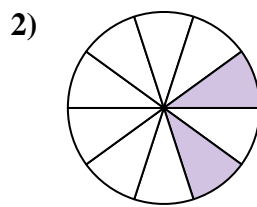
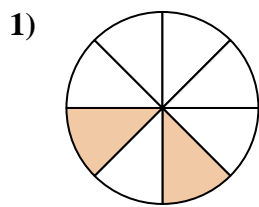
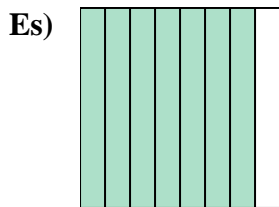


14)





Scrivi l'importo ombreggiato sotto forma di parole.



Risposte

Es. sette ottavi

1. due ottavi

2. due decimi

3. un quinto

4. metà

5. due terzi

6. cinque noni

7. due settimi

8. un terzo

9. tre quinti

10. due quarti

11. cinque sestì

12. otto decimi

13. due sestì

14. otto noni