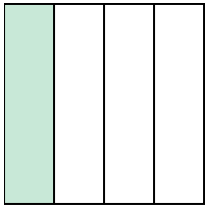





Scrivi l'importo ombreggiato sotto forma di parole.

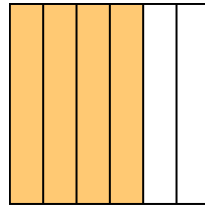
Es)



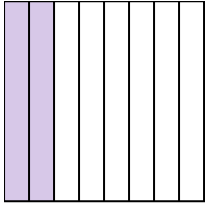
1)




2)



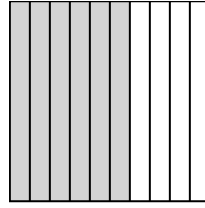
3)



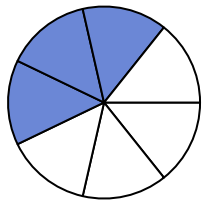
4)



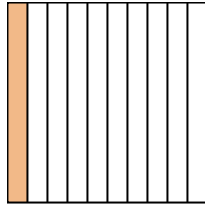
5)



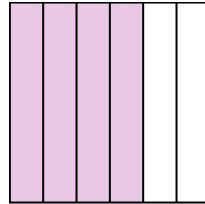
6)



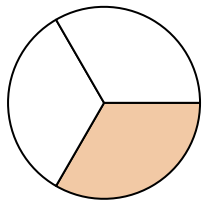
7)




8)



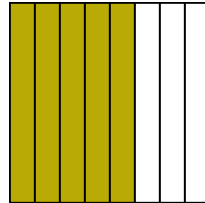
9)



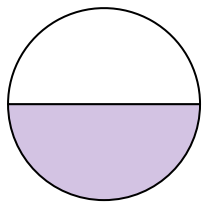
10)



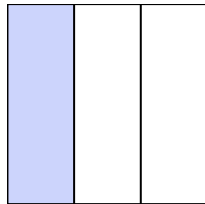
11)



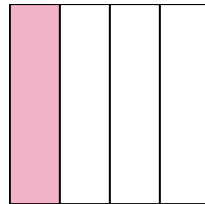
12)



13)



14)



**Risposte**

Es. **un quarto**

1. \_\_\_\_\_

2. \_\_\_\_\_

3. \_\_\_\_\_

4. \_\_\_\_\_

5. \_\_\_\_\_

6. \_\_\_\_\_

7. \_\_\_\_\_

8. \_\_\_\_\_

9. \_\_\_\_\_

10. \_\_\_\_\_

11. \_\_\_\_\_

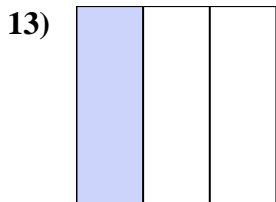
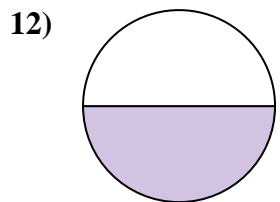
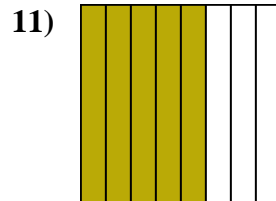
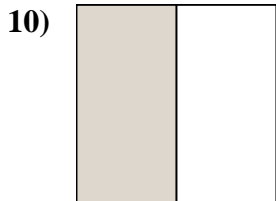
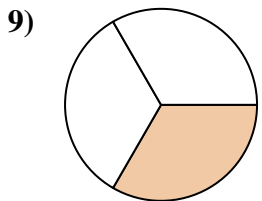
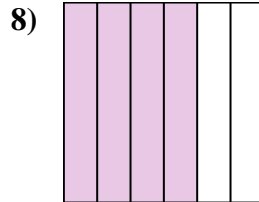
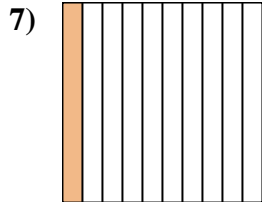
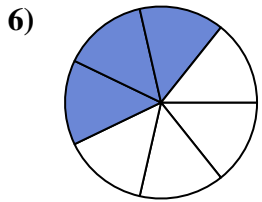
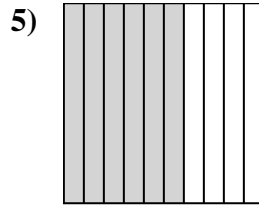
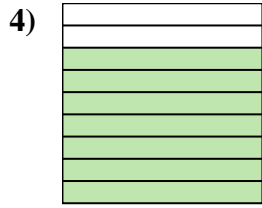
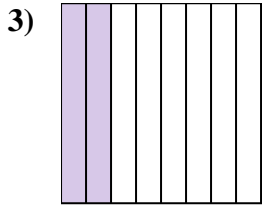
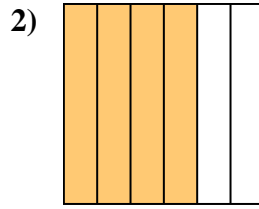
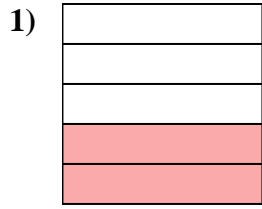
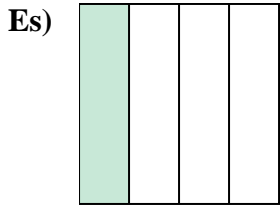
12. \_\_\_\_\_

13. \_\_\_\_\_

14. \_\_\_\_\_



Scrivi l'importo ombreggiato sotto forma di parole.



**Risposte**

Es. un quarto

1. due quinti

2. quattro sestimi

3. due ottavi

4. sette noni

5. sei decimi

6. tre settimi

7. un decimo

8. quattro sestimi

9. un terzo

10. metà

11. cinque ottavi

12. metà

13. un terzo

14. un quarto