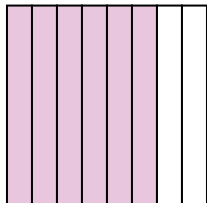





Scrivi l'importo ombreggiato sotto forma di parole.


Es)



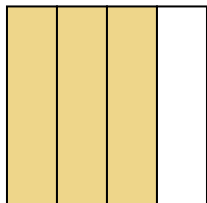
1)




2)



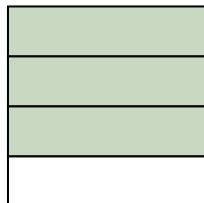
3)



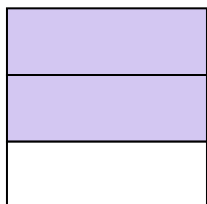
4)



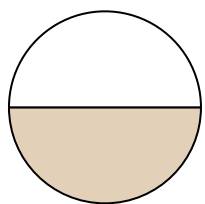
5)



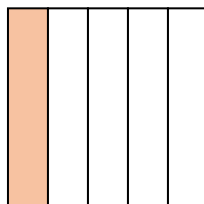
6)



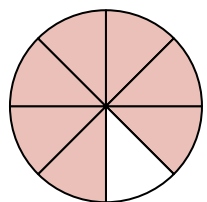
7)




8)




9)




10)




11)




12)



13)



14)

**Risposte**Es. **sei ottavi**

1. _____

2. _____

3. _____

4. _____

5. _____

6. _____

7. _____

8. _____

9. _____

10. _____

11. _____

12. _____

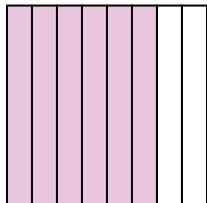
13. _____

14. _____




Scrivi l'importo ombreggiato sotto forma di parole.


Es)



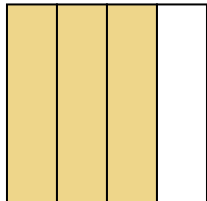
1)




2)



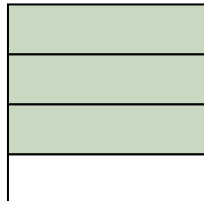
3)



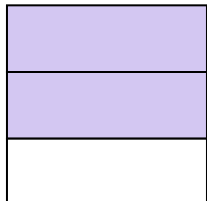
4)



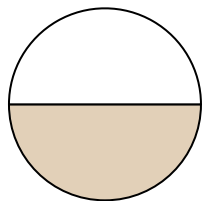
5)



6)



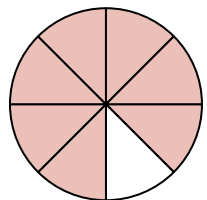
7)




8)




9)




10)




11)




12)



13)



14)

**Risposte**

Es.

sei ottavi

1.

un mezzo

2.

due terzi

3.

tre quarti

4.

due terzi

5.

tre quarti

6.

due terzi

7.

un mezzo

8.

un quinto

9.

sette ottavi

10.

un quinto

11.

tre ottavi

12.

tre quarti

13.

tre quinti

14.

un mezzo