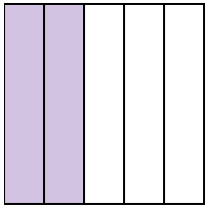


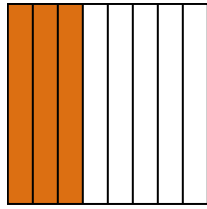


Scrivi la quantità ombreggiata come frazione.

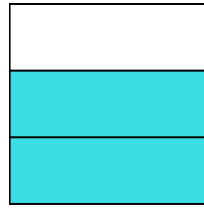
Es)




1)



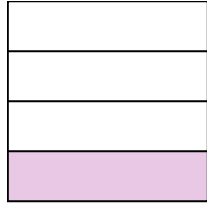
2)



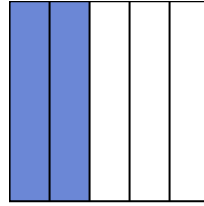
3)




4)



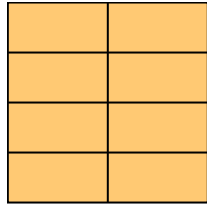
5)



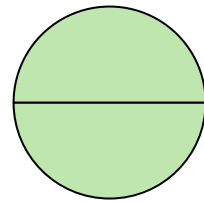
6)



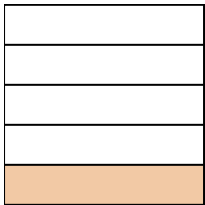
7)



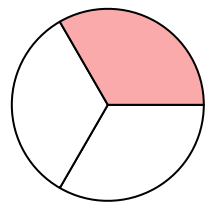
8)



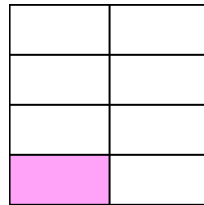
9)



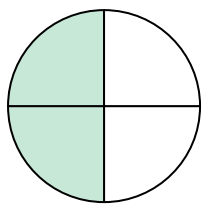
10)



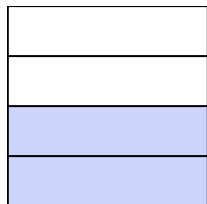
11)



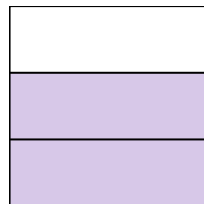
12)



13)



14)



Risposte

Es. $\frac{2}{5}$

1. _____

2. _____

3. _____

4. _____

5. _____

6. _____

7. _____

8. _____

9. _____

10. _____

11. _____

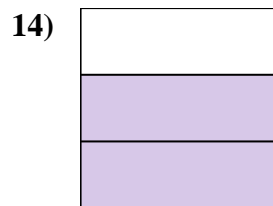
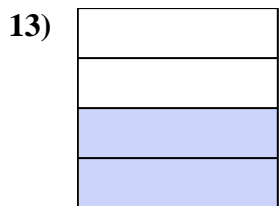
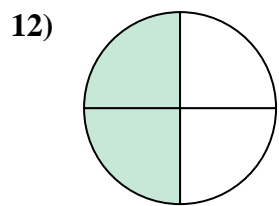
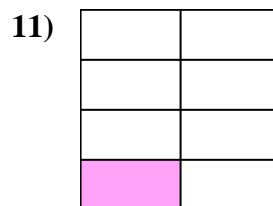
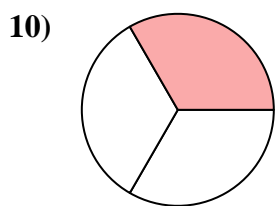
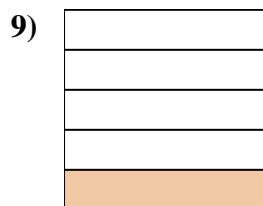
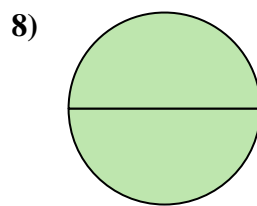
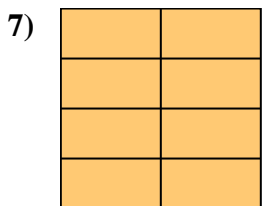

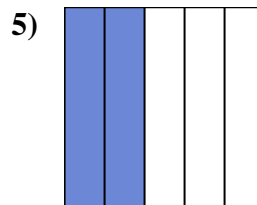
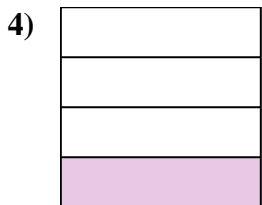
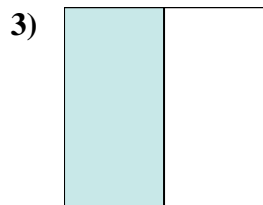
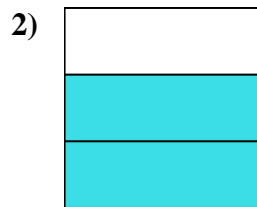
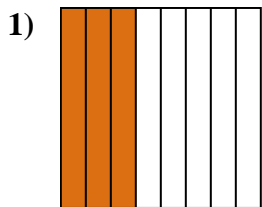
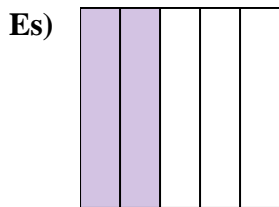
12. _____

13. _____

14. _____



Scrivi la quantità ombreggiata come frazione.



Risposte

Es. 2/5

1. 3/8

2. 2/3

3. 1/2

4. 1/4

5. 2/5

6. 2/2

7. 8/8

8. 2/2

9. 1/5

10. 1/3

11. 1/8

12. 2/4

13. 2/4

14. 2/3