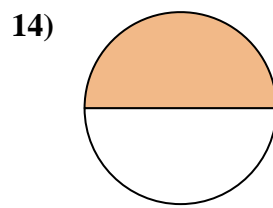
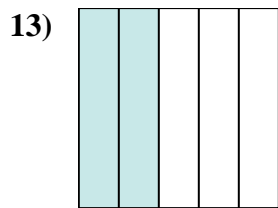
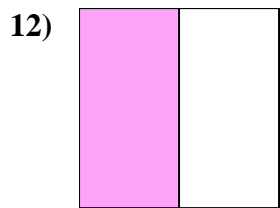
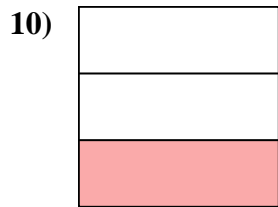
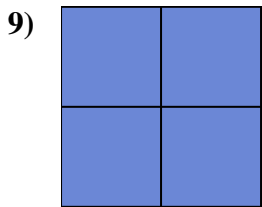
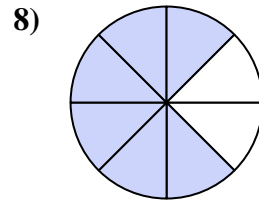
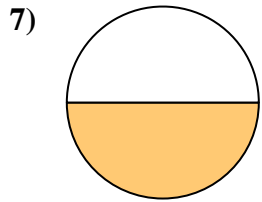
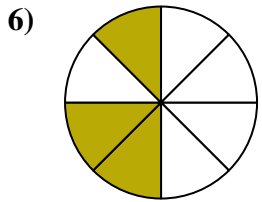
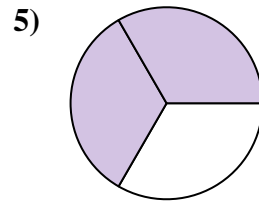
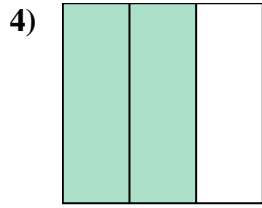
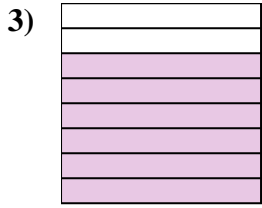
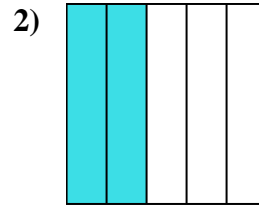
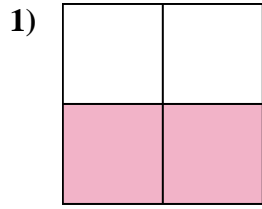
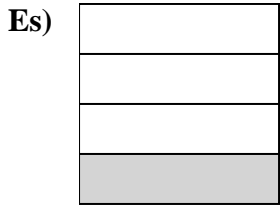




Scrivi la quantità ombreggiata come frazione.



Risposte

Es. $\frac{1}{4}$

1. _____

2. _____

3. _____

4. _____

5. _____

6. _____

7. _____

8. _____

9. _____

10. _____

11. _____

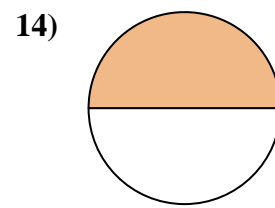
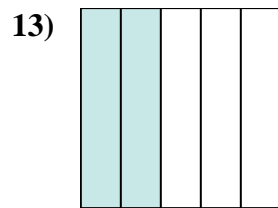
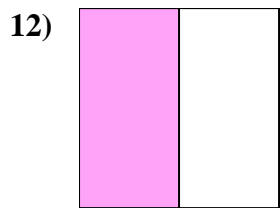

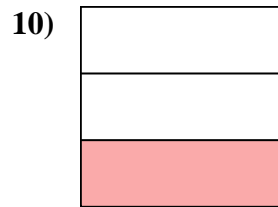
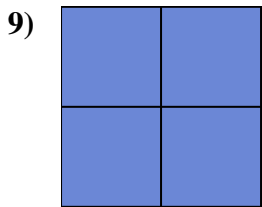
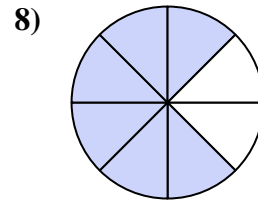
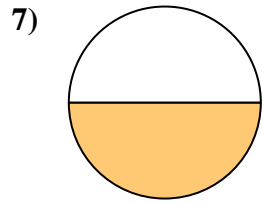
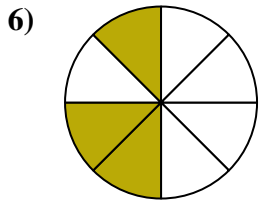
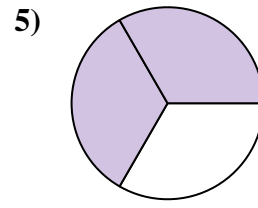
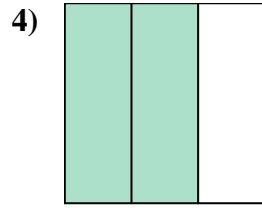
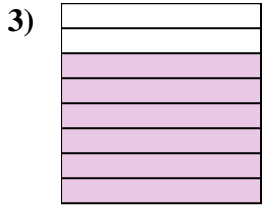
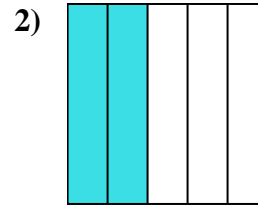
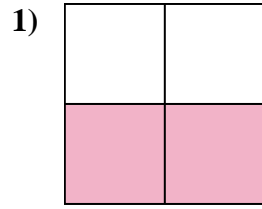
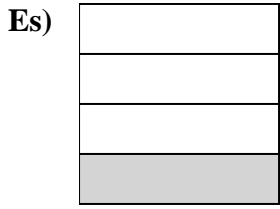
12. _____

13. _____

14. _____



Scrivi la quantità ombreggiata come frazione.



Risposte

Es. 1/4

1. 2/4

2. 2/5

3. 6/8

4. 2/3

5. 2/3

6. 3/8

7. 1/2

8. 6/8

9. 4/4

10. 1/3

11. 5/5

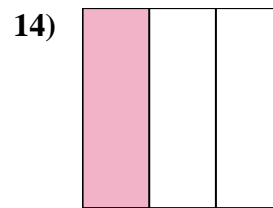
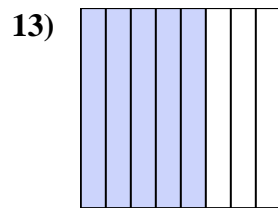
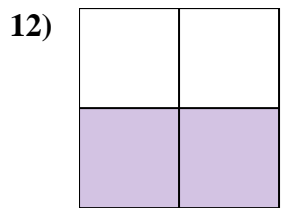
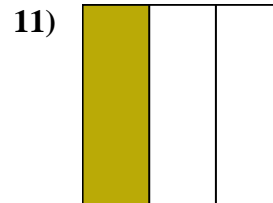
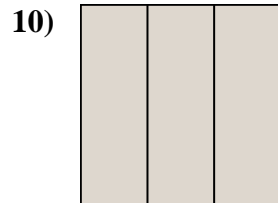
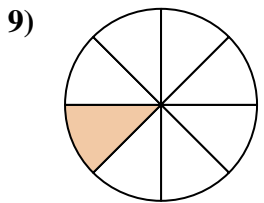
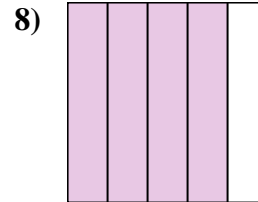
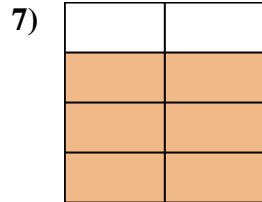
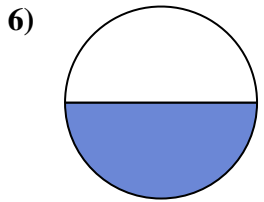
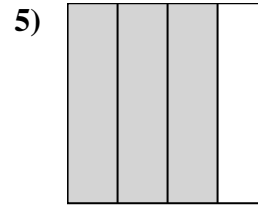
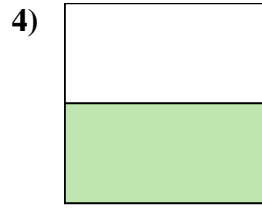
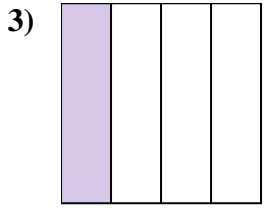
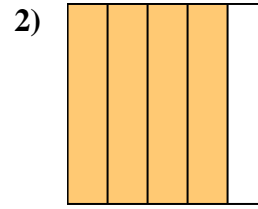
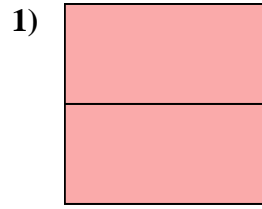
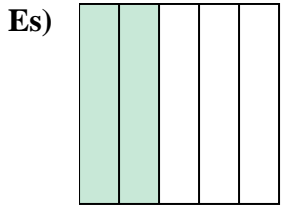
12. 1/2

13. 2/5

14. 1/2



Scrivi la quantità ombreggiata come frazione.



Risposte

Es. $\frac{2}{5}$

1. _____

2. _____

3. _____

4. _____

5. _____

6. _____

7. _____

8. _____

9. _____

10. _____

11. _____


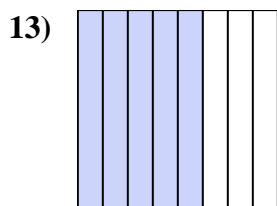
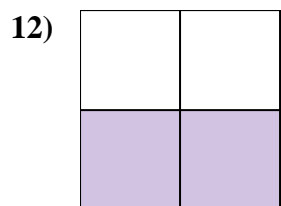
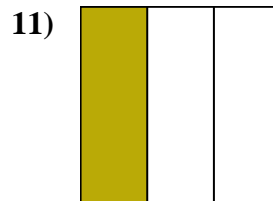
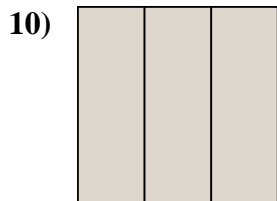
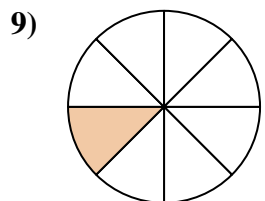
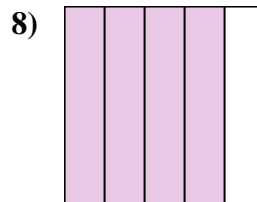
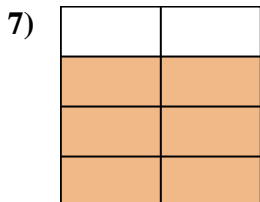
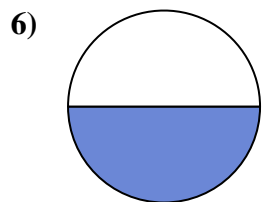
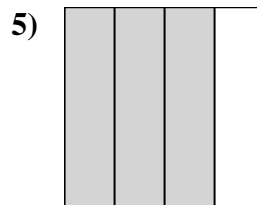
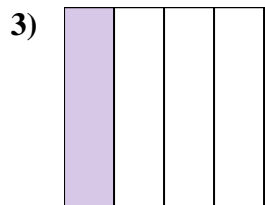
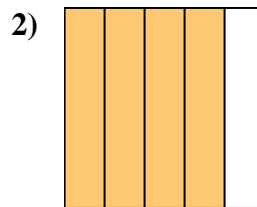
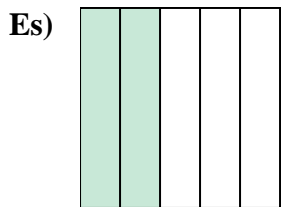
12. _____

13. _____

14. _____



Scrivi la quantità ombreggiata come frazione.



Risposte

Es. 2/5

1. 2/2

2. 4/5

3. 1/4

4. 1/2

5. 3/4

6. 1/2

7. 6/8

8. 4/5

9. 1/8

10. 3/3

11. 1/3

12. 2/4

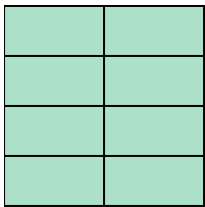
13. 5/8

14. 1/3




Scrivi la quantità ombreggiata come frazione.

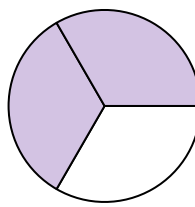
Es)



1)



2)



Risposte

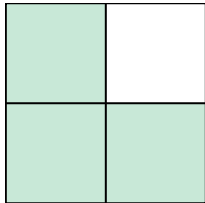
$\frac{8}{8}$

- Es. _____
- 1. _____
- 2. _____
- 3. _____
- 4. _____
- 5. _____
- 6. _____
- 7. _____
- 8. _____
- 9. _____
- 10. _____
- 11. _____
- 12. _____
- 13. _____
- 14. _____


3)



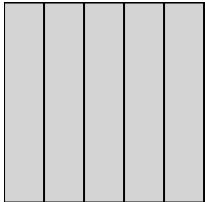
4)



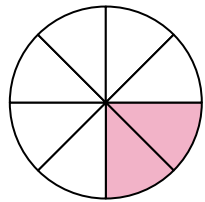
5)



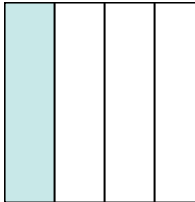
6)




7)



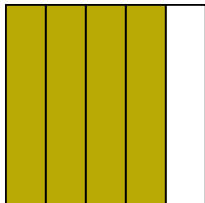
8)




9)




10)




11)




12)



13)

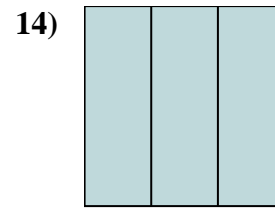
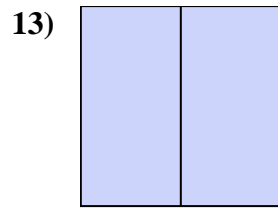
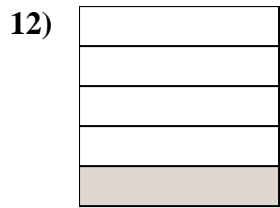
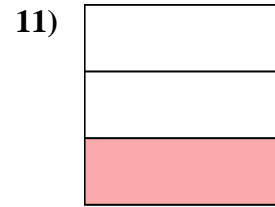
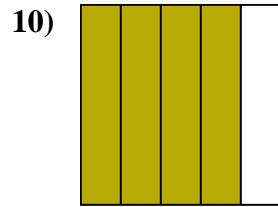
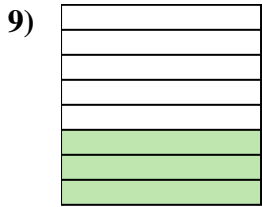
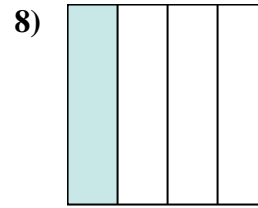
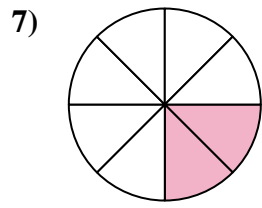
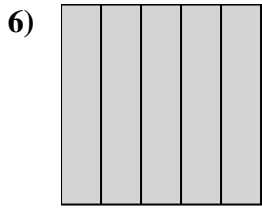
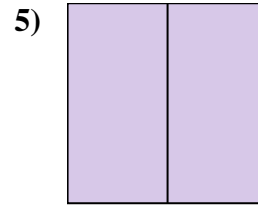
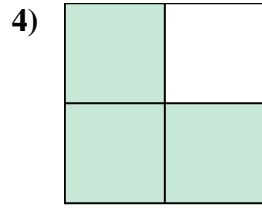
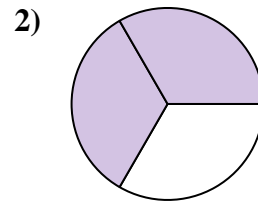
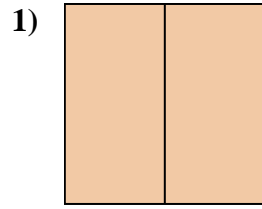
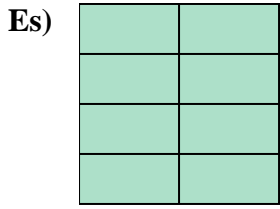


14)





Scrivi la quantità ombreggiata come frazione.



Risposte

Es. $\frac{8}{8}$

1. $\frac{2}{2}$

2. $\frac{2}{3}$

3. $\frac{1}{4}$

4. $\frac{3}{4}$

5. $\frac{2}{2}$

6. $\frac{5}{5}$

7. $\frac{2}{8}$

8. $\frac{1}{4}$

9. $\frac{3}{8}$

10. $\frac{4}{5}$

11. $\frac{1}{3}$

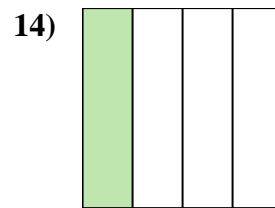
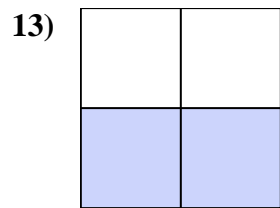
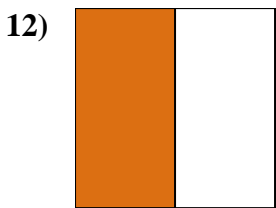
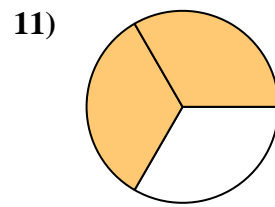
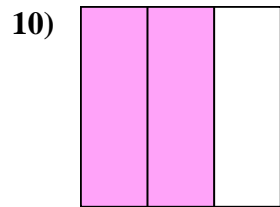
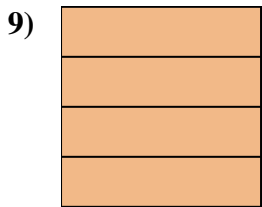
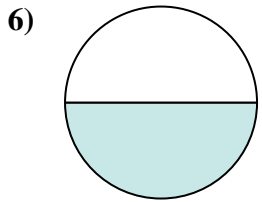
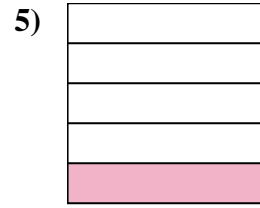
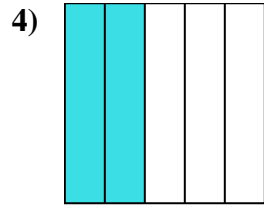
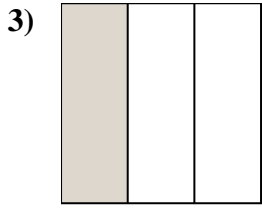
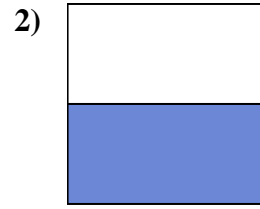
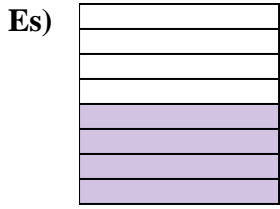
12. $\frac{1}{5}$

13. $\frac{2}{2}$

14. $\frac{3}{3}$



Scrivi la quantità ombreggiata come frazione.



Risposte

Es. $\frac{4}{8}$

1. _____

2. _____

3. _____

4. _____

5. _____

6. _____

7. _____

8. _____

9. _____

10. _____

11. _____

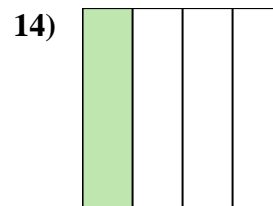
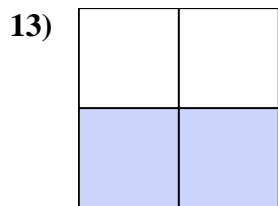
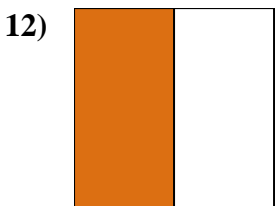
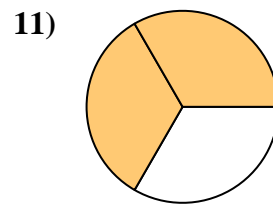
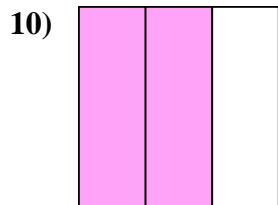
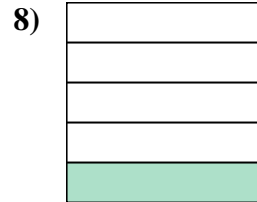
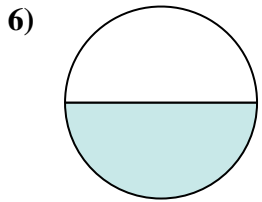
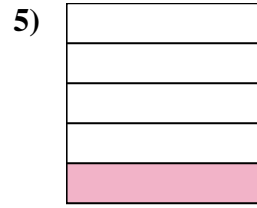
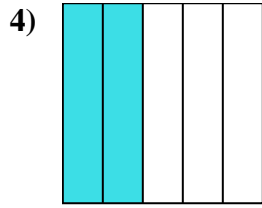
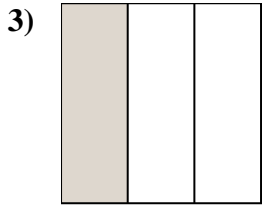
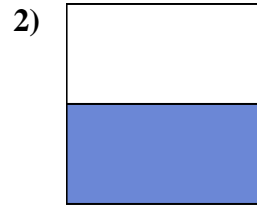
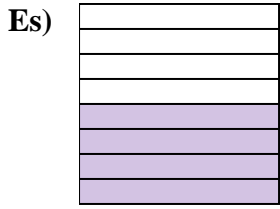
12. _____

13. _____

14. _____

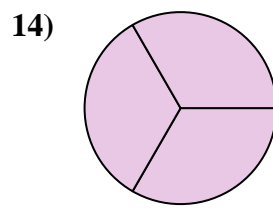
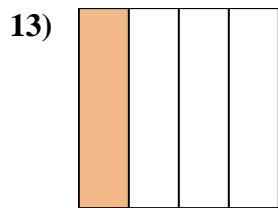
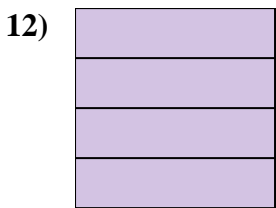
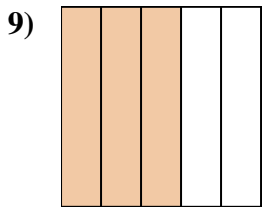
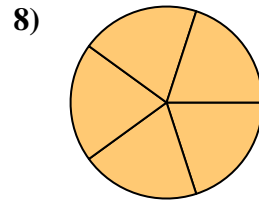
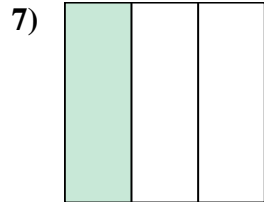
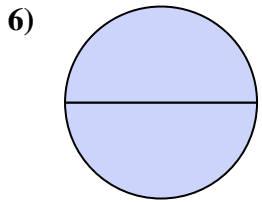
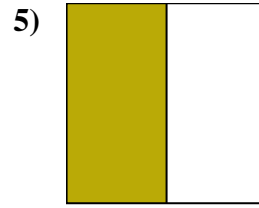
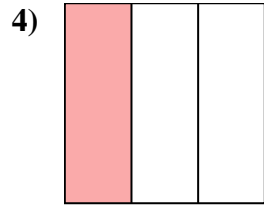
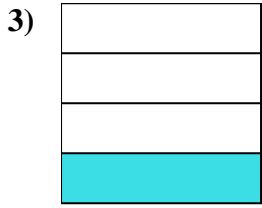
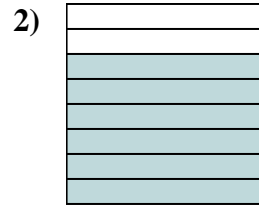
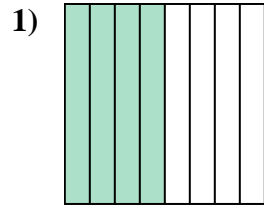
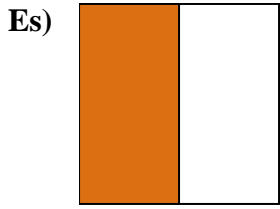


Scrivi la quantità ombreggiata come frazione.

**Risposte**Es. $\frac{4}{8}$ 1. $\frac{2}{8}$ 2. $\frac{1}{2}$ 3. $\frac{1}{3}$ 4. $\frac{2}{5}$ 5. $\frac{1}{5}$ 6. $\frac{1}{2}$ 7. $\frac{1}{8}$ 8. $\frac{1}{5}$ 9. $\frac{4}{4}$ 10. $\frac{2}{3}$ 11. $\frac{2}{3}$ 12. $\frac{1}{2}$ 13. $\frac{2}{4}$ 14. $\frac{1}{4}$



Scrivi la quantità ombreggiata come frazione.



Risposte

Es. $\frac{1}{2}$

1. _____

2. _____

3. _____

4. _____

5. _____

6. _____

7. _____

8. _____

9. _____

10. _____

11. _____

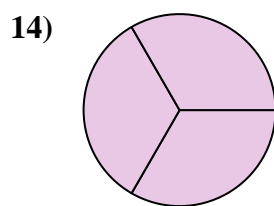
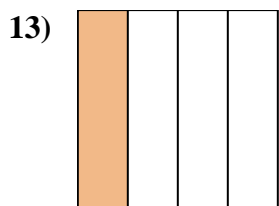
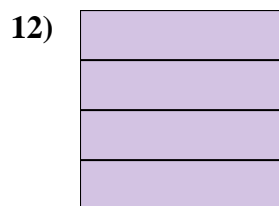
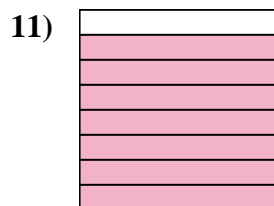
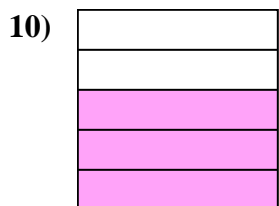
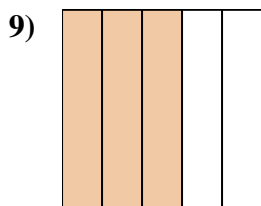
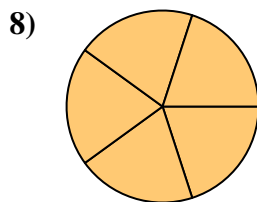
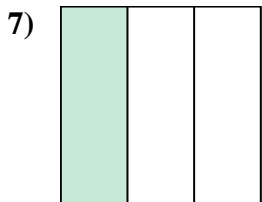
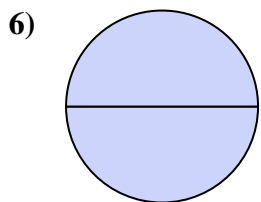
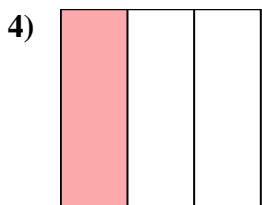
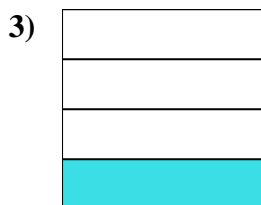

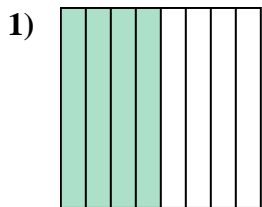
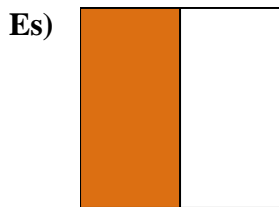
12. _____

13. _____

14. _____



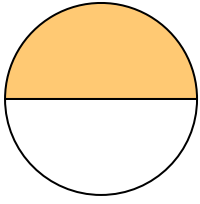
Scrivi la quantità ombreggiata come frazione.

**Risposte**Es. $\frac{1}{2}$ 1. $\frac{4}{8}$ 2. $\frac{6}{8}$ 3. $\frac{1}{4}$ 4. $\frac{1}{3}$ 5. $\frac{1}{2}$ 6. $\frac{2}{2}$ 7. $\frac{1}{3}$ 8. $\frac{5}{5}$ 9. $\frac{3}{5}$ 10. $\frac{3}{5}$ 11. $\frac{7}{8}$ 12. $\frac{4}{4}$ 13. $\frac{1}{4}$ 14. $\frac{3}{3}$




Scrivi la quantità ombreggiata come frazione.

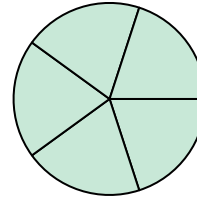
Es)



1)



2)



Risposte

Es. $\frac{1}{2}$

1. _____

2. _____

3. _____

4. _____

5. _____

6. _____

7. _____

8. _____

9. _____

10. _____

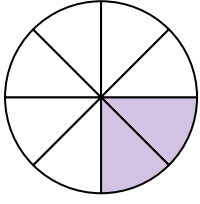
11. _____

12. _____


13. _____

14. _____


3)



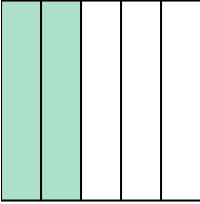
4)




5)




6)




7)




8)




9)



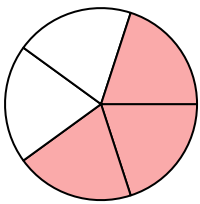
10)




11)



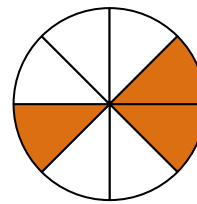
12)



13)



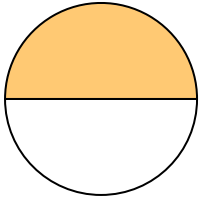
14)






Scrivi la quantità ombreggiata come frazione.

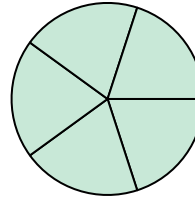
Es)



1)



2)



Risposte

Es. $\frac{1}{2}$

1. $\frac{3}{3}$

2. $\frac{5}{5}$

3. $\frac{2}{8}$

4. $\frac{3}{3}$

5. $\frac{1}{8}$

6. $\frac{2}{5}$

7. $\frac{4}{4}$

8. $\frac{3}{4}$

9. $\frac{2}{2}$

10. $\frac{4}{4}$

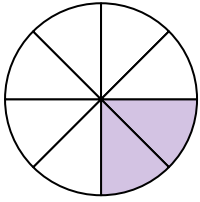
11. $\frac{3}{3}$

12. $\frac{3}{5}$


13. $\frac{1}{2}$

14. $\frac{3}{8}$


3)



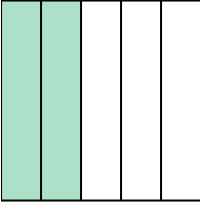
4)




5)



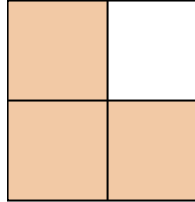
6)




7)




8)




9)



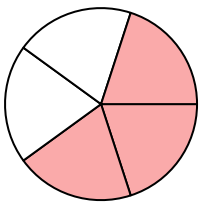
10)




11)



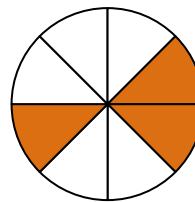
12)



13)



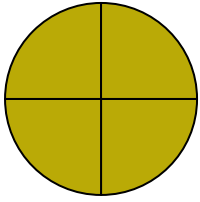
14)






Scrivi la quantità ombreggiata come frazione.

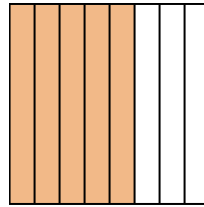
Es)



1)



2)



Risposte

Es. $\frac{4}{4}$

1. _____

2. _____

3. _____

4. _____

5. _____

6. _____

7. _____

8. _____

9. _____

10. _____

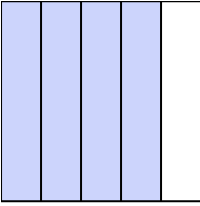
11. _____

12. _____

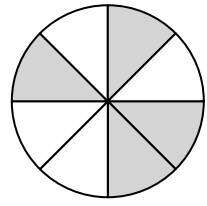
13. _____

14. _____

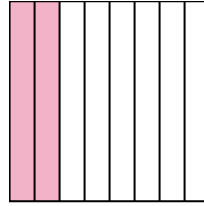
3)



4)



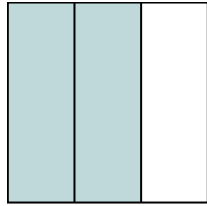
5)



6)



7)




8)



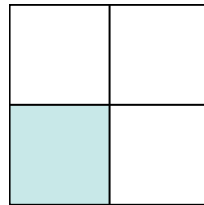
9)




10)



11)



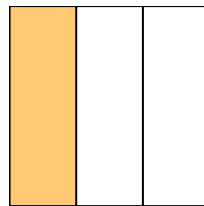
12)



13)

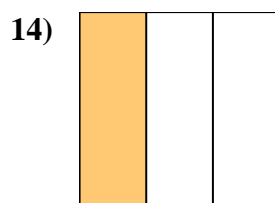
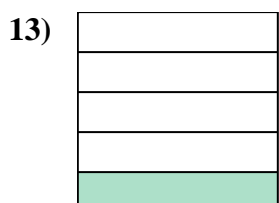
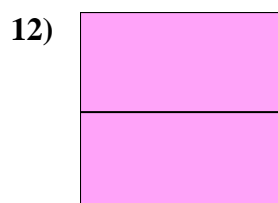
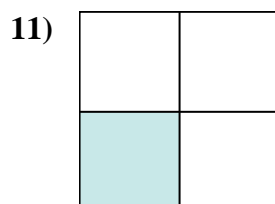
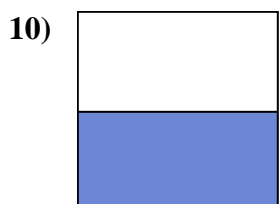
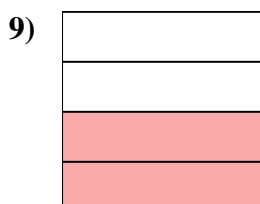
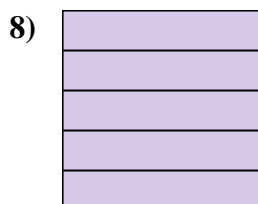
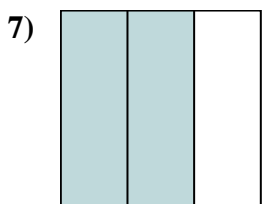
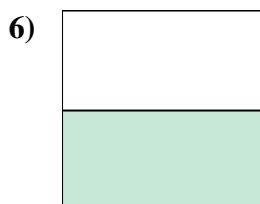
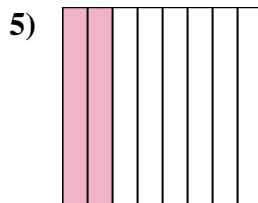
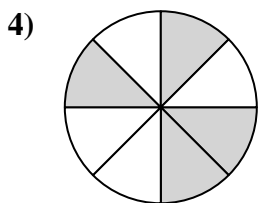
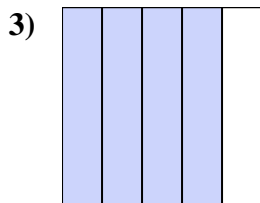
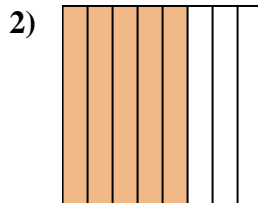
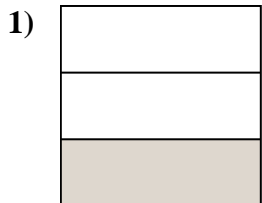
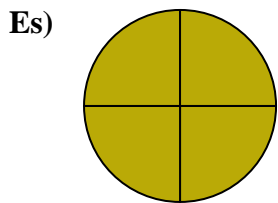


14)





Scrivi la quantità ombreggiata come frazione.



Risposte

Es. 4/4

1. 1/3

2. 5/8

3. 4/5

4. 4/8

5. 2/8

6. 1/2

7. 2/3

8. 5/5

9. 2/4

10. 1/2

11. 1/4

12. 2/2

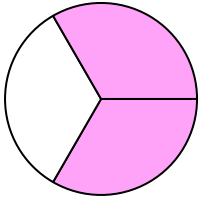
13. 1/5

14. 1/3

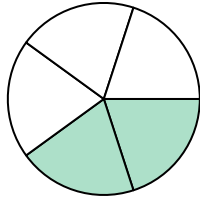


Scrivi la quantità ombreggiata come frazione.

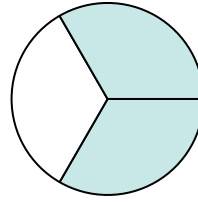
Es)



1)



2)



Risposte

Es. $\frac{2}{3}$

1. _____

2. _____

3. _____

4. _____

5. _____

6. _____

7. _____

8. _____

9. _____

10. _____

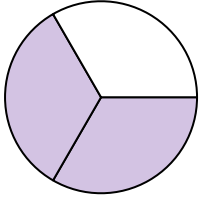
11. _____

12. _____

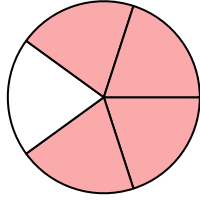
13. _____

14. _____


3)



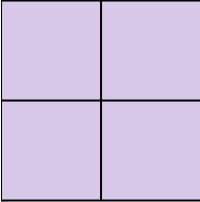
4)



5)




6)



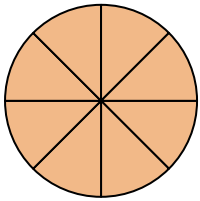
7)



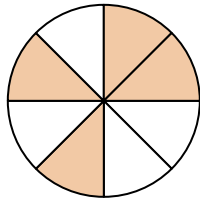
8)




9)



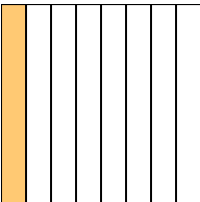
10)



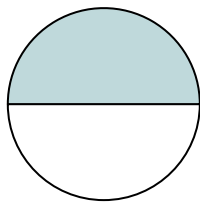
11)



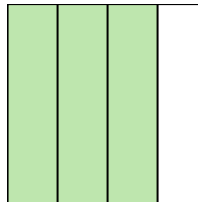
12)



13)



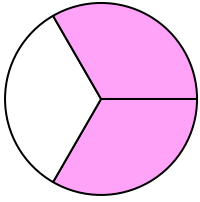
14)



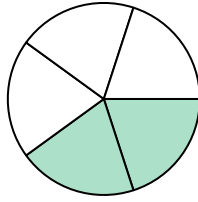


Scrivi la quantità ombreggiata come frazione.

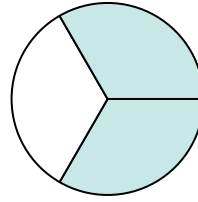
Es)



1)



2)



Risposte

Es. $\frac{2}{3}$

1. $\frac{2}{5}$

2. $\frac{2}{3}$

3. $\frac{2}{3}$

4. $\frac{4}{5}$

5. $\frac{2}{2}$

6. $\frac{4}{4}$

7. $\frac{1}{4}$

8. $\frac{4}{5}$

9. $\frac{8}{8}$

10. $\frac{4}{8}$

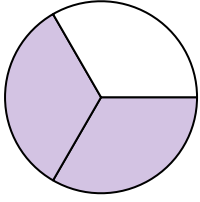
11. $\frac{1}{2}$

12. $\frac{1}{8}$

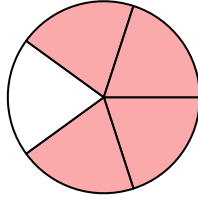
13. $\frac{1}{2}$

14. $\frac{3}{4}$


3)



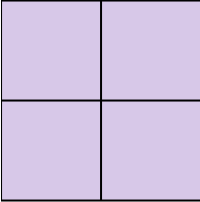
4)



5)




6)



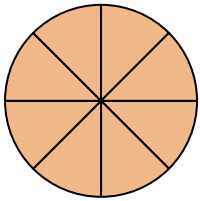
7)



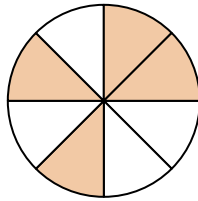
8)




9)



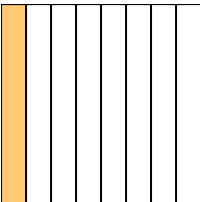
10)



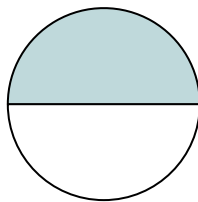
11)



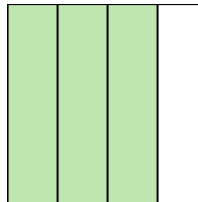
12)



13)

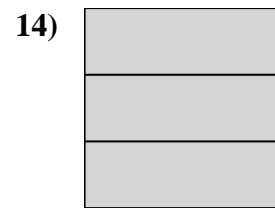

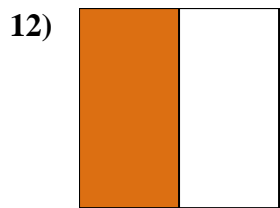
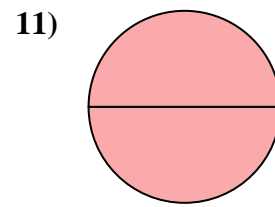
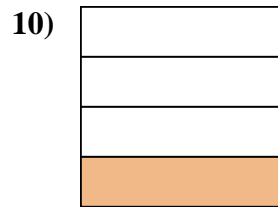
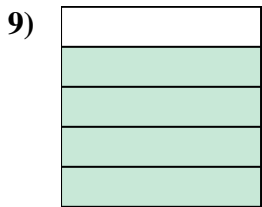
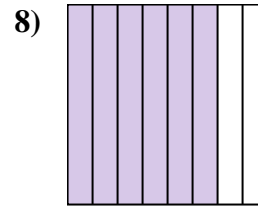
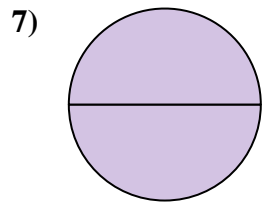
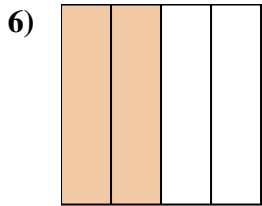
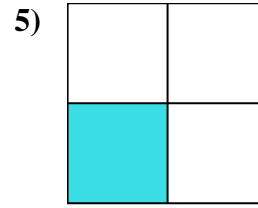
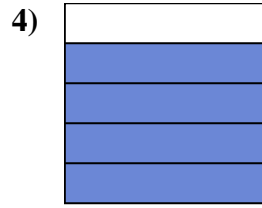
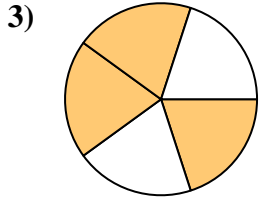
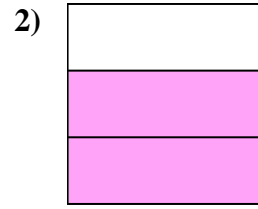
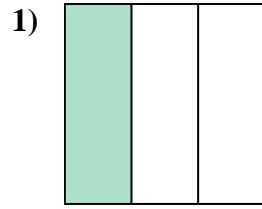
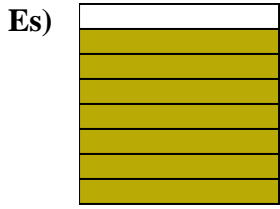


14)





Scrivi la quantità ombreggiata come frazione.



Risposte

Es. $\frac{7}{8}$

1. _____

2. _____

3. _____

4. _____

5. _____

6. _____

7. _____

8. _____

9. _____

10. _____

11. _____

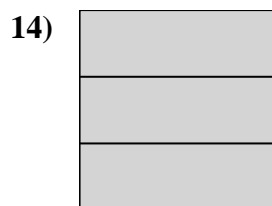
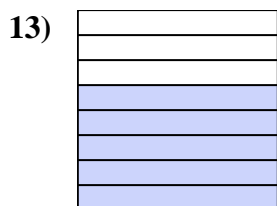
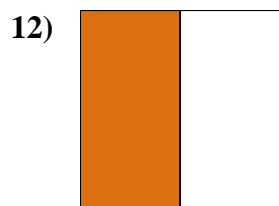
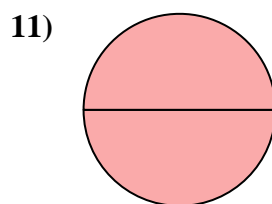
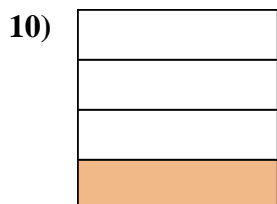

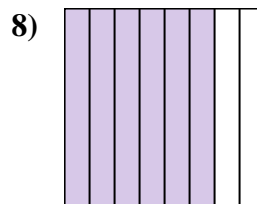
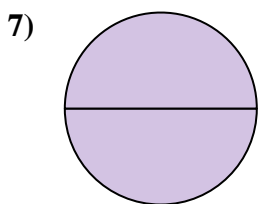
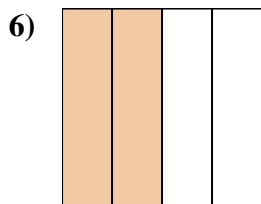
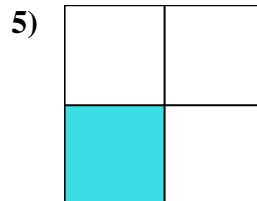

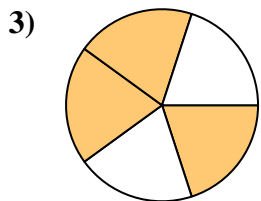
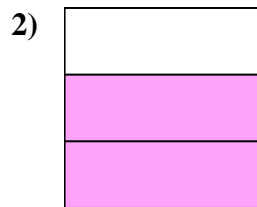
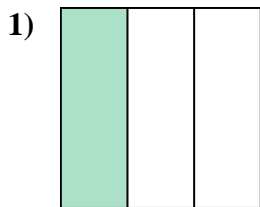

12. _____

13. _____

14. _____



Scrivi la quantità ombreggiata come frazione.



Risposte

Es. $\frac{7}{8}$

1. $\frac{1}{3}$

2. $\frac{2}{3}$

3. $\frac{3}{5}$

4. $\frac{4}{5}$

5. $\frac{1}{4}$

6. $\frac{2}{4}$

7. $\frac{2}{2}$

8. $\frac{6}{8}$

9. $\frac{4}{5}$

10. $\frac{1}{4}$

11. $\frac{2}{2}$

12. $\frac{1}{2}$

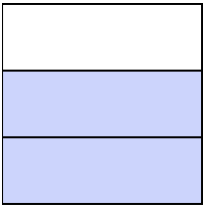
13. $\frac{5}{8}$

14. $\frac{3}{3}$



Scrivi la quantità ombreggiata come frazione.

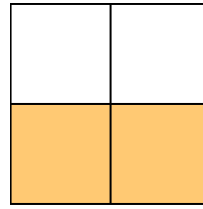
Es)




1)



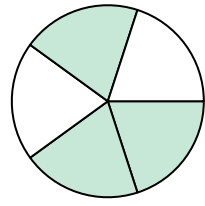
2)



3)



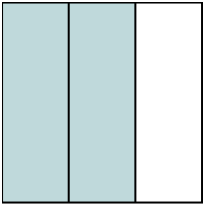
4)



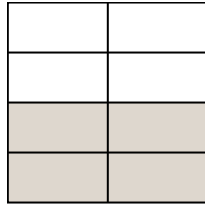
5)



6)



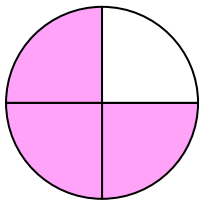
7)



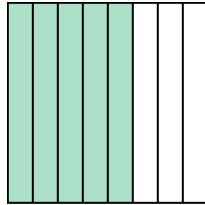
8)



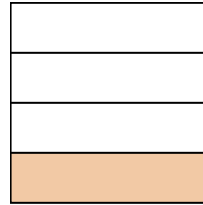
9)




10)



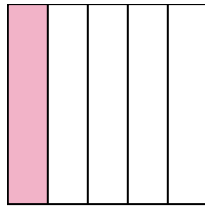
11)




12)



13)



14)



Risposte

Es. $\frac{2}{3}$

1. _____

2. _____

3. _____

4. _____

5. _____

6. _____

7. _____

8. _____

9. _____

10. _____

11. _____

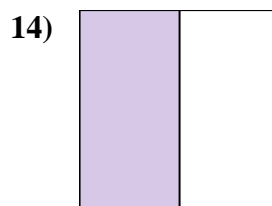
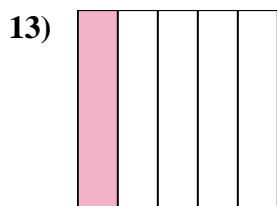
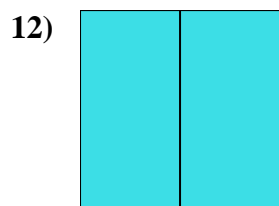
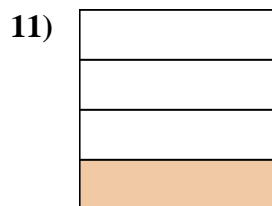
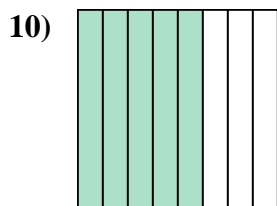
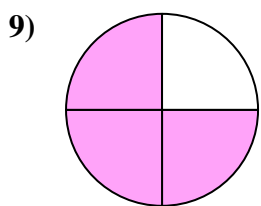
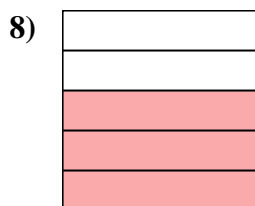
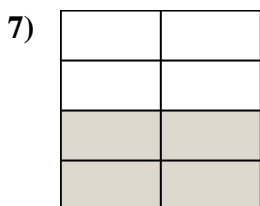
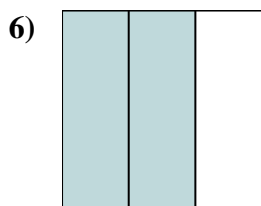
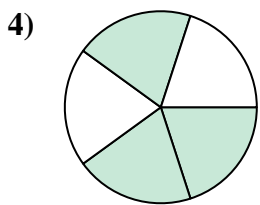
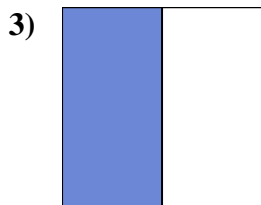
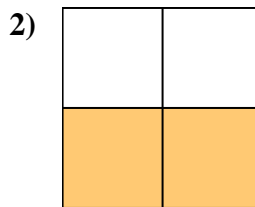
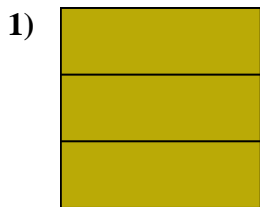
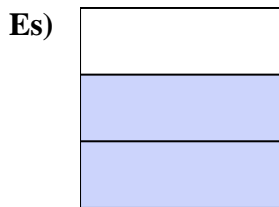
12. _____

13. _____

14. _____



Scrivi la quantità ombreggiata come frazione.

**Risposte**Es. $\frac{2}{3}$ 1. $\frac{3}{3}$ 2. $\frac{2}{4}$ 3. $\frac{1}{2}$ 4. $\frac{3}{5}$ 5. $\frac{3}{8}$ 6. $\frac{2}{3}$ 7. $\frac{4}{8}$ 8. $\frac{3}{5}$ 9. $\frac{3}{4}$ 10. $\frac{5}{8}$ 11. $\frac{1}{4}$ 12. $\frac{2}{2}$ 13. $\frac{1}{5}$ 14. $\frac{1}{2}$