





Scrivi la quantità ombreggiata come frazione.

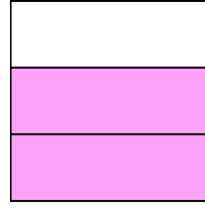
Es)



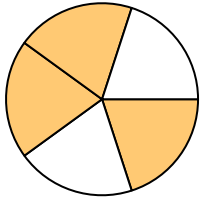
1)




2)




3)



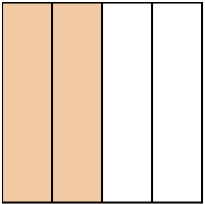
4)



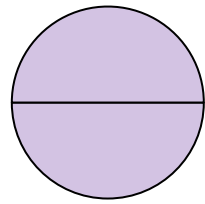
5)



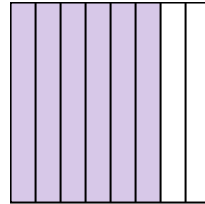
6)




7)




8)



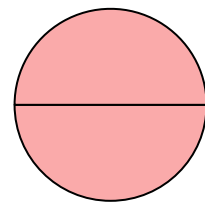
9)




10)




11)




12)



13)



14)



Risposte

Es. $\frac{7}{8}$

1. _____

2. _____

3. _____

4. _____

5. _____

6. _____

7. _____

8. _____

9. _____

10. _____

11. _____

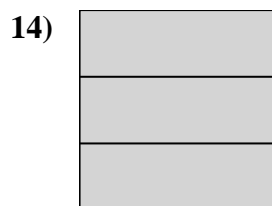
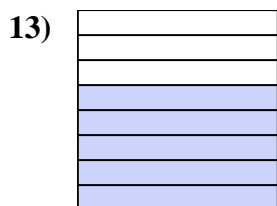
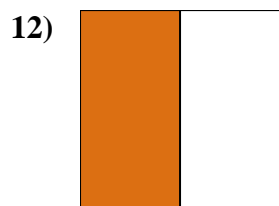
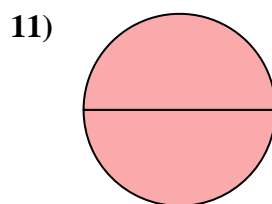
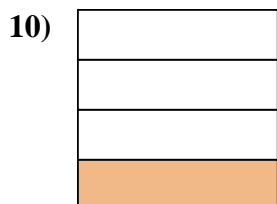

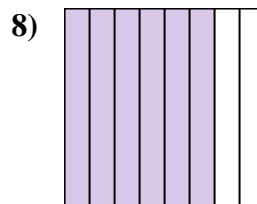
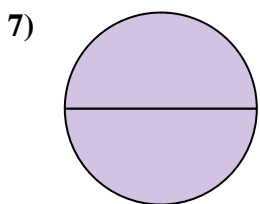
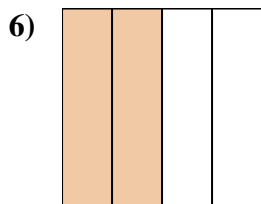
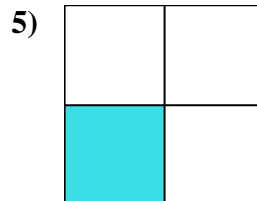

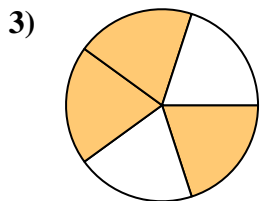
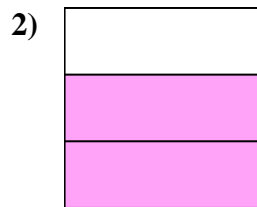
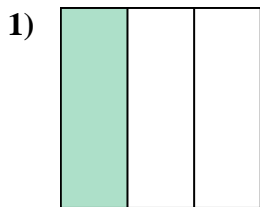
12. _____

13. _____

14. _____



Scrivi la quantità ombreggiata come frazione.



Risposte

Es. 7/8

1. 1/3

2. 2/3

3. 3/5

4. 4/5

5. 1/4

6. 2/4

7. 2/2

8. 6/8

9. 4/5

10. 1/4

11. 2/2

12. 1/2

13. 5/8

14. 3/3