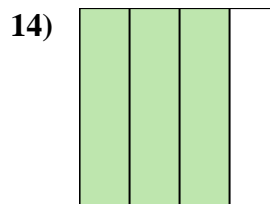
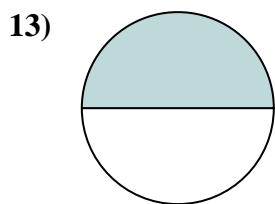
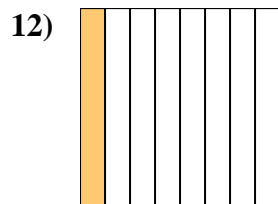
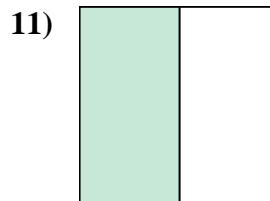
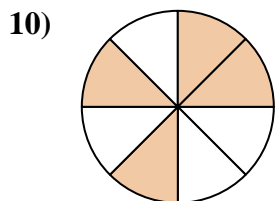
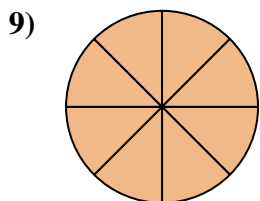
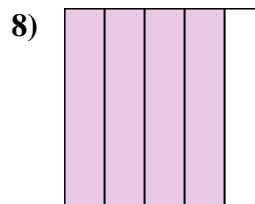
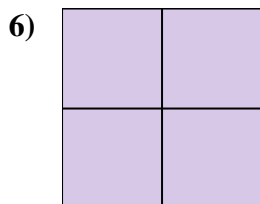
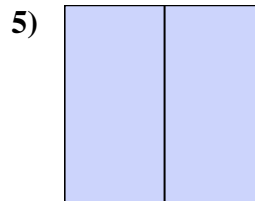
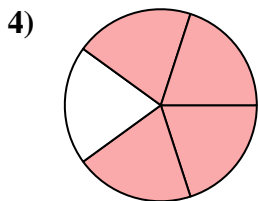
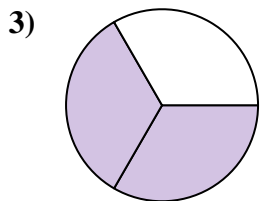
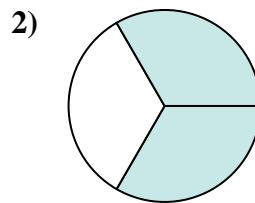
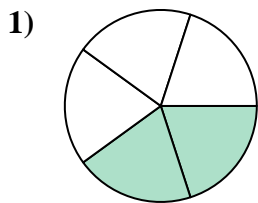
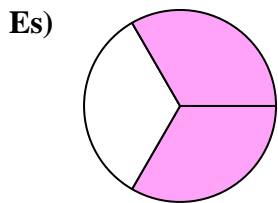




Scrivi la quantità ombreggiata come frazione.



Risposte

Es. $\frac{2}{3}$

1. _____

2. _____

3. _____

4. _____

5. _____

6. _____

7. _____

8. _____

9. _____

10. _____

11. _____

12. _____

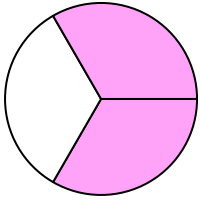
13. _____

14. _____

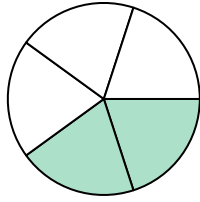


Scrivi la quantità ombreggiata come frazione.

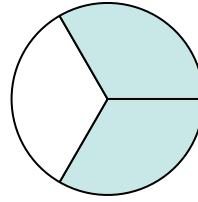
Es)



1)



2)



Risposte

Es. $\frac{2}{3}$

1. $\frac{2}{5}$

2. $\frac{2}{3}$

3. $\frac{2}{3}$

4. $\frac{4}{5}$

5. $\frac{2}{2}$

6. $\frac{4}{4}$

7. $\frac{1}{4}$

8. $\frac{4}{5}$

9. $\frac{8}{8}$

10. $\frac{4}{8}$

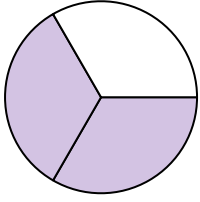
11. $\frac{1}{2}$

12. $\frac{1}{8}$

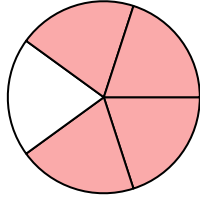
13. $\frac{1}{2}$

14. $\frac{3}{4}$


3)



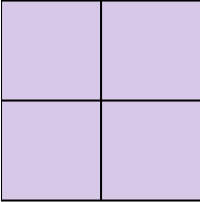
4)



5)




6)



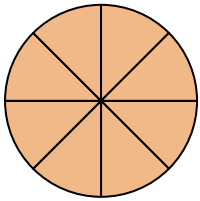
7)



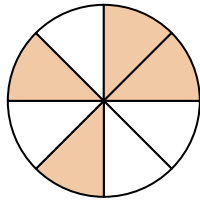
8)




9)



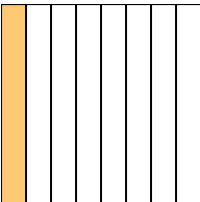
10)



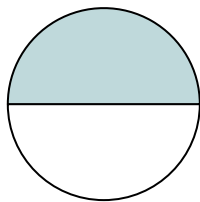
11)



12)



13)



14)

