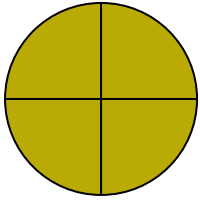


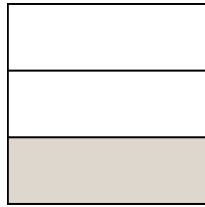


Scrivi la quantità ombreggiata come frazione.

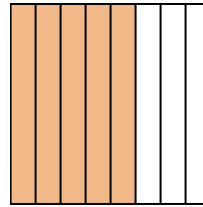
Es)



1)



2)



**Risposte**

Es.  $\frac{4}{4}$

\_\_\_\_\_

1. \_\_\_\_\_

2. \_\_\_\_\_

3. \_\_\_\_\_

4. \_\_\_\_\_

5. \_\_\_\_\_

6. \_\_\_\_\_

7. \_\_\_\_\_

8. \_\_\_\_\_

9. \_\_\_\_\_

10. \_\_\_\_\_

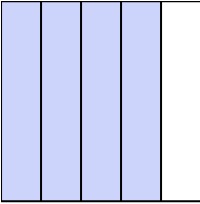
11. \_\_\_\_\_

12. \_\_\_\_\_

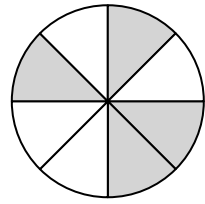
13. \_\_\_\_\_

14. \_\_\_\_\_

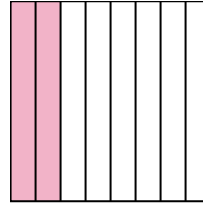
3)



4)



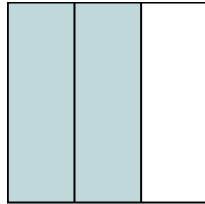
5)




6)




7)




8)



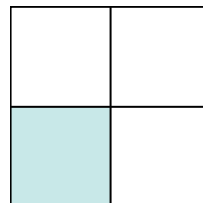
9)




10)




11)



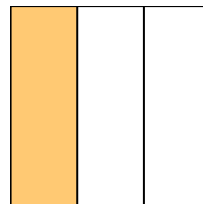
12)



13)

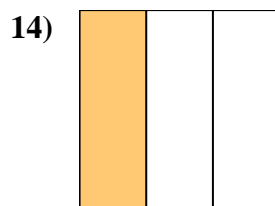
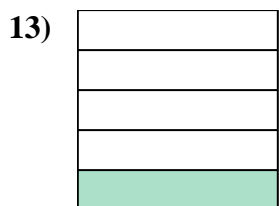
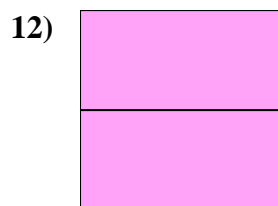
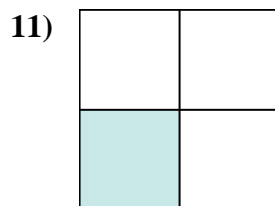
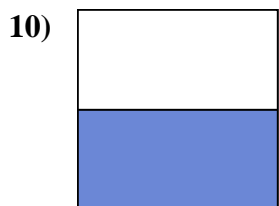
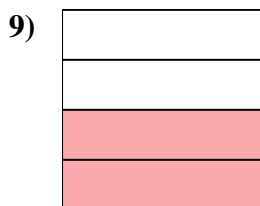
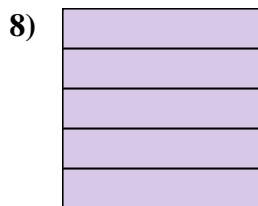
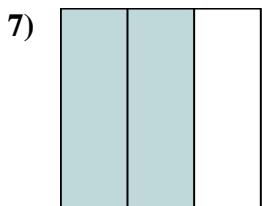

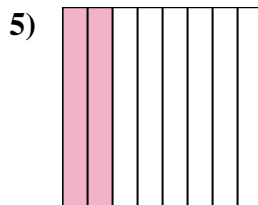
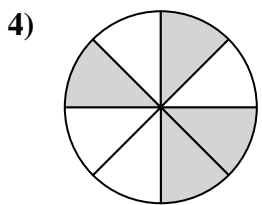
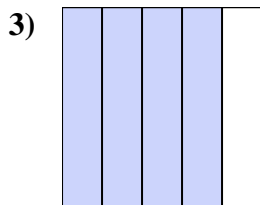
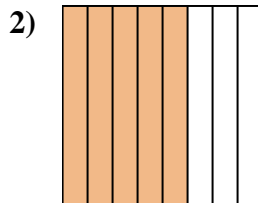
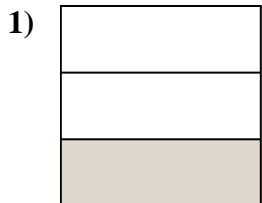
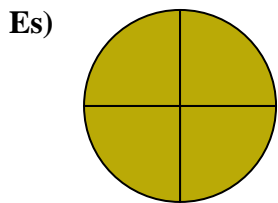


14)





Scrivi la quantità ombreggiata come frazione.



**Risposte**

Es. 4/4

1. 1/3

2. 5/8

3. 4/5

4. 4/8

5. 2/8

6. 1/2

7. 2/3

8. 5/5

9. 2/4

10. 1/2

11. 1/4

12. 2/2

13. 1/5

14. 1/3