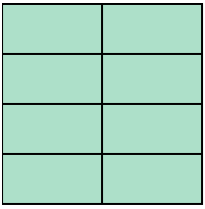





Scrivi la quantità ombreggiata come frazione.

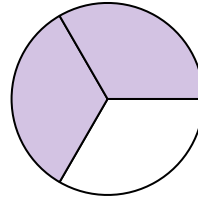
Es)



1)



2)



**Risposte**

Es.  $\frac{8}{8}$

1. \_\_\_\_\_

2. \_\_\_\_\_

3. \_\_\_\_\_

4. \_\_\_\_\_

5. \_\_\_\_\_

6. \_\_\_\_\_

7. \_\_\_\_\_

8. \_\_\_\_\_

9. \_\_\_\_\_

10. \_\_\_\_\_

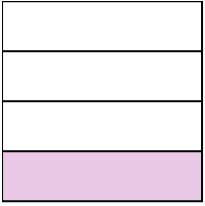
11. \_\_\_\_\_

12. \_\_\_\_\_

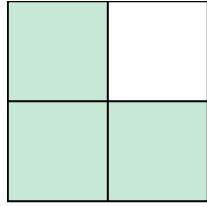
13. \_\_\_\_\_

14. \_\_\_\_\_


3)



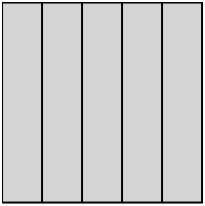
4)



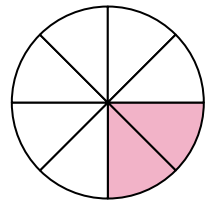
5)




6)




7)



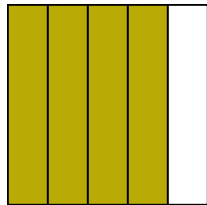
8)




9)




10)




11)




12)



13)



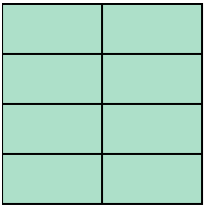
14)






Scrivi la quantità ombreggiata come frazione.

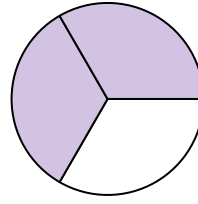
Es)



1)



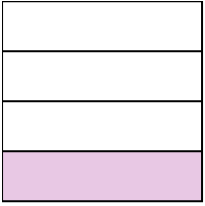
2)



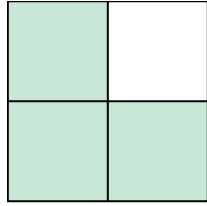
**Risposte**

Es.  $\frac{8}{8}$


3)



4)



5)



1.  $\frac{2}{2}$

2.  $\frac{2}{3}$

3.  $\frac{1}{4}$

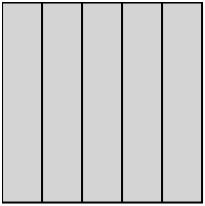
4.  $\frac{3}{4}$

5.  $\frac{2}{2}$

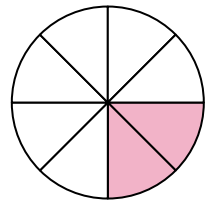
6.  $\frac{5}{5}$

7.  $\frac{2}{8}$


6)



7)



8)




8.  $\frac{1}{4}$

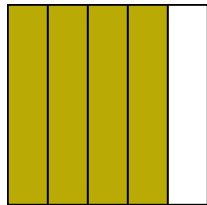
9.  $\frac{3}{8}$

10.  $\frac{4}{5}$


9)



10)



11)




11.  $\frac{1}{3}$

12.  $\frac{1}{5}$


13.  $\frac{2}{2}$

14.  $\frac{3}{3}$

12)



13)



14)

