




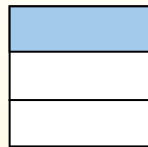
Usa lo schema per mostrare come si dividono una frazione e un numero intero.

$\frac{1}{3} \div 4 = ?$



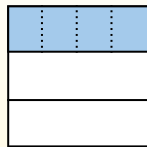
Para resolverlo, comience con un todo.

Divida el conjunto en 3 piezas y complete 1 sección.



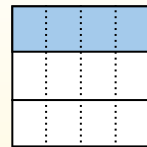
Ahora puedes ver el tamaño de  $\frac{1}{3}$

Em seguida, divide a  $\frac{1}{3}$  em 4 grupos.



Esto muestra el tamaño de cada pieza.

Para calcular el tamaño de cada pieza en comparación con el conjunto, divide el conjunto en 4 grupos.



Each piece is  $\frac{1}{12}$  of the whole.


Or:

$\frac{1}{3} \div 4 = \frac{1}{12}$


**Risposte**

1. \_\_\_\_\_
2. \_\_\_\_\_
3. \_\_\_\_\_
4. \_\_\_\_\_
5. \_\_\_\_\_
6. \_\_\_\_\_
7. \_\_\_\_\_
8. \_\_\_\_\_
9. \_\_\_\_\_
10. \_\_\_\_\_
11. \_\_\_\_\_
12. \_\_\_\_\_


1)  $\frac{1}{8} : 6 =$




2)  $\frac{1}{6} : 2 =$




3)  $\frac{1}{5} : 7 =$




4)  $\frac{1}{5} : 4 =$



5)  $\frac{1}{3} : 6 =$




6)  $\frac{1}{4} : 7 =$




7)  $\frac{1}{2} : 6 =$




8)  $\frac{1}{4} : 3 =$



9)  $\frac{1}{7} : 7 =$




10)  $\frac{1}{8} : 3 =$



11)  $\frac{1}{2} : 9 =$




12)  $\frac{1}{5} : 3 =$





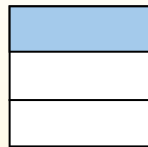
Usa lo schema per mostrare come si dividono una frazione e un numero intero.

$\frac{1}{3} \div 4 = ?$



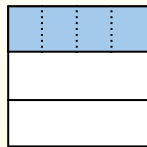
Para resolverlo, comience con un todo.

Divida el conjunto en 3 piezas y complete 1 sección.



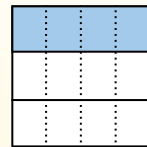
Ahora puedes ver el tamaño de  $\frac{1}{3}$

Em seguida, divide a  $\frac{1}{3}$  em 4 grupos.



Esto muestra el tamaño de cada pieza.

Para calcular el tamaño de cada pieza en comparación con el conjunto, divide el conjunto en 4 grupos.



Each piece is  $\frac{1}{12}$  of the whole.

Or:

$\frac{1}{3} \div 4 = \frac{1}{12}$

**Risposte**

1.  $\frac{1}{48}$

2.  $\frac{1}{12}$

3.  $\frac{1}{35}$

4.  $\frac{1}{20}$

5.  $\frac{1}{18}$

6.  $\frac{1}{28}$

7.  $\frac{1}{12}$

8.  $\frac{1}{12}$

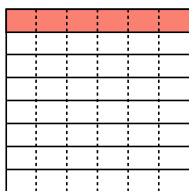
9.  $\frac{1}{49}$

10.  $\frac{1}{24}$

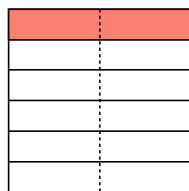
11.  $\frac{1}{18}$

12.  $\frac{1}{15}$

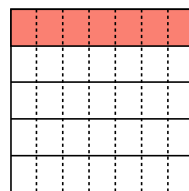
1)  $\frac{1}{8} : 6 =$



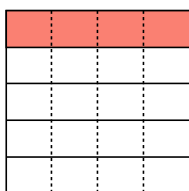
2)  $\frac{1}{6} : 2 =$



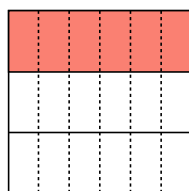
3)  $\frac{1}{5} : 7 =$



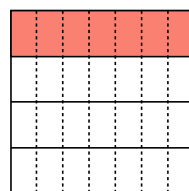
4)  $\frac{1}{5} : 4 =$



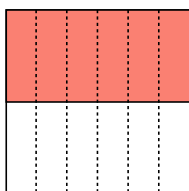
5)  $\frac{1}{3} : 6 =$



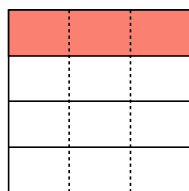
6)  $\frac{1}{4} : 7 =$




7)  $\frac{1}{2} : 6 =$



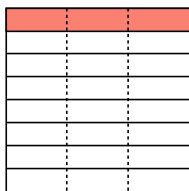
8)  $\frac{1}{4} : 3 =$



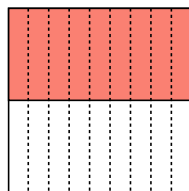
9)  $\frac{1}{7} : 7 =$



10)  $\frac{1}{8} : 3 =$



11)  $\frac{1}{2} : 9 =$



12)  $\frac{1}{5} : 3 =$

