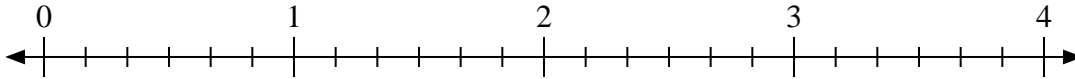




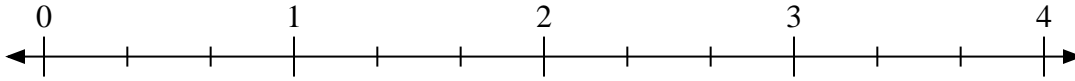
Usa la linea numerata per risolvere ogni problema.

Risposte

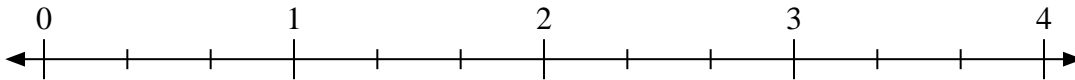
1) $3:\frac{2}{6}$



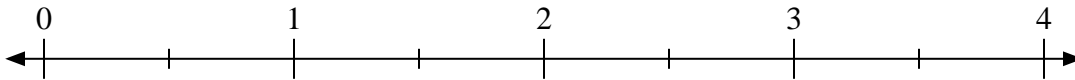
2) $2:\frac{2}{3}$



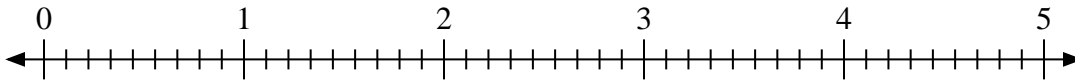
3) $4:\frac{1}{3}$



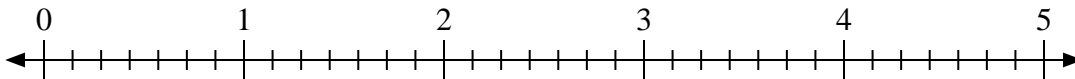
4) $2:\frac{1}{2}$



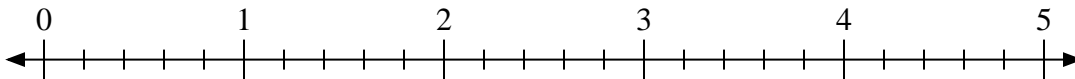
5) $3:\frac{5}{9}$



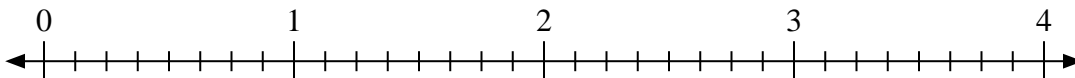
6) $4:\frac{1}{7}$



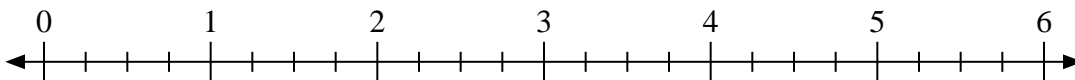
7) $4:\frac{2}{5}$



8) $4:\frac{3}{8}$



9) $2:\frac{1}{4}$



1. _____

2. _____

3. _____

4. _____

5. _____

6. _____

7. _____

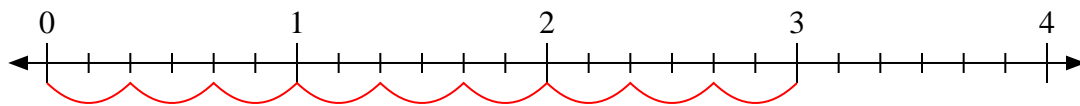
8. _____

9. _____

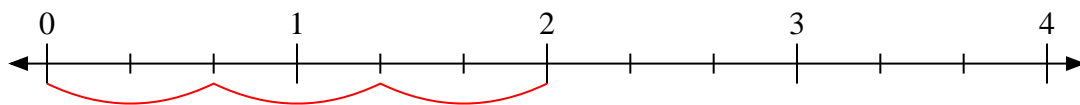


Usa la linea numerata per risolvere ogni problema.

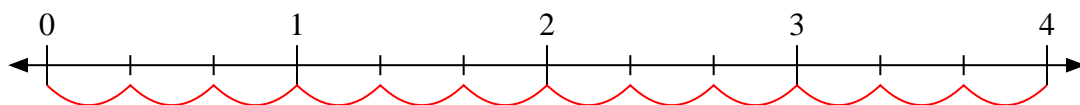
1) $3:\frac{2}{6}$



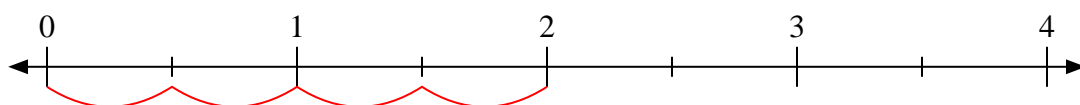
2) $2:\frac{2}{3}$



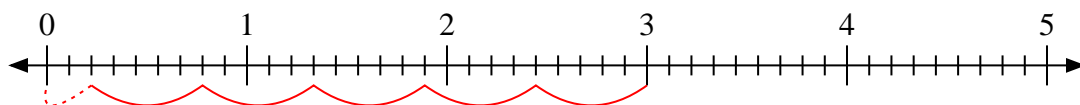
3) $4:\frac{1}{3}$



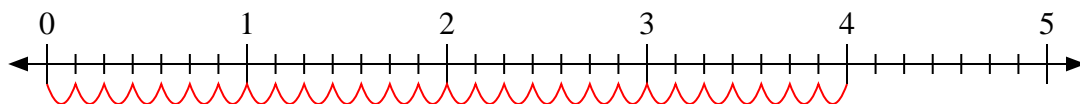
4) $2:\frac{1}{2}$



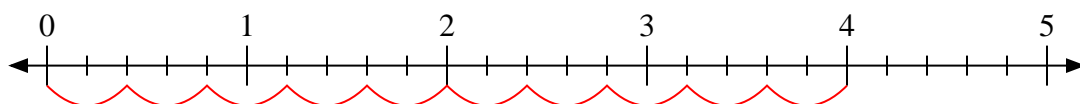
5) $3:\frac{5}{9}$



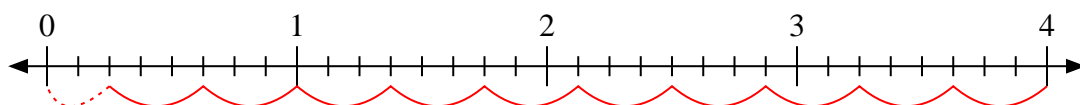
6) $4:\frac{1}{7}$



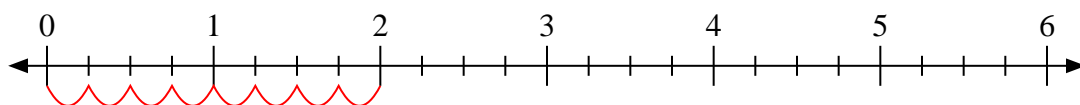
7) $4:\frac{2}{5}$



8) $4:\frac{3}{8}$



9) $2:\frac{1}{4}$

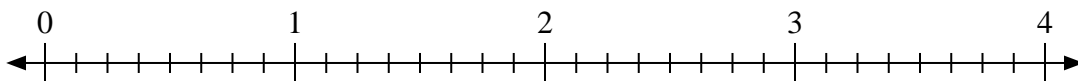
**Risposte**1. 92. 33. 124. 45. $5\frac{2}{5}$ 6. 287. 108. $10\frac{2}{3}$ 9. 8



Usa la linea numerata per risolvere ogni problema.

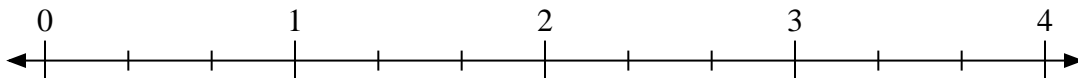
Risposte

1) $2:\frac{1}{8}$



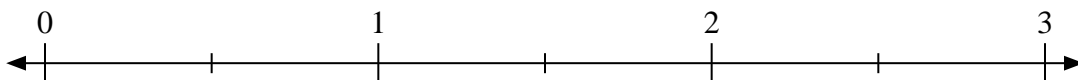
1. _____

2) $2:\frac{2}{3}$



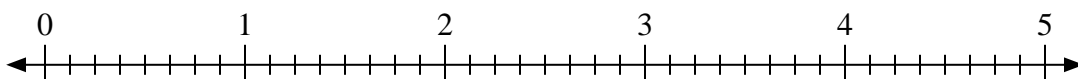
2. _____

3) $2:\frac{1}{2}$



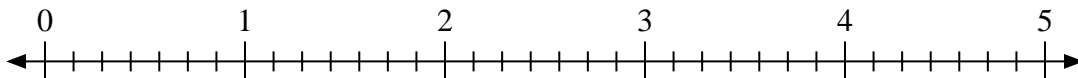
3. _____

4) $3:\frac{5}{8}$



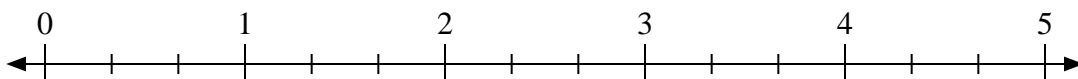
4. _____

5) $2:\frac{6}{7}$



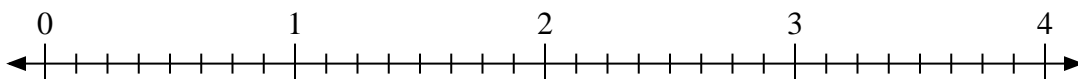
5. _____

6) $4:\frac{1}{3}$



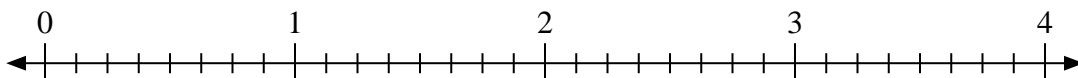
6. _____

7) $2:\frac{3}{8}$



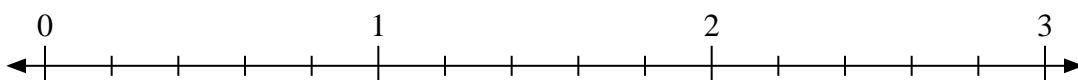
7. _____

8) $2:\frac{2}{8}$



8. _____

9) $2:\frac{3}{5}$

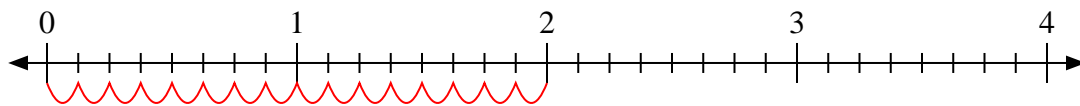


9. _____

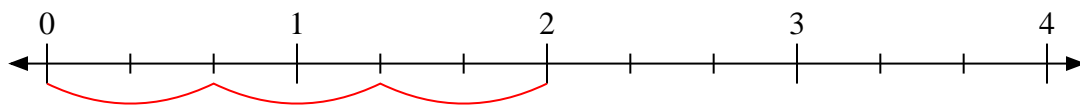


Usa la linea numerata per risolvere ogni problema.

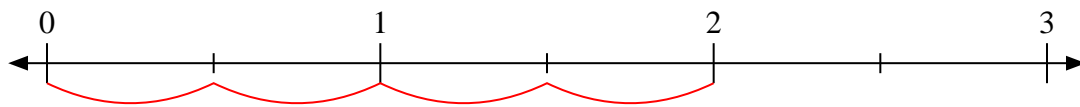
1) $2 : \frac{1}{8}$



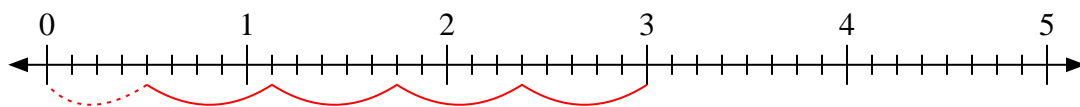
2) $2 : \frac{2}{3}$



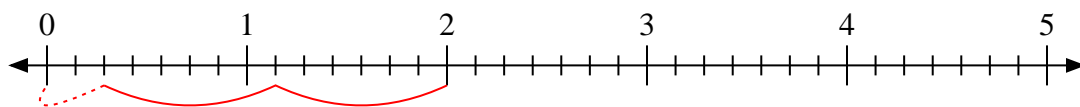
3) $2 : \frac{1}{2}$



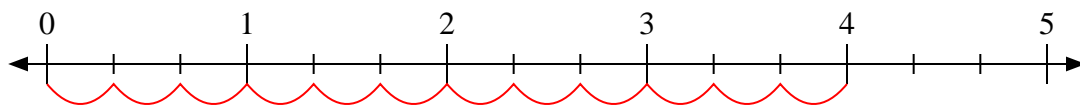
4) $3 : \frac{5}{8}$



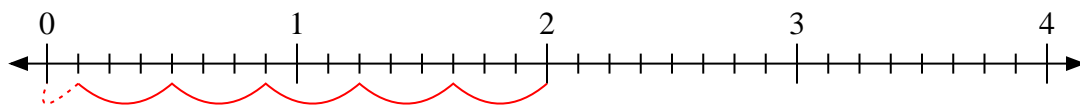
5) $2 : \frac{6}{7}$



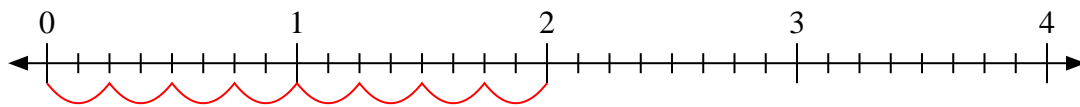
6) $4 : \frac{1}{3}$



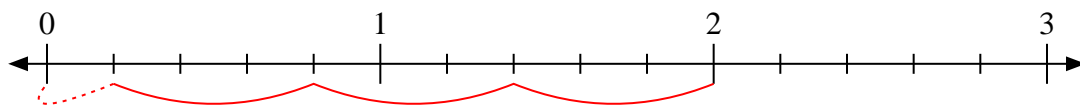
7) $2 : \frac{3}{8}$



8) $2 : \frac{2}{8}$



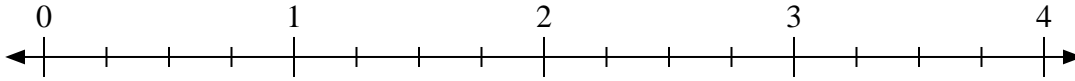
9) $2 : \frac{3}{5}$

**Risposte**1. 162. 33. 44. $4 \frac{4}{5}$ 5. $2 \frac{2}{6}$ 6. 127. $5 \frac{1}{3}$ 8. 89. $3 \frac{1}{3}$

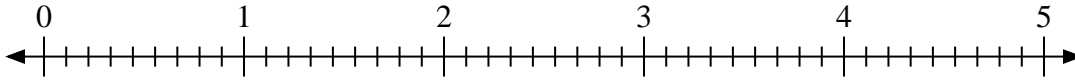


Usa la linea numerata per risolvere ogni problema.

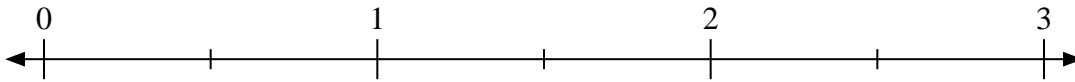
1) $4:\frac{3}{4}$



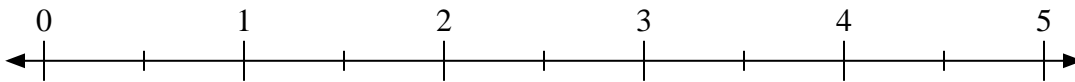
2) $2:\frac{2}{9}$



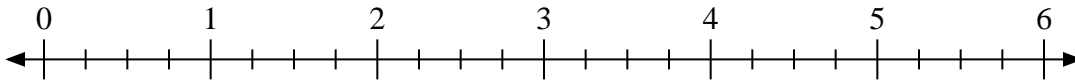
3) $3:\frac{1}{2}$



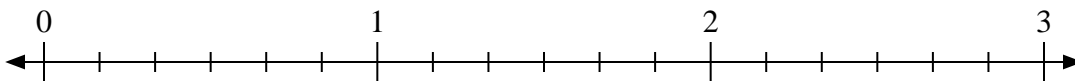
4) $5:\frac{1}{2}$



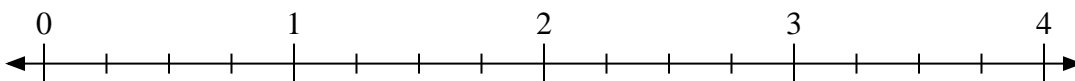
5) $4:\frac{2}{4}$



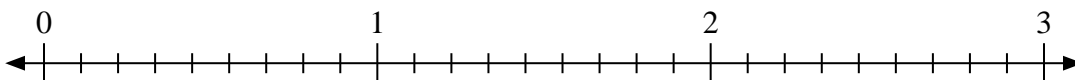
6) $2:\frac{1}{6}$



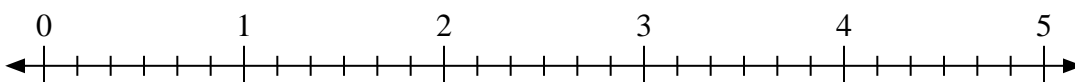
7) $3:\frac{3}{4}$



8) $2:\frac{7}{9}$



9) $3:\frac{2}{6}$

**Risposte**

1. _____

2. _____

3. _____

4. _____

5. _____

6. _____

7. _____

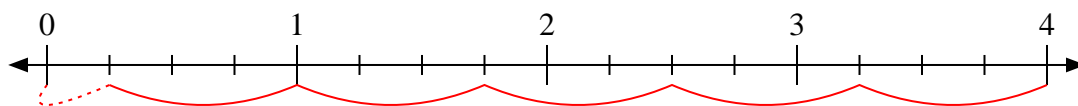
8. _____

9. _____

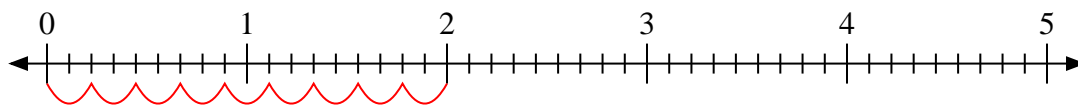


Usa la linea numerata per risolvere ogni problema.

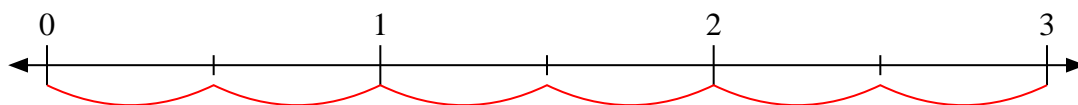
1) $4 : \frac{3}{4}$



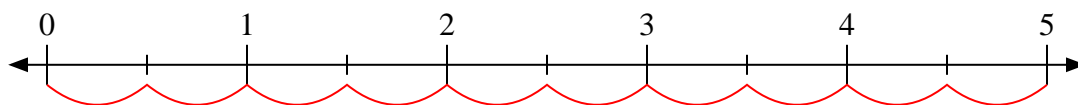
2) $2 : \frac{2}{9}$



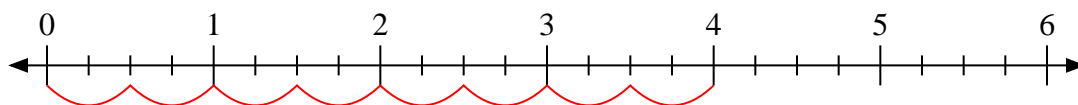
3) $3 : \frac{1}{2}$



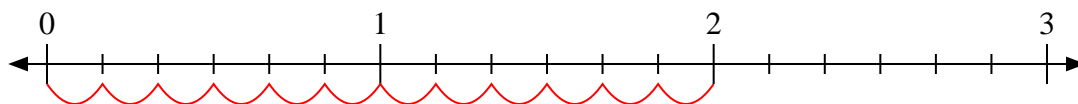
4) $5 : \frac{1}{2}$



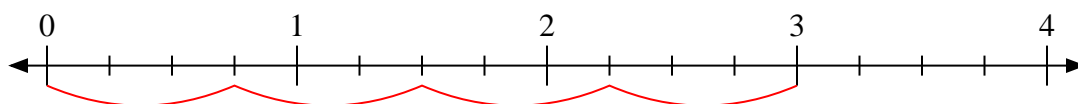
5) $4 : \frac{2}{4}$



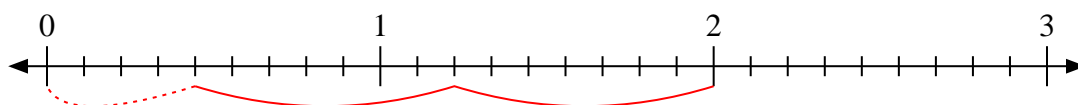
6) $2 : \frac{1}{6}$



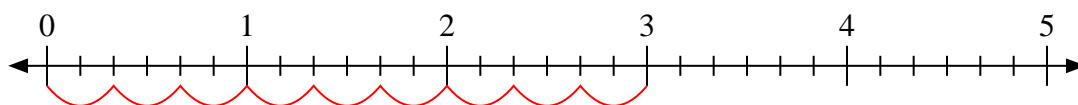
7) $3 : \frac{3}{4}$



8) $2 : \frac{7}{9}$



9) $3 : \frac{2}{6}$

**Risposte**

1. $5 \frac{1}{3}$

2. 9

3. 6

4. 10

5. 8

6. 12

7. 4

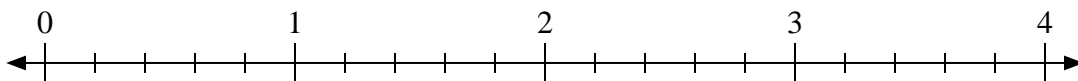
8. $2 \frac{4}{7}$

9. 9

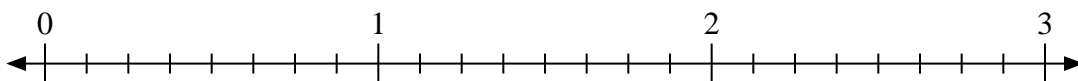


Usa la linea numerata per risolvere ogni problema.

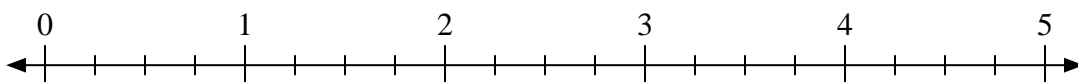
1) $3:\frac{3}{5}$



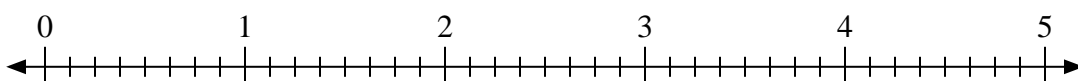
2) $3:\frac{7}{8}$



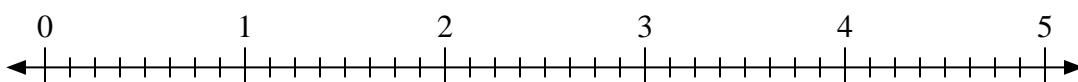
3) $2:\frac{1}{4}$




4) $4:\frac{6}{8}$



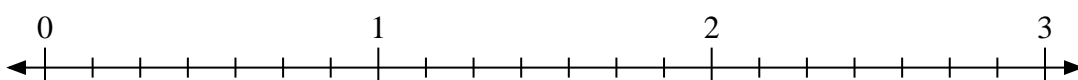
5) $2:\frac{7}{8}$



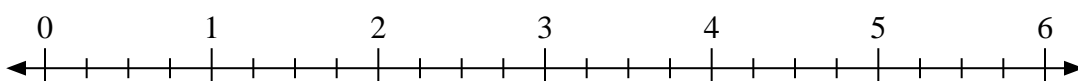
6) $2:\frac{1}{3}$



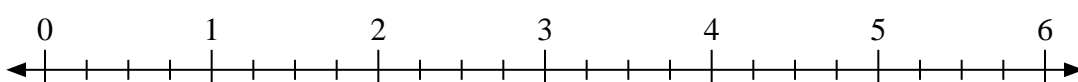
7) $3:\frac{4}{7}$



8) $5:\frac{3}{4}$



9) $6:\frac{3}{4}$

**Risposte**

1. _____

2. _____

3. _____

4. _____

5. _____

6. _____

7. _____

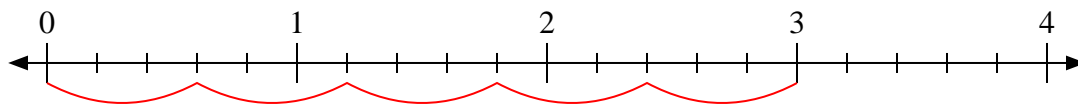
8. _____

9. _____

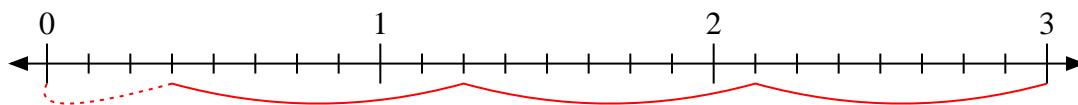


Usa la linea numerata per risolvere ogni problema.

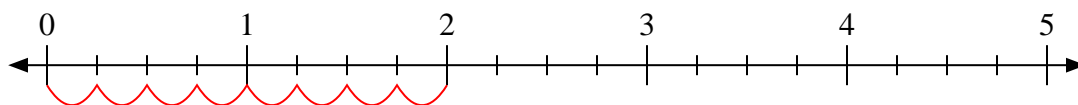
1) $3:\frac{3}{5}$



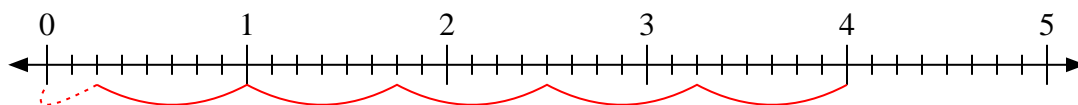
2) $3:\frac{7}{8}$



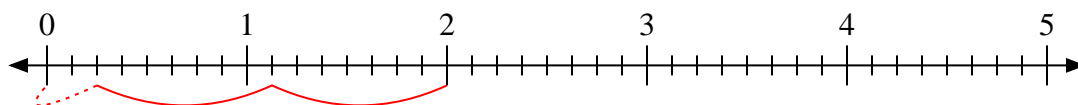
3) $2:\frac{1}{4}$



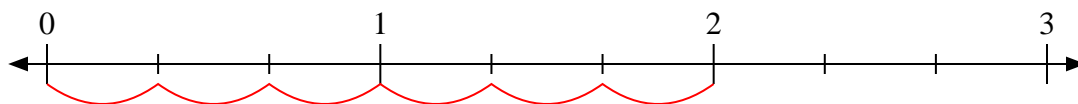
4) $4:\frac{6}{8}$



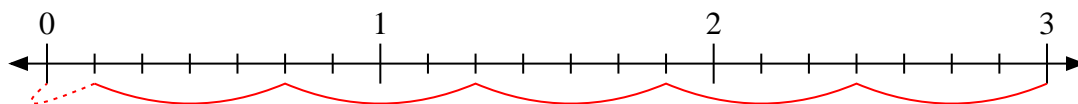
5) $2:\frac{7}{8}$



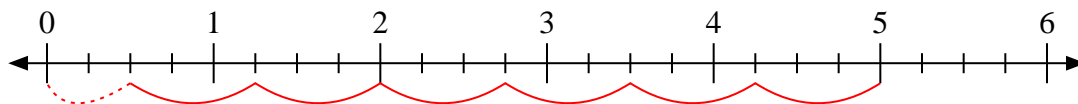
6) $2:\frac{1}{3}$



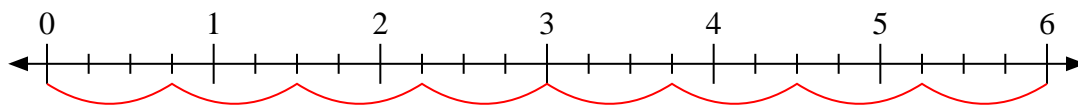
7) $3:\frac{4}{7}$



8) $5:\frac{3}{4}$



9) $6:\frac{3}{4}$

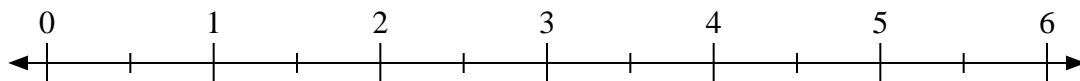
**Risposte**1. 52. $3\frac{3}{7}$ 3. 84. $5\frac{2}{6}$ 5. $2\frac{2}{7}$ 6. 67. $5\frac{1}{4}$ 8. $6\frac{2}{3}$ 9. 8



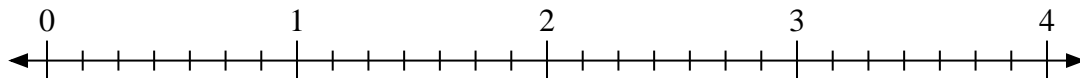
Usa la linea numerata per risolvere ogni problema.

Risposte

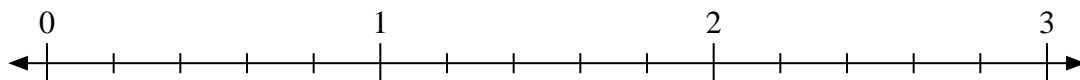
1) $5:\frac{1}{2}$



2) $4:\frac{4}{7}$



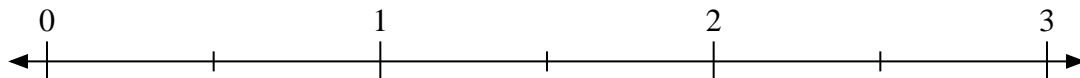
3) $3:\frac{1}{5}$



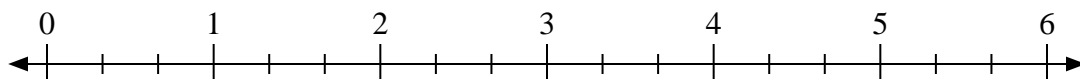
4) $2:\frac{2}{5}$



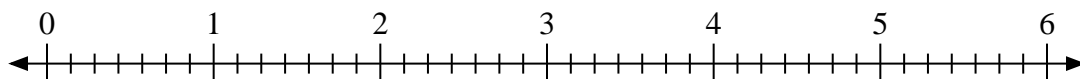
5) $2:\frac{1}{2}$



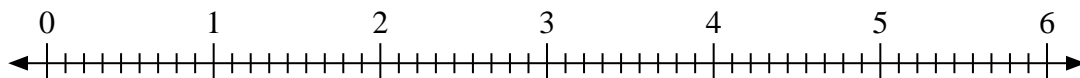
6) $3:\frac{2}{3}$



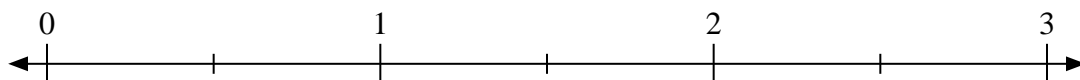
7) $2:\frac{2}{7}$



8) $2:\frac{4}{9}$



9) $3:\frac{1}{2}$



1. _____

2. _____

3. _____

4. _____

5. _____

6. _____

7. _____

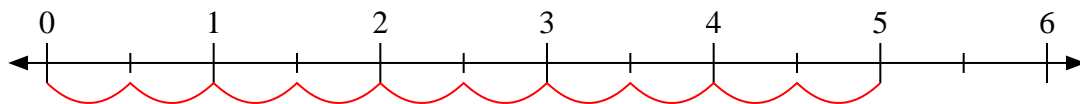
8. _____

9. _____

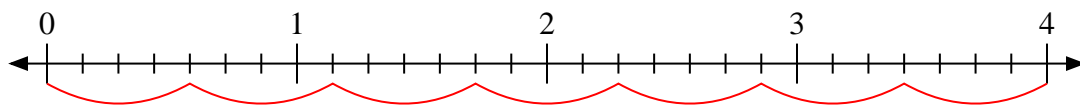


Usa la linea numerata per risolvere ogni problema.

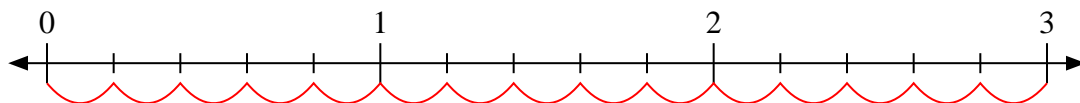
1) $5 : \frac{1}{2}$



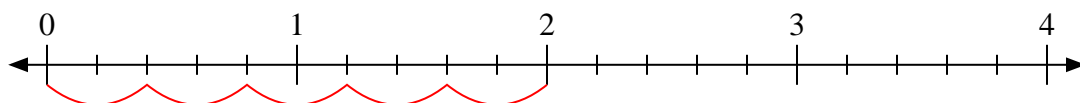
2) $4 : \frac{4}{7}$



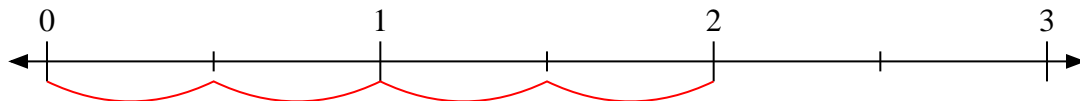
3) $3 : \frac{1}{5}$



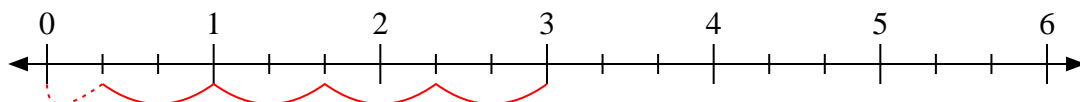
4) $2 : \frac{2}{5}$



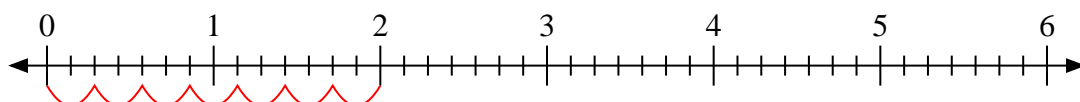
5) $2 : \frac{1}{2}$



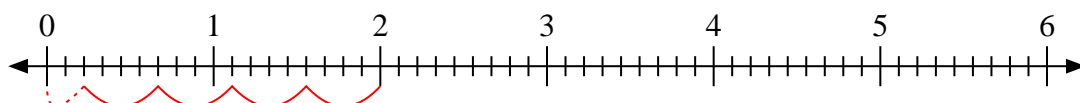
6) $3 : \frac{2}{3}$



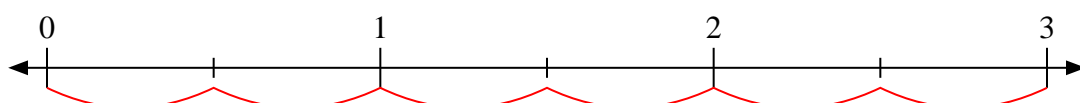
7) $2 : \frac{2}{7}$



8) $2 : \frac{4}{9}$



9) $3 : \frac{1}{2}$

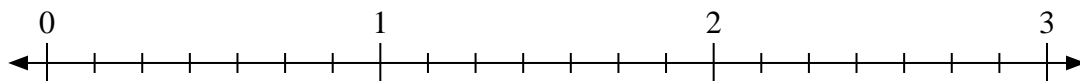
**Risposte**1. **10**2. **7**3. **15**4. **5**5. **4**6. **$4\frac{1}{2}$** 7. **7**8. **$4\frac{2}{4}$** 9. **6**



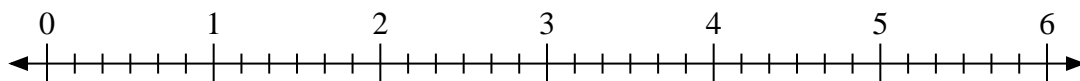
Usa la linea numerata per risolvere ogni problema.

Risposte

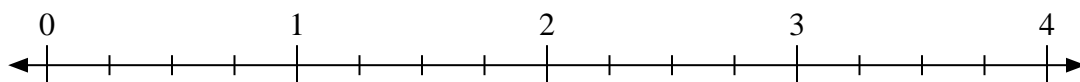
1) $2:\frac{3}{7}$



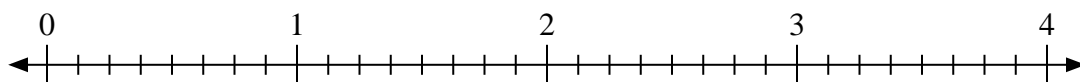
2) $6:\frac{3}{6}$



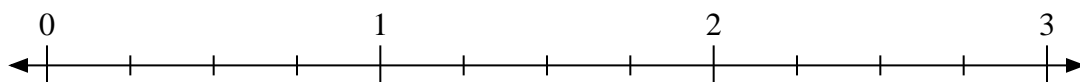
3) $2:\frac{1}{4}$



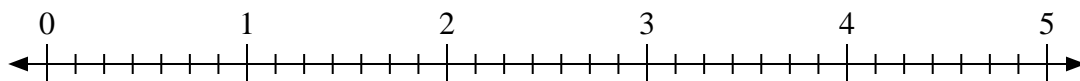
4) $2:\frac{2}{8}$



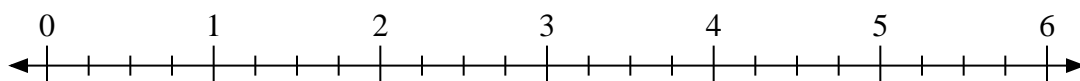
5) $3:\frac{2}{4}$



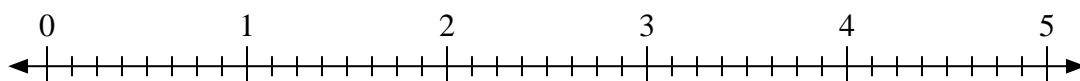
6) $5:\frac{4}{7}$



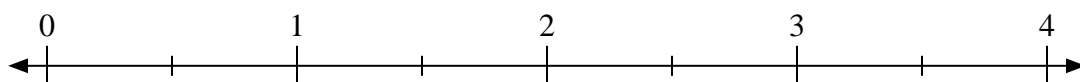
7) $6:\frac{1}{4}$



8) $5:\frac{5}{8}$



9) $3:\frac{1}{2}$



1. _____

2. _____

3. _____

4. _____

5. _____

6. _____

7. _____

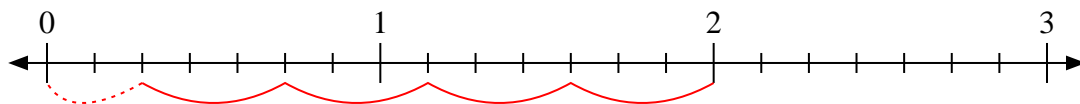
8. _____

9. _____

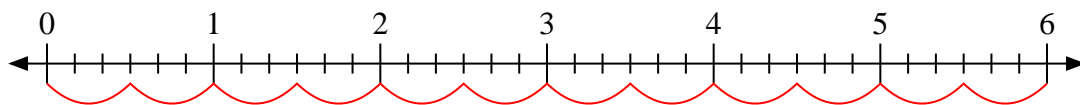


Usa la linea numerata per risolvere ogni problema.

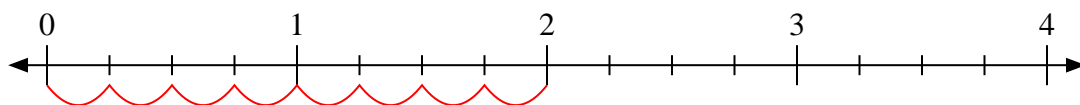
1) $2:\frac{3}{7}$



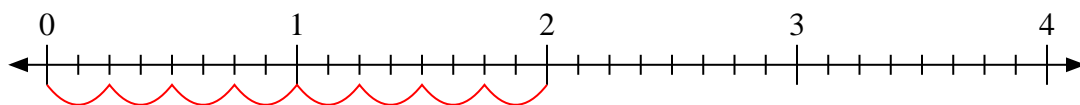
2) $6:\frac{3}{6}$



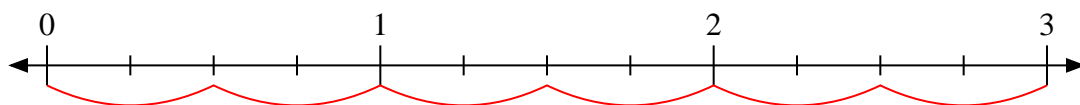
3) $2:\frac{1}{4}$



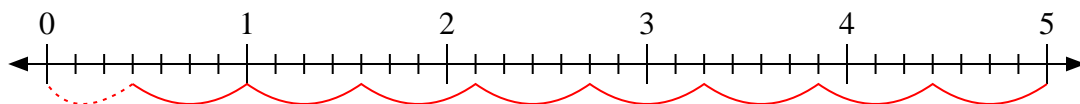
4) $2:\frac{2}{8}$



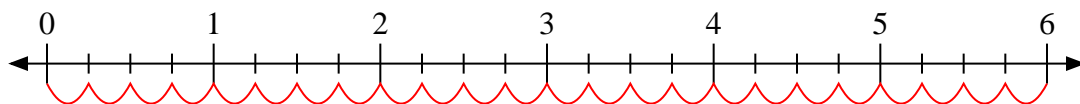
5) $3:\frac{2}{4}$



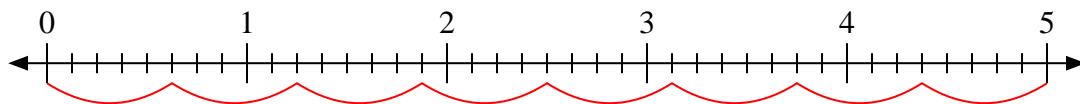
6) $5:\frac{4}{7}$



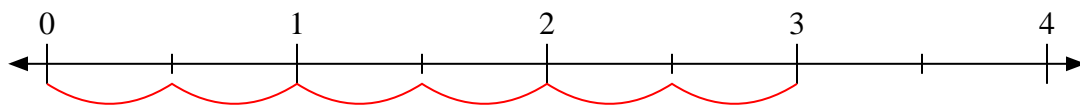
7) $6:\frac{1}{4}$



8) $5:\frac{5}{8}$



9) $3:\frac{1}{2}$

**Risposte**

1. 4 $\frac{2}{3}$

2. 12

3. 8

4. 8

5. 6

6. 8 $\frac{3}{4}$

7. 24

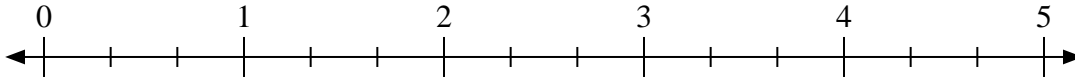
8. 8

9. 6




Usa la linea numerata per risolvere ogni problema.

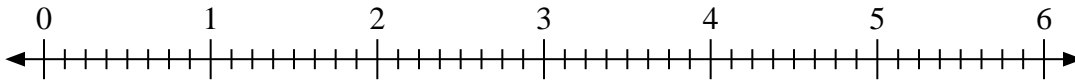
1) $2 : \frac{2}{3}$



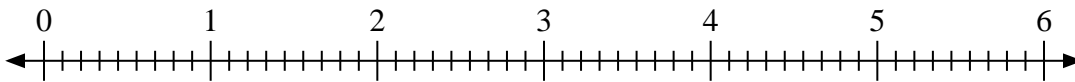
2) $2 : \frac{1}{3}$



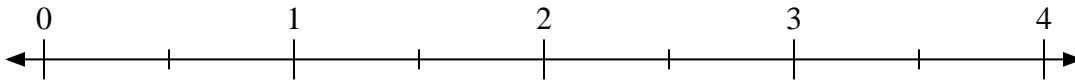
3) $4 : \frac{3}{8}$



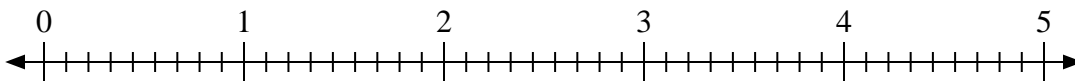
4) $6 : \frac{8}{9}$



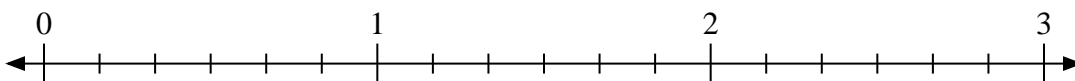
5) $2 : \frac{1}{2}$



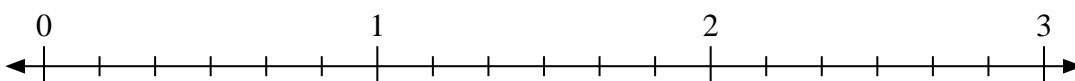
6) $3 : \frac{8}{9}$



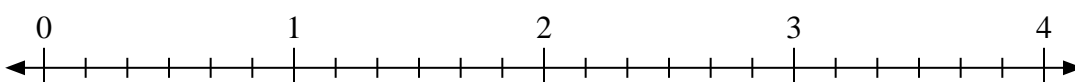
7) $2 : \frac{3}{6}$



8) $2 : \frac{4}{6}$



9) $3 : \frac{5}{6}$



Risposte

1. _____

2. _____

3. _____

4. _____

5. _____

6. _____

7. _____

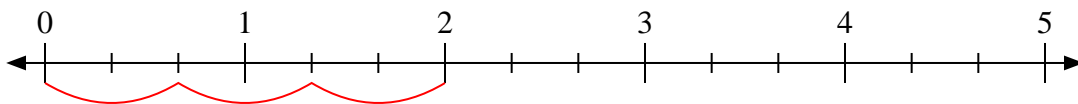
8. _____

9. _____

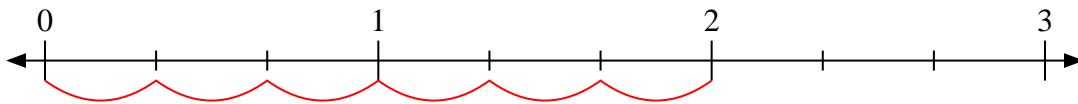


Usa la linea numerata per risolvere ogni problema.

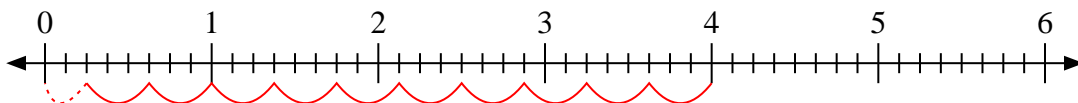
1) $2 : \frac{2}{3}$



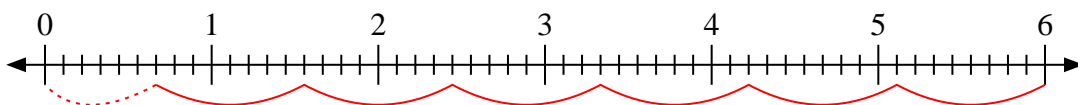
2) $2 : \frac{1}{3}$



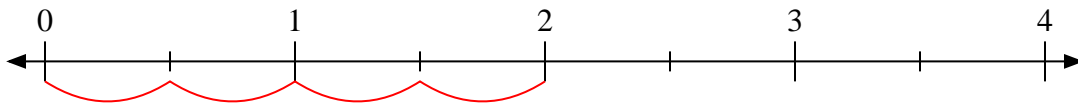
3) $4 : \frac{3}{8}$



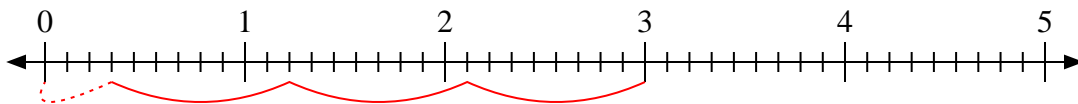
4) $6 : \frac{8}{9}$



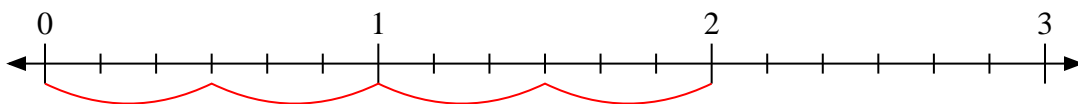
5) $2 : \frac{1}{2}$



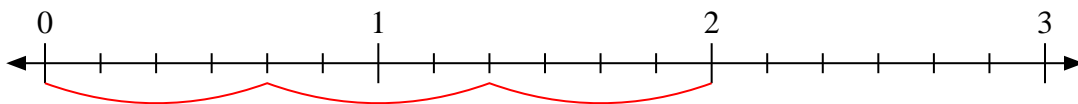
6) $3 : \frac{8}{9}$



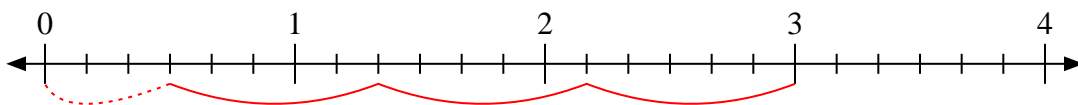
7) $2 : \frac{3}{6}$



8) $2 : \frac{4}{6}$



9) $3 : \frac{5}{6}$

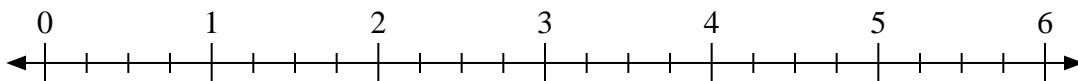
**Risposte**1. 32. 63. $10 \frac{2}{3}$ 4. $6 \frac{6}{8}$ 5. 46. $3 \frac{3}{8}$ 7. 48. 39. $3 \frac{3}{5}$



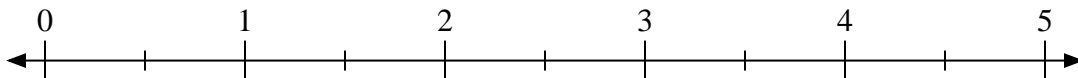
Usa la linea numerata per risolvere ogni problema.

Risposte

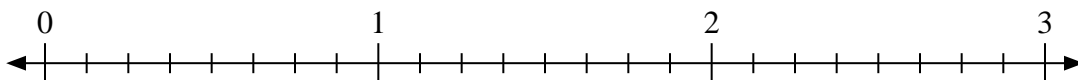
1) $6:\frac{3}{4}$



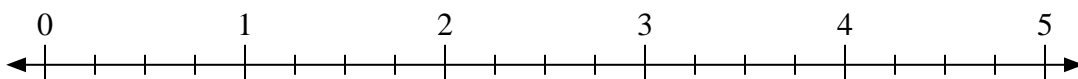
2) $5:\frac{1}{2}$



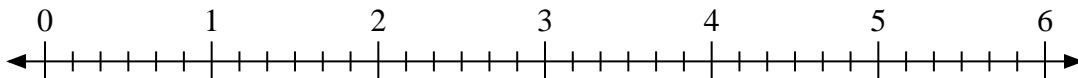
3) $3:\frac{6}{8}$



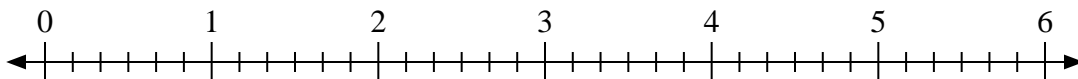
4) $3:\frac{3}{4}$



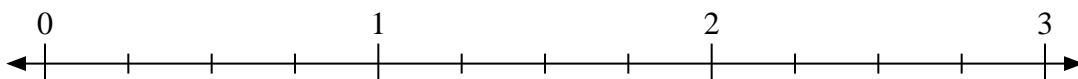
5) $6:\frac{3}{6}$




6) $5:\frac{1}{6}$



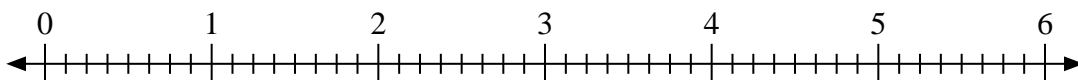
7) $3:\frac{1}{4}$



8) $3:\frac{2}{3}$



9) $3:\frac{3}{8}$



1. _____

2. _____

3. _____

4. _____

5. _____

6. _____

7. _____

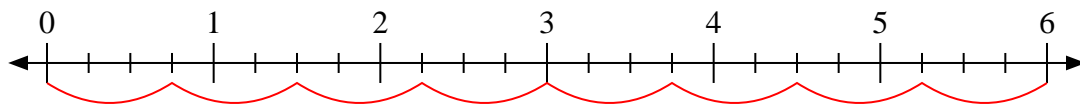
8. _____

9. _____

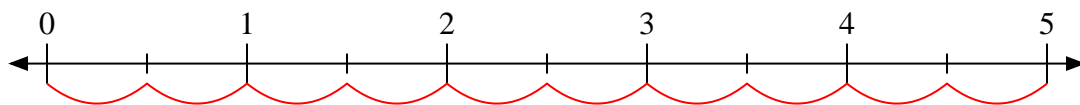


Usa la linea numerata per risolvere ogni problema.

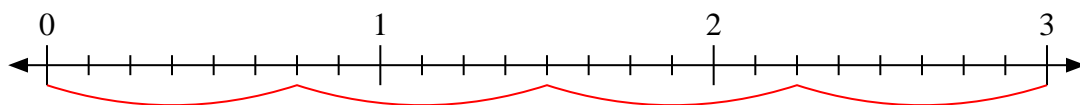
1) $6:\frac{3}{4}$



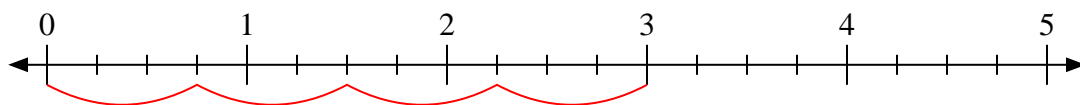
2) $5:\frac{1}{2}$



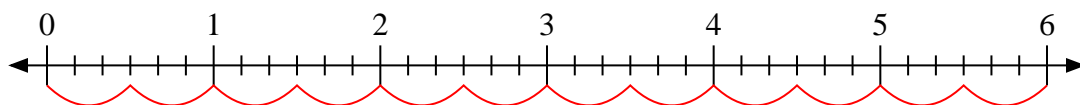
3) $3:\frac{6}{8}$



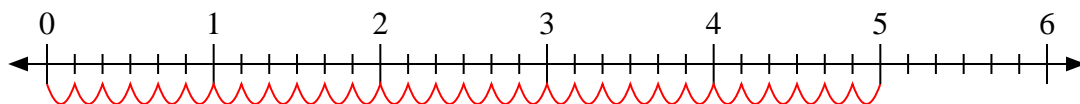
4) $3:\frac{3}{4}$



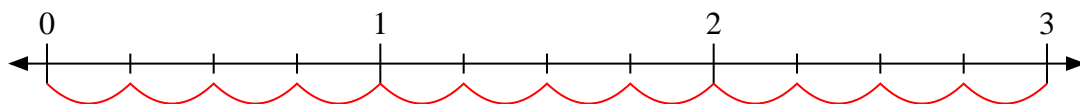
5) $6:\frac{3}{6}$



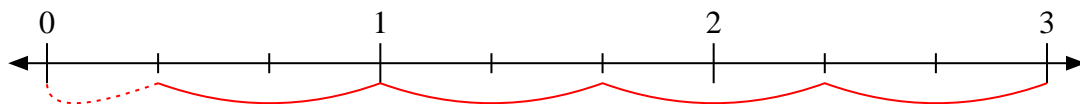
6) $5:\frac{1}{6}$



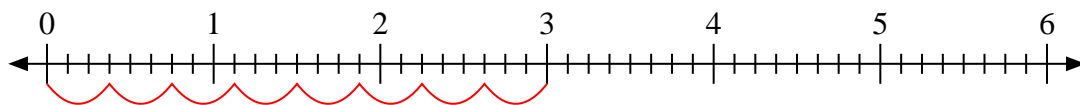
7) $3:\frac{1}{4}$



8) $3:\frac{2}{3}$



9) $3:\frac{3}{8}$

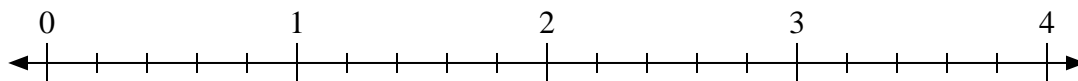
**Risposte**1. 82. 103. 44. 45. 126. 307. 128. $4\frac{1}{2}$ 9. 8



Usa la linea numerata per risolvere ogni problema.

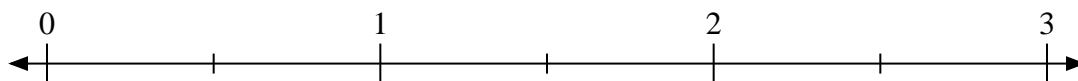
Risposte

1) $2:\frac{1}{5}$



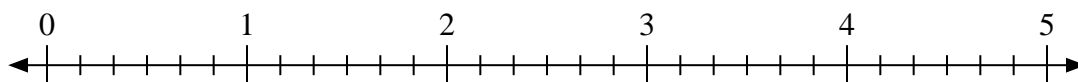
1. _____

2) $3:\frac{1}{2}$



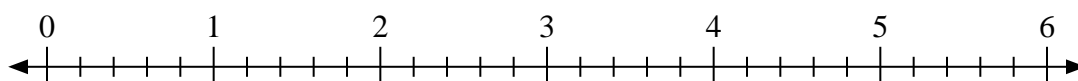
2. _____

3) $3:\frac{1}{6}$



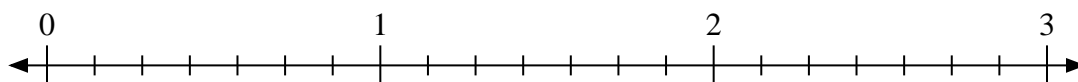
3. _____

4) $6:\frac{4}{5}$



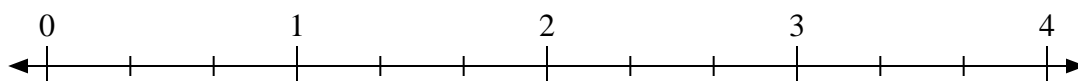
4. _____

5) $3:\frac{5}{7}$



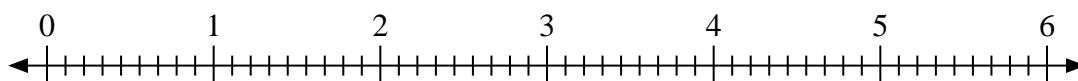
5. _____

6) $4:\frac{2}{3}$



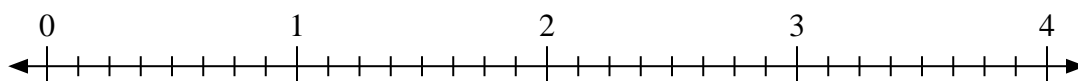
6. _____

7) $4:\frac{5}{9}$



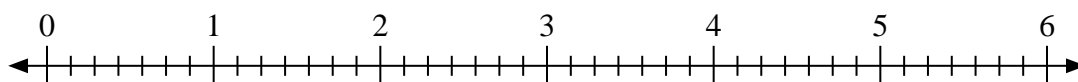
7. _____

8) $4:\frac{7}{8}$



8. _____

9) $5:\frac{3}{7}$

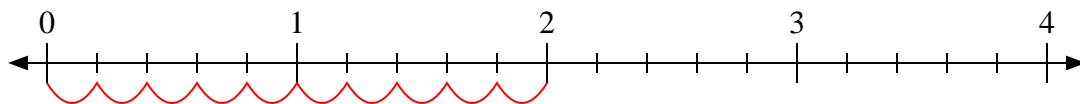


9. _____

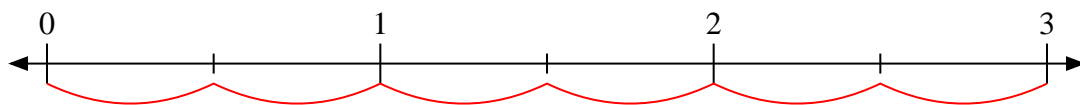


Usa la linea numerata per risolvere ogni problema.

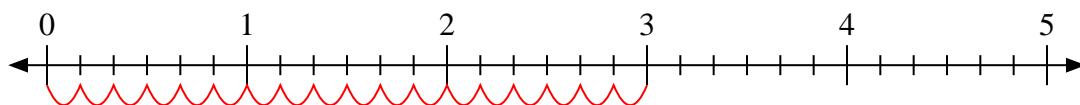
1) $2 : \frac{1}{5}$



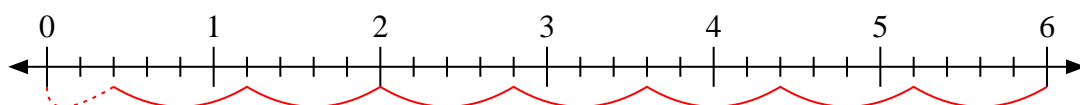
2) $3 : \frac{1}{2}$



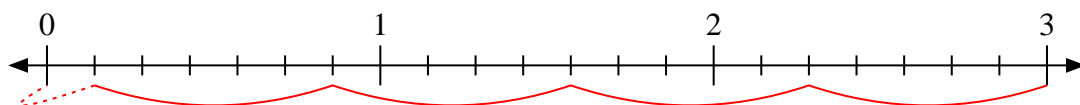
3) $3 : \frac{1}{6}$



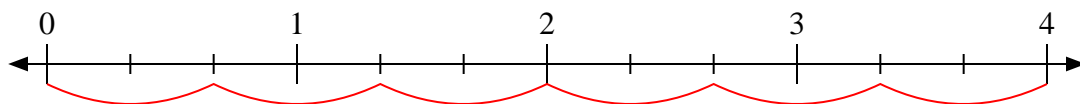
4) $6 : \frac{4}{5}$



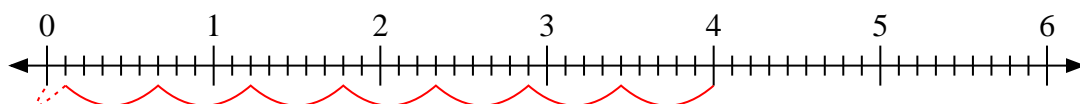
5) $3 : \frac{5}{7}$



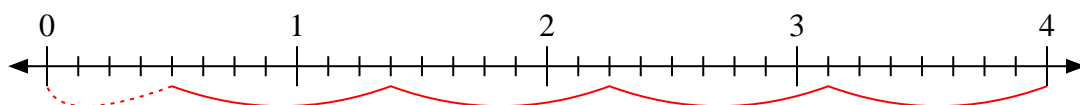
6) $4 : \frac{2}{3}$



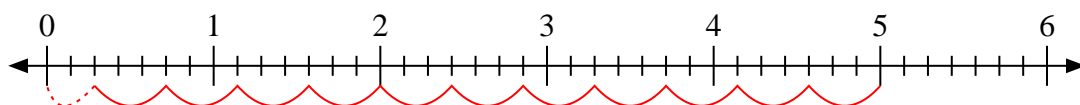
7) $4 : \frac{5}{9}$



8) $4 : \frac{7}{8}$



9) $5 : \frac{3}{7}$

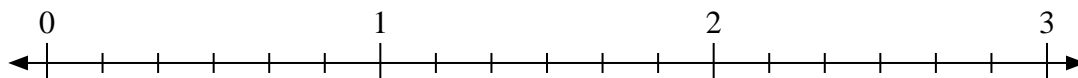
**Risposte**1. 102. 63. 184. $7 \frac{2}{4}$ 5. $4 \frac{1}{5}$ 6. 67. $7 \frac{1}{5}$ 8. $4 \frac{4}{7}$ 9. $11 \frac{2}{3}$



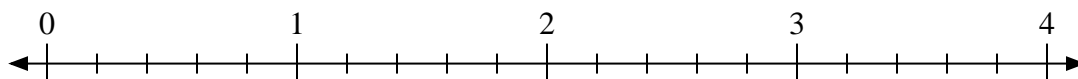
Usa la linea numerata per risolvere ogni problema.

Risposte

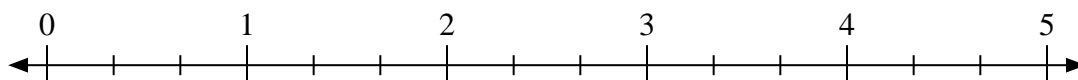
1) $3:\frac{3}{6}$



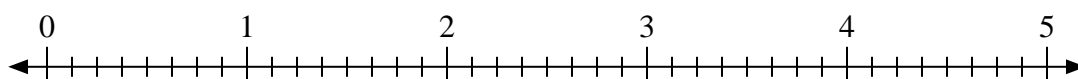
2) $2:\frac{4}{5}$



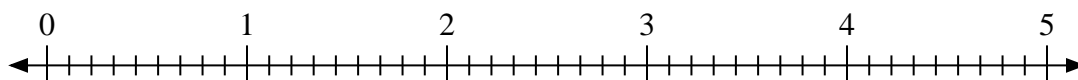
3) $5:\frac{1}{3}$



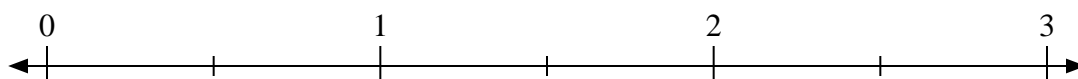
4) $3:\frac{5}{8}$



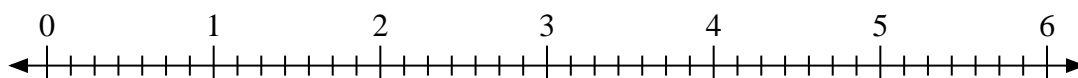
5) $3:\frac{7}{9}$



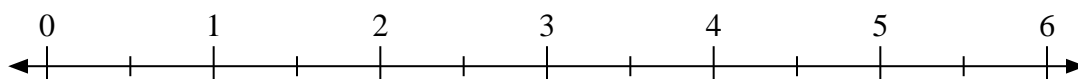
6) $3:\frac{1}{2}$



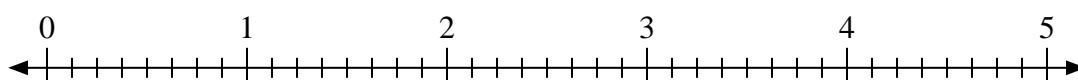
7) $5:\frac{3}{7}$



8) $5:\frac{1}{2}$



9) $4:\frac{4}{8}$



1. _____

2. _____

3. _____

4. _____

5. _____

6. _____

7. _____

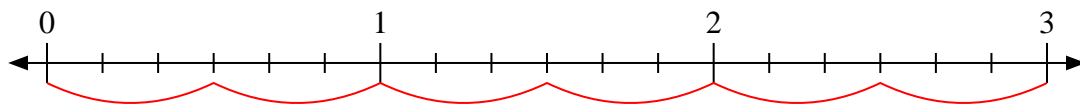
8. _____

9. _____

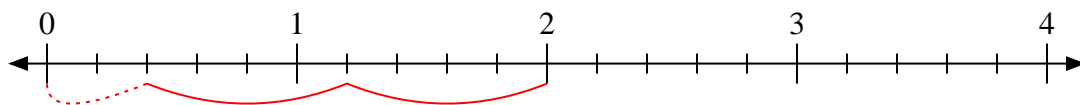


Usa la linea numerata per risolvere ogni problema.

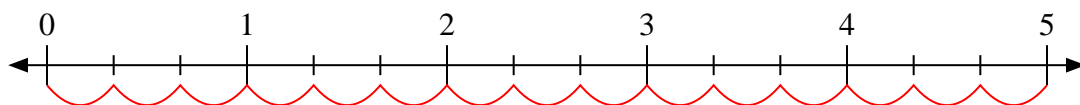
1) $3:\frac{3}{6}$



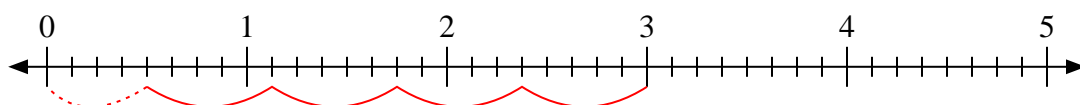
2) $2:\frac{4}{5}$



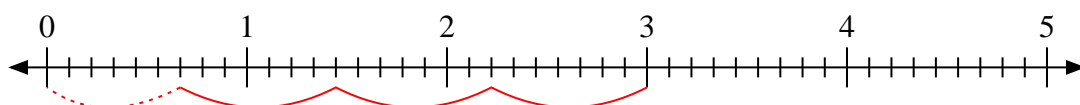
3) $5:\frac{1}{3}$



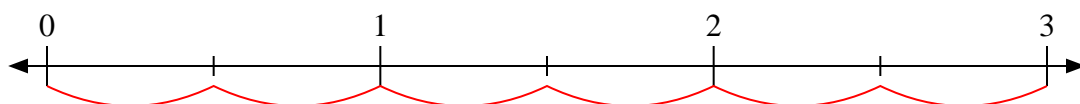
4) $3:\frac{5}{8}$



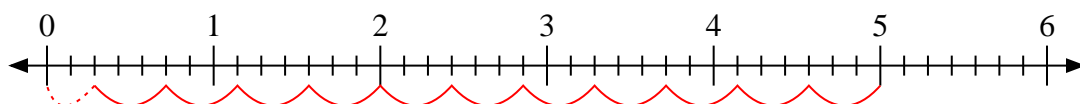
5) $3:\frac{7}{9}$



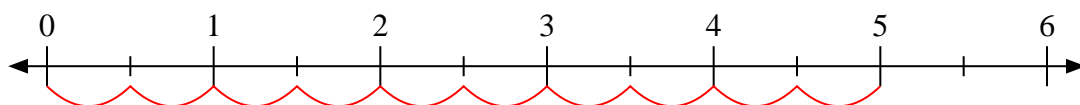
6) $3:\frac{1}{2}$



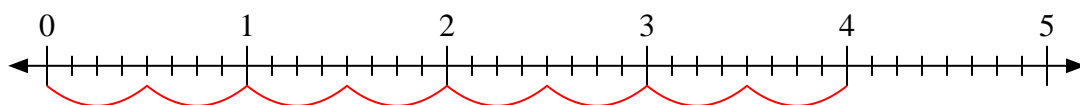
7) $5:\frac{3}{7}$



8) $5:\frac{1}{2}$



9) $4:\frac{4}{8}$

**Risposte**1. 62. $2\frac{2}{4}$ 3. 154. $4\frac{4}{5}$ 5. $3\frac{6}{7}$ 6. 67. $11\frac{2}{3}$ 8. 109. 8