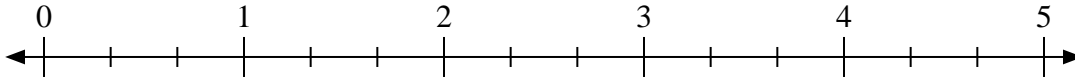





Usa la linea numerata per risolvere ogni problema.

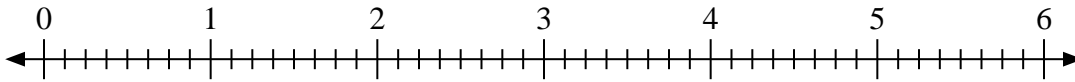
1)  $2:\frac{2}{3}$



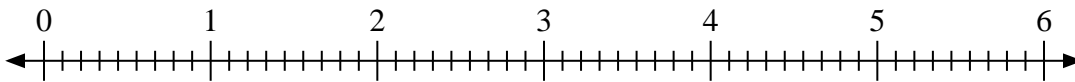
2)  $2:\frac{1}{3}$



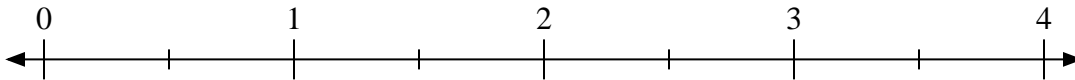
3)  $4:\frac{3}{8}$



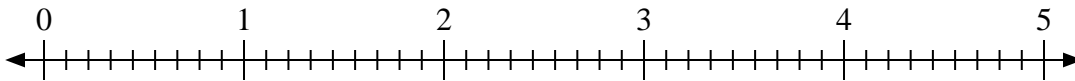
4)  $6:\frac{8}{9}$



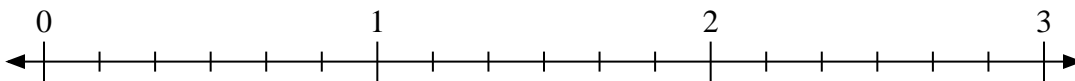
5)  $2:\frac{1}{2}$



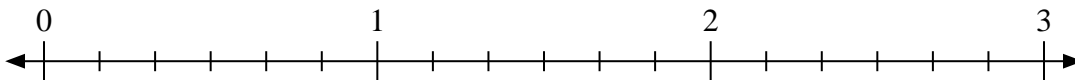
6)  $3:\frac{8}{9}$



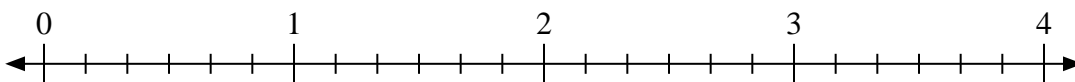
7)  $2:\frac{3}{6}$



8)  $2:\frac{4}{6}$



9)  $3:\frac{5}{6}$

**Risposte**

1. \_\_\_\_\_

2. \_\_\_\_\_

3. \_\_\_\_\_

4. \_\_\_\_\_

5. \_\_\_\_\_

6. \_\_\_\_\_

7. \_\_\_\_\_

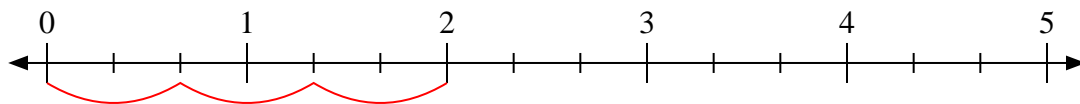
8. \_\_\_\_\_

9. \_\_\_\_\_

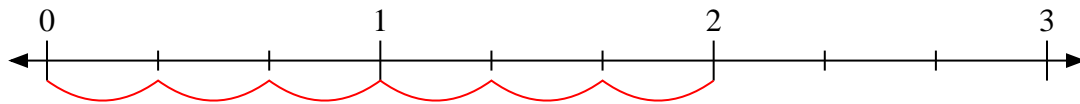


Usa la linea numerata per risolvere ogni problema.

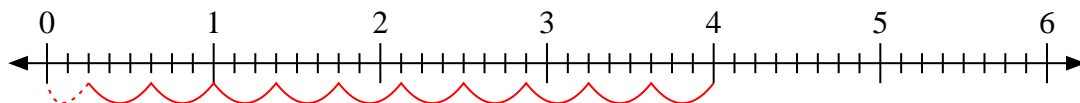
1)  $2 : \frac{2}{3}$



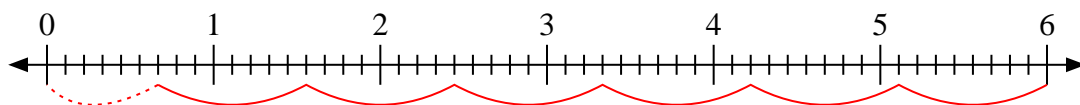
2)  $2 : \frac{1}{3}$



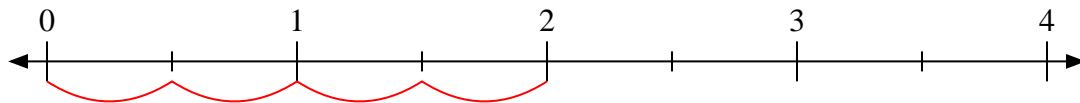
3)  $4 : \frac{3}{8}$



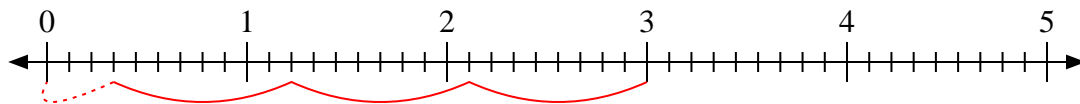
4)  $6 : \frac{8}{9}$



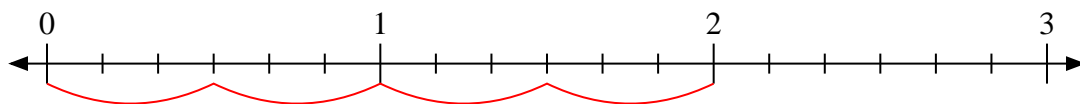
5)  $2 : \frac{1}{2}$



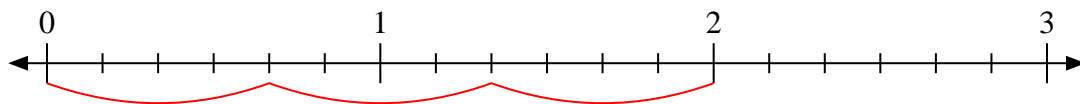
6)  $3 : \frac{8}{9}$



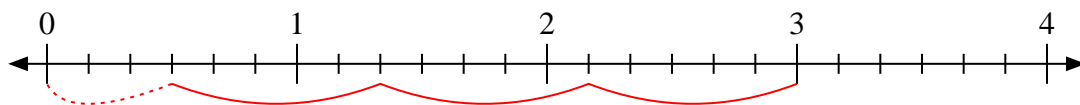
7)  $2 : \frac{3}{6}$



8)  $2 : \frac{4}{6}$



9)  $3 : \frac{5}{6}$

**Risposte**1. 32. 63.  $10 \frac{2}{3}$ 4.  $6 \frac{6}{8}$ 5. 46.  $3 \frac{3}{8}$ 7. 48. 39.  $3 \frac{3}{5}$