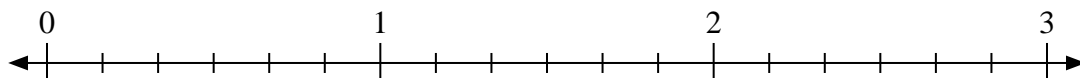




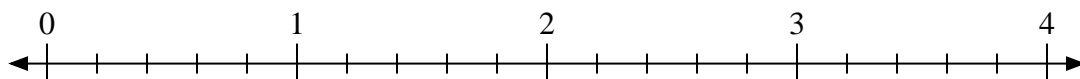
Usa la linea numerata per risolvere ogni problema.

**Risposte**

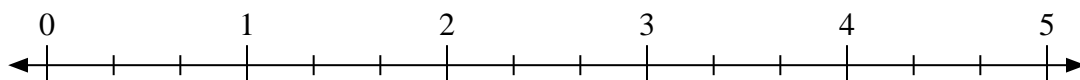
1)  $3:\frac{3}{6}$



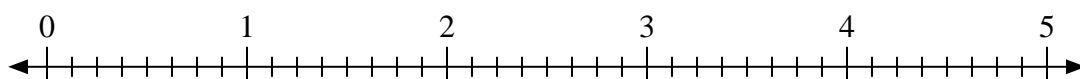
2)  $2:\frac{4}{5}$



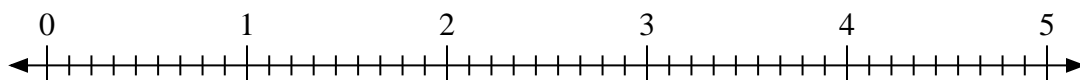
3)  $5:\frac{1}{3}$



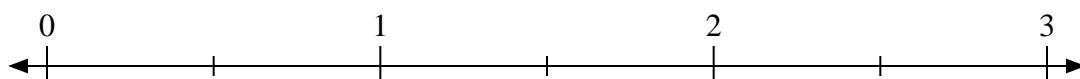
4)  $3:\frac{5}{8}$



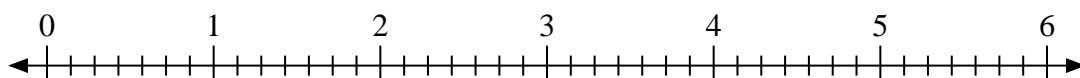
5)  $3:\frac{7}{9}$



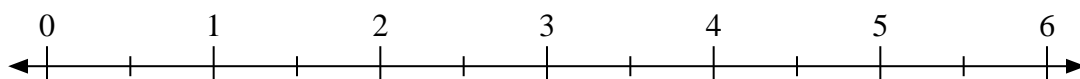
6)  $3:\frac{1}{2}$



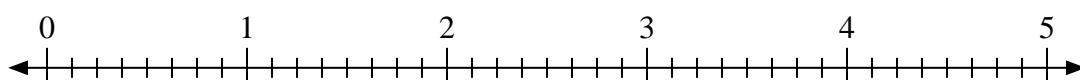
7)  $5:\frac{3}{7}$



8)  $5:\frac{1}{2}$



9)  $4:\frac{4}{8}$



1. \_\_\_\_\_

2. \_\_\_\_\_

3. \_\_\_\_\_

4. \_\_\_\_\_

5. \_\_\_\_\_

6. \_\_\_\_\_

7. \_\_\_\_\_

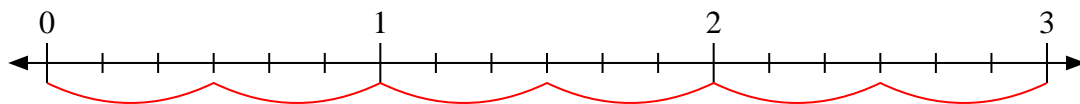
8. \_\_\_\_\_

9. \_\_\_\_\_

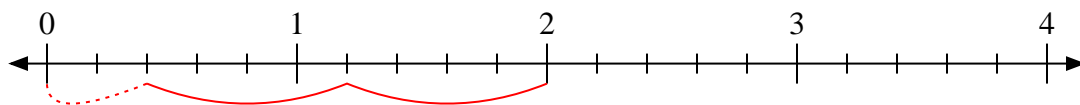


Usa la linea numerata per risolvere ogni problema.

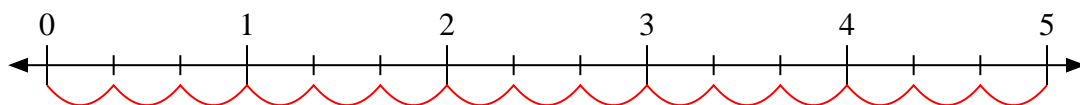
1)  $3:\frac{3}{6}$



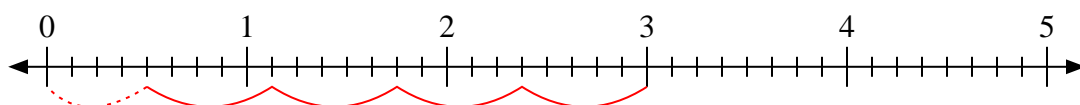
2)  $2:\frac{4}{5}$



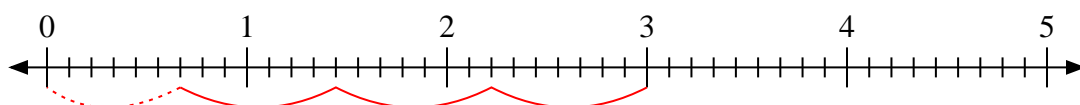
3)  $5:\frac{1}{3}$



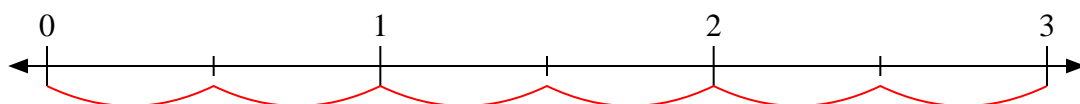
4)  $3:\frac{5}{8}$



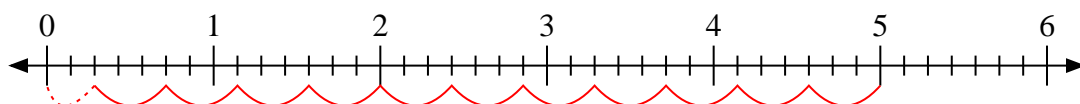
5)  $3:\frac{7}{9}$



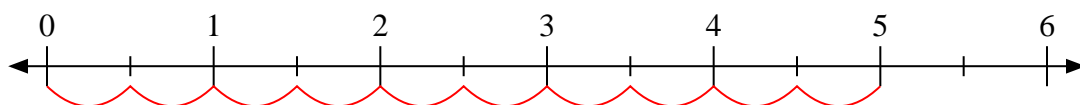
6)  $3:\frac{1}{2}$



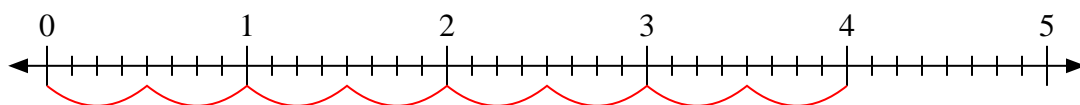
7)  $5:\frac{3}{7}$



8)  $5:\frac{1}{2}$



9)  $4:\frac{4}{8}$

**Risposte**1. 62.  $2\frac{2}{4}$ 3. 154.  $4\frac{4}{5}$ 5.  $3\frac{6}{7}$ 6. 67.  $11\frac{2}{3}$ 8. 109. 8