



Risolvi ogni problema, sciogliendo le frazioni. Il primo è un esempio.

RisposteEs) $4:\frac{1}{7} = ?$ Vale a dire: Quanti $\frac{1}{7}$ ci sono in 4 interi?

1 Intero	1 Intero	1 Intero	1 Intero
<input type="checkbox"/>	<input type="checkbox"/>	<input type="checkbox"/>	<input type="checkbox"/>
<input type="checkbox"/>	<input type="checkbox"/>	<input type="checkbox"/>	<input type="checkbox"/>
<input type="checkbox"/>	<input type="checkbox"/>	<input type="checkbox"/>	<input type="checkbox"/>
<input type="checkbox"/>	<input type="checkbox"/>	<input type="checkbox"/>	<input type="checkbox"/>
<input type="checkbox"/>	<input type="checkbox"/>	<input type="checkbox"/>	<input type="checkbox"/>
<input type="checkbox"/>	<input type="checkbox"/>	<input type="checkbox"/>	<input type="checkbox"/>
<input type="checkbox"/>	<input type="checkbox"/>	<input type="checkbox"/>	<input type="checkbox"/>

1) $2:\frac{1}{3} =$

1 Intero	1 Intero
<input type="checkbox"/>	<input type="checkbox"/>
<input type="checkbox"/>	<input type="checkbox"/>
<input type="checkbox"/>	<input type="checkbox"/>

2) $6:\frac{1}{7} =$

1 Intero	1 Intero	1 Intero	1 Intero	1 Intero	1 Intero
<input type="checkbox"/>	<input type="checkbox"/>	<input type="checkbox"/>	<input type="checkbox"/>	<input type="checkbox"/>	<input type="checkbox"/>
<input type="checkbox"/>	<input type="checkbox"/>	<input type="checkbox"/>	<input type="checkbox"/>	<input type="checkbox"/>	<input type="checkbox"/>
<input type="checkbox"/>	<input type="checkbox"/>	<input type="checkbox"/>	<input type="checkbox"/>	<input type="checkbox"/>	<input type="checkbox"/>

3) $6:\frac{1}{2} =$

1 Intero	1 Intero	1 Intero	1 Intero	1 Intero	1 Intero
<input type="checkbox"/>	<input type="checkbox"/>	<input type="checkbox"/>	<input type="checkbox"/>	<input type="checkbox"/>	<input type="checkbox"/>
<input type="checkbox"/>	<input type="checkbox"/>	<input type="checkbox"/>	<input type="checkbox"/>	<input type="checkbox"/>	<input type="checkbox"/>
<input type="checkbox"/>	<input type="checkbox"/>	<input type="checkbox"/>	<input type="checkbox"/>	<input type="checkbox"/>	<input type="checkbox"/>

4) $3:\frac{1}{3} =$

1 Intero	1 Intero	1 Intero
<input type="checkbox"/>	<input type="checkbox"/>	<input type="checkbox"/>
<input type="checkbox"/>	<input type="checkbox"/>	<input type="checkbox"/>
<input type="checkbox"/>	<input type="checkbox"/>	<input type="checkbox"/>

5) $4:\frac{1}{6} =$

1 Intero	1 Intero	1 Intero	1 Intero
<input type="checkbox"/>	<input type="checkbox"/>	<input type="checkbox"/>	<input type="checkbox"/>
<input type="checkbox"/>	<input type="checkbox"/>	<input type="checkbox"/>	<input type="checkbox"/>
<input type="checkbox"/>	<input type="checkbox"/>	<input type="checkbox"/>	<input type="checkbox"/>

6) $5:\frac{1}{4} =$

1 Intero	1 Intero	1 Intero	1 Intero	1 Intero
<input type="checkbox"/>	<input type="checkbox"/>	<input type="checkbox"/>	<input type="checkbox"/>	<input type="checkbox"/>
<input type="checkbox"/>	<input type="checkbox"/>	<input type="checkbox"/>	<input type="checkbox"/>	<input type="checkbox"/>
<input type="checkbox"/>	<input type="checkbox"/>	<input type="checkbox"/>	<input type="checkbox"/>	<input type="checkbox"/>

7) $5:\frac{1}{2} =$

1 Intero	1 Intero	1 Intero	1 Intero	1 Intero
<input type="checkbox"/>	<input type="checkbox"/>	<input type="checkbox"/>	<input type="checkbox"/>	<input type="checkbox"/>
<input type="checkbox"/>	<input type="checkbox"/>	<input type="checkbox"/>	<input type="checkbox"/>	<input type="checkbox"/>
<input type="checkbox"/>	<input type="checkbox"/>	<input type="checkbox"/>	<input type="checkbox"/>	<input type="checkbox"/>

8) $3:\frac{1}{7} =$

1 Intero	1 Intero	1 Intero
<input type="checkbox"/>	<input type="checkbox"/>	<input type="checkbox"/>
<input type="checkbox"/>	<input type="checkbox"/>	<input type="checkbox"/>
<input type="checkbox"/>	<input type="checkbox"/>	<input type="checkbox"/>

9) $5:\frac{1}{7} =$

1 Intero	1 Intero	1 Intero	1 Intero	1 Intero
<input type="checkbox"/>	<input type="checkbox"/>	<input type="checkbox"/>	<input type="checkbox"/>	<input type="checkbox"/>
<input type="checkbox"/>	<input type="checkbox"/>	<input type="checkbox"/>	<input type="checkbox"/>	<input type="checkbox"/>
<input type="checkbox"/>	<input type="checkbox"/>	<input type="checkbox"/>	<input type="checkbox"/>	<input type="checkbox"/>

Es. **28**

1. _____

2. _____

3. _____

4. _____

5. _____

6. _____



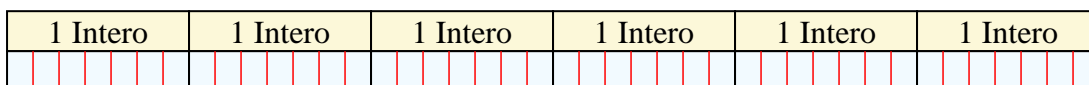
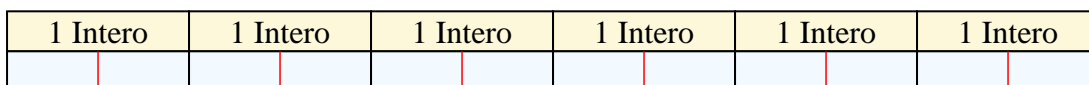
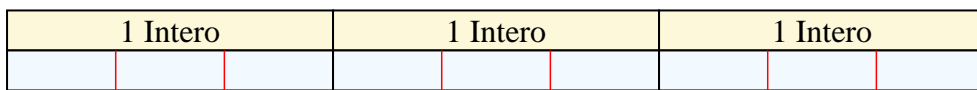

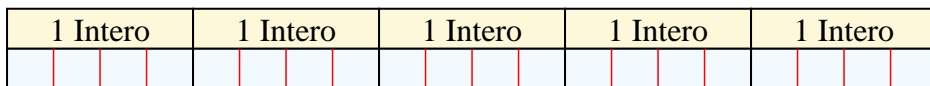
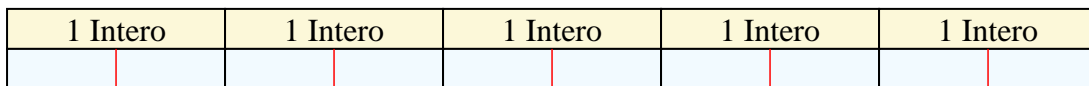
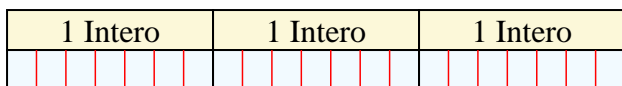
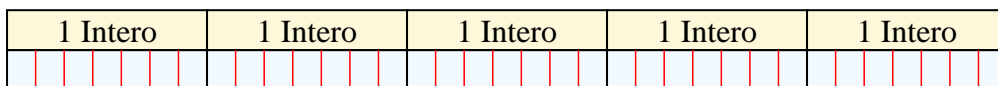
7. _____

8. _____

9. _____



Risolvi ogni problema, sciogliendo le frazioni. Il primo è un esempio.

RisposteEs) $4:\frac{1}{7} = ?$ Vale a dire: Quanti $\frac{1}{7}$ ci sono in 4 interi?1) $2:\frac{1}{3} =$ Vale a dire: Quanti $\frac{1}{3}$ ci sono in 2 interi?2) $6:\frac{1}{7} =$ Vale a dire: Quanti $\frac{1}{7}$ ci sono in 6 interi?3) $6:\frac{1}{2} =$ Vale a dire: Quanti $\frac{1}{2}$ ci sono in 6 interi?4) $3:\frac{1}{3} =$ Vale a dire: Quanti $\frac{1}{3}$ ci sono in 3 interi?5) $4:\frac{1}{6} =$ Vale a dire: Quanti $\frac{1}{6}$ ci sono in 4 interi?6) $5:\frac{1}{4} =$ Vale a dire: Quanti $\frac{1}{4}$ ci sono in 5 interi?7) $5:\frac{1}{2} =$ Vale a dire: Quanti $\frac{1}{2}$ ci sono in 5 interi?8) $3:\frac{1}{7} =$ Vale a dire: Quanti $\frac{1}{7}$ ci sono in 3 interi?9) $5:\frac{1}{7} =$ Vale a dire: Quanti $\frac{1}{7}$ ci sono in 5 interi?Es. 281. 62. 423. 124. 95. 246. 207. 108. 219. 35