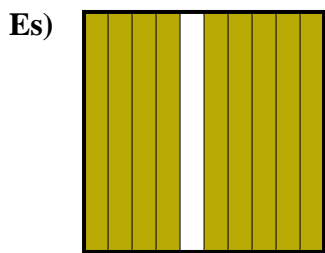
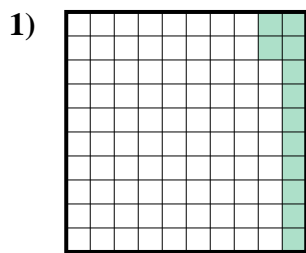




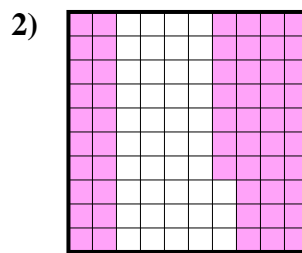
Determina il valore sotto forma di frazione, decimale e percentuale.



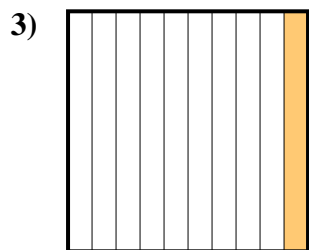
Frazione  $\frac{9}{10}$   
 Decimale 0,9  
 Percentuale 90



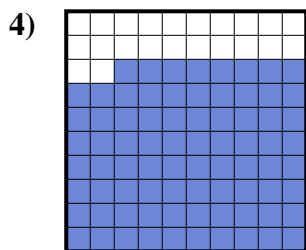
Frazione \_\_\_\_\_  
 Decimale \_\_\_\_\_  
 Percentuale \_\_\_\_\_



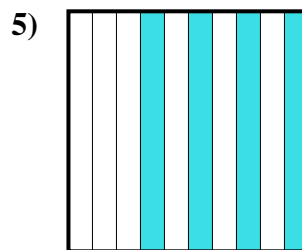
Frazione \_\_\_\_\_  
 Decimale \_\_\_\_\_  
 Percentuale \_\_\_\_\_



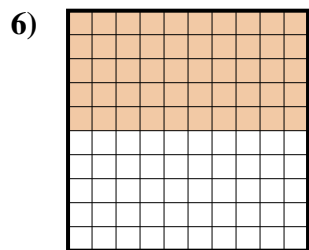
Frazione \_\_\_\_\_  
 Decimale \_\_\_\_\_  
 Percentuale \_\_\_\_\_



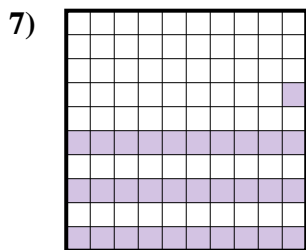
Frazione \_\_\_\_\_  
 Decimale \_\_\_\_\_  
 Percentuale \_\_\_\_\_



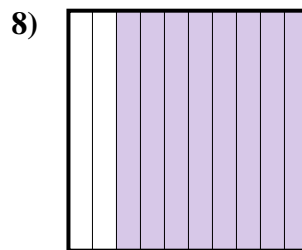
Frazione \_\_\_\_\_  
 Decimale \_\_\_\_\_  
 Percentuale \_\_\_\_\_



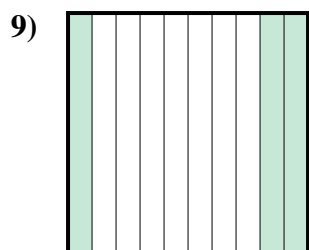
Frazione \_\_\_\_\_  
 Decimale \_\_\_\_\_  
 Percentuale \_\_\_\_\_



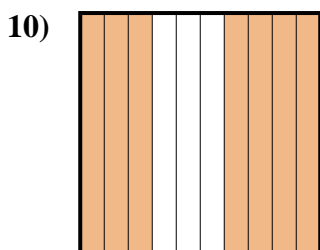
Frazione \_\_\_\_\_  
 Decimale \_\_\_\_\_  
 Percentuale \_\_\_\_\_



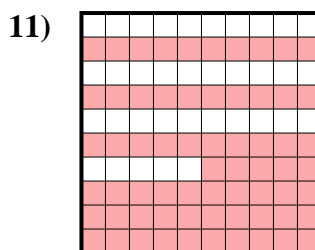
Frazione \_\_\_\_\_  
 Decimale \_\_\_\_\_  
 Percentuale \_\_\_\_\_



Frazione \_\_\_\_\_  
 Decimale \_\_\_\_\_  
 Percentuale \_\_\_\_\_



Frazione \_\_\_\_\_  
 Decimale \_\_\_\_\_  
 Percentuale \_\_\_\_\_



Frazione \_\_\_\_\_  
 Decimale \_\_\_\_\_  
 Percentuale \_\_\_\_\_

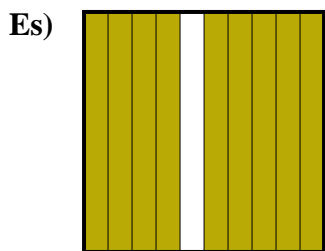
**Risposte**

Es.  $\frac{9}{10}$  0,9 90%

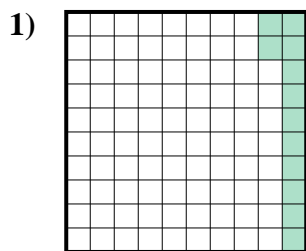
- 1. \_\_\_\_\_
- 2. \_\_\_\_\_
- 3. \_\_\_\_\_
- 4. \_\_\_\_\_
- 5. \_\_\_\_\_
- 6. \_\_\_\_\_
- 7. \_\_\_\_\_
- 8. \_\_\_\_\_
- 9. \_\_\_\_\_
- 10. \_\_\_\_\_
- 11. \_\_\_\_\_



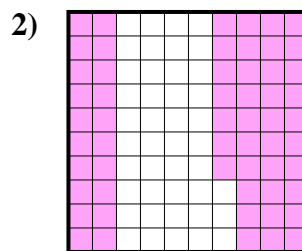
Determina il valore sotto forma di frazione, decimale e percentuale.



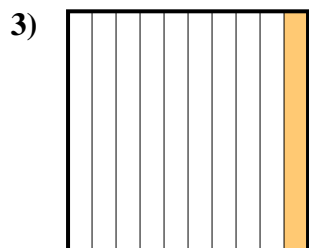
Frazione  $\frac{9}{10}$   
 Decimale  $0,9$   
 Percentuale  $90$



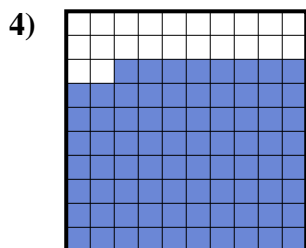
Frazione  $\frac{12}{100}$   
 Decimale  $0,12$   
 Percentuale  $12$



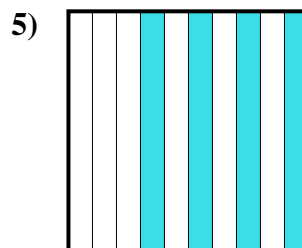
Frazione  $\frac{57}{100}$   
 Decimale  $0,57$   
 Percentuale  $57$



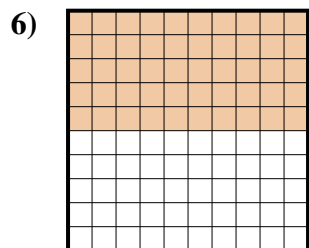
Frazione  $\frac{1}{10}$   
 Decimale  $0,1$   
 Percentuale  $10$



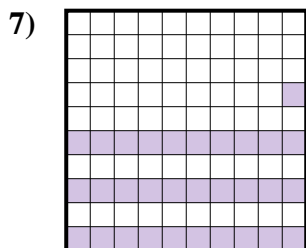
Frazione  $\frac{78}{100}$   
 Decimale  $0,78$   
 Percentuale  $78$



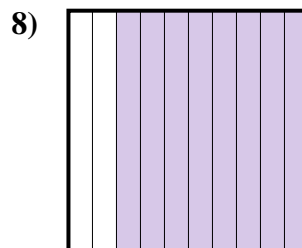
Frazione  $\frac{4}{10}$   
 Decimale  $0,4$   
 Percentuale  $40$



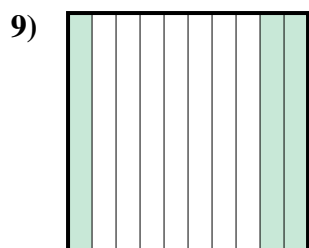
Frazione  $\frac{50}{100}$   
 Decimale  $0,50$   
 Percentuale  $50$



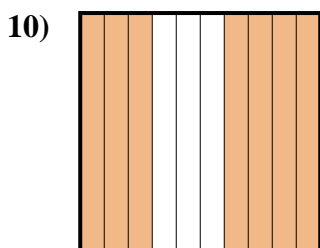
Frazione  $\frac{31}{100}$   
 Decimale  $0,31$   
 Percentuale  $31$



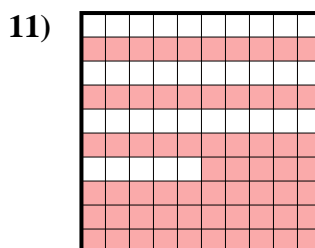
Frazione  $\frac{8}{10}$   
 Decimale  $0,8$   
 Percentuale  $80$



Frazione  $\frac{3}{10}$   
 Decimale  $0,3$   
 Percentuale  $30$



Frazione  $\frac{7}{10}$   
 Decimale  $0,7$   
 Percentuale  $70$



Frazione  $\frac{65}{100}$   
 Decimale  $0,65$   
 Percentuale  $65$

**Risposte**

- Es.  $\frac{9}{10}$  **0,9** **90%**  
 1.  $\frac{12}{100}$  **0,12** **12%**  
 2.  $\frac{57}{100}$  **0,57** **57%**  
 3.  $\frac{1}{10}$  **0,1** **10%**  
 4.  $\frac{78}{100}$  **0,78** **78%**  
 5.  $\frac{4}{10}$  **0,4** **40%**  
 6.  $\frac{50}{100}$  **0,50** **50%**  
 7.  $\frac{31}{100}$  **0,31** **31%**  
 8.  $\frac{8}{10}$  **0,8** **80%**  
 9.  $\frac{3}{10}$  **0,3** **30%**  
 10.  $\frac{7}{10}$  **0,7** **70%**  
 11.  $\frac{65}{100}$  **0,65** **65%**